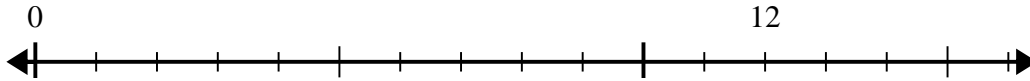


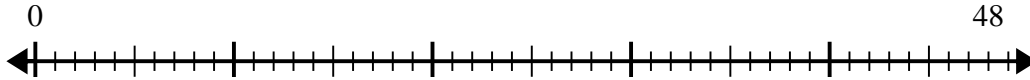


Use the number line to solve the division problem.

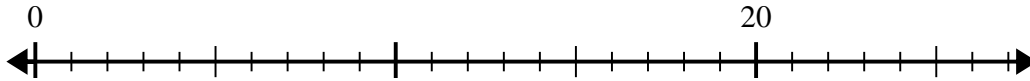
1) $12 \div 4 =$



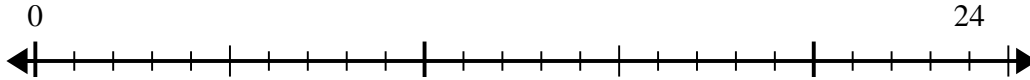
2) $48 \div 6 =$



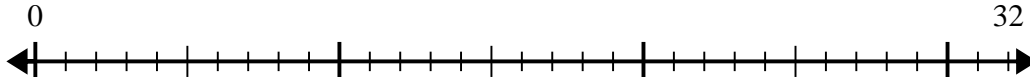
3) $20 \div 4 =$



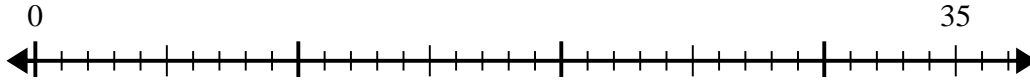
4) $24 \div 8 =$



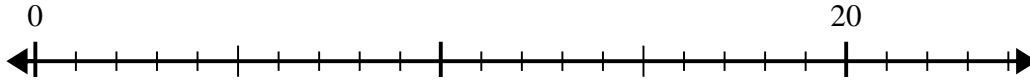
5) $32 \div 4 =$



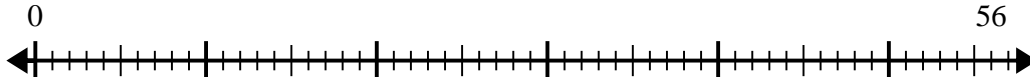
6) $35 \div 7 =$



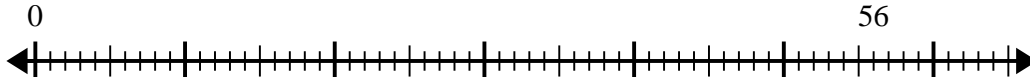
7) $20 \div 5 =$



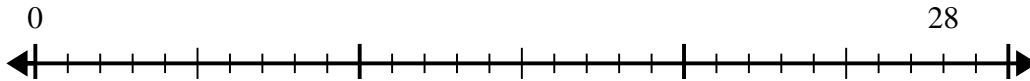
8) $56 \div 7 =$



9) $56 \div 8 =$



10) $28 \div 4 =$



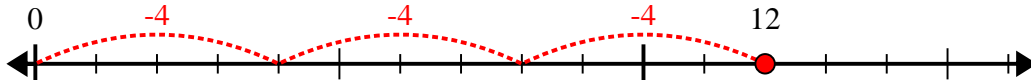
Answers

1. _____
2. _____
3. _____
4. _____
5. _____
6. _____
7. _____
8. _____
9. _____
10. _____

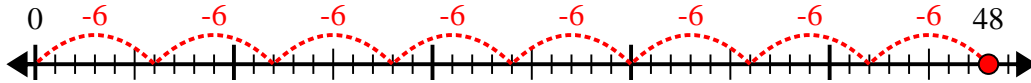


Use the number line to solve the division problem.

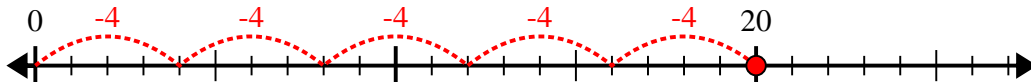
1) $12 \div 4 =$



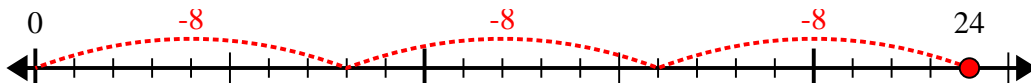
2) $48 \div 6 =$



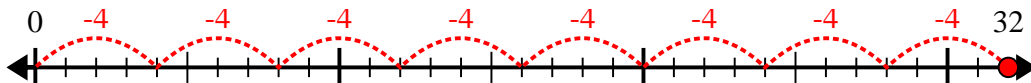
3) $20 \div 4 =$



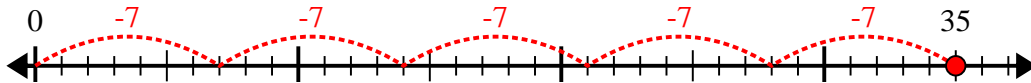
4) $24 \div 8 =$



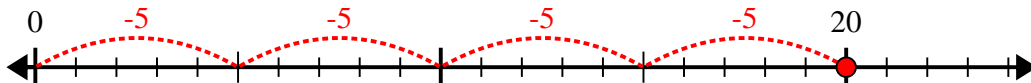
5) $32 \div 4 =$



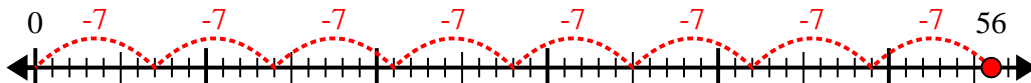
6) $35 \div 7 =$



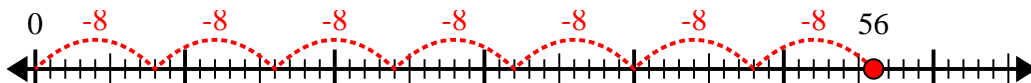
7) $20 \div 5 =$



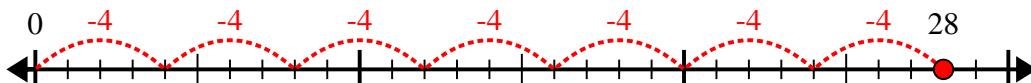
8) $56 \div 7 =$



9) $56 \div 8 =$



10) $28 \div 4 =$



Answers

1. 3

2. 8

3. 5

4. 3

5. 8

6. 5

7. 4

8. 8

9. 7

10. 7