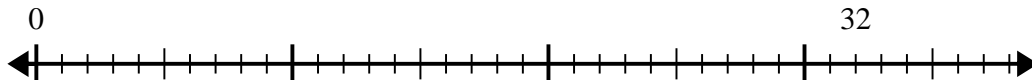


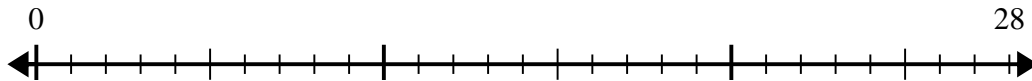


Use the number line to solve the division problem.

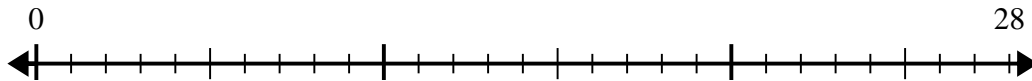
1) $32 \div 8 =$



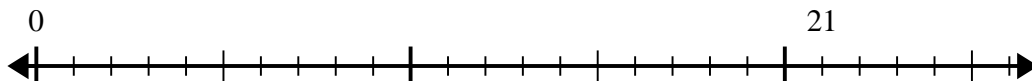
2) $28 \div 4 =$



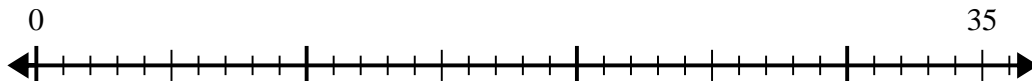
3) $28 \div 7 =$



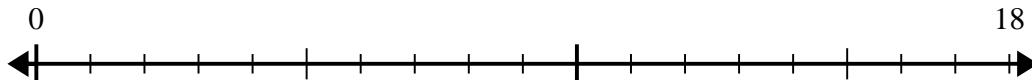
4) $21 \div 7 =$



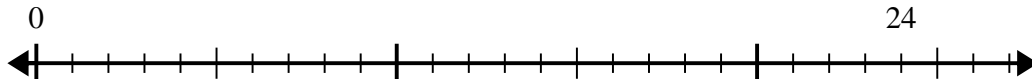
5) $35 \div 7 =$



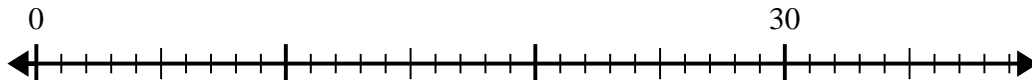
6) $18 \div 6 =$



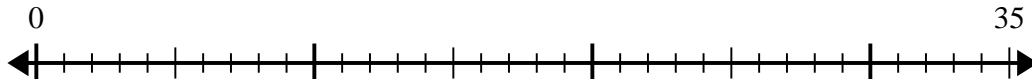
7) $24 \div 4 =$



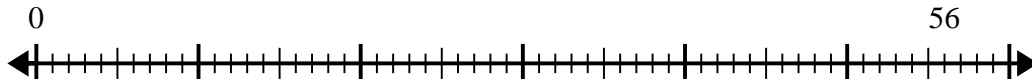
8) $30 \div 6 =$



9) $35 \div 5 =$



10) $56 \div 7 =$



Answers

1. _____

2. _____

3. _____

4. _____

5. _____

6. _____

7. _____

8. _____

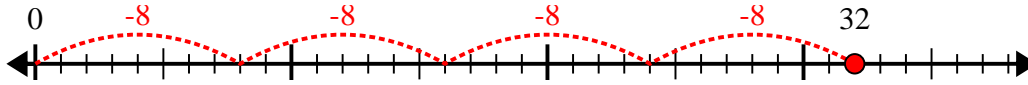
9. _____

10. _____

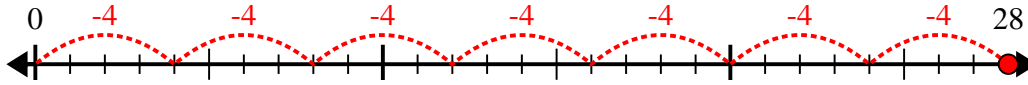


Use the number line to solve the division problem.

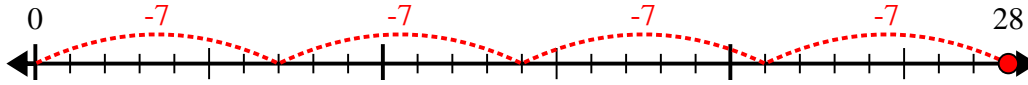
1) $32 \div 8 =$



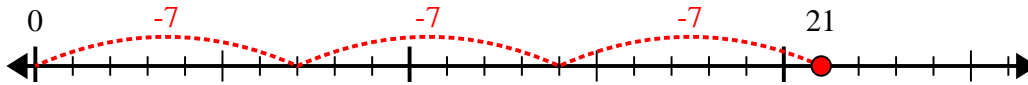
2) $28 \div 4 =$



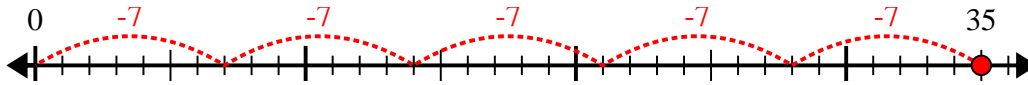
3) $28 \div 7 =$



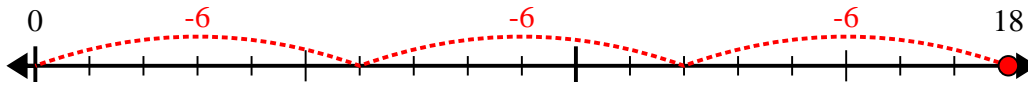
4) $21 \div 7 =$



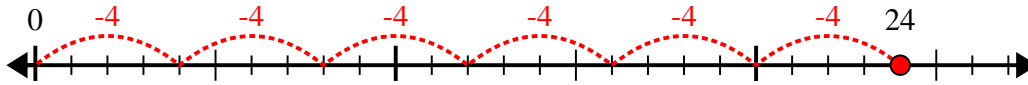
5) $35 \div 7 =$



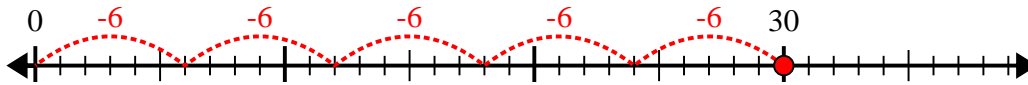
6) $18 \div 6 =$



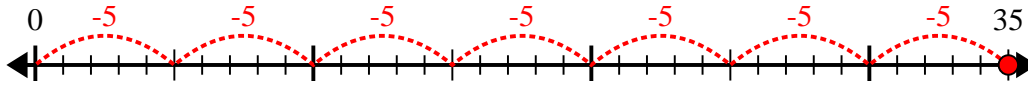
7) $24 \div 4 =$



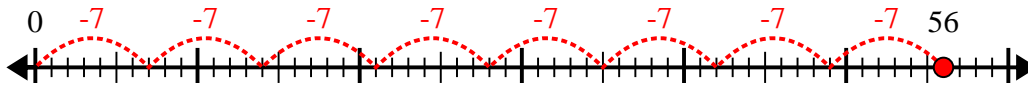
8) $30 \div 6 =$



9) $35 \div 5 =$



10) $56 \div 7 =$



Answers

1. 4

2. 7

3. 4

4. 3

5. 5

6. 3

7. 6

8. 5

9. 7

10. 8