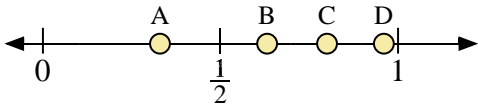
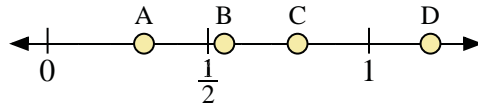




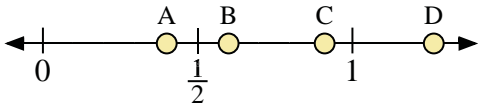
Use the number lines to answer the questions.



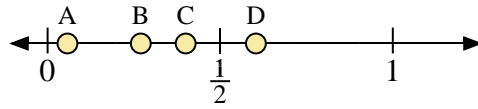
- 1) Which letter best represents the location of 0.8?
- 2) Which letter best represents the location of 0.96?



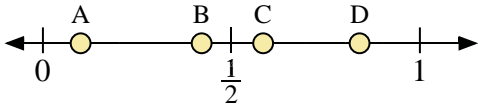
- 3) Which letter best represents the location of 0.3?
- 4) Which letter best represents the location of 0.55?



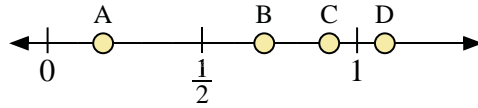
- 5) Which letter best represents the location of 0.6?
- 6) Which letter best represents the location of 0.40?



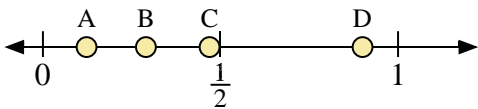
- 7) Which letter best represents the location of 0.4?
- 8) Which letter best represents the location of 0.27?



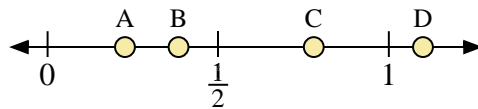
- 9) Which letter best represents the location of 0.10?
- 10) Which letter best represents the location of 0.84?



- 11) Which letter best represents the location of 0.7?
- 12) Which letter best represents the location of 0.91?



- 13) Which letter best represents the location of 0.90?
- 14) Which letter best represents the location of 0.29?



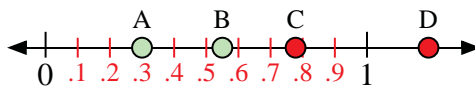
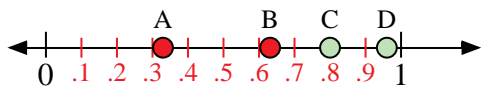
- 15) Which letter best represents the location of 1.10?
- 16) Which letter best represents the location of 0.78?

Answers

1. _____
2. _____
3. _____
4. _____
5. _____
6. _____
7. _____
8. _____
9. _____
10. _____
11. _____
12. _____
13. _____
14. _____
15. _____
16. _____

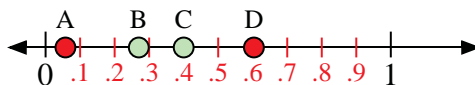
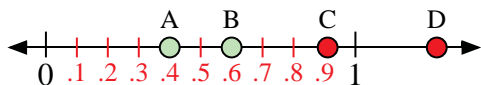


Use the number lines to answer the questions.



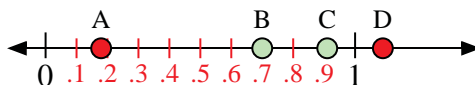
- 1) Which letter best represents the location of 0.8?
- 2) Which letter best represents the location of 0.96?

- 3) Which letter best represents the location of 0.3?
- 4) Which letter best represents the location of 0.55?



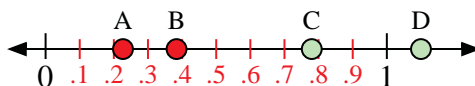
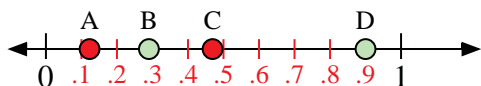
- 5) Which letter best represents the location of 0.6?
- 6) Which letter best represents the location of 0.40?

- 7) Which letter best represents the location of 0.4?
- 8) Which letter best represents the location of 0.27?



- 9) Which letter best represents the location of 0.10?
- 10) Which letter best represents the location of 0.84?

- 11) Which letter best represents the location of 0.7?
- 12) Which letter best represents the location of 0.91?



- 13) Which letter best represents the location of 0.90?
- 14) Which letter best represents the location of 0.29?

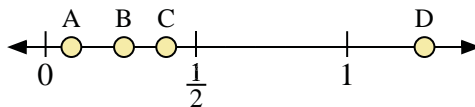
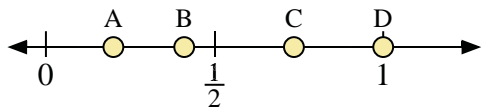
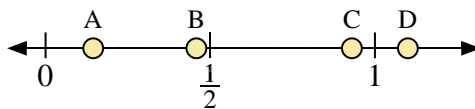
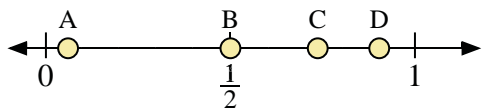
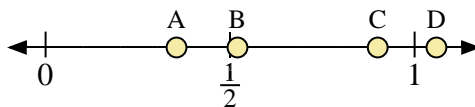
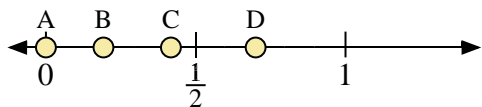
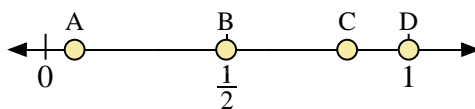
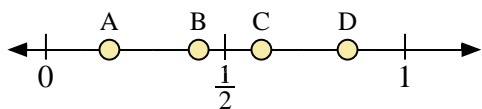
- 15) Which letter best represents the location of 1.10?
- 16) Which letter best represents the location of 0.78?

Answers

1. C
2. D
3. A
4. B
5. B
6. A
7. C
8. B
9. A
10. D
11. B
12. C
13. D
14. B
15. D
16. C



Use the number lines to answer the questions.



Answers

1. _____
2. _____
3. _____
4. _____
5. _____
6. _____
7. _____
8. _____
9. _____
10. _____
11. _____
12. _____
13. _____
14. _____
15. _____
16. _____

- 1) Which letter best represents the location of 0.6?
- 2) Which letter best represents the location of 0.84?

- 3) Which letter best represents the location of 1.00?
- 4) Which letter best represents the location of 0.08?

- 5) Which letter best represents the location of 0.0?
- 6) Which letter best represents the location of 0.70?

- 7) Which letter best represents the location of 0.90?
- 8) Which letter best represents the location of 0.52?

- 9) Which letter best represents the location of 0.5?
- 10) Which letter best represents the location of 0.06?

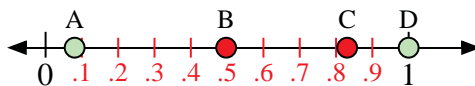
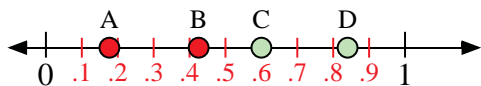
- 11) Which letter best represents the location of 1.10?
- 12) Which letter best represents the location of 0.93?

- 13) Which letter best represents the location of 0.2?
- 14) Which letter best represents the location of 0.41?

- 15) Which letter best represents the location of 0.4?
- 16) Which letter best represents the location of 0.26?

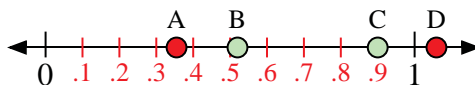
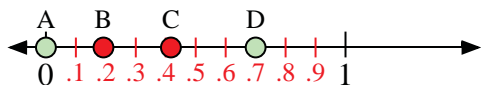


Use the number lines to answer the questions.



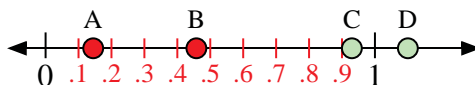
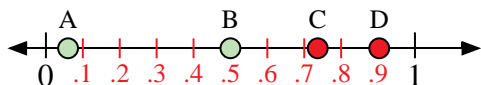
- 1) Which letter best represents the location of 0.6?
- 2) Which letter best represents the location of 0.84?

- 3) Which letter best represents the location of 1.00?
- 4) Which letter best represents the location of 0.08?



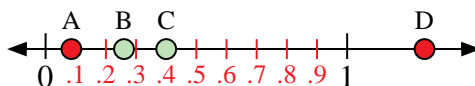
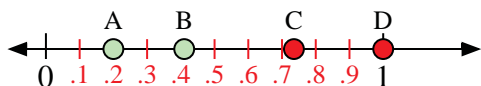
- 5) Which letter best represents the location of 0.0?
- 6) Which letter best represents the location of 0.70?

- 7) Which letter best represents the location of 0.90?
- 8) Which letter best represents the location of 0.52?



- 9) Which letter best represents the location of 0.5?
- 10) Which letter best represents the location of 0.06?

- 11) Which letter best represents the location of 1.10?
- 12) Which letter best represents the location of 0.93?



- 13) Which letter best represents the location of 0.2?
- 14) Which letter best represents the location of 0.41?

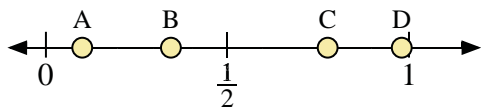
- 15) Which letter best represents the location of 0.4?
- 16) Which letter best represents the location of 0.26?

Answers

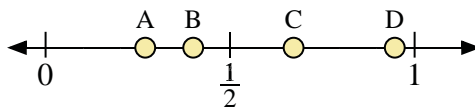
1. C
2. D
3. D
4. A
5. A
6. D
7. C
8. B
9. B
10. A
11. D
12. C
13. A
14. B
15. C
16. B



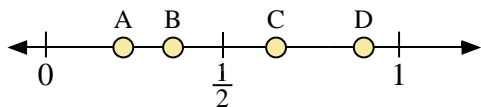
Use the number lines to answer the questions.



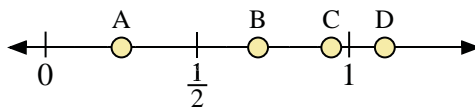
- 1) Which letter best represents the location of 0.10?
- 2) Which letter best represents the location of 0.98?



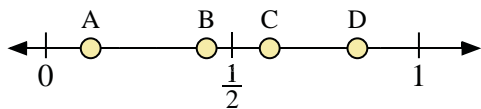
- 3) Which letter best represents the location of 0.40?
- 4) Which letter best represents the location of 0.27?



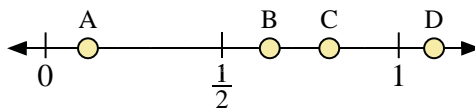
- 5) Which letter best represents the location of 0.90?
- 6) Which letter best represents the location of 0.36?



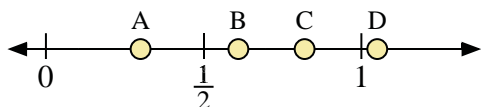
- 7) Which letter best represents the location of 0.7?
- 8) Which letter best represents the location of 0.25?



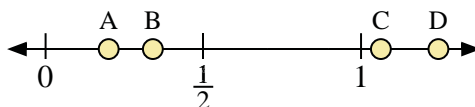
- 9) Which letter best represents the location of 0.60?
- 10) Which letter best represents the location of 0.12?



- 11) Which letter best represents the location of 1.1?
- 12) Which letter best represents the location of 0.12?



- 13) Which letter best represents the location of 0.30?
- 14) Which letter best represents the location of 0.82?



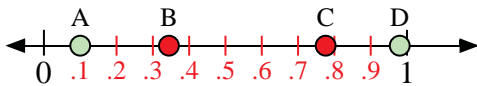
- 15) Which letter best represents the location of 0.2?
- 16) Which letter best represents the location of 0.34?

Answers

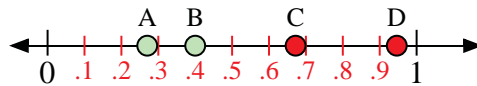
1. _____
2. _____
3. _____
4. _____
5. _____
6. _____
7. _____
8. _____
9. _____
10. _____
11. _____
12. _____
13. _____
14. _____
15. _____
16. _____



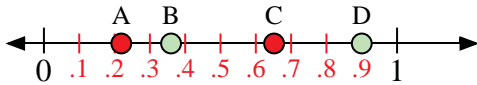
Use the number lines to answer the questions.



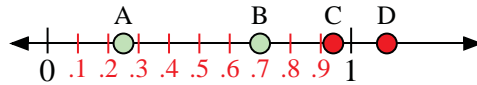
- 1) Which letter best represents the location of 0.10?
- 2) Which letter best represents the location of 0.98?



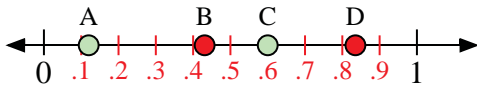
- 3) Which letter best represents the location of 0.40?
- 4) Which letter best represents the location of 0.27?



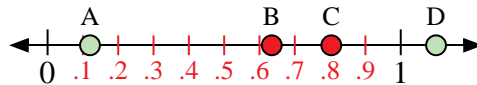
- 5) Which letter best represents the location of 0.90?
- 6) Which letter best represents the location of 0.36?



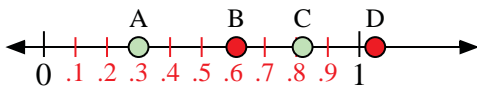
- 7) Which letter best represents the location of 0.7?
- 8) Which letter best represents the location of 0.25?




- 9) Which letter best represents the location of 0.60?
- 10) Which letter best represents the location of 0.12?



- 11) Which letter best represents the location of 1.1?
- 12) Which letter best represents the location of 0.12?



- 13) Which letter best represents the location of 0.30?
- 14) Which letter best represents the location of 0.82?



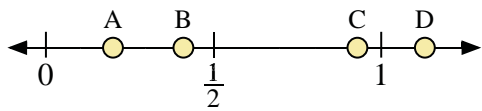
- 15) Which letter best represents the location of 0.2?
- 16) Which letter best represents the location of 0.34?

Answers

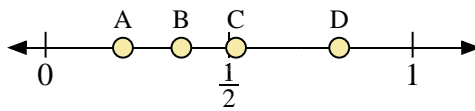
1. A
2. D
3. B
4. A
5. D
6. B
7. B
8. A
9. C
10. A
11. D
12. A
13. A
14. C
15. A
16. B



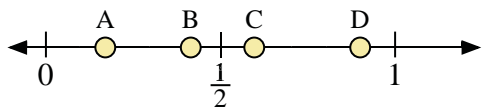
Use the number lines to answer the questions.



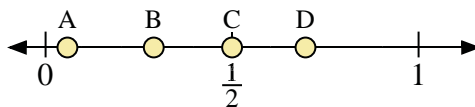
- 1) Which letter best represents the location of 0.2?
- 2) Which letter best represents the location of 0.41?



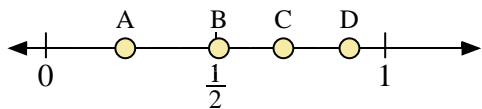
- 3) Which letter best represents the location of 0.80?
- 4) Which letter best represents the location of 0.37?



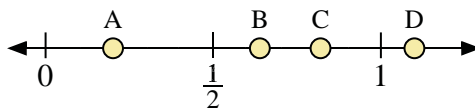
- 5) Which letter best represents the location of 0.90?
- 6) Which letter best represents the location of 0.17?



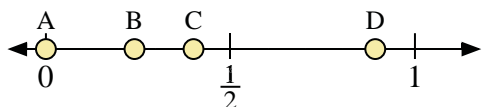
- 7) Which letter best represents the location of 0.5?
- 8) Which letter best represents the location of 0.29?



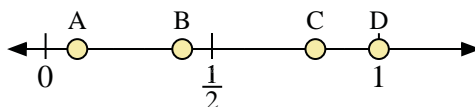
- 9) Which letter best represents the location of 0.7?
- 10) Which letter best represents the location of 0.51?



- 11) Which letter best represents the location of 1.1?
- 12) Which letter best represents the location of 0.82?



- 13) Which letter best represents the location of 0.4?
- 14) Which letter best represents the location of 0.24?



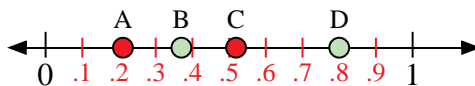
- 15) Which letter best represents the location of 1.0?
- 16) Which letter best represents the location of 0.41?

Answers

1. _____
2. _____
3. _____
4. _____
5. _____
6. _____
7. _____
8. _____
9. _____
10. _____
11. _____
12. _____
13. _____
14. _____
15. _____
16. _____

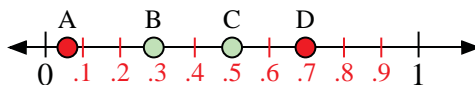
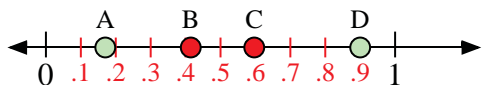


Use the number lines to answer the questions.



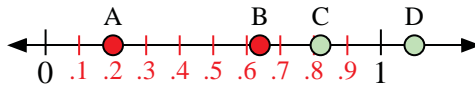
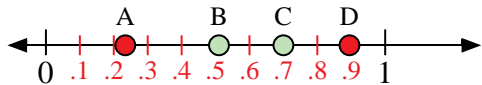
- 1) Which letter best represents the location of 0.2?
- 2) Which letter best represents the location of 0.41?

- 3) Which letter best represents the location of 0.80?
- 4) Which letter best represents the location of 0.37?



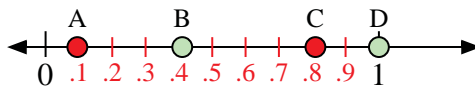
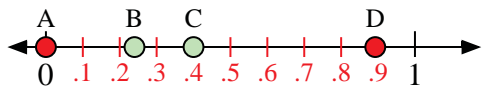
- 5) Which letter best represents the location of 0.90?
- 6) Which letter best represents the location of 0.17?

- 7) Which letter best represents the location of 0.5?
- 8) Which letter best represents the location of 0.29?



- 9) Which letter best represents the location of 0.7?
- 10) Which letter best represents the location of 0.51?

- 11) Which letter best represents the location of 1.1?
- 12) Which letter best represents the location of 0.82?



- 13) Which letter best represents the location of 0.4?
- 14) Which letter best represents the location of 0.24?

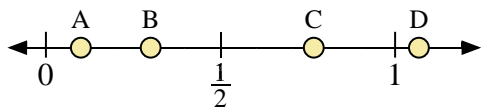
- 15) Which letter best represents the location of 1.0?
- 16) Which letter best represents the location of 0.41?

Answers

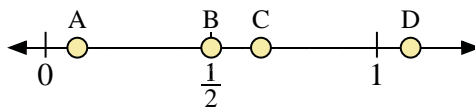
1. A
2. B
3. D
4. B
5. D
6. A
7. C
8. B
9. C
10. B
11. D
12. C
13. C
14. B
15. D
16. B



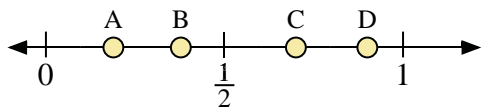
Use the number lines to answer the questions.



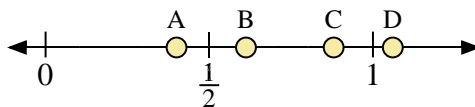
- 1) Which letter best represents the location of 0.3?
- 2) Which letter best represents the location of 0.10?



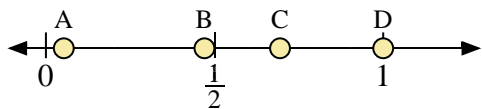
- 3) Which letter best represents the location of 0.50?
- 4) Which letter best represents the location of 0.65?



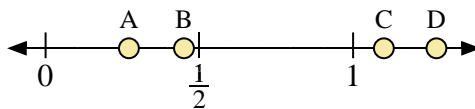
- 5) Which letter best represents the location of 0.7?
- 6) Which letter best represents the location of 0.90?



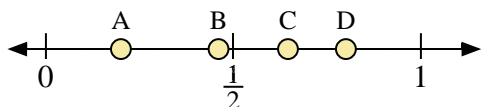
- 7) Which letter best represents the location of 0.4?
- 8) Which letter best represents the location of 0.88?



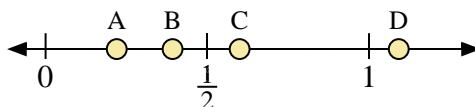
- 9) Which letter best represents the location of 1.0?
- 10) Which letter best represents the location of 0.47?



- 11) Which letter best represents the location of 1.1?
- 12) Which letter best represents the location of 0.45?



- 13) Which letter best represents the location of 0.20?
- 14) Which letter best represents the location of 0.80?



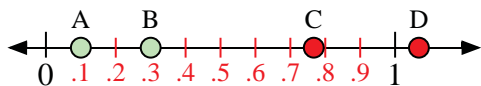
- 15) Which letter best represents the location of 0.60?
- 16) Which letter best represents the location of 0.22?

Answers

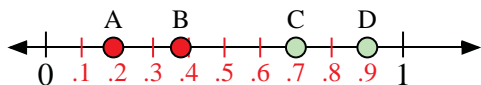
1. _____
2. _____
3. _____
4. _____
5. _____
6. _____
7. _____
8. _____
9. _____
10. _____
11. _____
12. _____
13. _____
14. _____
15. _____
16. _____



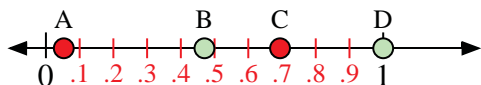
Use the number lines to answer the questions.



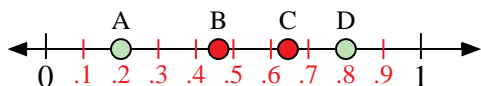
- 1) Which letter best represents the location of 0.3?
- 2) Which letter best represents the location of 0.10?



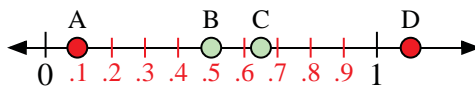
- 5) Which letter best represents the location of 0.7?
- 6) Which letter best represents the location of 0.90?



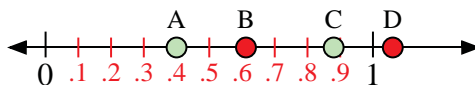
- 9) Which letter best represents the location of 1.0?
- 10) Which letter best represents the location of 0.47?



- 13) Which letter best represents the location of 0.20?
- 14) Which letter best represents the location of 0.80?



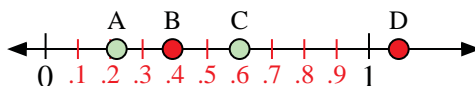
- 3) Which letter best represents the location of 0.50?
- 4) Which letter best represents the location of 0.65?



- 7) Which letter best represents the location of 0.4?
- 8) Which letter best represents the location of 0.88?



- 11) Which letter best represents the location of 1.1?
- 12) Which letter best represents the location of 0.45?



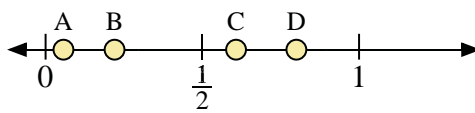
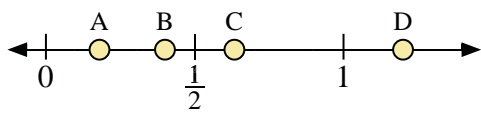
- 15) Which letter best represents the location of 0.60?
- 16) Which letter best represents the location of 0.22?

Answers

1. B
2. A
3. B
4. C
5. C
6. D
7. A
8. C
9. D
10. B
11. C
12. B
13. A
14. D
15. C
16. A

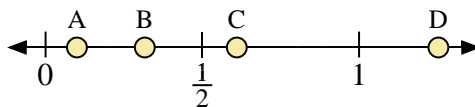
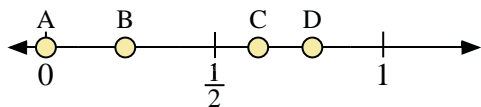


Use the number lines to answer the questions.



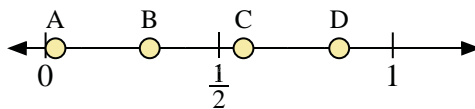
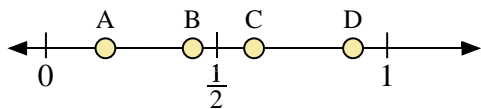
- 1) Which letter best represents the location of 0.40?
- 2) Which letter best represents the location of 0.18?

- 3) Which letter best represents the location of 0.80?
- 4) Which letter best represents the location of 0.22?



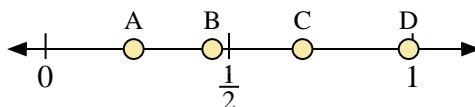
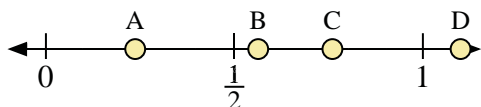
- 5) Which letter best represents the location of 0.00?
- 6) Which letter best represents the location of 0.79?

- 7) Which letter best represents the location of 0.1?
- 8) Which letter best represents the location of 0.61?



- 9) Which letter best represents the location of 0.9?
- 10) Which letter best represents the location of 0.61?

- 11) Which letter best represents the location of 0.30?
- 12) Which letter best represents the location of 0.57?



- 13) Which letter best represents the location of 1.10?
- 14) Which letter best represents the location of 0.76?

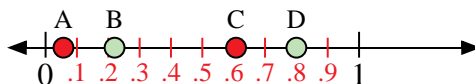
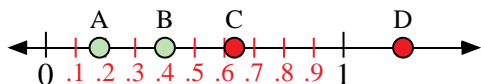
- 15) Which letter best represents the location of 0.70?
- 16) Which letter best represents the location of 0.24?

Answers

1. _____
2. _____
3. _____
4. _____
5. _____
6. _____
7. _____
8. _____
9. _____
10. _____
11. _____
12. _____
13. _____
14. _____
15. _____
16. _____

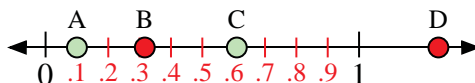
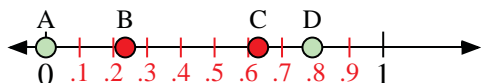


Use the number lines to answer the questions.



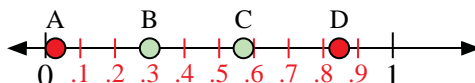
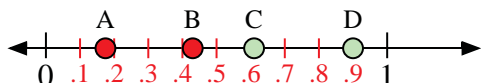
- 1) Which letter best represents the location of 0.40?
- 2) Which letter best represents the location of 0.18?

- 3) Which letter best represents the location of 0.80?
- 4) Which letter best represents the location of 0.22?



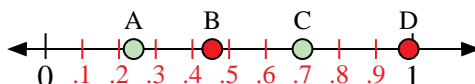
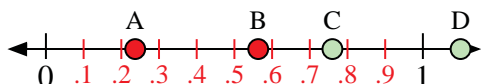
- 5) Which letter best represents the location of 0.00?
- 6) Which letter best represents the location of 0.79?

- 7) Which letter best represents the location of 0.1?
- 8) Which letter best represents the location of 0.61?



- 9) Which letter best represents the location of 0.9?
- 10) Which letter best represents the location of 0.61?

- 11) Which letter best represents the location of 0.30?
- 12) Which letter best represents the location of 0.57?



- 13) Which letter best represents the location of 1.10?
- 14) Which letter best represents the location of 0.76?

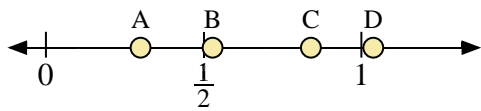
- 15) Which letter best represents the location of 0.70?
- 16) Which letter best represents the location of 0.24?

Answers

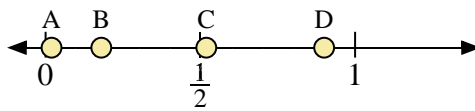
1. B
2. A
3. D
4. B
5. A
6. D
7. A
8. C
9. D
10. C
11. B
12. C
13. D
14. C
15. C
16. A



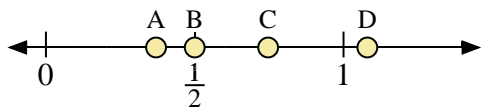
Use the number lines to answer the questions.



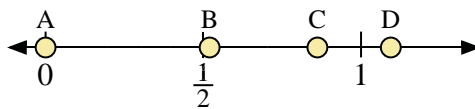
- 1) Which letter best represents the location of 0.3?
- 2) Which letter best represents the location of 0.84?



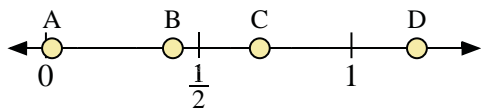
- 3) Which letter best represents the location of 0.9?
- 4) Which letter best represents the location of 0.18?



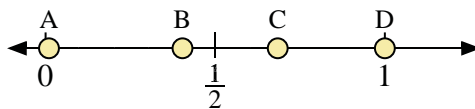
- 5) Which letter best represents the location of 0.50?
- 6) Which letter best represents the location of 0.37?



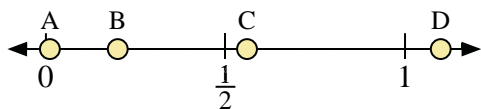
- 7) Which letter best represents the location of 0.0?
- 8) Which letter best represents the location of 0.52?



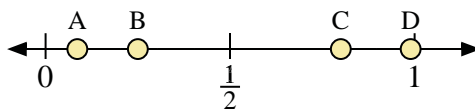
- 9) Which letter best represents the location of 0.7?
- 10) Which letter best represents the location of 0.02?



- 11) Which letter best represents the location of 1.00?
- 12) Which letter best represents the location of 0.01?



- 13) Which letter best represents the location of 0.2?
- 14) Which letter best represents the location of 0.56?



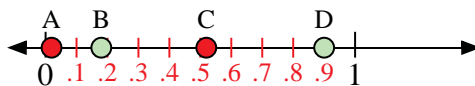
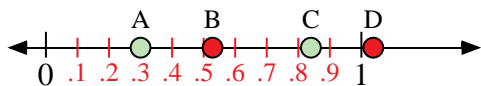
- 15) Which letter best represents the location of 0.8?
- 16) Which letter best represents the location of 0.25?

Answers

1. _____
2. _____
3. _____
4. _____
5. _____
6. _____
7. _____
8. _____
9. _____
10. _____
11. _____
12. _____
13. _____
14. _____
15. _____
16. _____

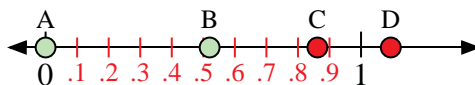
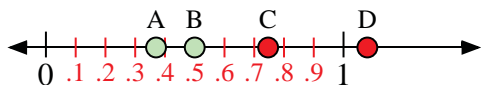


Use the number lines to answer the questions.



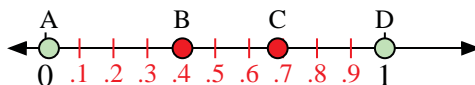
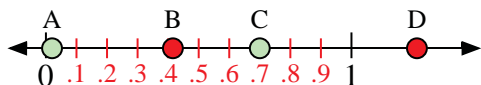
- 1) Which letter best represents the location of 0.3?
- 2) Which letter best represents the location of 0.84?

- 3) Which letter best represents the location of 0.9?
- 4) Which letter best represents the location of 0.18?



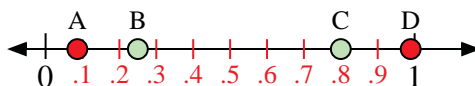
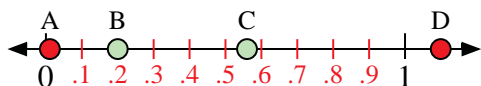
- 5) Which letter best represents the location of 0.50?
- 6) Which letter best represents the location of 0.37?

- 7) Which letter best represents the location of 0.0?
- 8) Which letter best represents the location of 0.52?



- 9) Which letter best represents the location of 0.7?
- 10) Which letter best represents the location of 0.02?

- 11) Which letter best represents the location of 1.00?
- 12) Which letter best represents the location of 0.01?



- 13) Which letter best represents the location of 0.2?
- 14) Which letter best represents the location of 0.56?

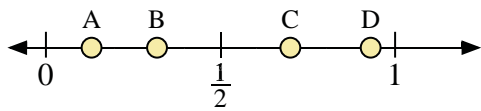
- 15) Which letter best represents the location of 0.8?
- 16) Which letter best represents the location of 0.25?

Answers

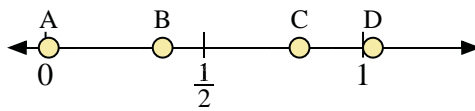
1. A
2. C
3. D
4. B
5. B
6. A
7. A
8. B
9. C
10. A
11. D
12. A
13. B
14. C
15. C
16. B



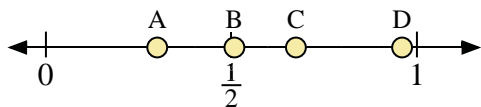
Use the number lines to answer the questions.



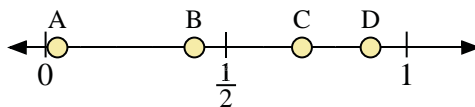
- 1) Which letter best represents the location of 0.70?
- 2) Which letter best represents the location of 0.93?



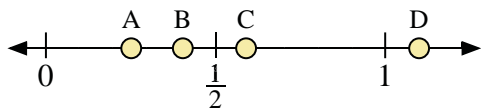
- 3) Which letter best represents the location of 0.80?
- 4) Which letter best represents the location of 0.01?



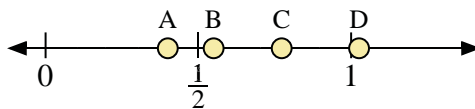
- 5) Which letter best represents the location of 0.30?
- 6) Which letter best represents the location of 0.96?



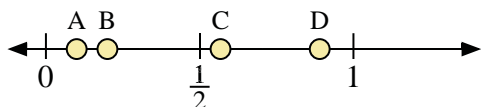
- 7) Which letter best represents the location of 0.9?
- 8) Which letter best represents the location of 0.71?



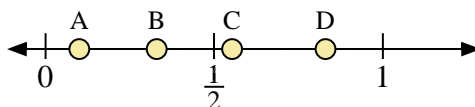
- 9) Which letter best represents the location of 1.10?
- 10) Which letter best represents the location of 0.59?



- 11) Which letter best represents the location of 0.4?
- 12) Which letter best represents the location of 0.55?



- 13) Which letter best represents the location of 0.20?
- 14) Which letter best represents the location of 0.10?



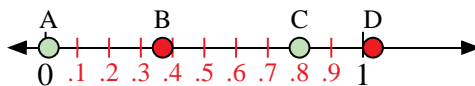
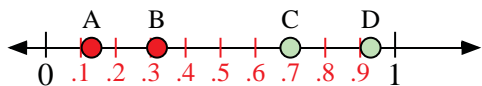
- 15) Which letter best represents the location of 0.1?
- 16) Which letter best represents the location of 0.83?

Answers

1. _____
2. _____
3. _____
4. _____
5. _____
6. _____
7. _____
8. _____
9. _____
10. _____
11. _____
12. _____
13. _____
14. _____
15. _____
16. _____

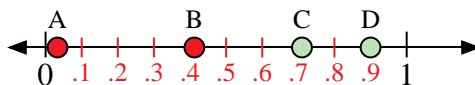
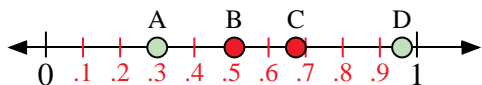


Use the number lines to answer the questions.



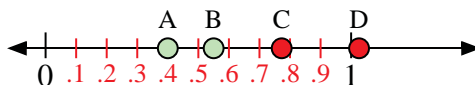
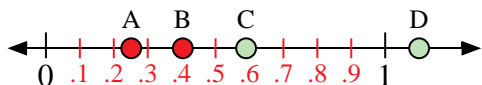
- 1) Which letter best represents the location of 0.70?
- 2) Which letter best represents the location of 0.93?

- 3) Which letter best represents the location of 0.80?
- 4) Which letter best represents the location of 0.01?



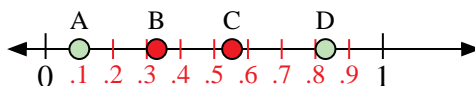
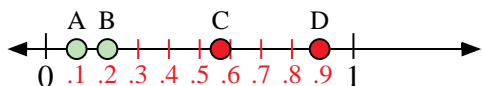
- 5) Which letter best represents the location of 0.30?
- 6) Which letter best represents the location of 0.96?

- 7) Which letter best represents the location of 0.9?
- 8) Which letter best represents the location of 0.71?



- 9) Which letter best represents the location of 1.10?
- 10) Which letter best represents the location of 0.59?

- 11) Which letter best represents the location of 0.4?
- 12) Which letter best represents the location of 0.55?



- 13) Which letter best represents the location of 0.20?
- 14) Which letter best represents the location of 0.10?

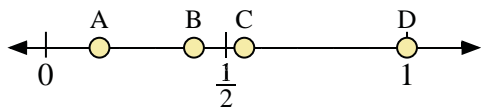
- 15) Which letter best represents the location of 0.1?
- 16) Which letter best represents the location of 0.83?

Answers

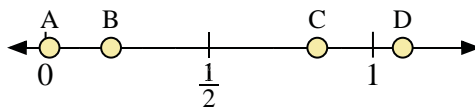
1. C
2. D
3. C
4. A
5. A
6. D
7. D
8. C
9. D
10. C
11. A
12. B
13. B
14. A
15. A
16. D



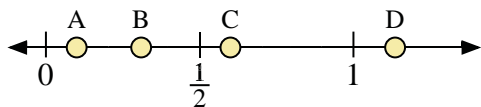
Use the number lines to answer the questions.



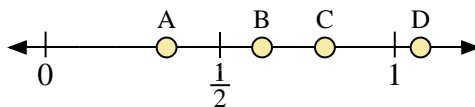
- 1) Which letter best represents the location of 1.00?
- 2) Which letter best represents the location of 0.41?



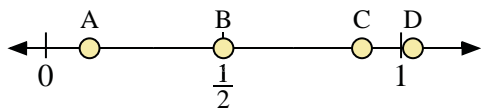
- 3) Which letter best represents the location of 0.2?
- 4) Which letter best represents the location of 0.83?



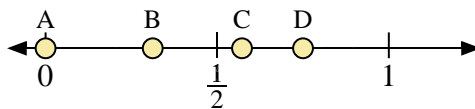
- 5) Which letter best represents the location of 0.6?
- 6) Which letter best represents the location of 0.10?



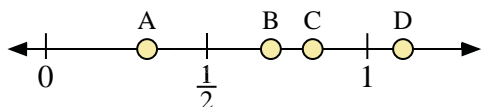
- 7) Which letter best represents the location of 0.80?
- 8) Which letter best represents the location of 0.62?



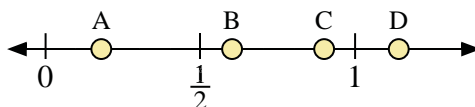
- 9) Which letter best represents the location of 0.50?
- 10) Which letter best represents the location of 0.89?



- 11) Which letter best represents the location of 0.0?
- 12) Which letter best represents the location of 0.75?



- 13) Which letter best represents the location of 0.7?
- 14) Which letter best represents the location of 0.83?



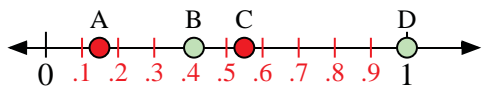
- 15) Which letter best represents the location of 0.90?
- 16) Which letter best represents the location of 0.18?

Answers

1. _____
2. _____
3. _____
4. _____
5. _____
6. _____
7. _____
8. _____
9. _____
10. _____
11. _____
12. _____
13. _____
14. _____
15. _____
16. _____

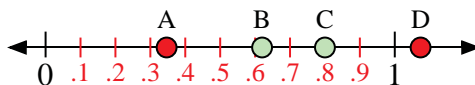
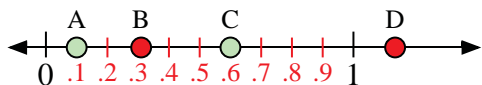


Use the number lines to answer the questions.



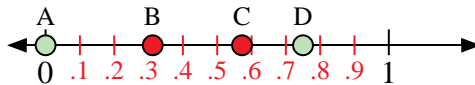
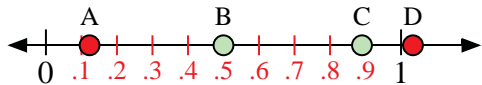
- 1) Which letter best represents the location of 1.00?
- 2) Which letter best represents the location of 0.41?

- 3) Which letter best represents the location of 0.2?
- 4) Which letter best represents the location of 0.83?



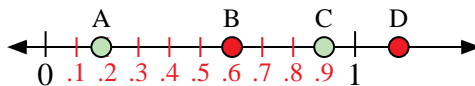
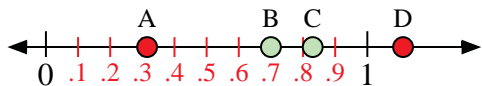
- 5) Which letter best represents the location of 0.6?
- 6) Which letter best represents the location of 0.10?

- 7) Which letter best represents the location of 0.80?
- 8) Which letter best represents the location of 0.62?



- 9) Which letter best represents the location of 0.50?
- 10) Which letter best represents the location of 0.89?

- 11) Which letter best represents the location of 0.0?
- 12) Which letter best represents the location of 0.75?



- 13) Which letter best represents the location of 0.7?
- 14) Which letter best represents the location of 0.83?

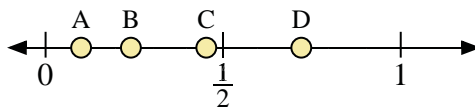
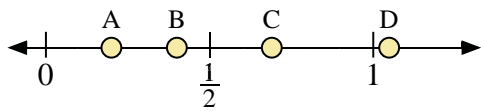
- 15) Which letter best represents the location of 0.90?
- 16) Which letter best represents the location of 0.18?

Answers

1. D
2. B
3. B
4. C
5. C
6. A
7. C
8. B
9. B
10. C
11. A
12. D
13. B
14. C
15. C
16. A

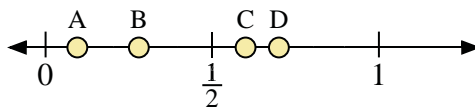
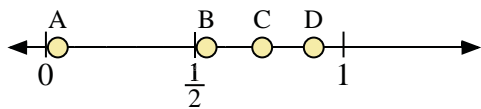


Use the number lines to answer the questions.



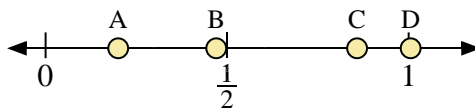
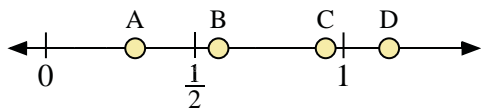
- 1) Which letter best represents the location of 0.4?
- 2) Which letter best represents the location of 0.69?

- 3) Which letter best represents the location of 0.10?
- 4) Which letter best represents the location of 0.72?



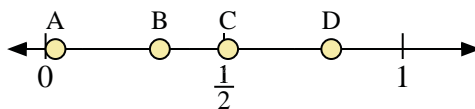
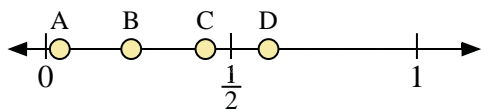
- 5) Which letter best represents the location of 0.90?
- 6) Which letter best represents the location of 0.54?

- 7) Which letter best represents the location of 0.7?
- 8) Which letter best represents the location of 0.60?



- 9) Which letter best represents the location of 0.3?
- 10) Which letter best represents the location of 0.58?

- 11) Which letter best represents the location of 0.20?
- 12) Which letter best represents the location of 0.47?



- 13) Which letter best represents the location of 0.6?
- 14) Which letter best represents the location of 0.43?

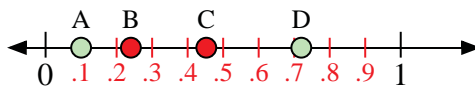
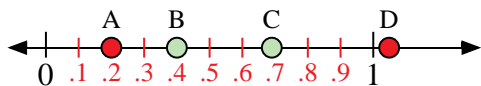
- 15) Which letter best represents the location of 0.80?
- 16) Which letter best represents the location of 0.32?

Answers

1. _____
2. _____
3. _____
4. _____
5. _____
6. _____
7. _____
8. _____
9. _____
10. _____
11. _____
12. _____
13. _____
14. _____
15. _____
16. _____

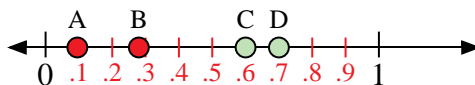
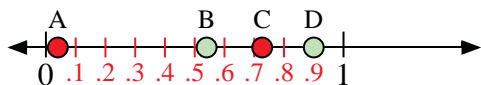


Use the number lines to answer the questions.



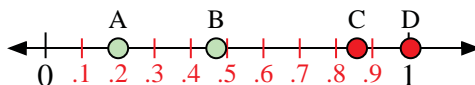
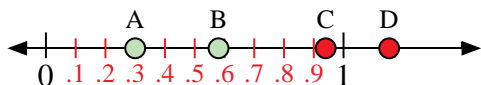
- 1) Which letter best represents the location of 0.4?
- 2) Which letter best represents the location of 0.69?

- 3) Which letter best represents the location of 0.10?
- 4) Which letter best represents the location of 0.72?



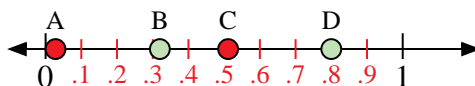
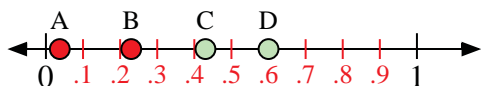
- 5) Which letter best represents the location of 0.90?
- 6) Which letter best represents the location of 0.54?

- 7) Which letter best represents the location of 0.7?
- 8) Which letter best represents the location of 0.60?



- 9) Which letter best represents the location of 0.3?
- 10) Which letter best represents the location of 0.58?

- 11) Which letter best represents the location of 0.20?
- 12) Which letter best represents the location of 0.47?



- 13) Which letter best represents the location of 0.6?
- 14) Which letter best represents the location of 0.43?

- 15) Which letter best represents the location of 0.80?
- 16) Which letter best represents the location of 0.32?

Answers

1. B
2. C
3. A
4. D
5. D
6. B
7. D
8. C
9. A
10. B
11. A
12. B
13. D
14. C
15. D
16. B