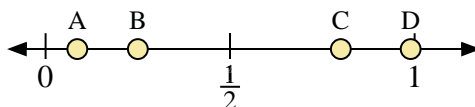
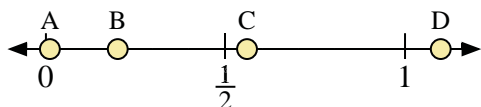
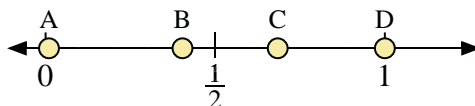
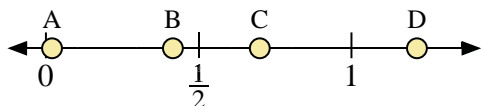
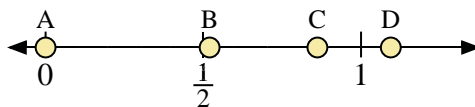
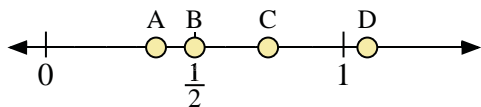
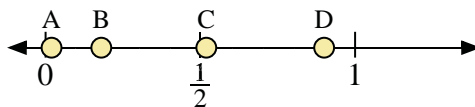
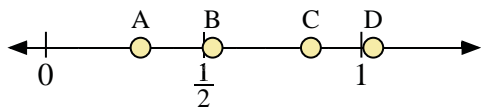




Use the number lines to answer the questions.



Answers

1. _____
2. _____
3. _____
4. _____
5. _____
6. _____
7. _____
8. _____
9. _____
10. _____
11. _____
12. _____
13. _____
14. _____
15. _____
16. _____

- 1) Which letter best represents the location of 0.3?
- 2) Which letter best represents the location of 0.84?

- 3) Which letter best represents the location of 0.9?
- 4) Which letter best represents the location of 0.18?

- 5) Which letter best represents the location of 0.50?
- 6) Which letter best represents the location of 0.37?

- 7) Which letter best represents the location of 0.0?
- 8) Which letter best represents the location of 0.52?

- 9) Which letter best represents the location of 0.7?
- 10) Which letter best represents the location of 0.02?

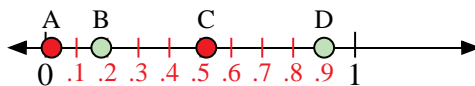
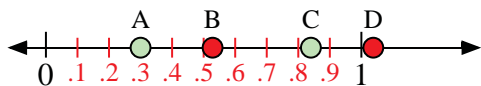
- 11) Which letter best represents the location of 1.00?
- 12) Which letter best represents the location of 0.01?

- 13) Which letter best represents the location of 0.2?
- 14) Which letter best represents the location of 0.56?

- 15) Which letter best represents the location of 0.8?
- 16) Which letter best represents the location of 0.25?

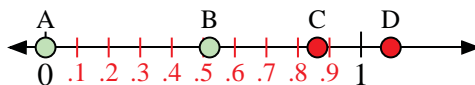
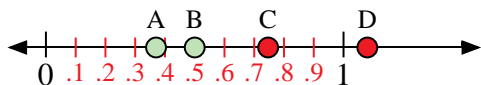


Use the number lines to answer the questions.



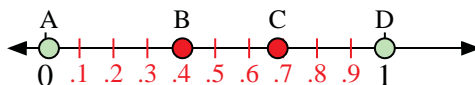
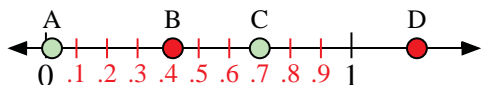
- 1) Which letter best represents the location of 0.3?
- 2) Which letter best represents the location of 0.84?

- 3) Which letter best represents the location of 0.9?
- 4) Which letter best represents the location of 0.18?



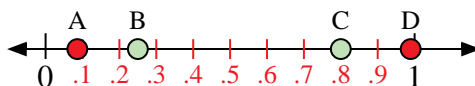
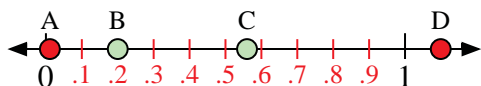
- 5) Which letter best represents the location of 0.50?
- 6) Which letter best represents the location of 0.37?

- 7) Which letter best represents the location of 0.0?
- 8) Which letter best represents the location of 0.52?



- 9) Which letter best represents the location of 0.7?
- 10) Which letter best represents the location of 0.02?

- 11) Which letter best represents the location of 1.00?
- 12) Which letter best represents the location of 0.01?



- 13) Which letter best represents the location of 0.2?
- 14) Which letter best represents the location of 0.56?

- 15) Which letter best represents the location of 0.8?
- 16) Which letter best represents the location of 0.25?

Answers

1. A
2. C
3. D
4. B
5. B
6. A
7. A
8. B
9. C
10. A
11. D
12. A
13. B
14. C
15. C
16. B