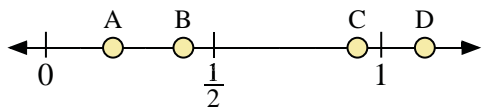
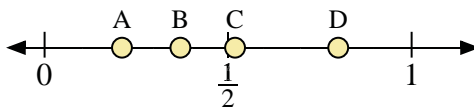




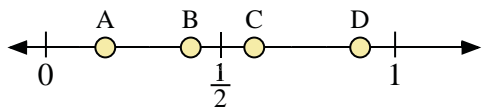
Use the number lines to answer the questions.



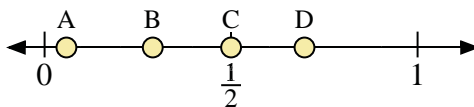
- 1) Which letter best represents the location of 0.2?
- 2) Which letter best represents the location of 0.41?



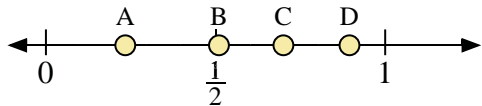
- 3) Which letter best represents the location of 0.80?
- 4) Which letter best represents the location of 0.37?



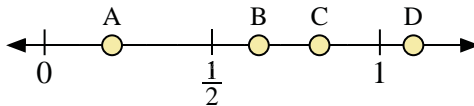
- 5) Which letter best represents the location of 0.90?
- 6) Which letter best represents the location of 0.17?



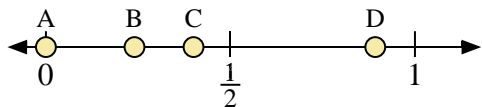
- 7) Which letter best represents the location of 0.5?
- 8) Which letter best represents the location of 0.29?



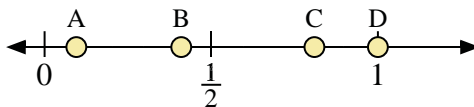
- 9) Which letter best represents the location of 0.7?
- 10) Which letter best represents the location of 0.51?



- 11) Which letter best represents the location of 1.1?
- 12) Which letter best represents the location of 0.82?



- 13) Which letter best represents the location of 0.4?
- 14) Which letter best represents the location of 0.24?



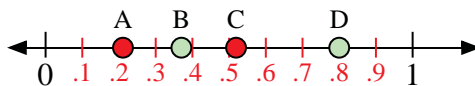
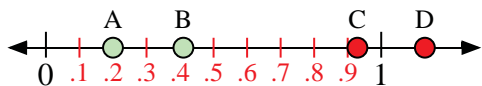
- 15) Which letter best represents the location of 1.0?
- 16) Which letter best represents the location of 0.41?

Answers

1. _____
2. _____
3. _____
4. _____
5. _____
6. _____
7. _____
8. _____
9. _____
10. _____
11. _____
12. _____
13. _____
14. _____
15. _____
16. _____

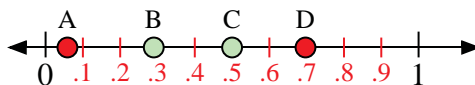
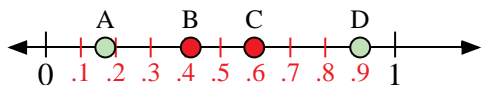


Use the number lines to answer the questions.



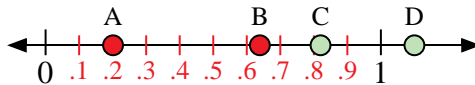
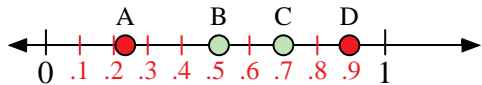
- 1) Which letter best represents the location of 0.2?
- 2) Which letter best represents the location of 0.41?

- 3) Which letter best represents the location of 0.80?
- 4) Which letter best represents the location of 0.37?



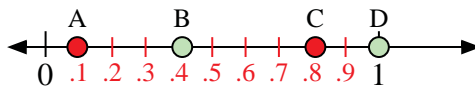
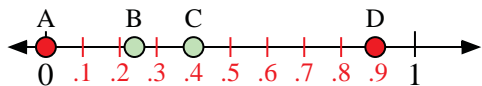
- 5) Which letter best represents the location of 0.90?
- 6) Which letter best represents the location of 0.17?

- 7) Which letter best represents the location of 0.5?
- 8) Which letter best represents the location of 0.29?



- 9) Which letter best represents the location of 0.7?
- 10) Which letter best represents the location of 0.51?

- 11) Which letter best represents the location of 1.1?
- 12) Which letter best represents the location of 0.82?



- 13) Which letter best represents the location of 0.4?
- 14) Which letter best represents the location of 0.24?

- 15) Which letter best represents the location of 1.0?
- 16) Which letter best represents the location of 0.41?

Answers

1. A
2. B
3. D
4. B
5. D
6. A
7. C
8. B
9. C
10. B
11. D
12. C
13. C
14. B
15. D
16. B