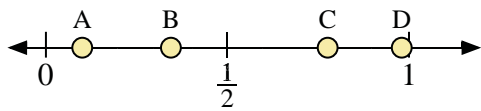
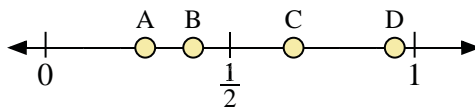




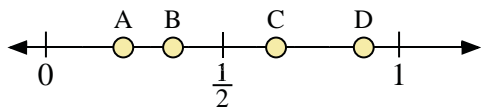
Use the number lines to answer the questions.



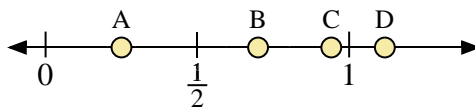
- 1) Which letter best represents the location of 0.10?
- 2) Which letter best represents the location of 0.98?



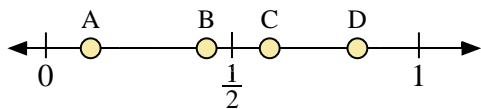
- 3) Which letter best represents the location of 0.40?
- 4) Which letter best represents the location of 0.27?



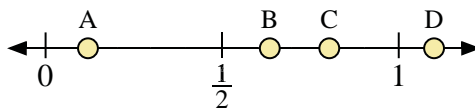
- 5) Which letter best represents the location of 0.90?
- 6) Which letter best represents the location of 0.36?



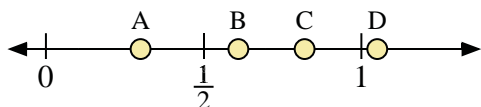
- 7) Which letter best represents the location of 0.7?
- 8) Which letter best represents the location of 0.25?



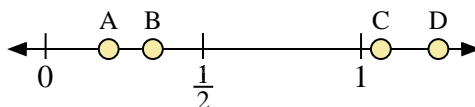
- 9) Which letter best represents the location of 0.60?
- 10) Which letter best represents the location of 0.12?



- 11) Which letter best represents the location of 1.1?
- 12) Which letter best represents the location of 0.12?



- 13) Which letter best represents the location of 0.30?
- 14) Which letter best represents the location of 0.82?



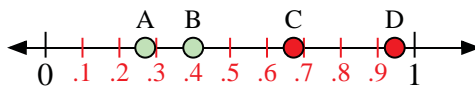
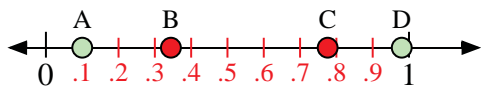
- 15) Which letter best represents the location of 0.2?
- 16) Which letter best represents the location of 0.34?

Answers

1. _____
2. _____
3. _____
4. _____
5. _____
6. _____
7. _____
8. _____
9. _____
10. _____
11. _____
12. _____
13. _____
14. _____
15. _____
16. _____

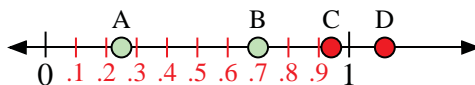
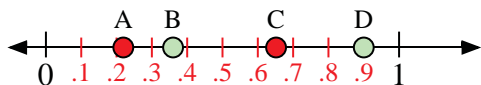


Use the number lines to answer the questions.



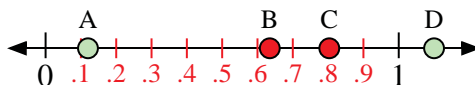
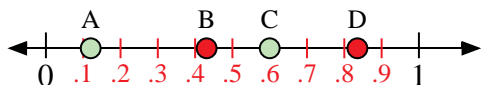
- 1) Which letter best represents the location of 0.10?
- 2) Which letter best represents the location of 0.98?

- 3) Which letter best represents the location of 0.40?
- 4) Which letter best represents the location of 0.27?




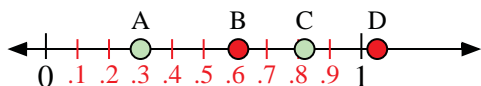
- 5) Which letter best represents the location of 0.90?
- 6) Which letter best represents the location of 0.36?

- 7) Which letter best represents the location of 0.7?
- 8) Which letter best represents the location of 0.25?



- 9) Which letter best represents the location of 0.60?
- 10) Which letter best represents the location of 0.12?

- 11) Which letter best represents the location of 1.1?
- 12) Which letter best represents the location of 0.12?



- 13) Which letter best represents the location of 0.30?
- 14) Which letter best represents the location of 0.82?

- 15) Which letter best represents the location of 0.2?
- 16) Which letter best represents the location of 0.34?

Answers

1. A
2. D
3. B
4. A
5. D
6. B
7. B
8. A
9. C
10. A
11. D
12. A
13. A
14. C
15. A
16. B