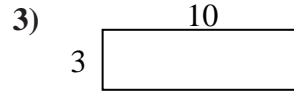
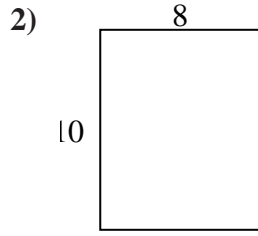
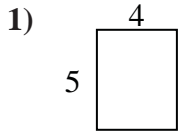


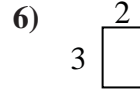
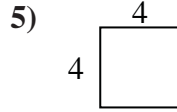
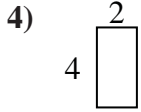


Find the perimeter and area of each figure. Each figure is in inches (in). Not to scale.

Answers



1. _____



2. _____

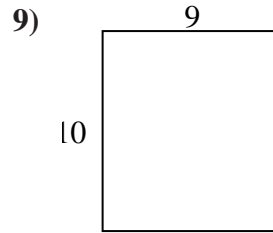
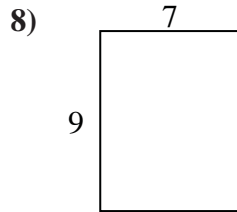
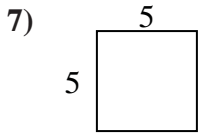
3. _____

4. _____

5. _____

6. _____

7. _____

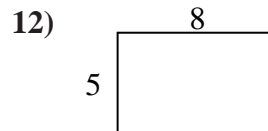
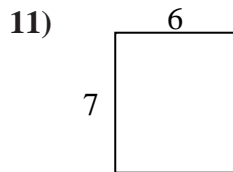
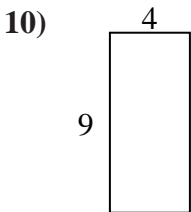


8. _____

9. _____

10. _____

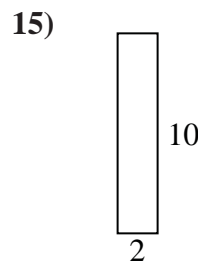
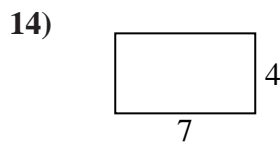
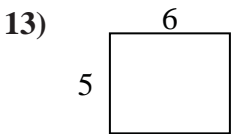
11. _____



12. _____

13. _____

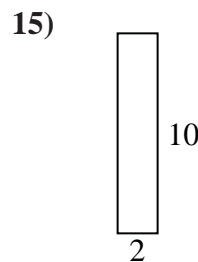
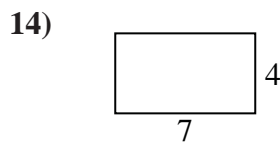
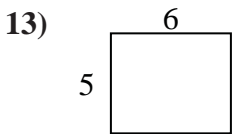
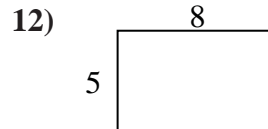
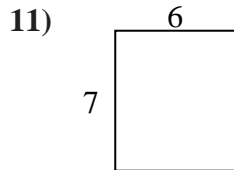
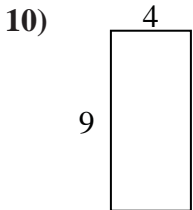
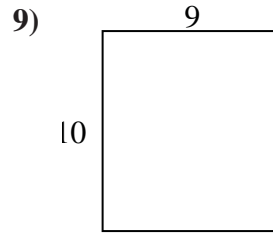
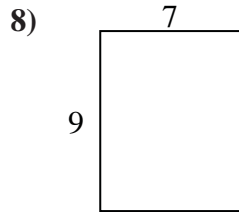
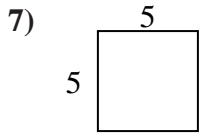
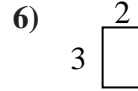
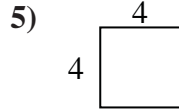
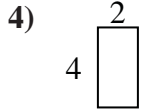
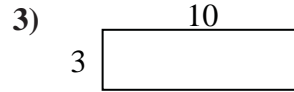
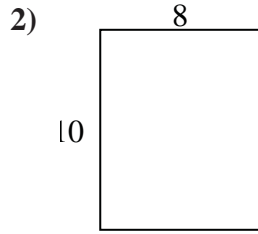
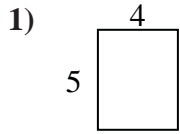
14. _____



15. _____



Find the perimeter and area of each figure. Each figure is in inches (in). Not to scale.



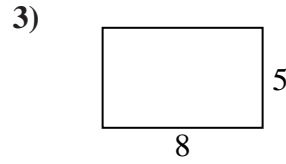
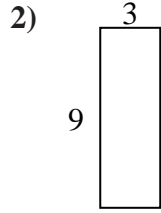
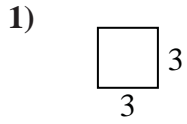
Answers

- 1. 18 in 20 in²
- 2. 36 in 80 in²
- 3. 26 in 30 in²
- 4. 12 in 8 in²
- 5. 16 in 16 in²
- 6. 10 in 6 in²
- 7. 20 in 25 in²
- 8. 32 in 63 in²
- 9. 38 in 90 in²
- 10. 26 in 36 in²
- 11. 26 in 42 in²
- 12. 26 in 40 in²
- 13. 22 in 30 in²
- 14. 22 in 28 in²
- 15. 24 in 20 in²

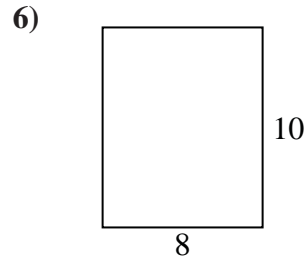
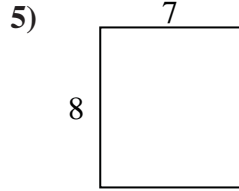
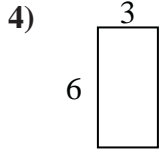


Find the perimeter and area of each figure. Each figure is in inches (in). Not to scale.

Answers



1. _____



2. _____

3. _____

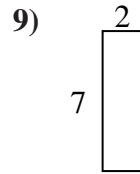
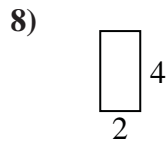
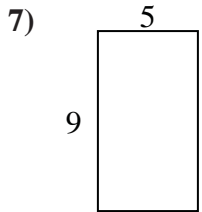
4. _____

5. _____

6. _____

7. _____

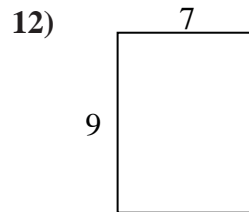
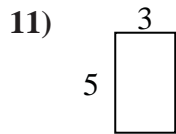
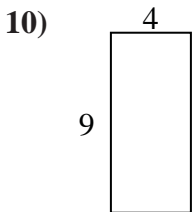
8. _____



9. _____

10. _____

11. _____

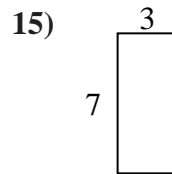
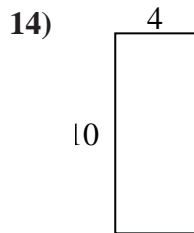
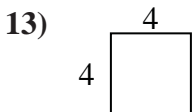


12. _____

13. _____

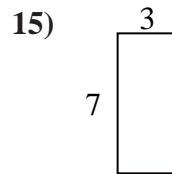
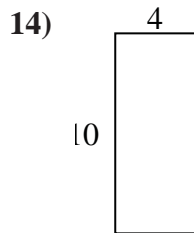
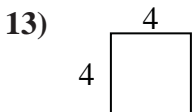
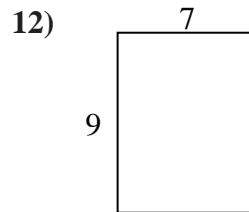
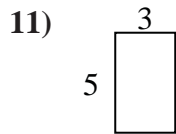
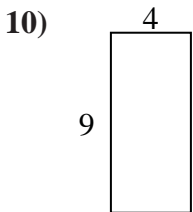
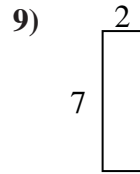
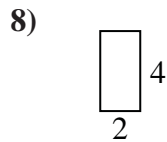
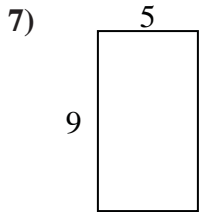
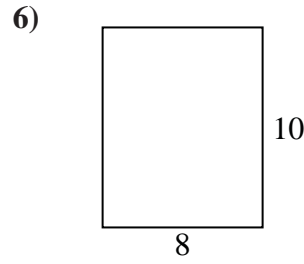
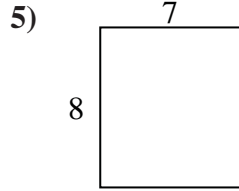
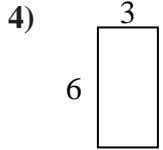
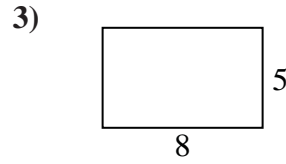
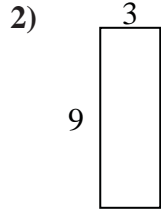
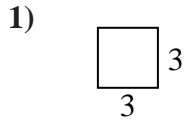
14. _____

15. _____





Find the perimeter and area of each figure. Each figure is in inches (in). Not to scale.



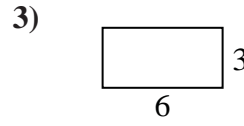
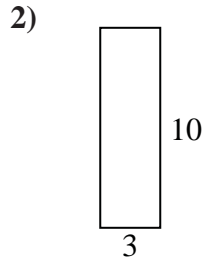
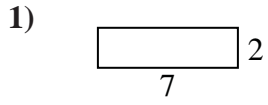
Answers

- 1. 12 in 9 in²
- 2. 24 in 27 in²
- 3. 26 in 40 in²
- 4. 18 in 18 in²
- 5. 30 in 56 in²
- 6. 36 in 80 in²
- 7. 28 in 45 in²
- 8. 12 in 8 in²
- 9. 18 in 14 in²
- 10. 26 in 36 in²
- 11. 16 in 15 in²
- 12. 32 in 63 in²
- 13. 16 in 16 in²
- 14. 28 in 40 in²
- 15. 20 in 21 in²

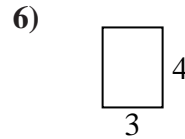
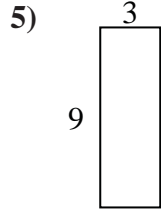
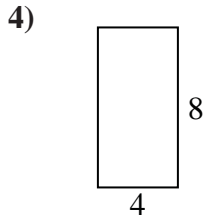


Find the perimeter and area of each figure. Each figure is in inches (in). Not to scale.

Answers



1. _____



2. _____

3. _____

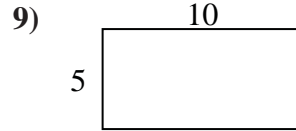
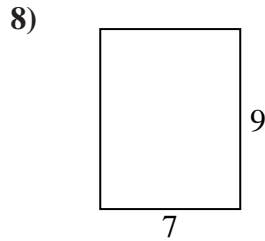
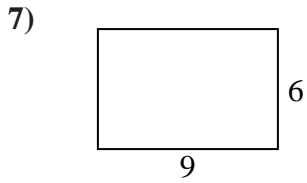
4. _____

5. _____

6. _____

7. _____

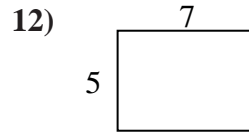
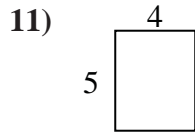
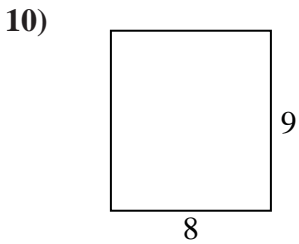
8. _____



9. _____

10. _____

11. _____


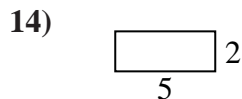
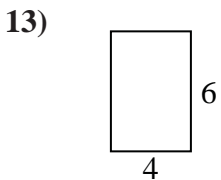


12. _____

13. _____


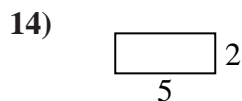
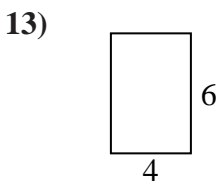
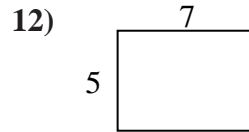
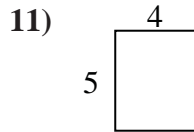
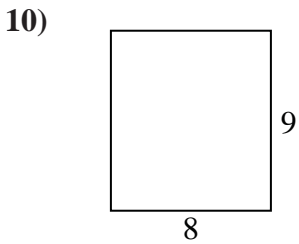
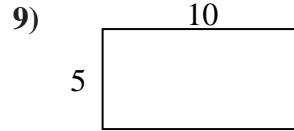
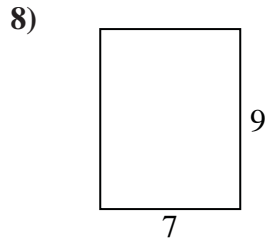
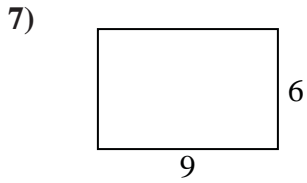
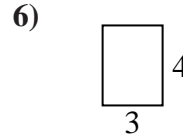
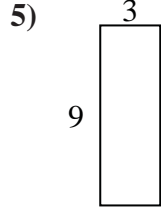
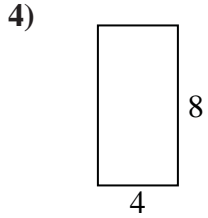
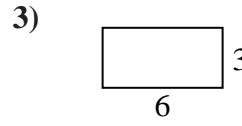
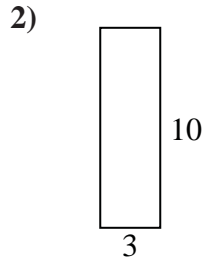
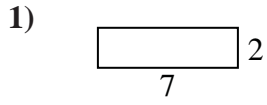
14. _____

15. _____





Find the perimeter and area of each figure. Each figure is in inches (in). Not to scale.



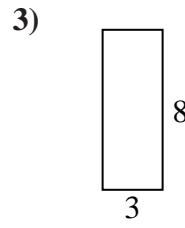
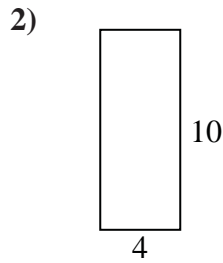
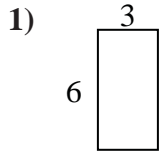
Answers

1. 18 in 14 in²
2. 26 in 30 in²
3. 18 in 18 in²
4. 24 in 32 in²
5. 24 in 27 in²
6. 14 in 12 in²
7. 30 in 54 in²
8. 32 in 63 in²
9. 30 in 50 in²
10. 34 in 72 in²
11. 18 in 20 in²
12. 24 in 35 in²
13. 20 in 24 in²
14. 14 in 10 in²
15. 22 in 18 in²



Find the perimeter and area of each figure. Each figure is in inches (in). Not to scale.

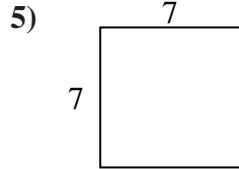
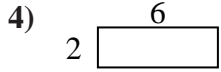
Answers



1. _____

2. _____

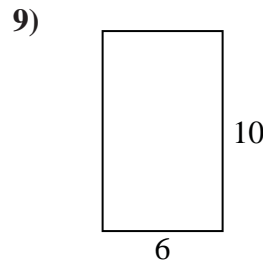
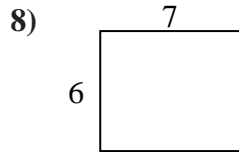
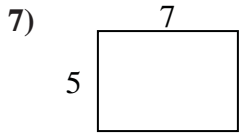
3. _____



4. _____

5. _____

6. _____

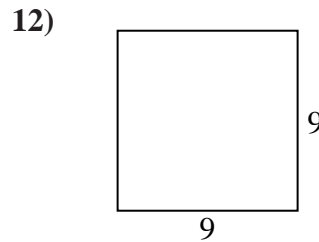
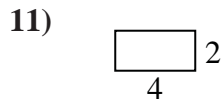
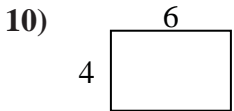


7. _____

8. _____

9. _____

10. _____

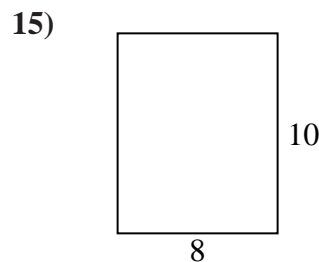
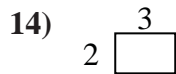
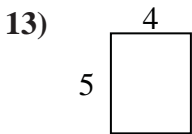


11. _____

12. _____

13. _____

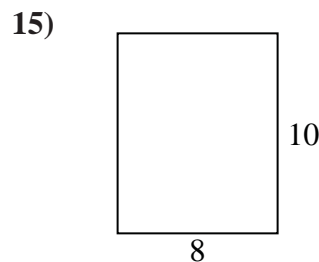
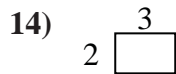
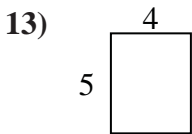
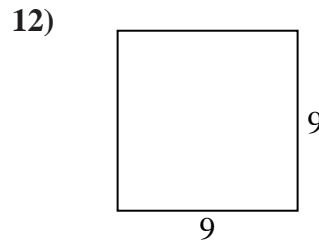
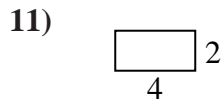
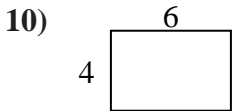
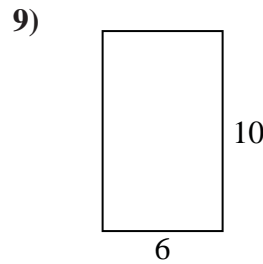
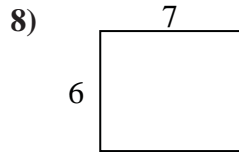
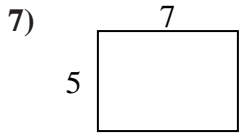
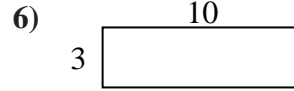
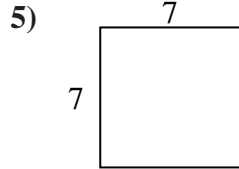
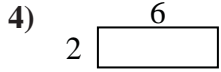
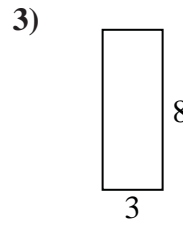
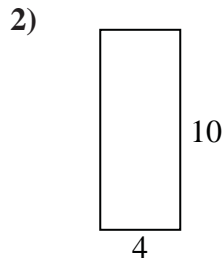
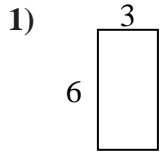
14. _____



15. _____



Find the perimeter and area of each figure. Each figure is in inches (in). Not to scale.



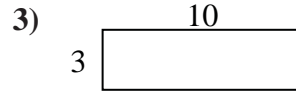
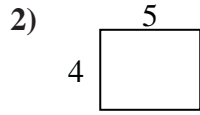
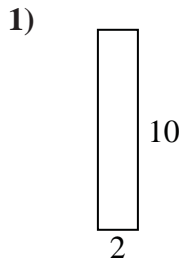
Answers

1.	<u>18 in</u>	<u>18 in²</u>
2.	<u>28 in</u>	<u>40 in²</u>
3.	<u>22 in</u>	<u>24 in²</u>
4.	<u>16 in</u>	<u>12 in²</u>
5.	<u>28 in</u>	<u>49 in²</u>
6.	<u>26 in</u>	<u>30 in²</u>
7.	<u>24 in</u>	<u>35 in²</u>
8.	<u>26 in</u>	<u>42 in²</u>
9.	<u>32 in</u>	<u>60 in²</u>
10.	<u>20 in</u>	<u>24 in²</u>
11.	<u>12 in</u>	<u>8 in²</u>
12.	<u>36 in</u>	<u>81 in²</u>
13.	<u>18 in</u>	<u>20 in²</u>
14.	<u>10 in</u>	<u>6 in²</u>
15.	<u>36 in</u>	<u>80 in²</u>


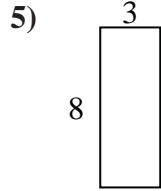
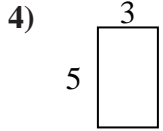


Find the perimeter and area of each figure. Each figure is in inches (in). Not to scale.

Answers



1. _____



2. _____

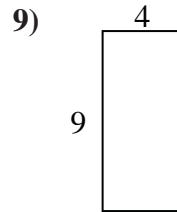
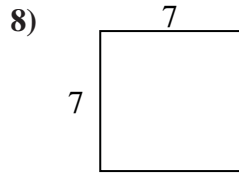
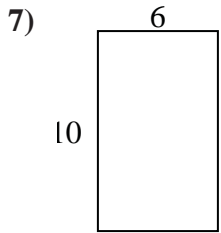
3. _____

4. _____

5. _____

6. _____

7. _____

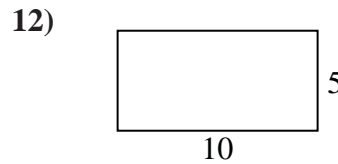
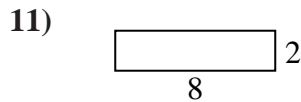
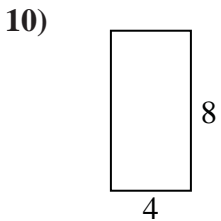


8. _____

9. _____

10. _____

11. _____

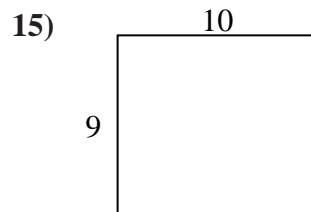
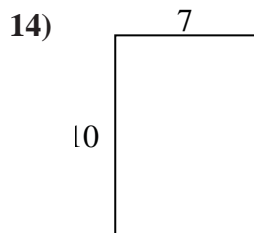
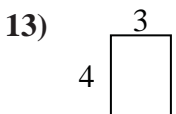


12. _____

13. _____

14. _____

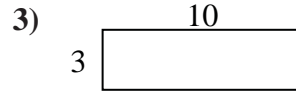
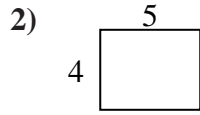
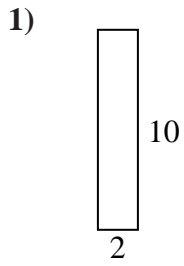
15. _____




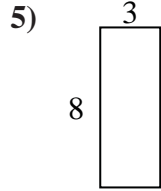
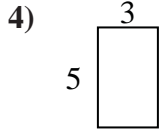


Find the perimeter and area of each figure. Each figure is in inches (in). Not to scale.

Answers



1. 24 in 20 in²



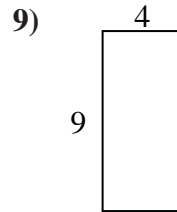
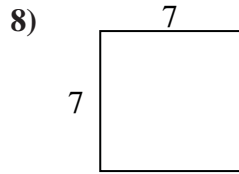
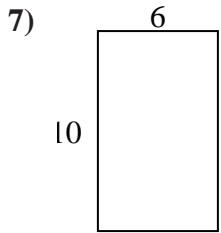
2. 18 in 20 in²

3. 26 in 30 in²

4. 16 in 15 in²

5. 22 in 24 in²

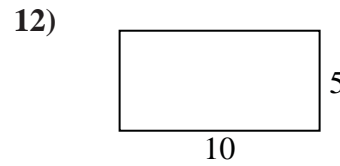
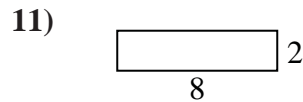
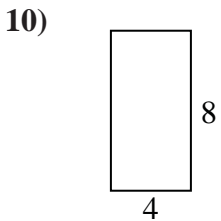
6. 22 in 18 in²



7. 32 in 60 in²

8. 28 in 49 in²

9. 26 in 36 in²



10. 24 in 32 in²

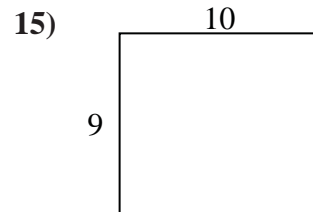
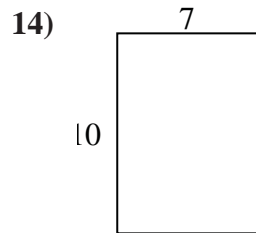
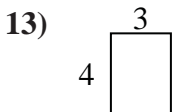
11. 20 in 16 in²

12. 30 in 50 in²

13. 14 in 12 in²

14. 34 in 70 in²

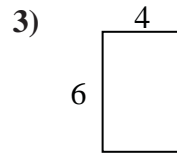
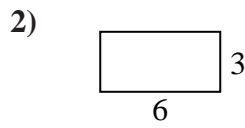
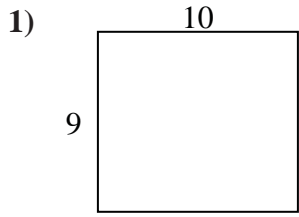
15. 38 in 90 in²





Find the perimeter and area of each figure. Each figure is in inches (in). Not to scale.

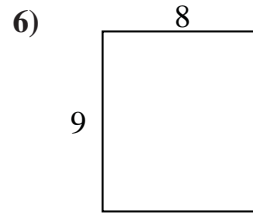
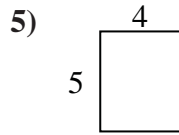
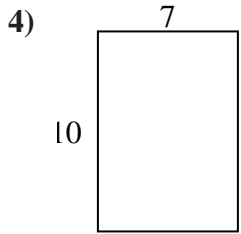
Answers



1. _____

2. _____

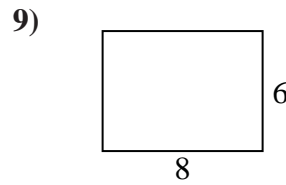
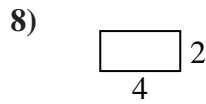
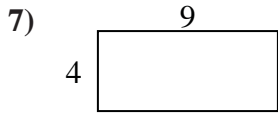
3. _____



4. _____

5. _____

6. _____

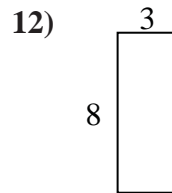
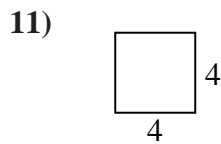
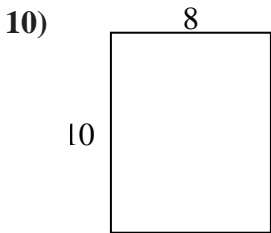


7. _____

8. _____

9. _____

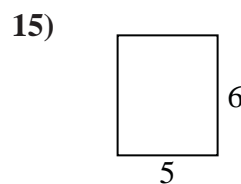
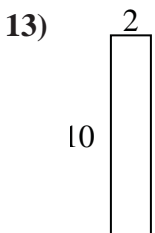
10. _____



11. _____

12. _____

13. _____

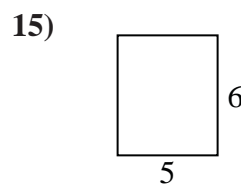
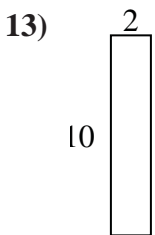
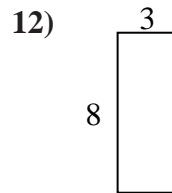
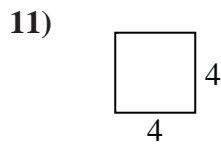
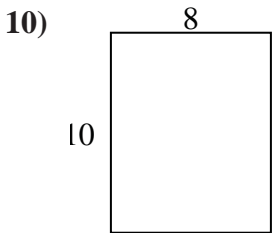
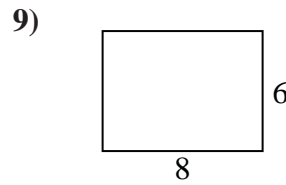
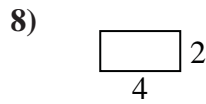
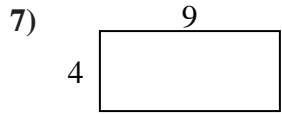
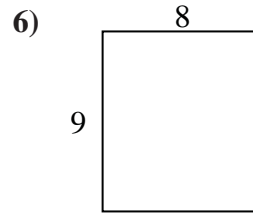
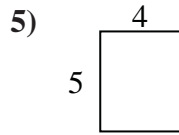
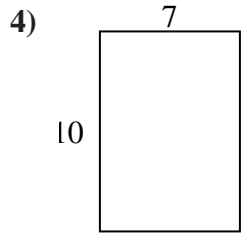
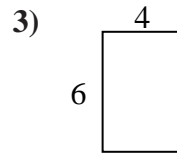
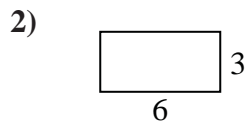
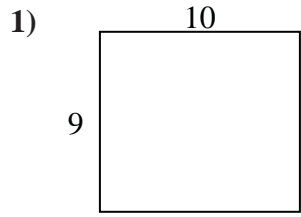


14. _____

15. _____



Find the perimeter and area of each figure. Each figure is in inches (in). Not to scale.



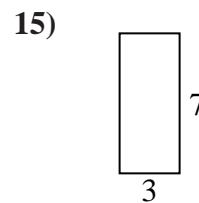
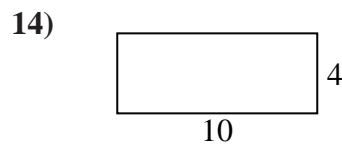
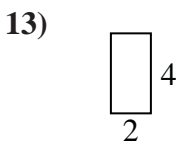
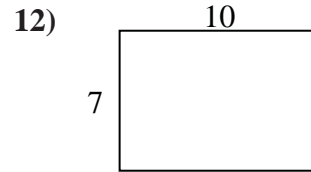
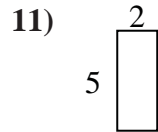
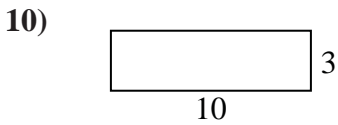
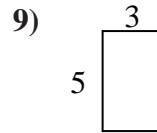
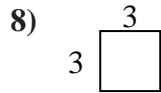
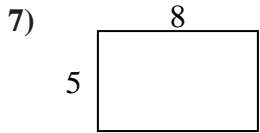
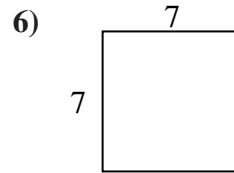
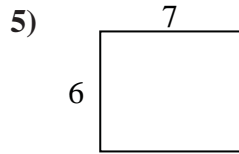
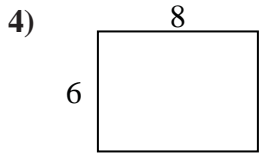
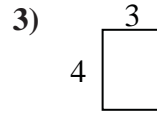
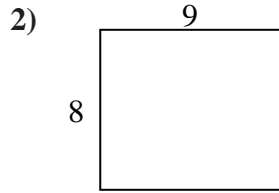
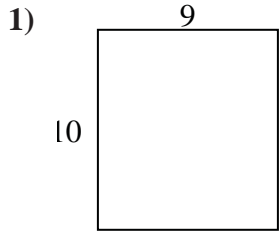
Answers

1. 38 in 90 in²
2. 18 in 18 in²
3. 20 in 24 in²
4. 34 in 70 in²
5. 18 in 20 in²
6. 34 in 72 in²
7. 26 in 36 in²
8. 12 in 8 in²
9. 28 in 48 in²
10. 36 in 80 in²
11. 16 in 16 in²
12. 22 in 24 in²
13. 24 in 20 in²
14. 26 in 30 in²
15. 22 in 30 in²



Find the perimeter and area of each figure. Each figure is in inches (in). Not to scale.

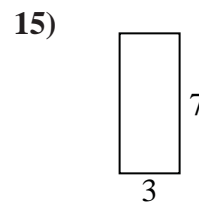
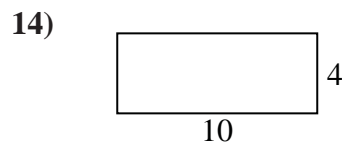
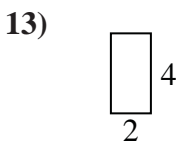
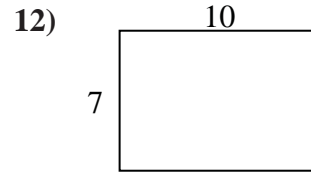
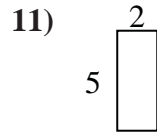
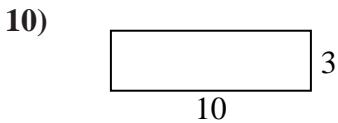
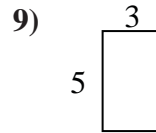
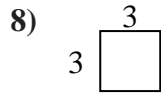
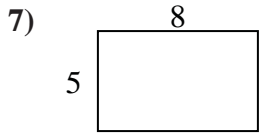
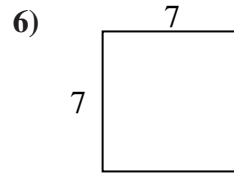
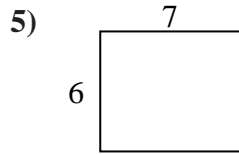
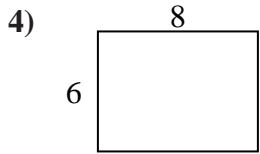
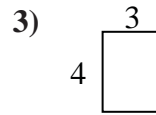
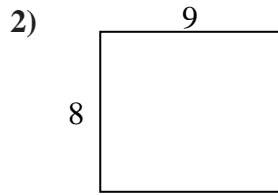
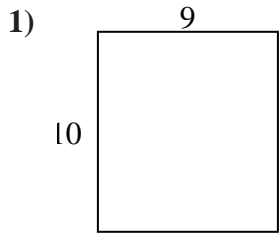
Answers



- 1. _____
- 2. _____
- 3. _____
- 4. _____
- 5. _____
- 6. _____
- 7. _____
- 8. _____
- 9. _____
- 10. _____
- 11. _____
- 12. _____
- 13. _____
- 14. _____
- 15. _____



Find the perimeter and area of each figure. Each figure is in inches (in). Not to scale.



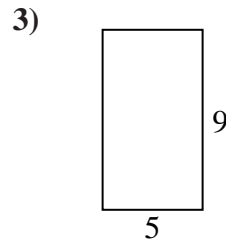
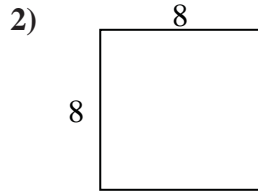
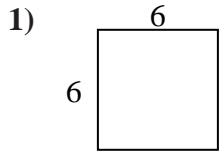
Answers

1. 38 in 90 in²
2. 34 in 72 in²
3. 14 in 12 in²
4. 28 in 48 in²
5. 26 in 42 in²
6. 28 in 49 in²
7. 26 in 40 in²
8. 12 in 9 in²
9. 16 in 15 in²
10. 26 in 30 in²
11. 14 in 10 in²
12. 34 in 70 in²
13. 12 in 8 in²
14. 28 in 40 in²
15. 20 in 21 in²

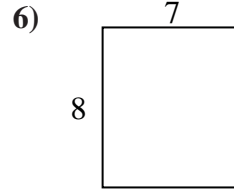
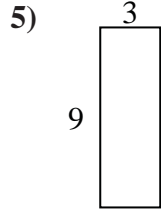
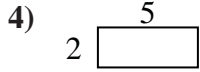


Find the perimeter and area of each figure. Each figure is in inches (in). Not to scale.

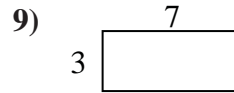
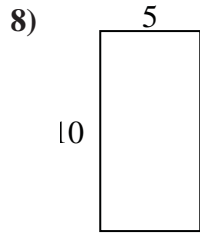
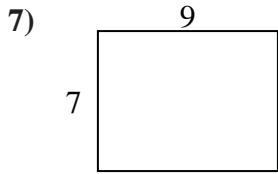
Answers



1. _____

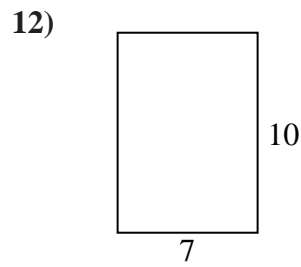
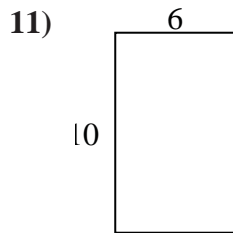
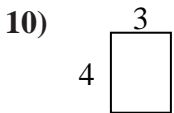


2. _____



3. _____

4. _____



5. _____

6. _____

7. _____

8. _____

9. _____

10. _____

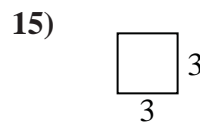
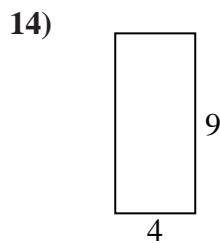
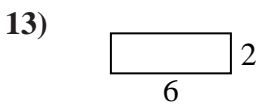
11. _____

12. _____

13. _____

14. _____

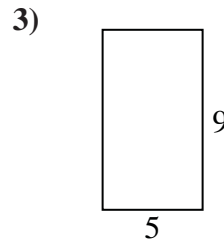
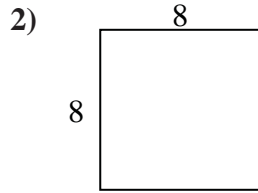
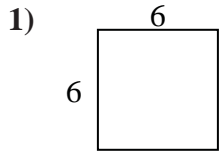
15. _____



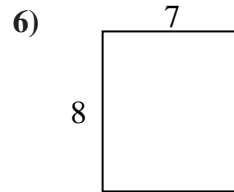
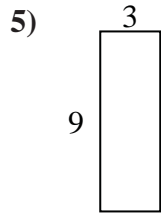
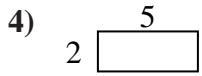


Find the perimeter and area of each figure. Each figure is in inches (in). Not to scale.

Answers

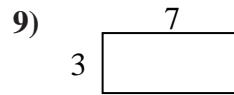
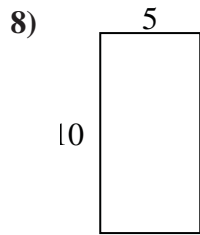
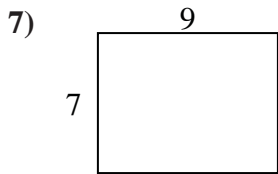


1. 24 in 36 in²



2. 32 in 64 in²

3. 28 in 45 in²



4. 14 in 10 in²

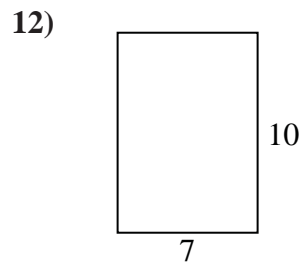
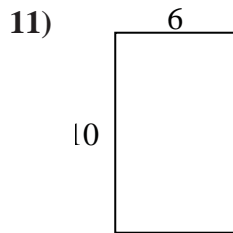
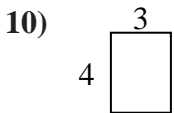
5. 24 in 27 in²

6. 30 in 56 in²

7. 32 in 63 in²

8. 30 in 50 in²

9. 20 in 21 in²



10. 14 in 12 in²

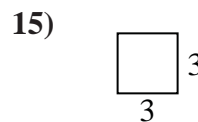
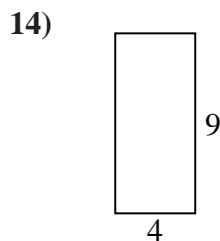
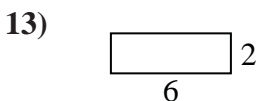
11. 32 in 60 in²

12. 34 in 70 in²

13. 16 in 12 in²

14. 26 in 36 in²

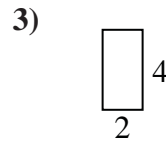

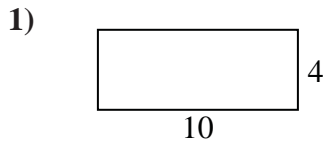
15. 12 in 9 in²



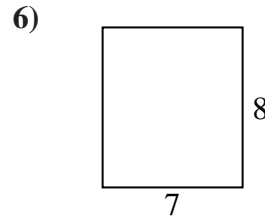
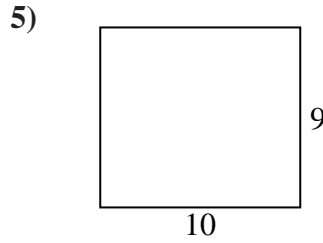
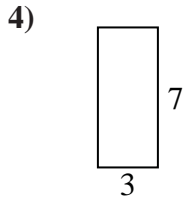


Find the perimeter and area of each figure. Each figure is in inches (in). Not to scale.

Answers



1. _____



2. _____

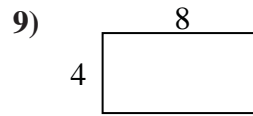
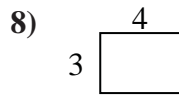

3. _____

4. _____

5. _____

6. _____

7. _____

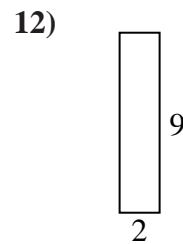
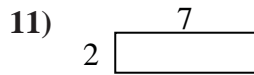
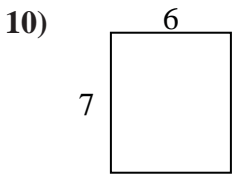


8. _____

9. _____

10. _____

11. _____

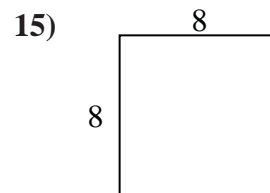
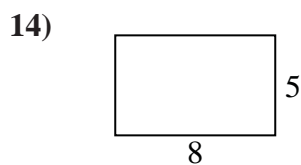
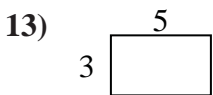


12. _____

13. _____

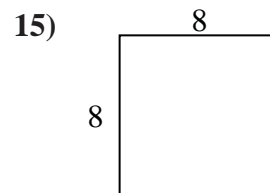
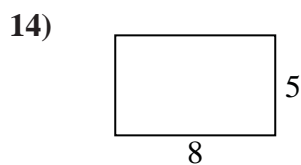
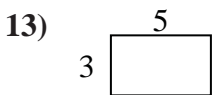
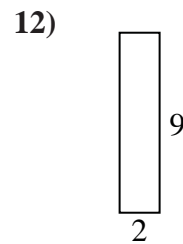
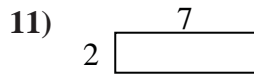
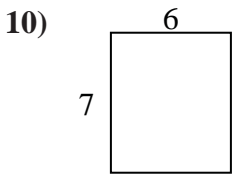
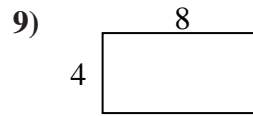
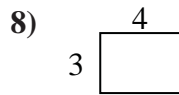

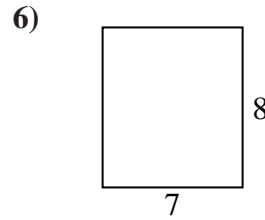
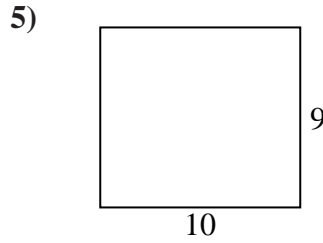
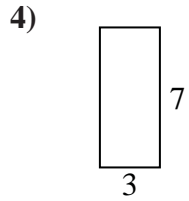
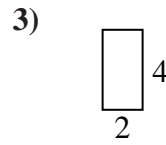

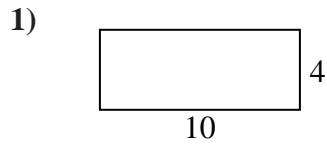
14. _____

15. _____





Find the perimeter and area of each figure. Each figure is in inches (in). Not to scale.



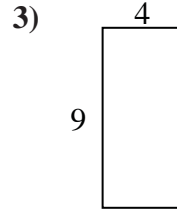
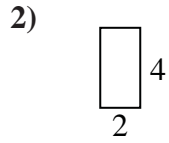
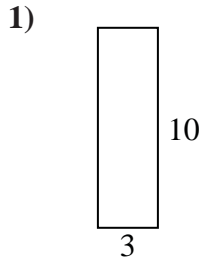
Answers

1. 28 in 40 in²
2. 24 in 20 in²
3. 12 in 8 in²
4. 20 in 21 in²
5. 38 in 90 in²
6. 30 in 56 in²
7. 26 in 30 in²
8. 14 in 12 in²
9. 24 in 32 in²
10. 26 in 42 in²
11. 18 in 14 in²
12. 22 in 18 in²
13. 16 in 15 in²
14. 26 in 40 in²
15. 32 in 64 in²

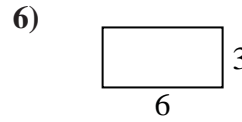
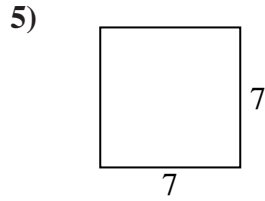
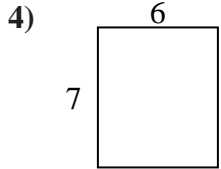


Find the perimeter and area of each figure. Each figure is in inches (in). Not to scale.

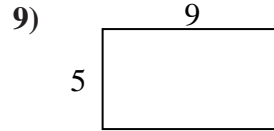
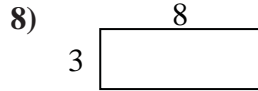
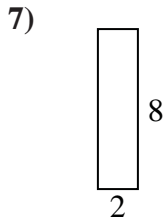
Answers



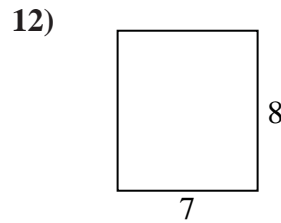
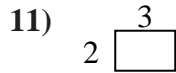
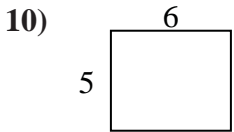
1. _____



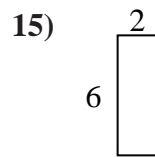
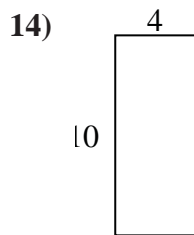
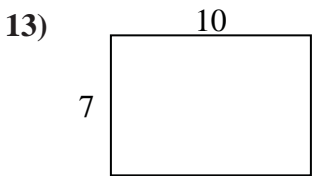
2. _____



3. _____



4. _____



5. _____

6. _____

7. _____

8. _____

9. _____

10. _____

11. _____

12. _____

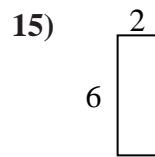
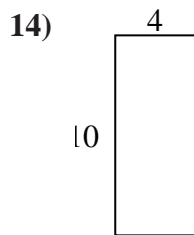
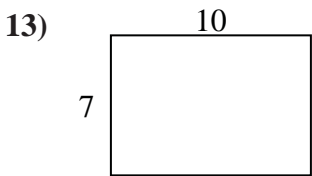
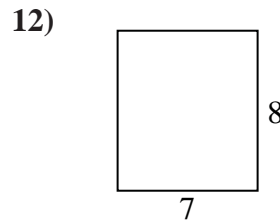
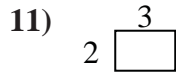
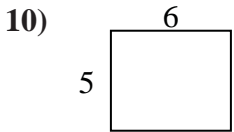
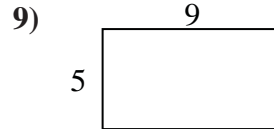
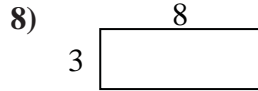
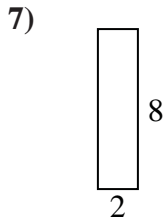
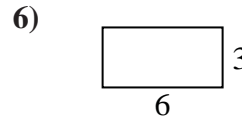
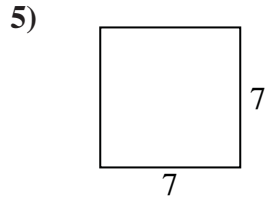
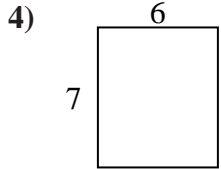
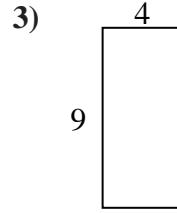
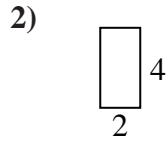
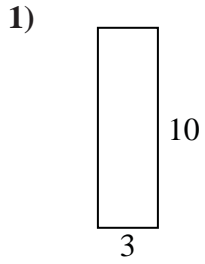
13. _____

14. _____

15. _____



Find the perimeter and area of each figure. Each figure is in inches (in). Not to scale.



Answers

1.	<u>26 in</u>	<u>30 in²</u>
2.	<u>12 in</u>	<u>8 in²</u>
3.	<u>26 in</u>	<u>36 in²</u>
4.	<u>26 in</u>	<u>42 in²</u>
5.	<u>28 in</u>	<u>49 in²</u>
6.	<u>18 in</u>	<u>18 in²</u>
7.	<u>20 in</u>	<u>16 in²</u>
8.	<u>22 in</u>	<u>24 in²</u>
9.	<u>28 in</u>	<u>45 in²</u>
10.	<u>22 in</u>	<u>30 in²</u>
11.	<u>10 in</u>	<u>6 in²</u>
12.	<u>30 in</u>	<u>56 in²</u>
13.	<u>34 in</u>	<u>70 in²</u>
14.	<u>28 in</u>	<u>40 in²</u>
15.	<u>16 in</u>	<u>12 in²</u>