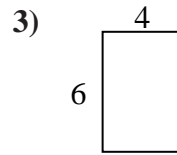
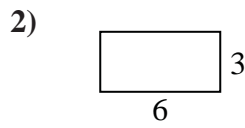
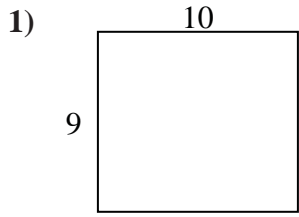




Find the perimeter and area of each figure. Each figure is in inches (in). Not to scale.

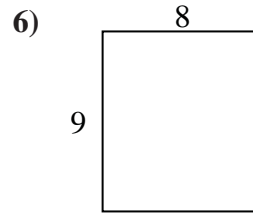
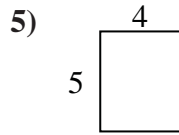
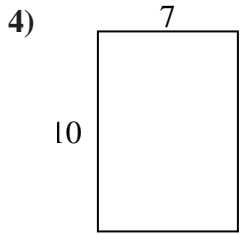
Answers



1. _____

2. _____

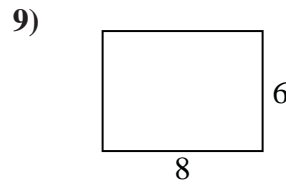
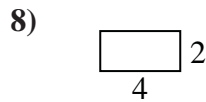
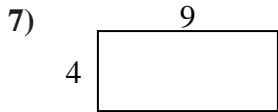
3. _____



4. _____

5. _____

6. _____

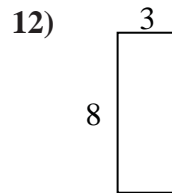
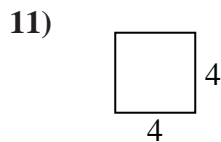
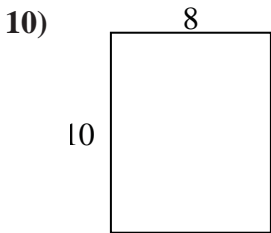


7. _____

8. _____

9. _____

10. _____

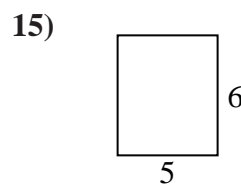
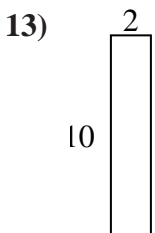


11. _____

12. _____

13. _____

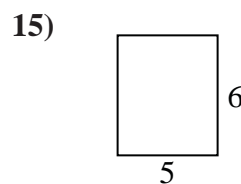
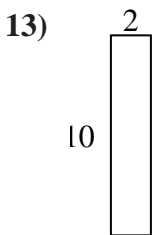
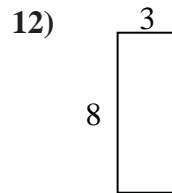
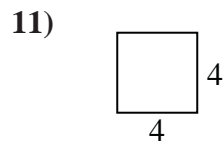
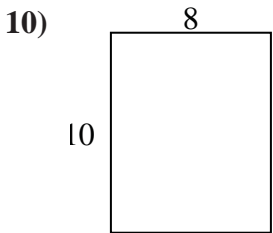
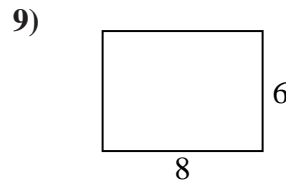
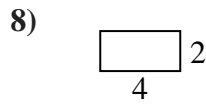
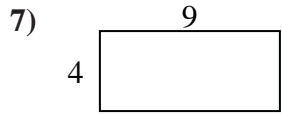
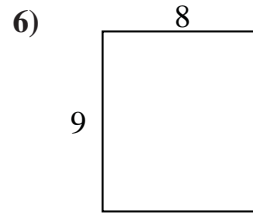
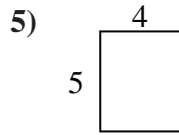
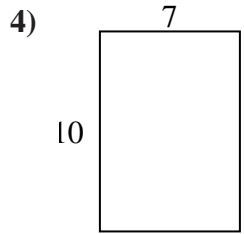
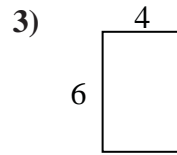
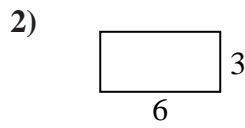
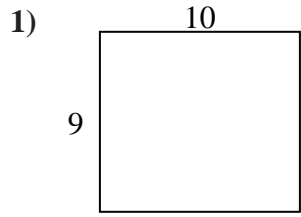
14. _____



15. _____



Find the perimeter and area of each figure. Each figure is in inches (in). Not to scale.



Answers

1. 38 in 90 in²
2. 18 in 18 in²
3. 20 in 24 in²
4. 34 in 70 in²
5. 18 in 20 in²
6. 34 in 72 in²
7. 26 in 36 in²
8. 12 in 8 in²
9. 28 in 48 in²
10. 36 in 80 in²
11. 16 in 16 in²
12. 22 in 24 in²
13. 24 in 20 in²
14. 26 in 30 in²
15. 22 in 30 in²