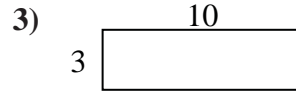
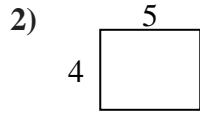
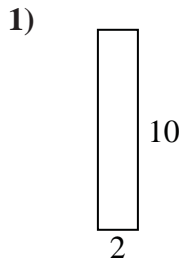



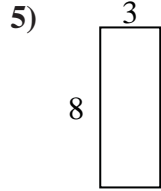
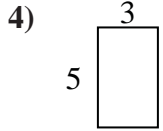


Find the perimeter and area of each figure. Each figure is in inches (in). Not to scale.

Answers



1. \_\_\_\_\_



2. \_\_\_\_\_

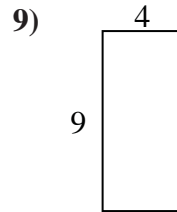
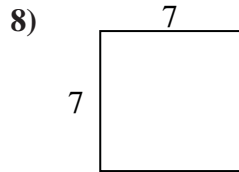
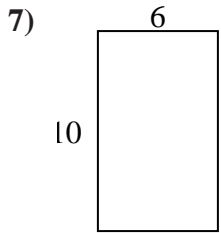
3. \_\_\_\_\_

4. \_\_\_\_\_

5. \_\_\_\_\_

6. \_\_\_\_\_

7. \_\_\_\_\_

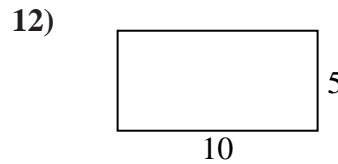
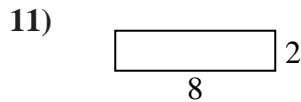
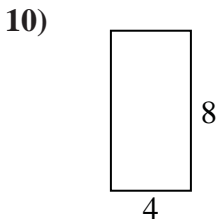


8. \_\_\_\_\_

9. \_\_\_\_\_

10. \_\_\_\_\_

11. \_\_\_\_\_

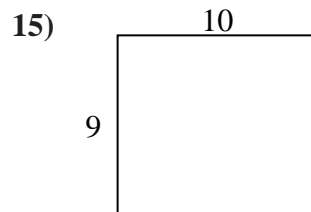
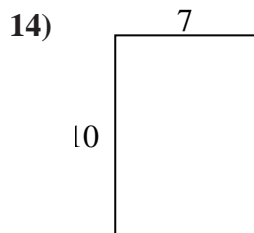
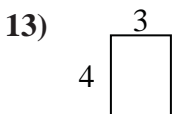


12. \_\_\_\_\_

13. \_\_\_\_\_

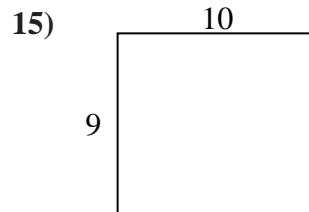
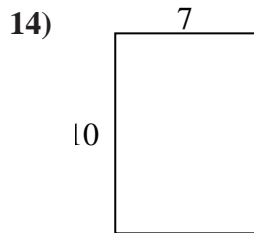
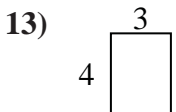
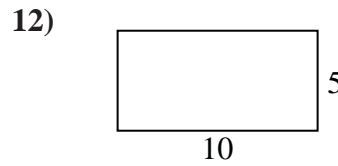
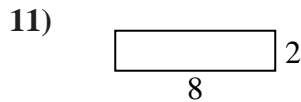
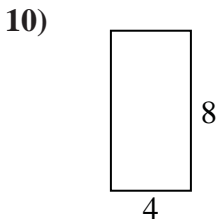
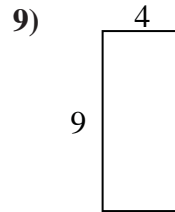
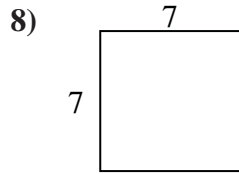
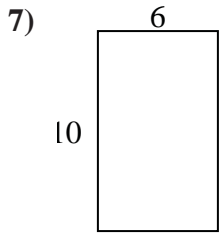

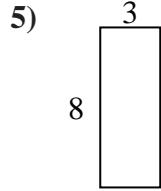
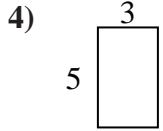
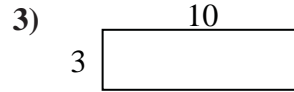
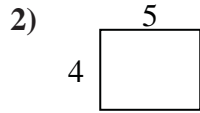
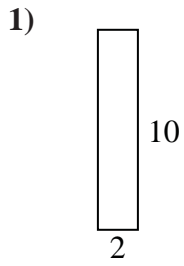
14. \_\_\_\_\_

15. \_\_\_\_\_





Find the perimeter and area of each figure. Each figure is in inches (in). Not to scale.



Answers

- 1. 24 in    20 in<sup>2</sup>
- 2. 18 in    20 in<sup>2</sup>
- 3. 26 in    30 in<sup>2</sup>
- 4. 16 in    15 in<sup>2</sup>
- 5. 22 in    24 in<sup>2</sup>
- 6. 22 in    18 in<sup>2</sup>
- 7. 32 in    60 in<sup>2</sup>
- 8. 28 in    49 in<sup>2</sup>
- 9. 26 in    36 in<sup>2</sup>
- 10. 24 in    32 in<sup>2</sup>
- 11. 20 in    16 in<sup>2</sup>
- 12. 30 in    50 in<sup>2</sup>
- 13. 14 in    12 in<sup>2</sup>
- 14. 34 in    70 in<sup>2</sup>
- 15. 38 in    90 in<sup>2</sup>