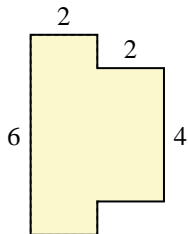




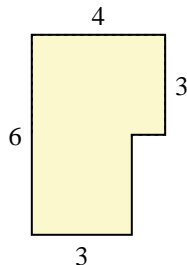
Find the total area of each shape. Measurement is in millimeters (mm). Not to scale.

Answers

1)



2)

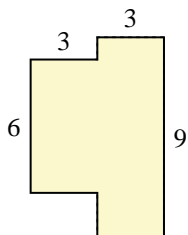


1. _____

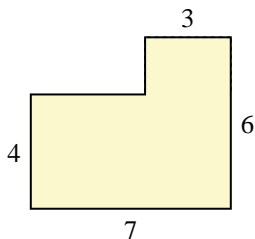
2. _____

3. _____

3)



4)



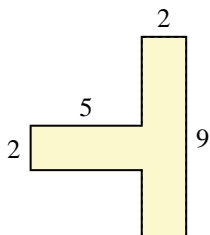
4. _____

5. _____

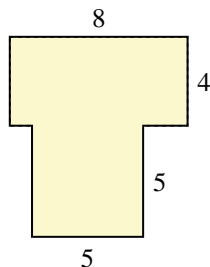
6. _____

7. _____

5)



6)

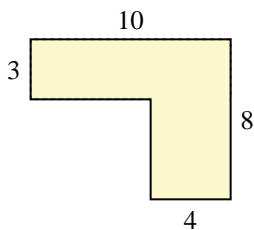


8. _____

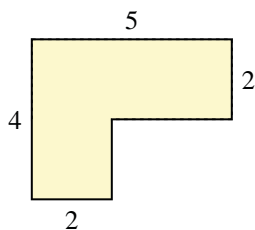
9. _____

10. _____

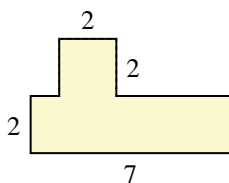
7)



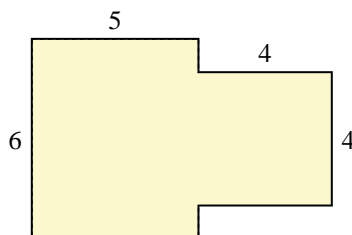
8)



9)

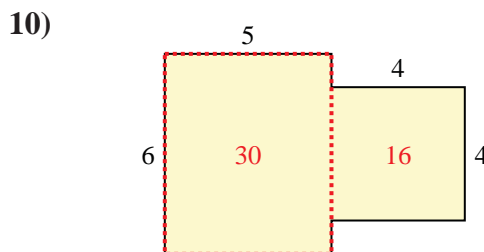
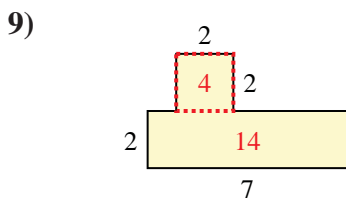
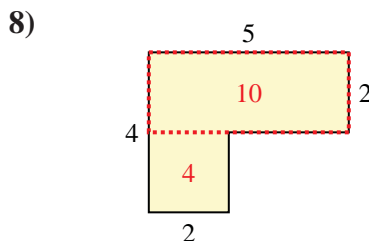
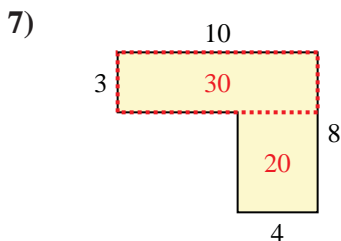
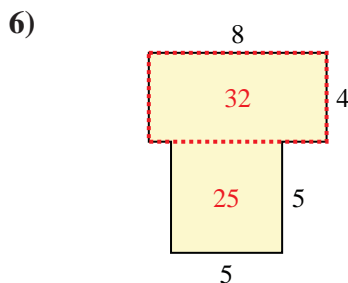
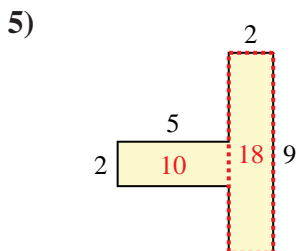
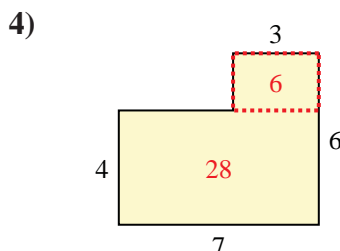
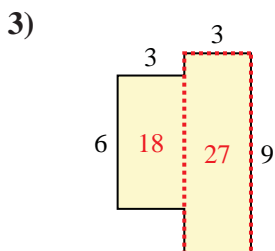
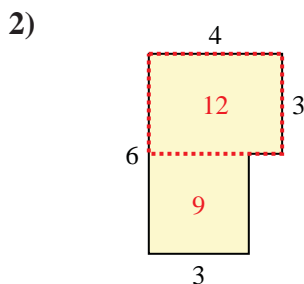
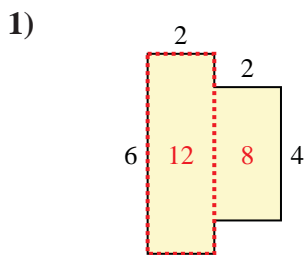


10)





Find the total area of each shape. Measurement is in millimeters (mm). Not to scale.



Answers

1. 20 mm²

2. 21 mm²

3. 45 mm²

4. 34 mm²

5. 28 mm²

6. 57 mm²

7. 50 mm²

8. 14 mm²

9. 18 mm²

10. 46 mm²