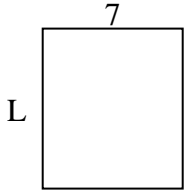


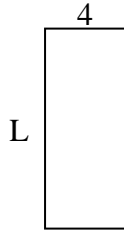


Determine the value of 'L'. Lengths are in cm (not to scale).

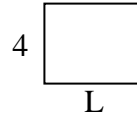
1) Perimeter = 30



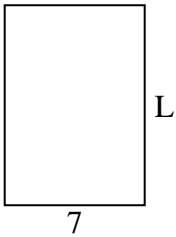
2) Perimeter = 28



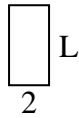
3) Perimeter = 18



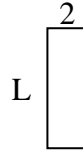
4) Perimeter = 34



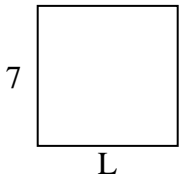
5) Perimeter = 12



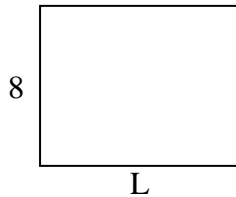
6) Perimeter = 16



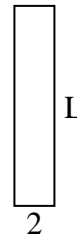
7) Perimeter = 28



8) Perimeter = 36



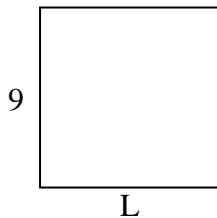
9) Perimeter = 24



10) Perimeter = 12



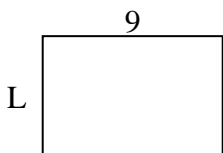
11) Perimeter = 36



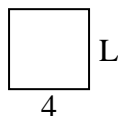
12) Perimeter = 20



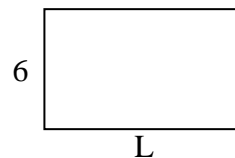
13) Perimeter = 30



14) Perimeter = 16



15) Perimeter = 32



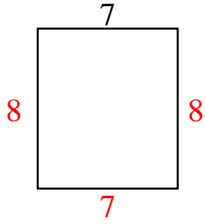
Answers

1. _____
2. _____
3. _____
4. _____
5. _____
6. _____
7. _____
8. _____
9. _____
10. _____
11. _____
12. _____
13. _____
14. _____
15. _____

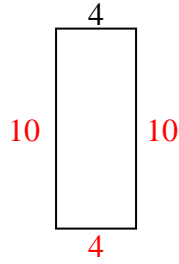


Determine the value of 'L'. Lengths are in cm (not to scale).

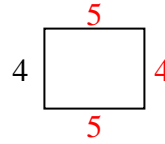
1) Perimeter = 30



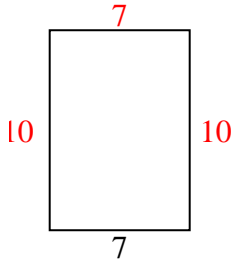
2) Perimeter = 28



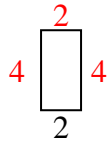
3) Perimeter = 18



4) Perimeter = 34



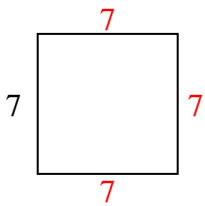
5) Perimeter = 12



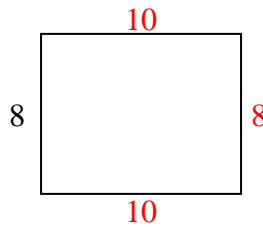
6) Perimeter = 16



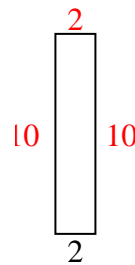
7) Perimeter = 28



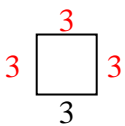
8) Perimeter = 36



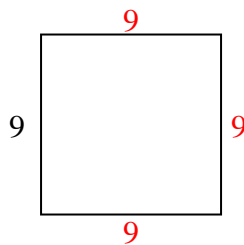
9) Perimeter = 24



10) Perimeter = 12



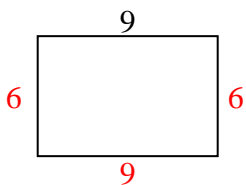
11) Perimeter = 36



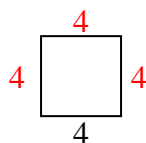
12) Perimeter = 20



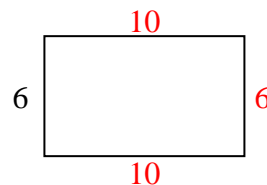
13) Perimeter = 30



14) Perimeter = 16



15) Perimeter = 32



Answers

1. 8 cm
2. 10 cm
3. 5 cm
4. 10 cm
5. 4 cm
6. 6 cm
7. 7 cm
8. 10 cm
9. 10 cm
10. 3 cm
11. 9 cm
12. 7 cm
13. 6 cm
14. 4 cm
15. 10 cm