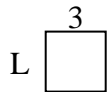


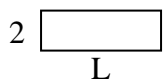


Determine the value of 'L'.

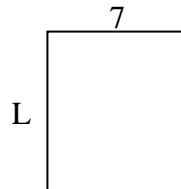
1) Area = $9 u^2$



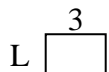
2) Area = $12 u^2$



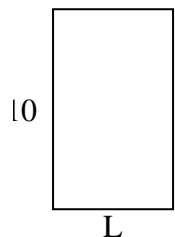
3) Area = $56 u^2$



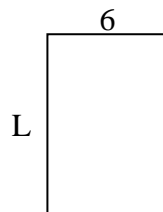
4) Area = $6 u^2$




5) Area = $60 u^2$



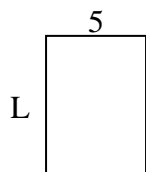
6) Area = $54 u^2$



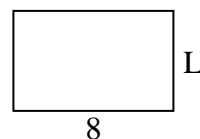
7) Area = $20 u^2$



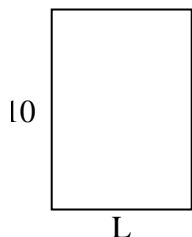
8) Area = $35 u^2$



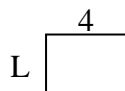
9) Area = $40 u^2$



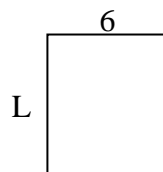
10) Area = $70 u^2$



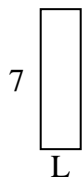
11) Area = $12 u^2$



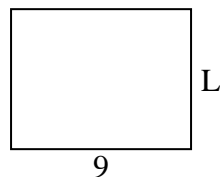
12) Area = $42 u^2$



13) Area = $14 u^2$



14) Area = $63 u^2$



15) Area = $36 u^2$



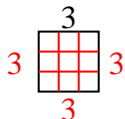
Answers

1. _____
2. _____
3. _____
4. _____
5. _____
6. _____
7. _____
8. _____
9. _____
10. _____
11. _____
12. _____
13. _____
14. _____
15. _____

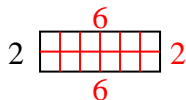


Determine the value of 'L'.

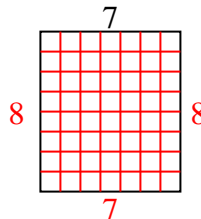
1) Area = $9 u^2$



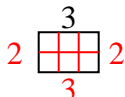
2) Area = $12 u^2$



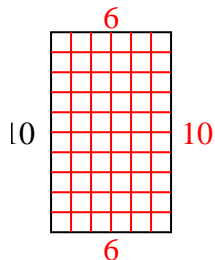
3) Area = $56 u^2$



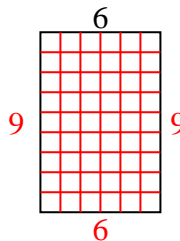
4) Area = $6 u^2$



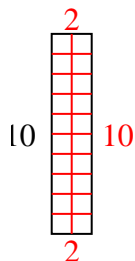
5) Area = $60 u^2$



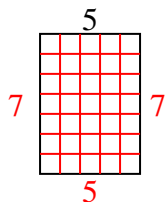
6) Area = $54 u^2$



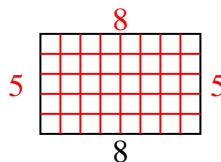
7) Area = $20 u^2$



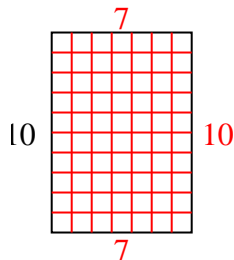
8) Area = $35 u^2$



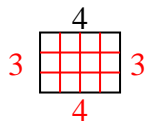
9) Area = $40 u^2$



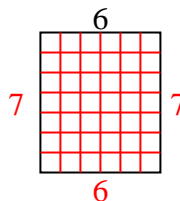
10) Area = $70 u^2$



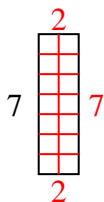
11) Area = $12 u^2$



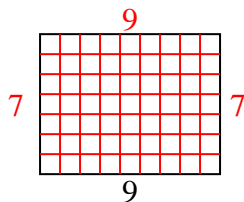
12) Area = $42 u^2$



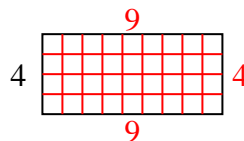
13) Area = $14 u^2$



14) Area = $63 u^2$



15) Area = $36 u^2$



Answers

1. 3

2. 6

3. 8

4. 2

5. 6

6. 9

7. 2

8. 7

9. 5

10. 7

11. 3

12. 7

13. 2

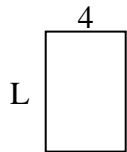
14. 7

15. 9

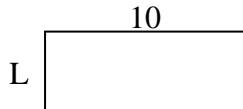


Determine the value of 'L'.

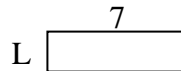
1) Area = $24 u^2$



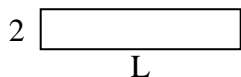
2) Area = $40 u^2$



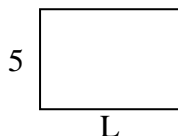
3) Area = $14 u^2$



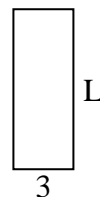
4) Area = $20 u^2$



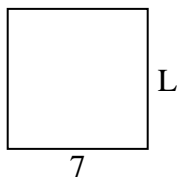
5) Area = $35 u^2$



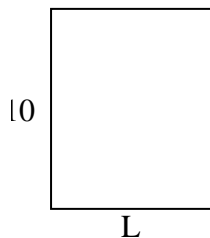
6) Area = $24 u^2$



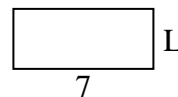
7) Area = $49 u^2$



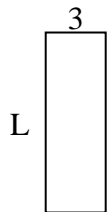
8) Area = $80 u^2$



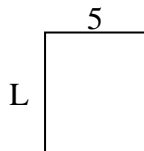
9) Area = $21 u^2$



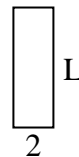
10) Area = $27 u^2$



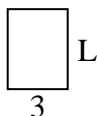
11) Area = $30 u^2$




12) Area = $12 u^2$



13) Area = $12 u^2$



14) Area = $50 u^2$



15) Area = $6 u^2$



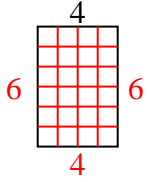
Answers

1. _____
2. _____
3. _____
4. _____
5. _____
6. _____
7. _____
8. _____
9. _____
10. _____
11. _____
12. _____
13. _____
14. _____
15. _____

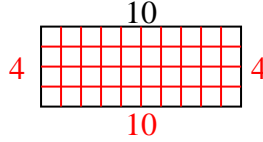


Determine the value of 'L'.

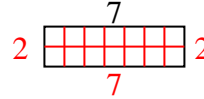
1) Area = $24 u^2$



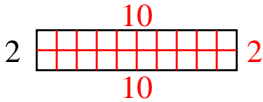
2) Area = $40 u^2$



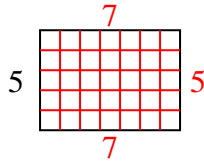
3) Area = $14 u^2$



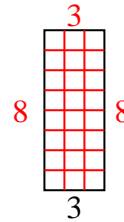
4) Area = $20 u^2$



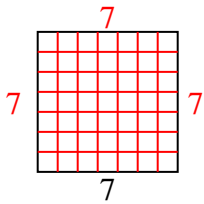
5) Area = $35 u^2$



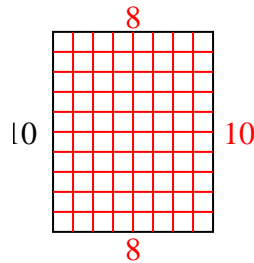
6) Area = $24 u^2$



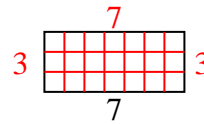
7) Area = $49 u^2$



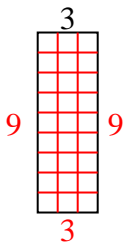
8) Area = $80 u^2$



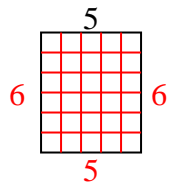
9) Area = $21 u^2$



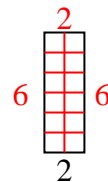
10) Area = $27 u^2$



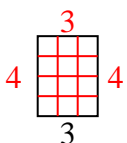
11) Area = $30 u^2$



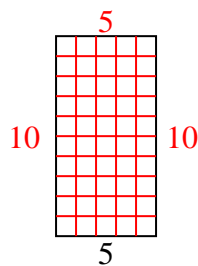
12) Area = $12 u^2$



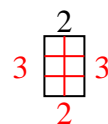
13) Area = $12 u^2$



14) Area = $50 u^2$



15) Area = $6 u^2$




Answers

1. 6
2. 4
3. 2
4. 10
5. 7
6. 8
7. 7
8. 8
9. 3
10. 9
11. 6
12. 6
13. 4
14. 10
15. 3

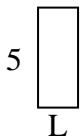


Determine the value of 'L'.

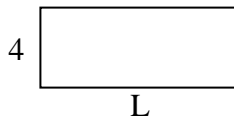
1) Area = $36 u^2$



2) Area = $10 u^2$



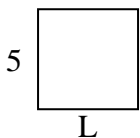
3) Area = $40 u^2$



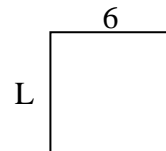
4) Area = $14 u^2$



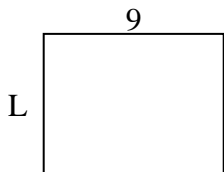
5) Area = $25 u^2$



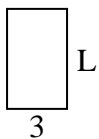
6) Area = $36 u^2$



7) Area = $63 u^2$




8) Area = $15 u^2$



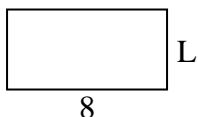
9) Area = $6 u^2$



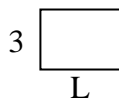
10) Area = $45 u^2$



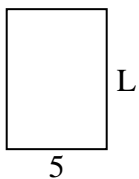
11) Area = $32 u^2$



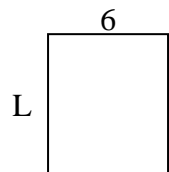
12) Area = $12 u^2$



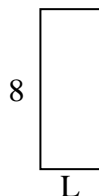
13) Area = $35 u^2$



14) Area = $42 u^2$



15) Area = $24 u^2$



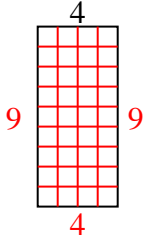
Answers

1. _____
2. _____
3. _____
4. _____
5. _____
6. _____
7. _____
8. _____
9. _____
10. _____
11. _____
12. _____
13. _____
14. _____
15. _____

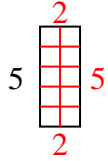


Determine the value of 'L'.

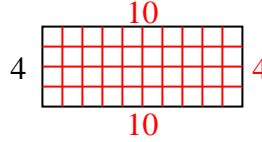
1) Area = $36 u^2$



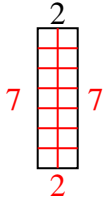
2) Area = $10 u^2$



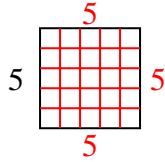
3) Area = $40 u^2$



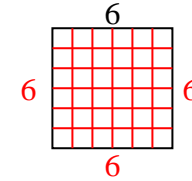
4) Area = $14 u^2$



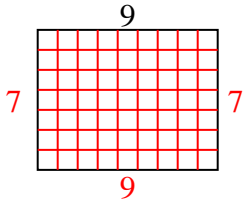
5) Area = $25 u^2$



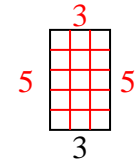
6) Area = $36 u^2$



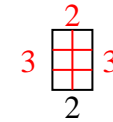
7) Area = $63 u^2$



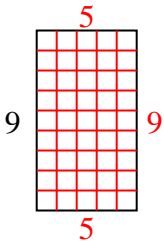
8) Area = $15 u^2$



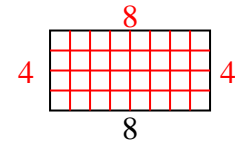
9) Area = $6 u^2$



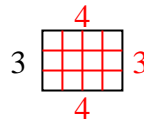
10) Area = $45 u^2$



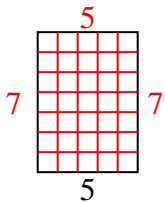
11) Area = $32 u^2$



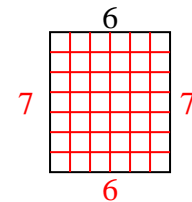
12) Area = $12 u^2$



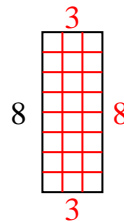
13) Area = $35 u^2$



14) Area = $42 u^2$



15) Area = $24 u^2$



Answers

1. 9

2. 2

3. 10

4. 7

5. 5

6. 6

7. 7

8. 5

9. 3

10. 5

11. 4

12. 4

13. 7

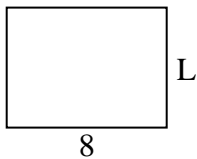
14. 7

15. 3




Determine the value of 'L'.

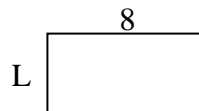
1) Area = $48 u^2$



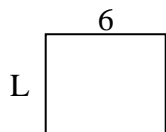
2) Area = $20 u^2$



3) Area = $32 u^2$



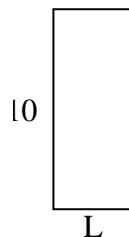
4) Area = $30 u^2$



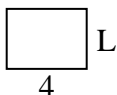
5) Area = $8 u^2$



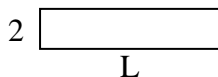
6) Area = $40 u^2$



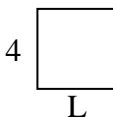
7) Area = $12 u^2$




8) Area = $18 u^2$



9) Area = $16 u^2$



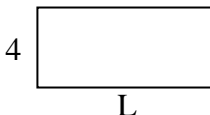
10) Area = $50 u^2$



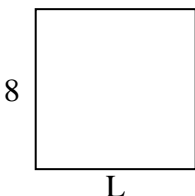
11) Area = $10 u^2$



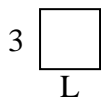
12) Area = $36 u^2$



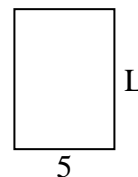
13) Area = $64 u^2$



14) Area = $9 u^2$



15) Area = $35 u^2$



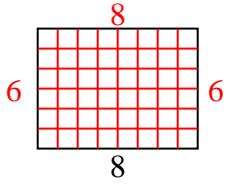
Answers

1. _____
2. _____
3. _____
4. _____
5. _____
6. _____
7. _____
8. _____
9. _____
10. _____
11. _____
12. _____
13. _____
14. _____
15. _____

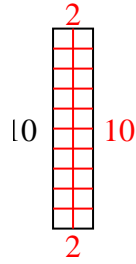


Determine the value of 'L'.

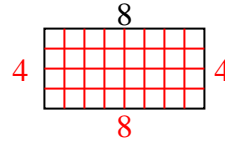
1) Area = $48 u^2$



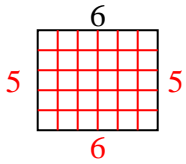
2) Area = $20 u^2$



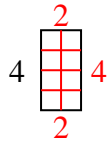
3) Area = $32 u^2$



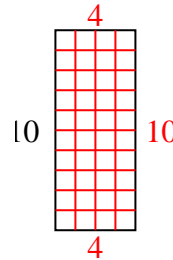
4) Area = $30 u^2$



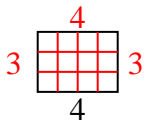
5) Area = $8 u^2$



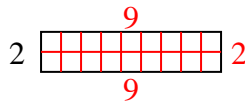
6) Area = $40 u^2$



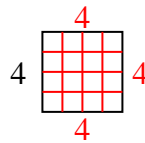
7) Area = $12 u^2$



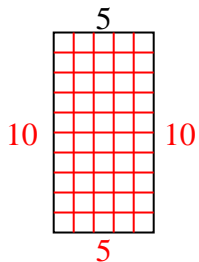
8) Area = $18 u^2$



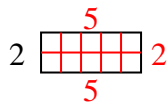
9) Area = $16 u^2$



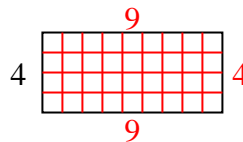
10) Area = $50 u^2$



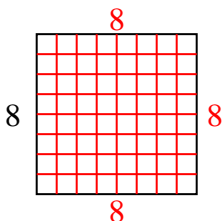
11) Area = $10 u^2$



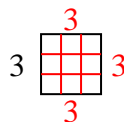
12) Area = $36 u^2$



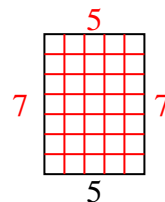
13) Area = $64 u^2$



14) Area = $9 u^2$



15) Area = $35 u^2$



Answers

1. 6

2. 2

3. 4

4. 5

5. 2

6. 4

7. 3

8. 9

9. 4

10. 10

11. 5

12. 9

13. 8

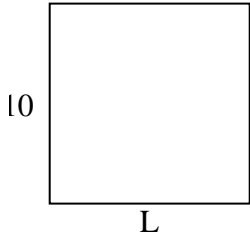
14. 3

15. 7

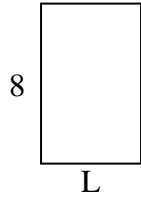


Determine the value of 'L'.

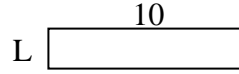
1) Area = $100 u^2$



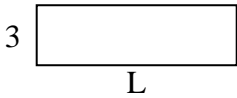
2) Area = $40 u^2$



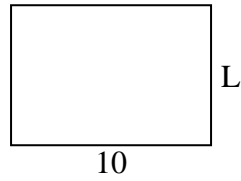
3) Area = $20 u^2$



4) Area = $30 u^2$




5) Area = $70 u^2$



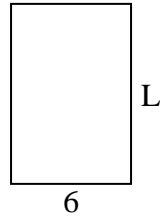
6) Area = $9 u^2$



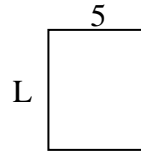
7) Area = $32 u^2$



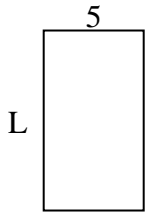
8) Area = $54 u^2$



9) Area = $30 u^2$



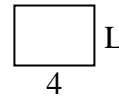
10) Area = $45 u^2$



11) Area = $10 u^2$




12) Area = $12 u^2$



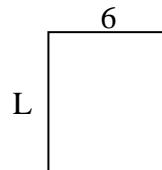
13) Area = $6 u^2$



14) Area = $18 u^2$



15) Area = $42 u^2$



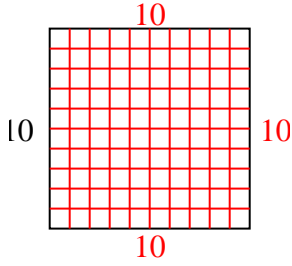
Answers

1. _____
2. _____
3. _____
4. _____
5. _____
6. _____
7. _____
8. _____
9. _____
10. _____
11. _____
12. _____
13. _____
14. _____
15. _____

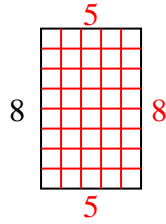


Determine the value of 'L'.

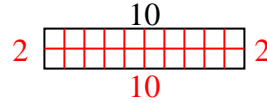
1) Area = $100 u^2$



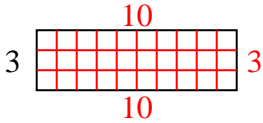
2) Area = $40 u^2$



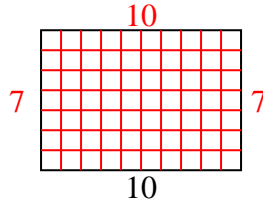
3) Area = $20 u^2$



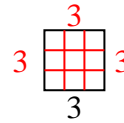
4) Area = $30 u^2$



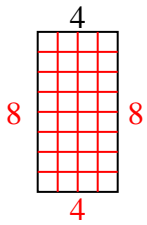
5) Area = $70 u^2$



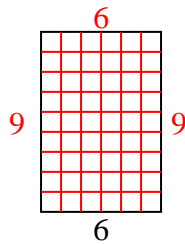
6) Area = $9 u^2$



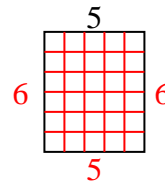
7) Area = $32 u^2$



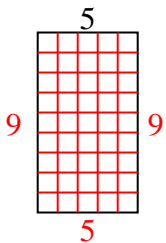
8) Area = $54 u^2$



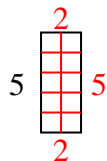
9) Area = $30 u^2$



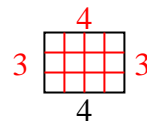
10) Area = $45 u^2$



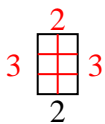
11) Area = $10 u^2$



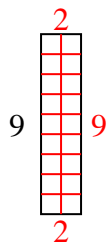
12) Area = $12 u^2$



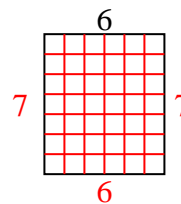
13) Area = $6 u^2$



14) Area = $18 u^2$



15) Area = $42 u^2$



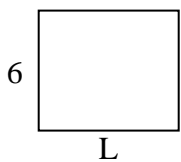
Answers

1. 10
2. 5
3. 2
4. 10
5. 7
6. 3
7. 8
8. 9
9. 6
10. 9
11. 2
12. 3
13. 3
14. 2
15. 7

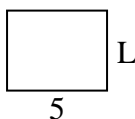


Determine the value of 'L'.


1) Area = $42 u^2$



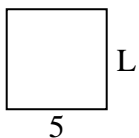
2) Area = $20 u^2$




3) Area = $28 u^2$



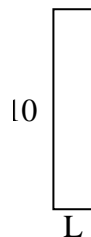
4) Area = $25 u^2$



5) Area = $60 u^2$




6) Area = $20 u^2$



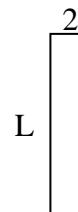
7) Area = $6 u^2$



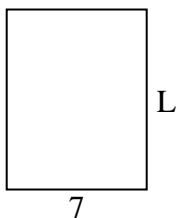
8) Area = $50 u^2$



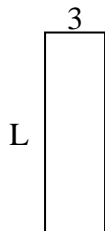
9) Area = $18 u^2$



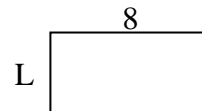
10) Area = $63 u^2$



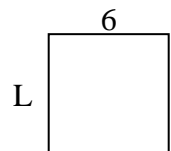
11) Area = $30 u^2$




12) Area = $32 u^2$



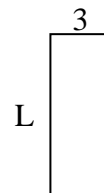
13) Area = $36 u^2$



14) Area = $16 u^2$



15) Area = $24 u^2$



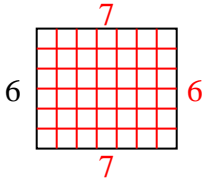
Answers

1. _____
2. _____
3. _____
4. _____
5. _____
6. _____
7. _____
8. _____
9. _____
10. _____
11. _____
12. _____
13. _____
14. _____
15. _____

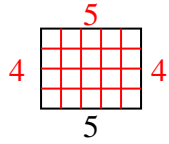


Determine the value of 'L'.

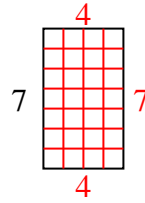
1) Area = $42 u^2$



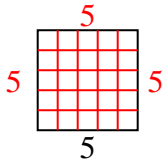
2) Area = $20 u^2$



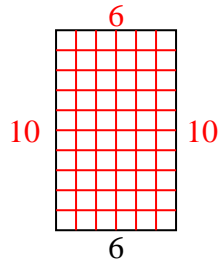
3) Area = $28 u^2$



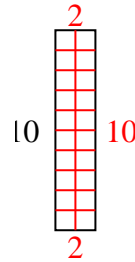
4) Area = $25 u^2$



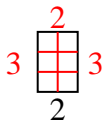
5) Area = $60 u^2$



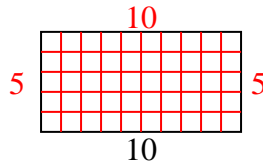
6) Area = $20 u^2$



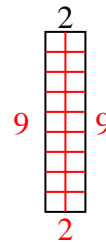
7) Area = $6 u^2$



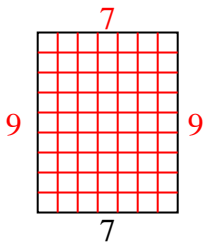
8) Area = $50 u^2$



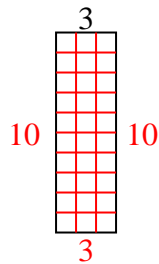
9) Area = $18 u^2$



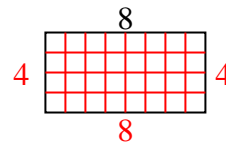
10) Area = $63 u^2$



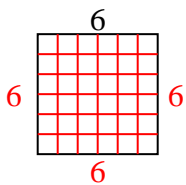
11) Area = $30 u^2$



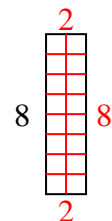
12) Area = $32 u^2$



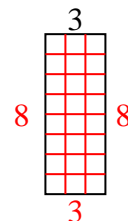
13) Area = $36 u^2$



14) Area = $16 u^2$



15) Area = $24 u^2$



Answers

1. 7

2. 4

3. 4

4. 5

5. 10

6. 2

7. 3

8. 5

9. 9

10. 9

11. 10

12. 4

13. 6

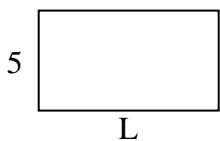
14. 2

15. 8

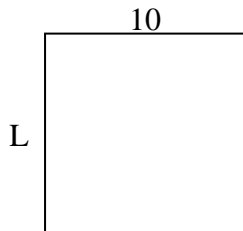


Determine the value of 'L'.

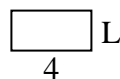
1) Area = $45 u^2$



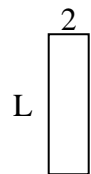
2) Area = $100 u^2$



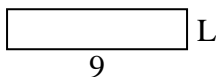
3) Area = $8 u^2$



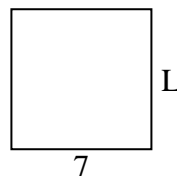
4) Area = $14 u^2$



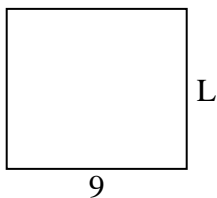
5) Area = $18 u^2$



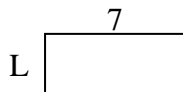
6) Area = $49 u^2$



7) Area = $72 u^2$



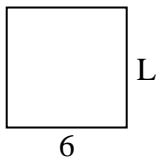
8) Area = $21 u^2$



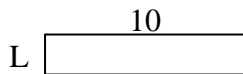
9) Area = $12 u^2$



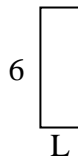
10) Area = $36 u^2$



11) Area = $20 u^2$



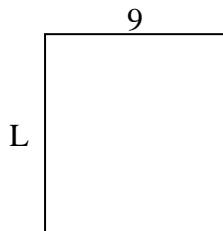
12) Area = $12 u^2$



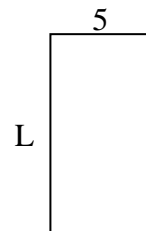
13) Area = $4 u^2$



14) Area = $90 u^2$



15) Area = $50 u^2$



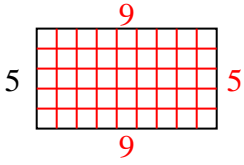
Answers

1. _____
2. _____
3. _____
4. _____
5. _____
6. _____
7. _____
8. _____
9. _____
10. _____
11. _____
12. _____
13. _____
14. _____
15. _____

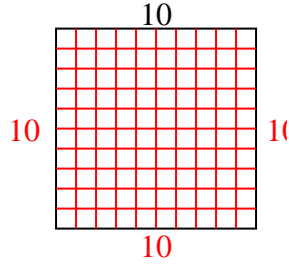


Determine the value of 'L'.

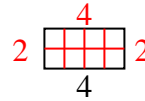
1) Area = $45 u^2$



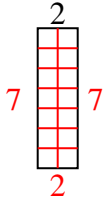
2) Area = $100 u^2$



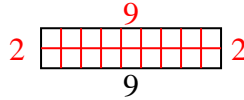
3) Area = $8 u^2$



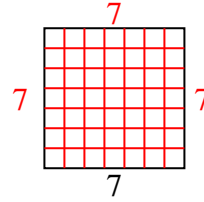
4) Area = $14 u^2$



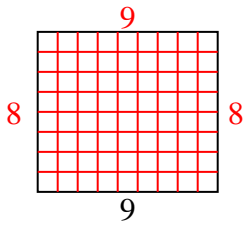
5) Area = $18 u^2$



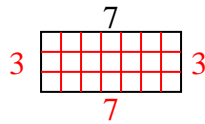
6) Area = $49 u^2$



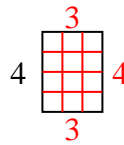
7) Area = $72 u^2$



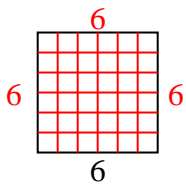
8) Area = $21 u^2$



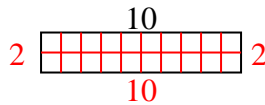
9) Area = $12 u^2$



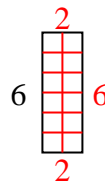
10) Area = $36 u^2$



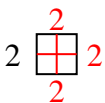
11) Area = $20 u^2$



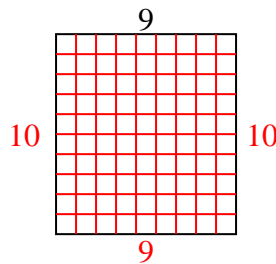
12) Area = $12 u^2$



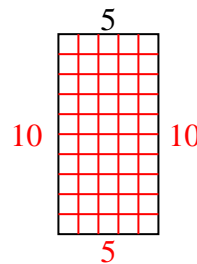
13) Area = $4 u^2$



14) Area = $90 u^2$



15) Area = $50 u^2$



Answers

1. 9
2. 10
3. 2
4. 7
5. 2
6. 7
7. 8
8. 3
9. 3
10. 6
11. 2
12. 2
13. 2
14. 10
15. 10

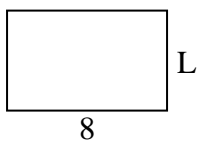


Determine the value of 'L'.

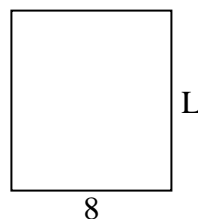
1) Area = $8 u^2$



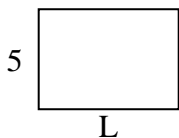
2) Area = $40 u^2$



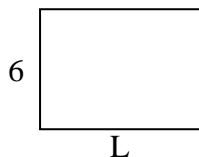
3) Area = $72 u^2$



4) Area = $35 u^2$



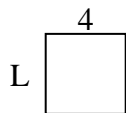
5) Area = $48 u^2$



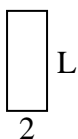
6) Area = $36 u^2$



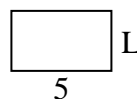
7) Area = $16 u^2$



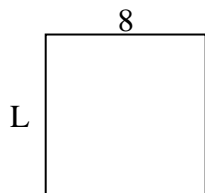
8) Area = $10 u^2$



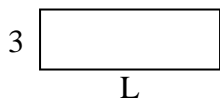
9) Area = $15 u^2$



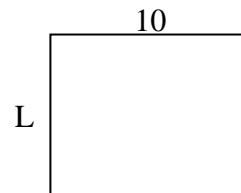
10) Area = $64 u^2$



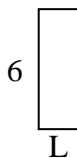
11) Area = $27 u^2$



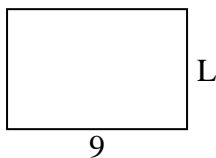
12) Area = $80 u^2$



13) Area = $12 u^2$



14) Area = $54 u^2$



15) Area = $9 u^2$



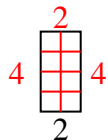
Answers

1. _____
2. _____
3. _____
4. _____
5. _____
6. _____
7. _____
8. _____
9. _____
10. _____
11. _____
12. _____
13. _____
14. _____
15. _____

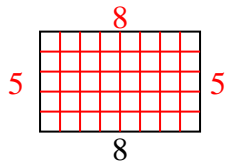


Determine the value of 'L'.

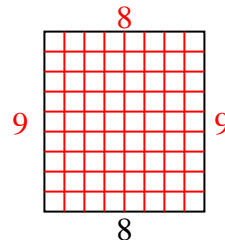
1) Area = $8 u^2$



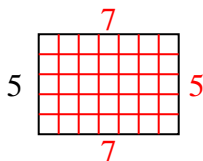
2) Area = $40 u^2$



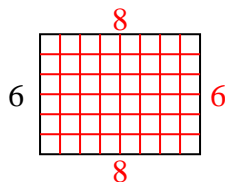
3) Area = $72 u^2$



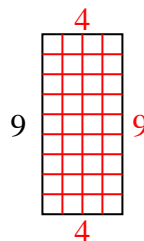
4) Area = $35 u^2$



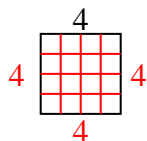
5) Area = $48 u^2$



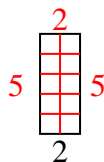
6) Area = $36 u^2$



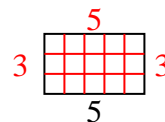
7) Area = $16 u^2$



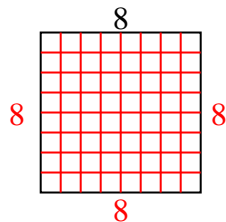
8) Area = $10 u^2$



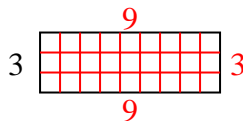
9) Area = $15 u^2$



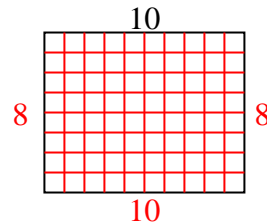
10) Area = $64 u^2$



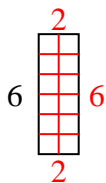
11) Area = $27 u^2$



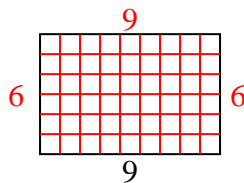
12) Area = $80 u^2$



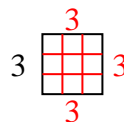
13) Area = $12 u^2$



14) Area = $54 u^2$



15) Area = $9 u^2$



Answers

1. 4

2. 5

3. 9

4. 7

5. 8

6. 4

7. 4

8. 5

9. 3

10. 8

11. 9

12. 8

13. 2

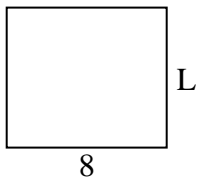
14. 6

15. 3

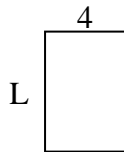


Determine the value of 'L'.

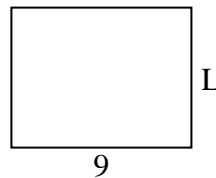
1) Area = $56 u^2$



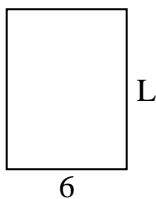
2) Area = $24 u^2$



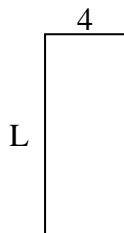
3) Area = $63 u^2$



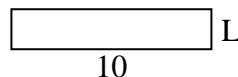
4) Area = $48 u^2$



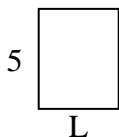
5) Area = $40 u^2$



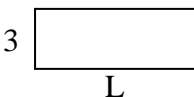
6) Area = $20 u^2$



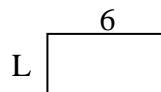
7) Area = $20 u^2$



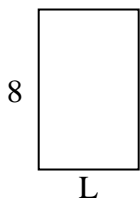
8) Area = $24 u^2$



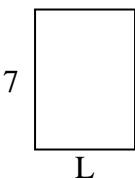
9) Area = $18 u^2$



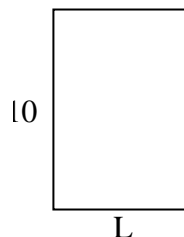
10) Area = $40 u^2$



11) Area = $35 u^2$




12) Area = $70 u^2$



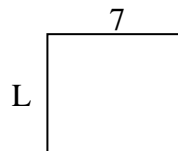
13) Area = $4 u^2$



14) Area = $28 u^2$



15) Area = $42 u^2$



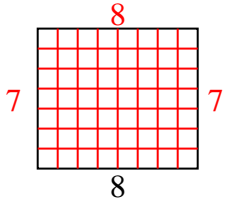
Answers

1. _____
2. _____
3. _____
4. _____
5. _____
6. _____
7. _____
8. _____
9. _____
10. _____
11. _____
12. _____
13. _____
14. _____
15. _____

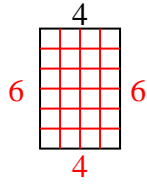


Determine the value of 'L'.

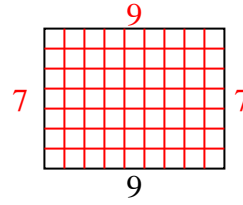
1) Area = $56 u^2$



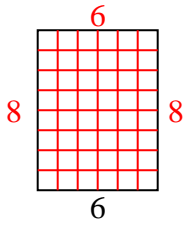
2) Area = $24 u^2$



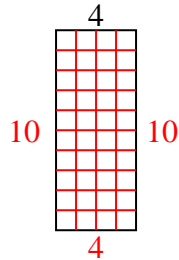
3) Area = $63 u^2$



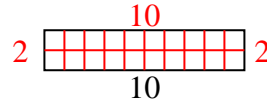
4) Area = $48 u^2$



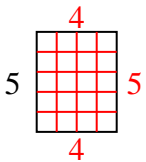
5) Area = $40 u^2$



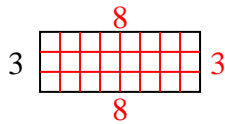
6) Area = $20 u^2$



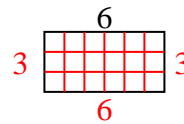
7) Area = $20 u^2$



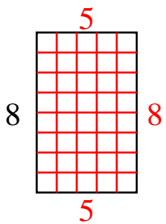
8) Area = $24 u^2$



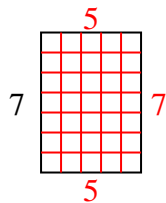
9) Area = $18 u^2$



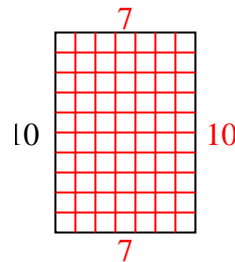
10) Area = $40 u^2$



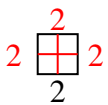
11) Area = $35 u^2$



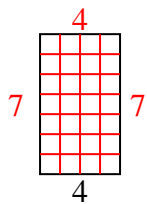
12) Area = $70 u^2$



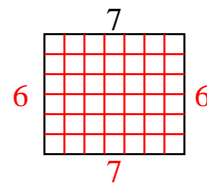
13) Area = $4 u^2$



14) Area = $28 u^2$



15) Area = $42 u^2$



Answers

1. 7

2. 6

3. 7

4. 8

5. 10

6. 2

7. 4

8. 8

9. 3

10. 5

11. 5

12. 7

13. 2

14. 7

15. 6

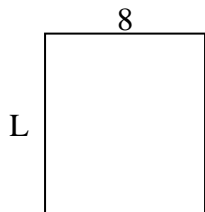


Determine the value of 'L'.

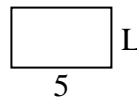
1) Area = $21 u^2$



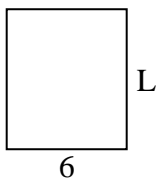
2) Area = $72 u^2$



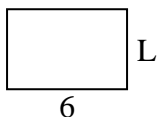
3) Area = $15 u^2$



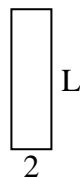
4) Area = $42 u^2$



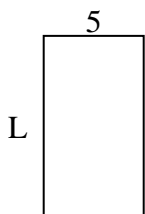
5) Area = $24 u^2$



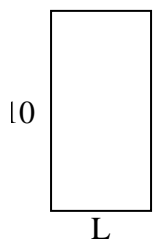
6) Area = $14 u^2$



7) Area = $45 u^2$



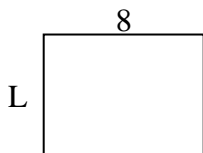
8) Area = $50 u^2$




9) Area = $8 u^2$



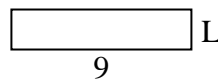
10) Area = $48 u^2$



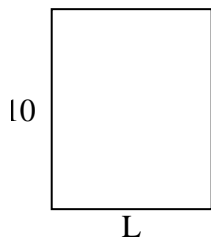
11) Area = $40 u^2$



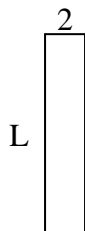
12) Area = $18 u^2$



13) Area = $80 u^2$



14) Area = $20 u^2$



15) Area = $10 u^2$



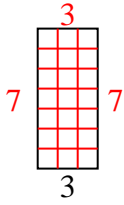
Answers

1. _____
2. _____
3. _____
4. _____
5. _____
6. _____
7. _____
8. _____
9. _____
10. _____
11. _____
12. _____
13. _____
14. _____
15. _____

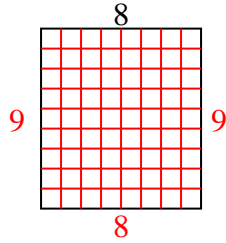


Determine the value of 'L'.

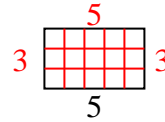
1) Area = $21 u^2$



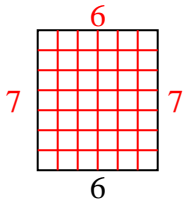
2) Area = $72 u^2$



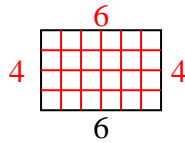
3) Area = $15 u^2$



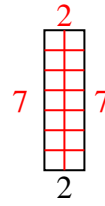
4) Area = $42 u^2$



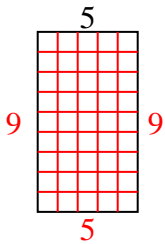
5) Area = $24 u^2$



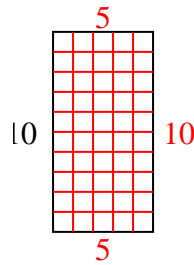
6) Area = $14 u^2$



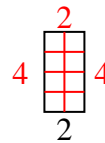
7) Area = $45 u^2$



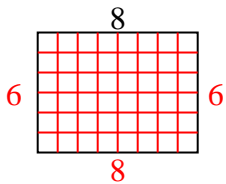
8) Area = $50 u^2$



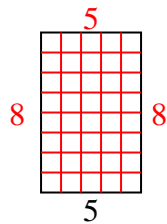
9) Area = $8 u^2$



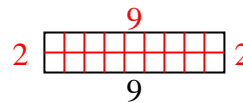
10) Area = $48 u^2$



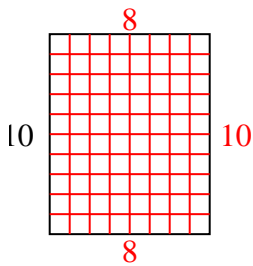
11) Area = $40 u^2$



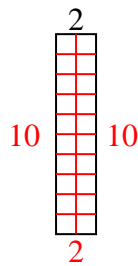
12) Area = $18 u^2$



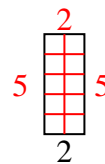
13) Area = $80 u^2$



14) Area = $20 u^2$



15) Area = $10 u^2$



Answers

1. 7
2. 9
3. 3
4. 7
5. 4
6. 7
7. 9
8. 5
9. 4
10. 6
11. 8
12. 2
13. 8
14. 10
15. 5