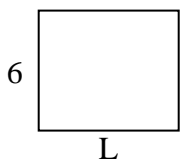


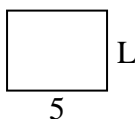


Determine the value of 'L'.


1) Area = $42 u^2$



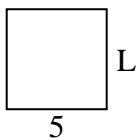
2) Area = $20 u^2$




3) Area = $28 u^2$



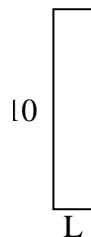
4) Area = $25 u^2$



5) Area = $60 u^2$




6) Area = $20 u^2$



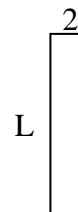
7) Area = $6 u^2$



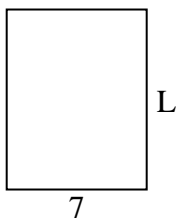
8) Area = $50 u^2$



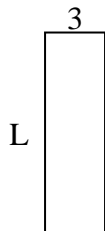
9) Area = $18 u^2$



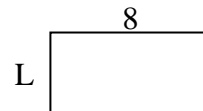
10) Area = $63 u^2$



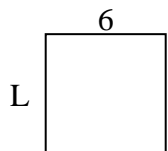
11) Area = $30 u^2$




12) Area = $32 u^2$



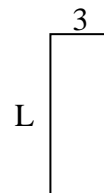
13) Area = $36 u^2$



14) Area = $16 u^2$



15) Area = $24 u^2$



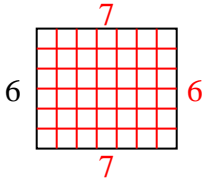
Answers

1. _____
2. _____
3. _____
4. _____
5. _____
6. _____
7. _____
8. _____
9. _____
10. _____
11. _____
12. _____
13. _____
14. _____
15. _____

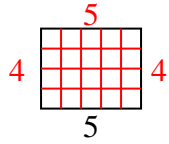


Determine the value of 'L'.

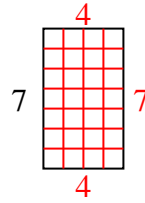
1) Area = $42 u^2$



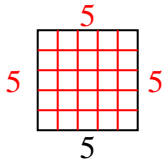
2) Area = $20 u^2$



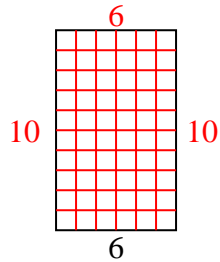
3) Area = $28 u^2$



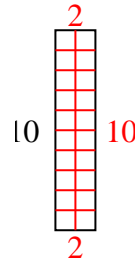
4) Area = $25 u^2$



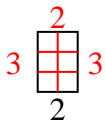
5) Area = $60 u^2$



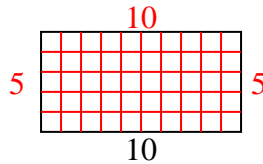
6) Area = $20 u^2$



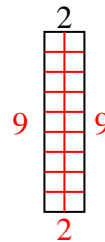
7) Area = $6 u^2$



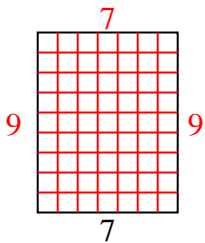
8) Area = $50 u^2$



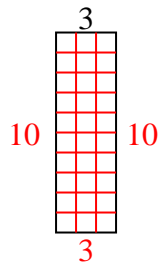
9) Area = $18 u^2$



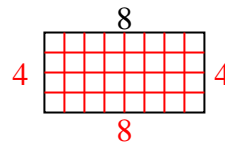
10) Area = $63 u^2$



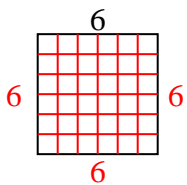
11) Area = $30 u^2$



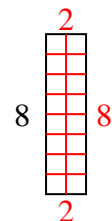
12) Area = $32 u^2$



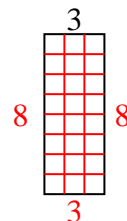
13) Area = $36 u^2$



14) Area = $16 u^2$



15) Area = $24 u^2$



Answers

1. 7

2. 4

3. 4

4. 5

5. 10

6. 2

7. 3

8. 5

9. 9

10. 9

11. 10

12. 4

13. 6

14. 2

15. 8