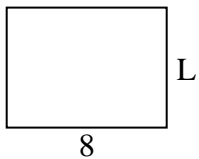





Determine the value of 'L'.

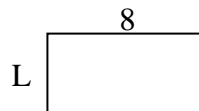
1) Area = $48 u^2$



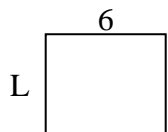
2) Area = $20 u^2$



3) Area = $32 u^2$



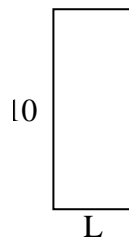
4) Area = $30 u^2$



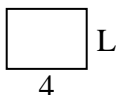
5) Area = $8 u^2$



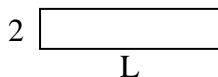
6) Area = $40 u^2$



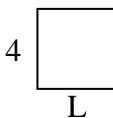
7) Area = $12 u^2$




8) Area = $18 u^2$



9) Area = $16 u^2$



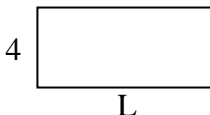
10) Area = $50 u^2$



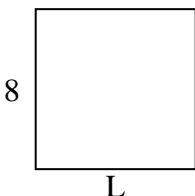
11) Area = $10 u^2$



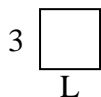
12) Area = $36 u^2$



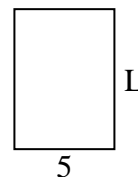
13) Area = $64 u^2$



14) Area = $9 u^2$



15) Area = $35 u^2$



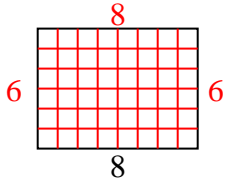
Answers

1. _____
2. _____
3. _____
4. _____
5. _____
6. _____
7. _____
8. _____
9. _____
10. _____
11. _____
12. _____
13. _____
14. _____
15. _____

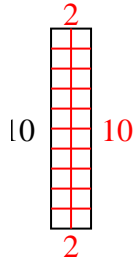


Determine the value of 'L'.

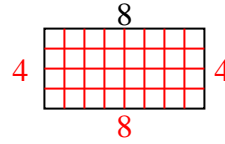
1) Area = $48 u^2$



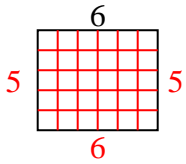
2) Area = $20 u^2$



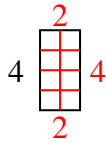
3) Area = $32 u^2$



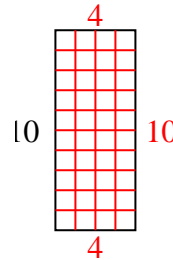
4) Area = $30 u^2$



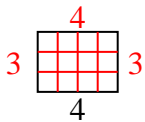
5) Area = $8 u^2$



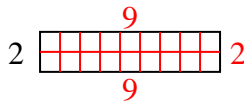
6) Area = $40 u^2$



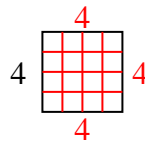
7) Area = $12 u^2$



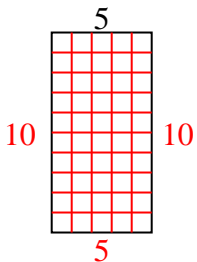
8) Area = $18 u^2$



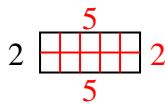
9) Area = $16 u^2$



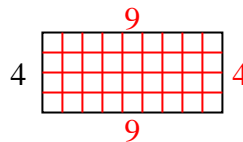
10) Area = $50 u^2$



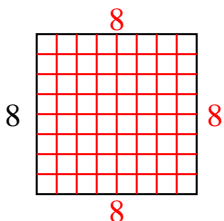
11) Area = $10 u^2$



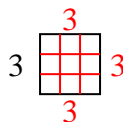
12) Area = $36 u^2$



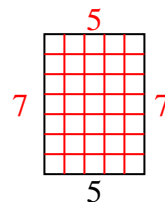
13) Area = $64 u^2$



14) Area = $9 u^2$



15) Area = $35 u^2$



Answers

1. 6
2. 2
3. 4
4. 5
5. 2
6. 4
7. 3
8. 9
9. 4
10. 10
11. 5
12. 9
13. 8
14. 3
15. 7