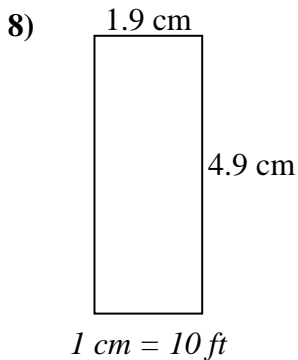
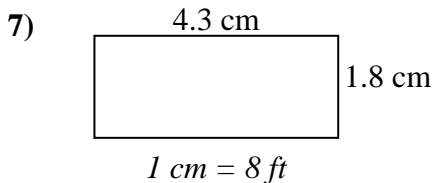
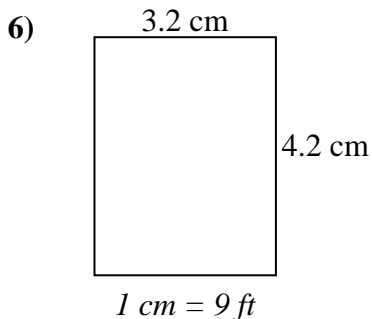
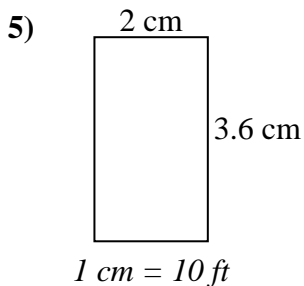
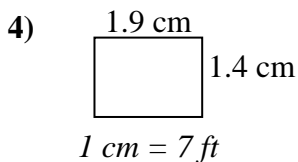
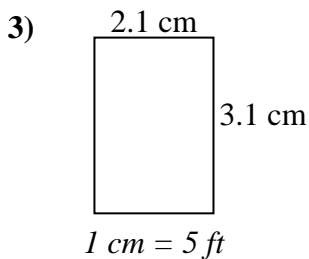
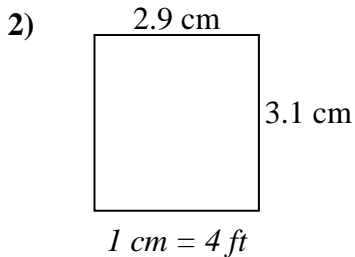
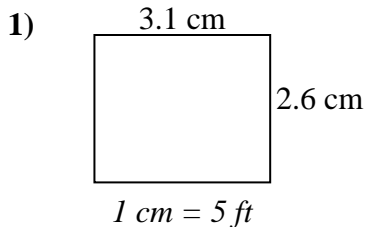




Determine the actual width, height and area of each scale rectangle.

Round the area to the nearest whole number.



Answers

1. _____

2. _____

3. _____

4. _____

5. _____

6. _____

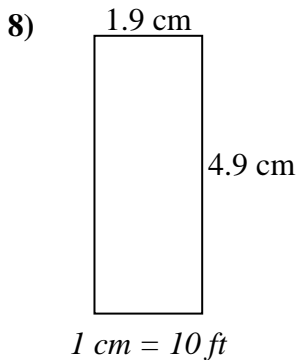
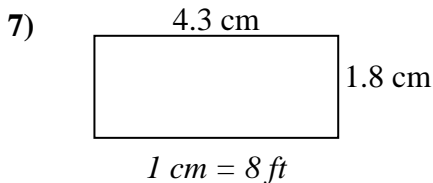
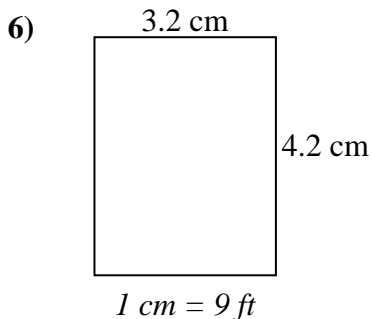
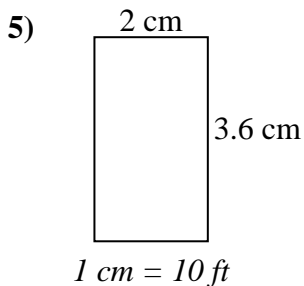
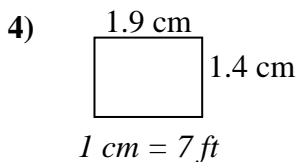
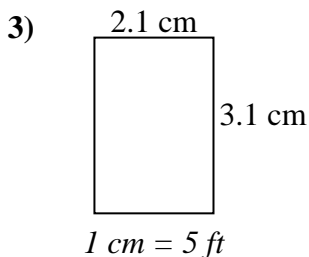
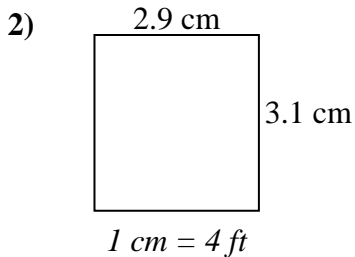
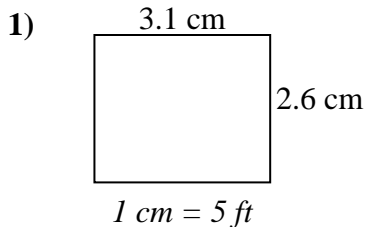
7. _____

8. _____



Determine the actual width, height and area of each scale rectangle.

Round the area to the nearest whole number.



Answers

1.	<u>15.5 ft</u>	<u>13 ft</u>	<u>202 ft²</u>
2.	<u>11.6 ft</u>	<u>12.4 ft</u>	<u>144 ft²</u>
3.	<u>10.5 ft</u>	<u>15.5 ft</u>	<u>163 ft²</u>
4.	<u>13.3 ft</u>	<u>9.8 ft</u>	<u>130 ft²</u>
5.	<u>20 ft</u>	<u>36 ft</u>	<u>720 ft²</u>
6.	<u>28.8 ft</u>	<u>37.8 ft</u>	<u>1089 ft²</u>
7.	<u>34.4 ft</u>	<u>14.4 ft</u>	<u>495 ft²</u>
8.	<u>19 ft</u>	<u>49 ft</u>	<u>931 ft²</u>