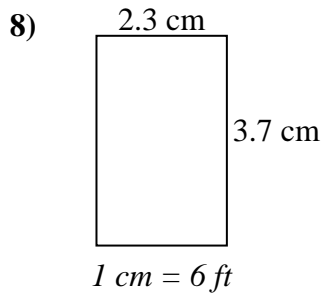
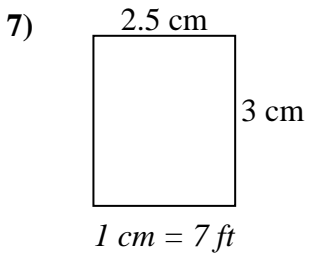
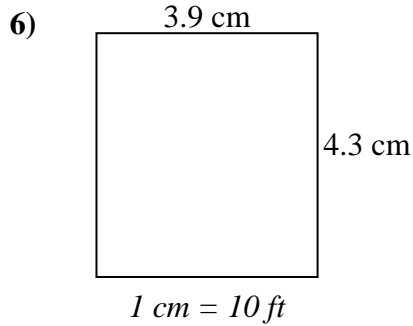
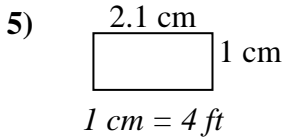
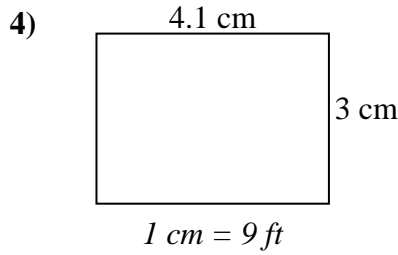
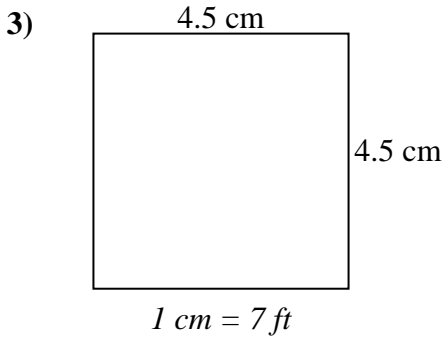
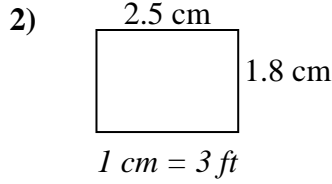
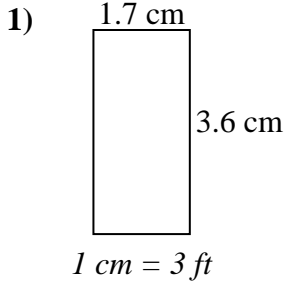




Determine the actual width, height and area of each scale rectangle.

Round the area to the nearest whole number.



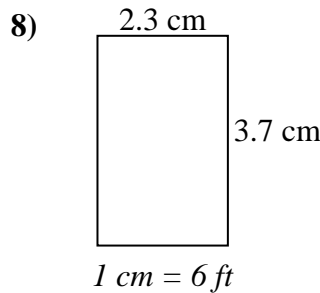
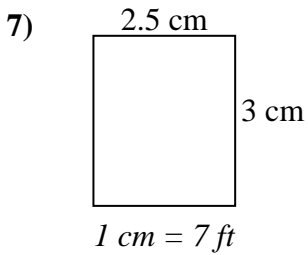
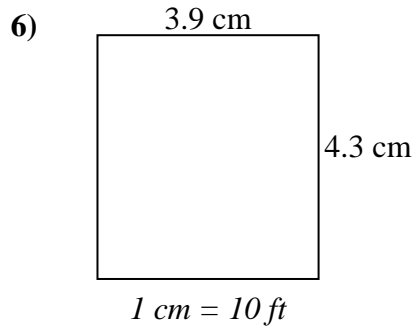
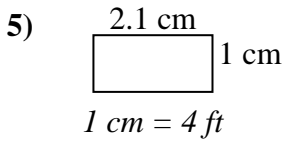
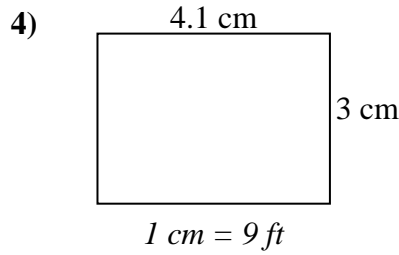
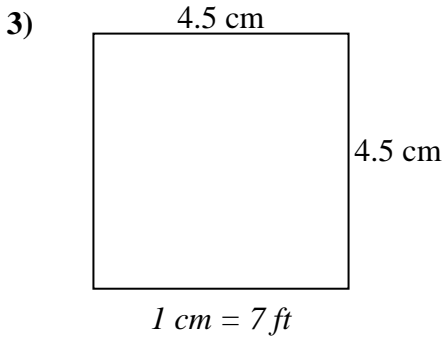
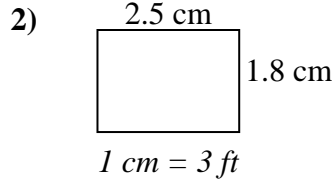
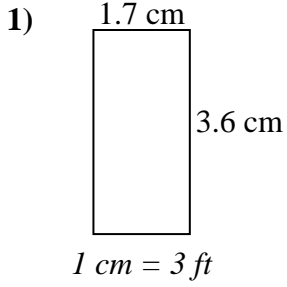
Answers

1. _____
2. _____
3. _____
4. _____
5. _____
6. _____
7. _____
8. _____



Determine the actual width, height and area of each scale rectangle.

Round the area to the nearest whole number.



Answers

1.	<u>5.1 ft</u>	<u>10.8 ft</u>	<u>55 ft²</u>
2.	<u>7.5 ft</u>	<u>5.4 ft</u>	<u>41 ft²</u>
3.	<u>31.5 ft</u>	<u>31.5 ft</u>	<u>992 ft²</u>
4.	<u>36.9 ft</u>	<u>27 ft</u>	<u>996 ft²</u>
5.	<u>8.4 ft</u>	<u>4 ft</u>	<u>34 ft²</u>
6.	<u>39 ft</u>	<u>43 ft</u>	<u>1677 ft²</u>
7.	<u>17.5 ft</u>	<u>21 ft</u>	<u>368 ft²</u>
8.	<u>13.8 ft</u>	<u>22.2 ft</u>	<u>306 ft²</u>