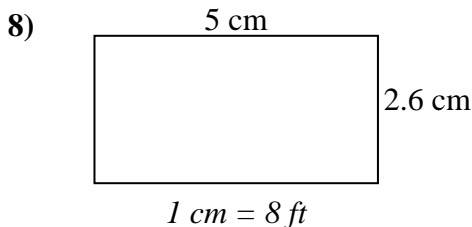
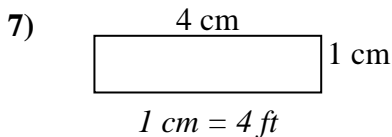
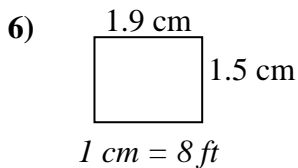
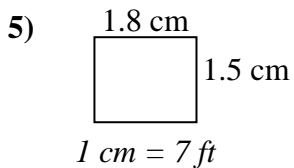
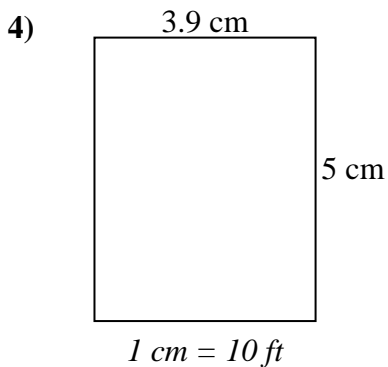
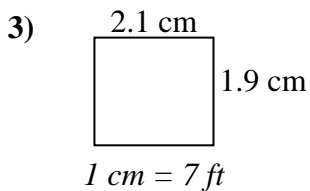
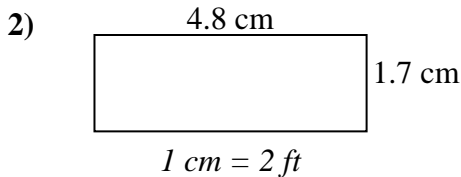
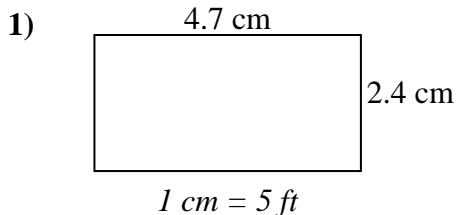




Determine the actual width, height and area of each scale rectangle.

Round the area to the nearest whole number.



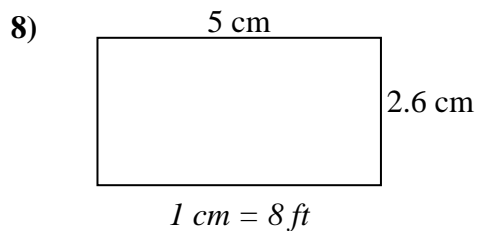
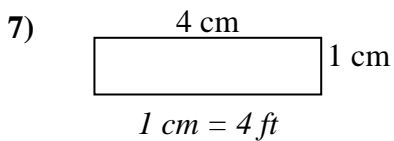
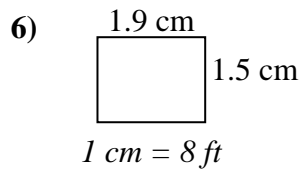
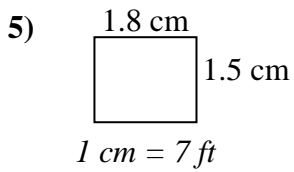
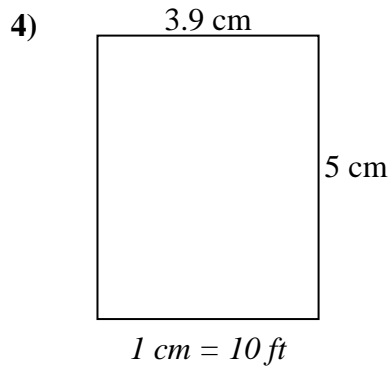
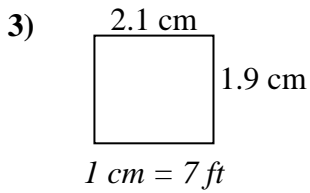
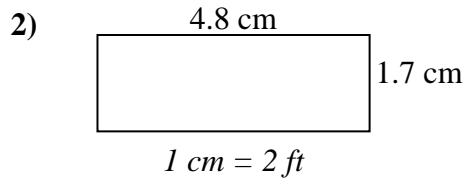
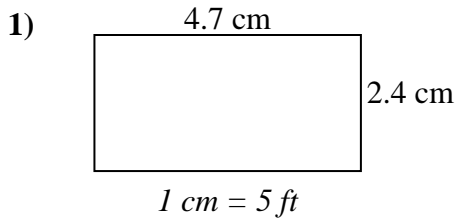
Answers

1. _____
2. _____
3. _____
4. _____
5. _____
6. _____
7. _____
8. _____



Determine the actual width, height and area of each scale rectangle.

Round the area to the nearest whole number.



Answers

1.	<u>23.5 ft</u>	<u>12 ft</u>	<u>282 ft²</u>
2.	<u>9.6 ft</u>	<u>3.4 ft</u>	<u>33 ft²</u>
3.	<u>14.7 ft</u>	<u>13.3 ft</u>	<u>196 ft²</u>
4.	<u>39 ft</u>	<u>50 ft</u>	<u>1950 ft²</u>
5.	<u>12.6 ft</u>	<u>10.5 ft</u>	<u>132 ft²</u>
6.	<u>15.2 ft</u>	<u>12 ft</u>	<u>182 ft²</u>
7.	<u>16 ft</u>	<u>4 ft</u>	<u>64 ft²</u>
8.	<u>40 ft</u>	<u>20.8 ft</u>	<u>832 ft²</u>