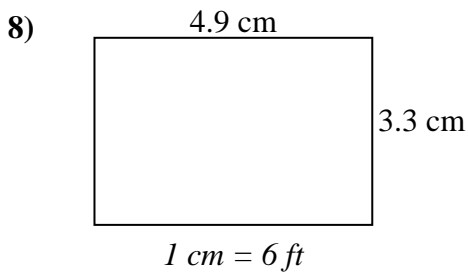
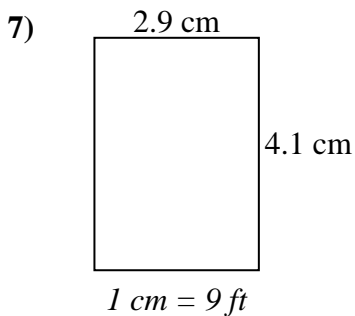
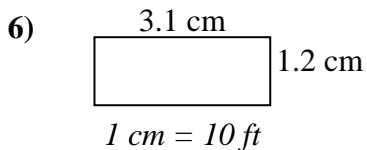
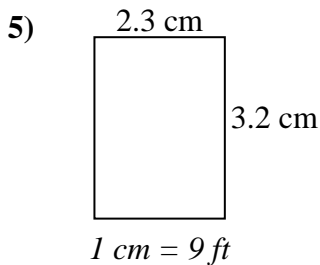
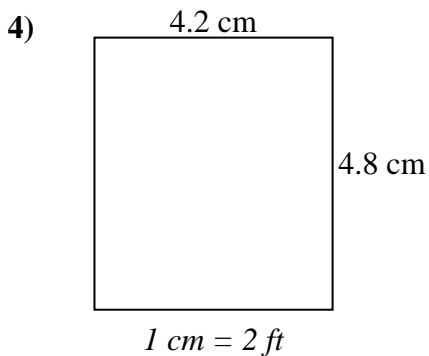
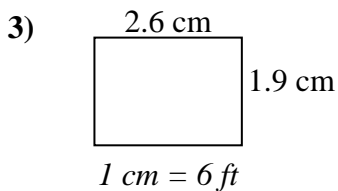
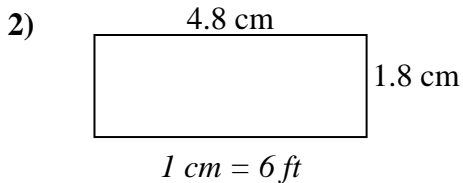
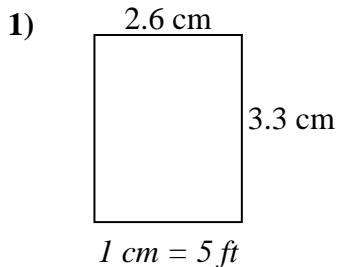




Determine the actual width, height and area of each scale rectangle.

Round the area to the nearest whole number.



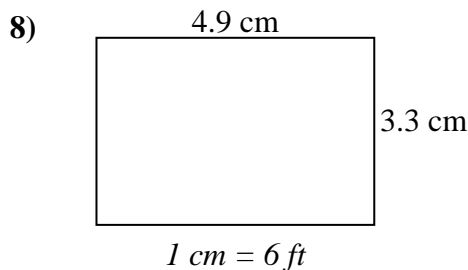
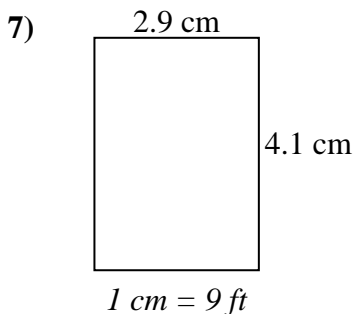
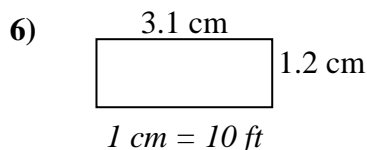
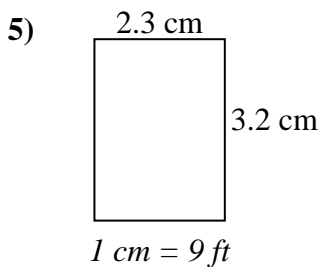
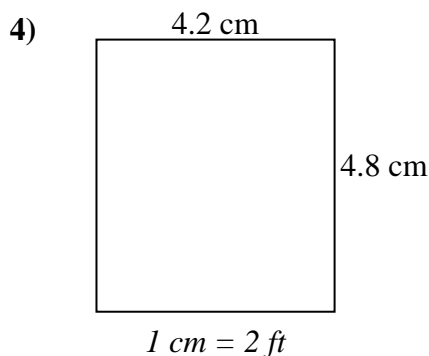
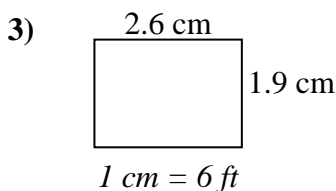
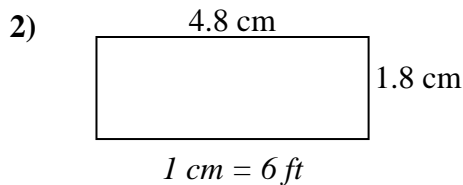
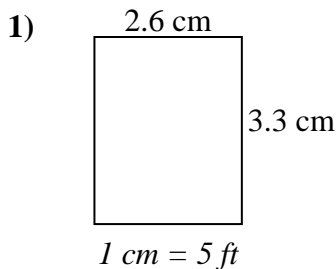
Answers

1. _____
2. _____
3. _____
4. _____
5. _____
6. _____
7. _____
8. _____



Determine the actual width, height and area of each scale rectangle.

Round the area to the nearest whole number.



Answers

1. 13 ft 16.5 ft 215 ft²
2. 28.8 ft 10.8 ft 311 ft²
3. 15.6 ft 11.4 ft 178 ft²
4. 8.4 ft 9.6 ft 81 ft²
5. 20.7 ft 28.8 ft 596 ft²
6. 31 ft 12 ft 372 ft²
7. 26.1 ft 36.9 ft 963 ft²
8. 29.4 ft 19.8 ft 582 ft²