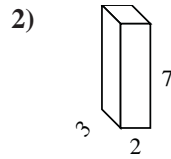
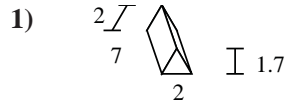
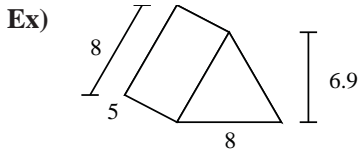




Find the surface area of each figure.

Answers



Ex. 175.2

1. _____

2. _____

3. _____

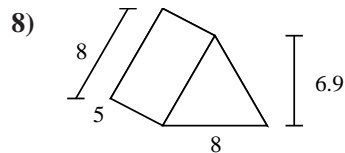
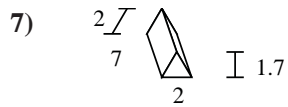
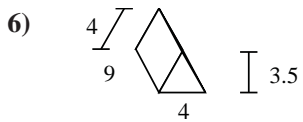
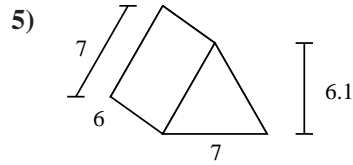
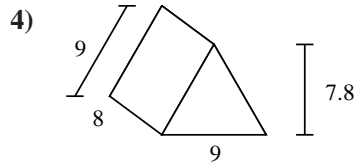
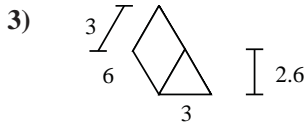
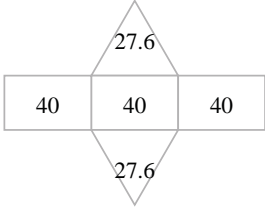
4. _____

5. _____

6. _____

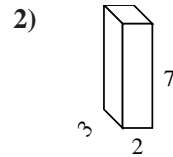
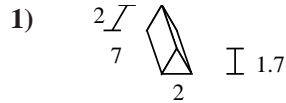
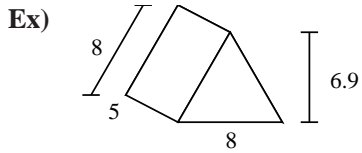
7. _____

8. _____





Find the surface area of each figure.



Answers

Ex. 175.2

1. 45.4

2. 82

3. 61.8

4. 286.2

5. 168.7

6. 122

7. 45.4

8. 175.2

