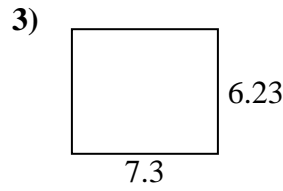
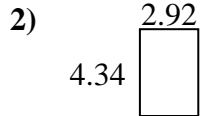
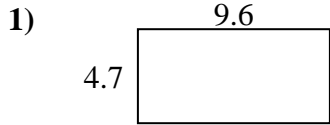




Find the perimeter and area of each figure. Each figure is in centimeters (cm). Not to scale.

Answers



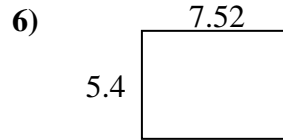
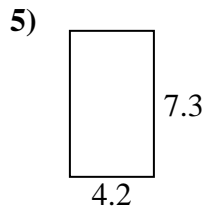
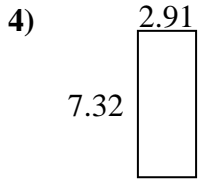
1. _____

2. _____

3. _____

4. _____

5. _____


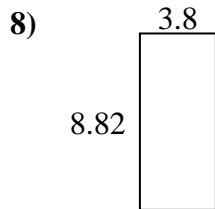
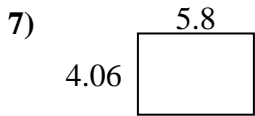


6. _____

7. _____

8. _____

9. _____

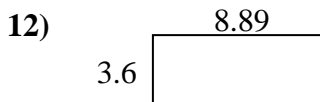
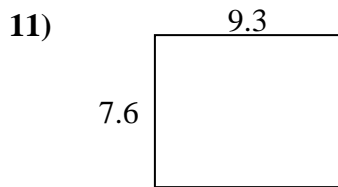
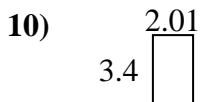


10. _____

11. _____

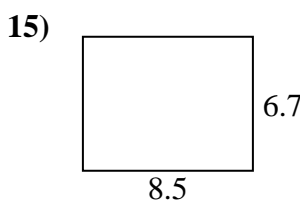
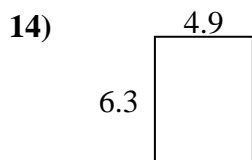
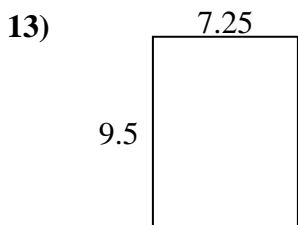
12. _____

13. _____



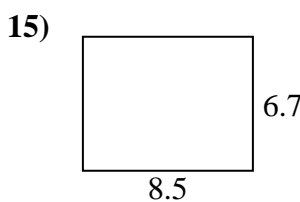
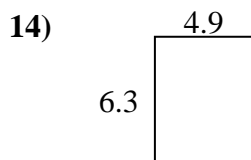
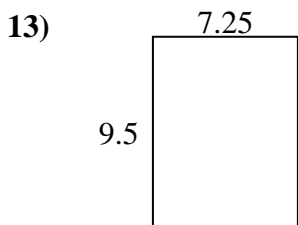
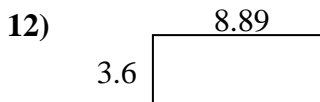
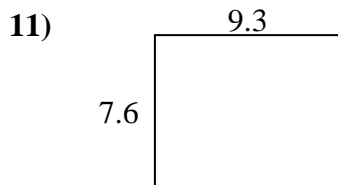
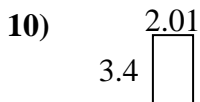

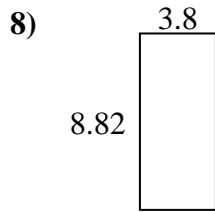
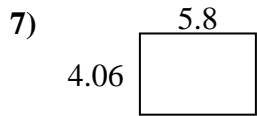
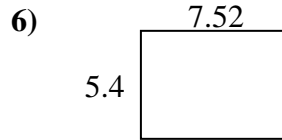
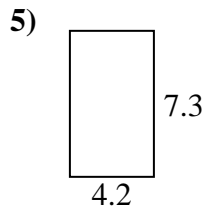
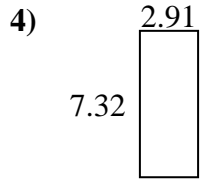
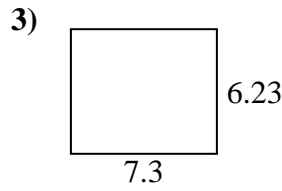
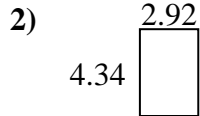
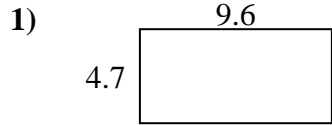
14. _____

15. _____





Find the perimeter and area of each figure. Each figure is in centimeters (cm). Not to scale.



Answers

1. 28.6 cm 45.12 cm²
2. 14.52 cm 12.6728 cm²
3. 27.06 cm 45.479 cm²
4. 20.46 cm 21.3012 cm²
5. 23 cm 30.66 cm²
6. 25.84 cm 40.608 cm²
7. 19.72 cm 23.548 cm²
8. 25.24 cm 33.516 cm²
9. 19.84 cm 18.55 cm²
10. 10.82 cm 6.834 cm²
11. 33.8 cm 70.68 cm²
12. 24.98 cm 32.004 cm²
13. 33.5 cm 68.875 cm²
14. 22.4 cm 30.87 cm²
15. 30.4 cm 56.95 cm²