

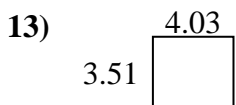
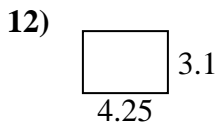
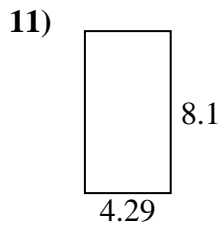
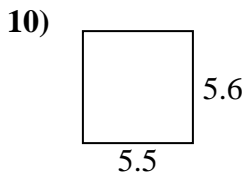
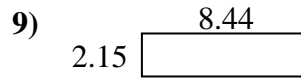
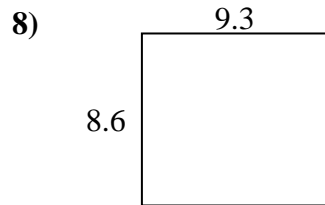
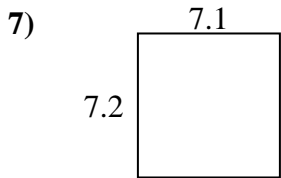
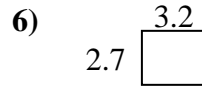
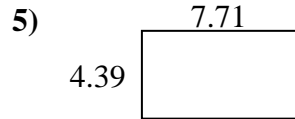
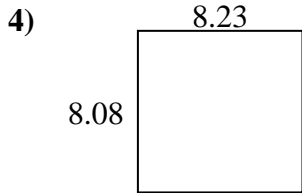

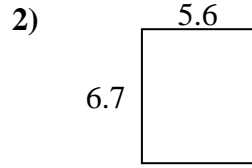
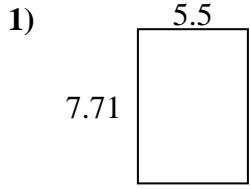




Find the perimeter and area of each figure. Each figure is in centimeters (cm). Not to scale.



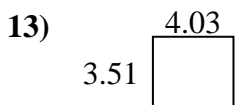
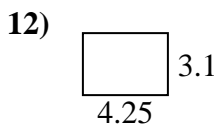
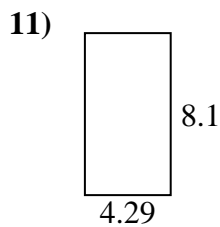
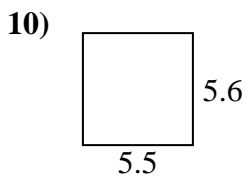
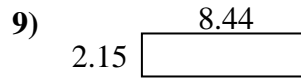
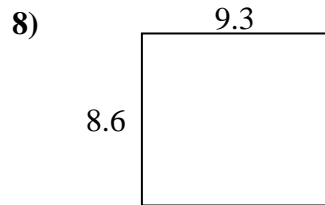
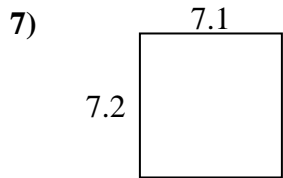
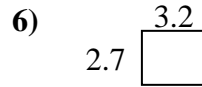
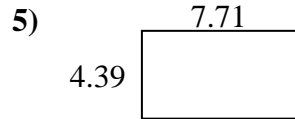
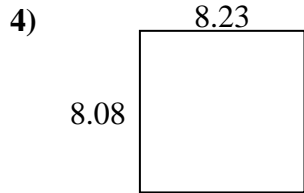

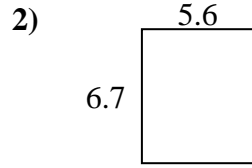
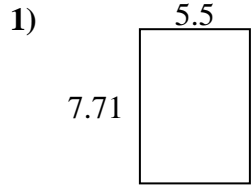
Answers



1. _____
2. _____
3. _____
4. _____
5. _____
6. _____
7. _____
8. _____
9. _____
10. _____
11. _____
12. _____
13. _____
14. _____
15. _____



Find the perimeter and area of each figure. Each figure is in centimeters (cm). Not to scale.



Answers

1. 26.42 cm 42.405 cm²
2. 24.6 cm 37.52 cm²
3. 23.36 cm 21.432 cm²
4. 32.62 cm 66.4984 cm²
5. 24.2 cm 33.8469 cm²
6. 11.8 cm 8.64 cm²
7. 28.6 cm 51.12 cm²
8. 35.8 cm 79.98 cm²
9. 21.18 cm 18.146 cm²
10. 22.2 cm 30.8 cm²
11. 24.78 cm 34.749 cm²
12. 14.7 cm 13.175 cm²
13. 15.08 cm 14.1453 cm²
14. 29.24 cm 48.192 cm²
15. 18.6 cm 19.22 cm²