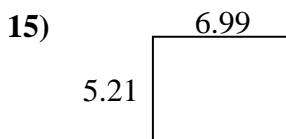
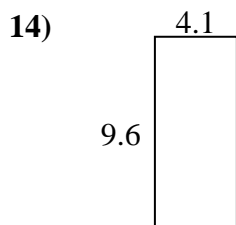
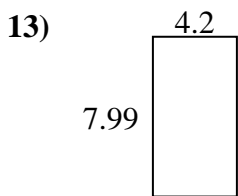
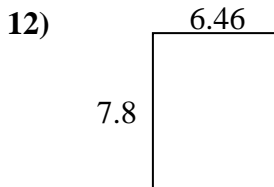
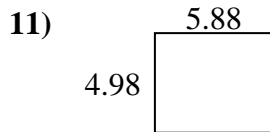

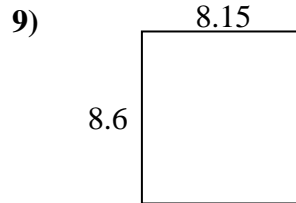
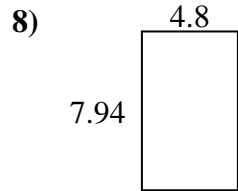
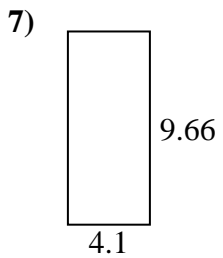
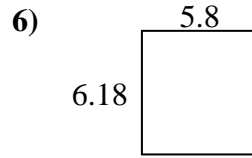
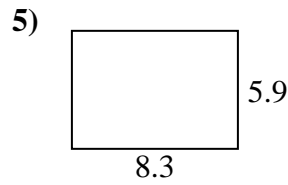
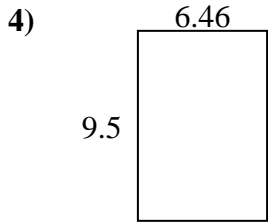
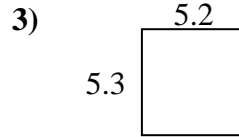
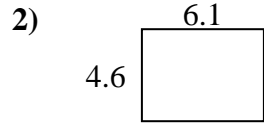
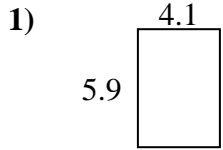




Find the perimeter and area of each figure. Each figure is in centimeters (cm). Not to scale.

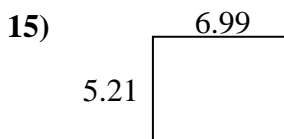
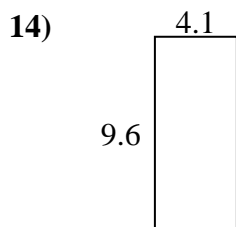
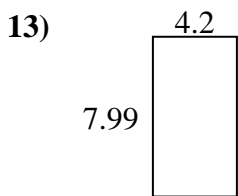
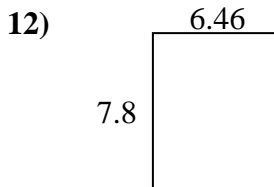
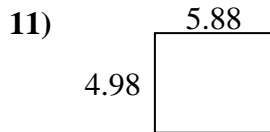

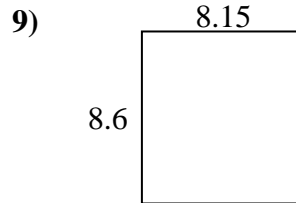
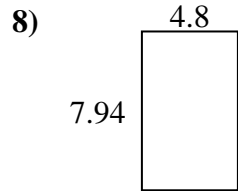
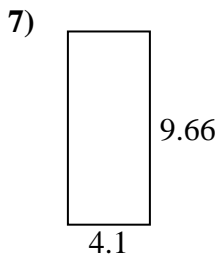
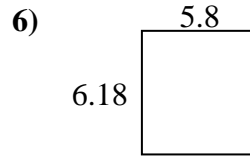
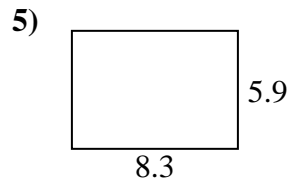
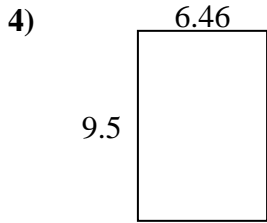
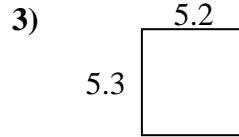
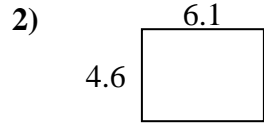
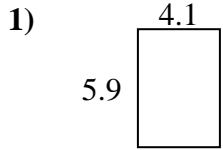
Answers



1. \_\_\_\_\_
2. \_\_\_\_\_
3. \_\_\_\_\_
4. \_\_\_\_\_
5. \_\_\_\_\_
6. \_\_\_\_\_
7. \_\_\_\_\_
8. \_\_\_\_\_
9. \_\_\_\_\_
10. \_\_\_\_\_
11. \_\_\_\_\_
12. \_\_\_\_\_
13. \_\_\_\_\_
14. \_\_\_\_\_
15. \_\_\_\_\_



Find the perimeter and area of each figure. Each figure is in centimeters (cm). Not to scale.



Answers

1. 20 cm    24.19 cm<sup>2</sup>
2. 21.4 cm    28.06 cm<sup>2</sup>
3. 21 cm    27.56 cm<sup>2</sup>
4. 31.92 cm    61.37 cm<sup>2</sup>
5. 28.4 cm    48.97 cm<sup>2</sup>
6. 23.96 cm    35.844 cm<sup>2</sup>
7. 27.52 cm    39.606 cm<sup>2</sup>
8. 25.48 cm    38.112 cm<sup>2</sup>
9. 33.5 cm    70.09 cm<sup>2</sup>
10. 21.2 cm    19.09 cm<sup>2</sup>
11. 21.72 cm    29.2824 cm<sup>2</sup>
12. 28.52 cm    50.388 cm<sup>2</sup>
13. 24.38 cm    33.558 cm<sup>2</sup>
14. 27.4 cm    39.36 cm<sup>2</sup>
15. 24.4 cm    36.4179 cm<sup>2</sup>