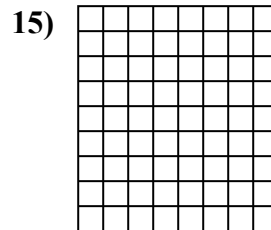
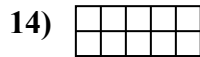
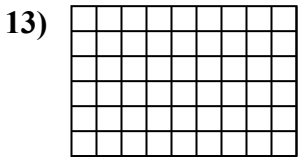
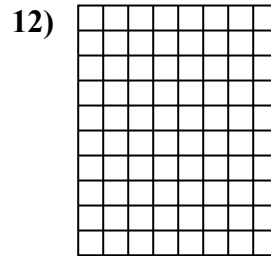
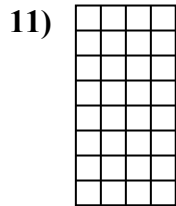
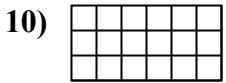
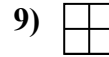
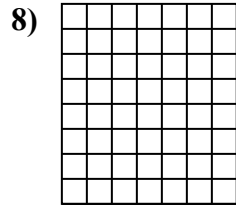
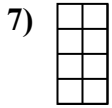
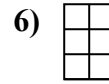
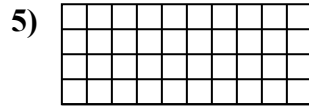
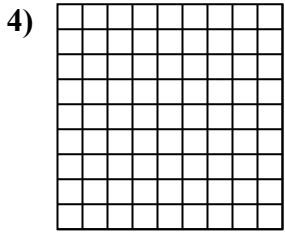
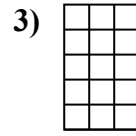
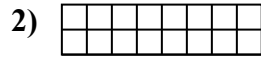
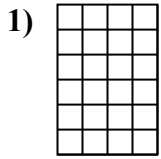




Determine the area. Each $\square = 1$ square unit (u^2).



Answers

1. _____

2. _____

3. _____

4. _____

5. _____

6. _____

7. _____

8. _____

9. _____

10. _____

11. _____

12. _____

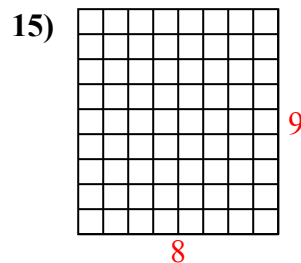
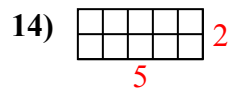
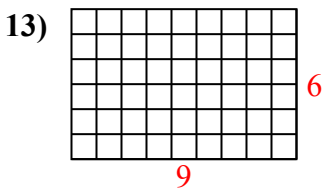
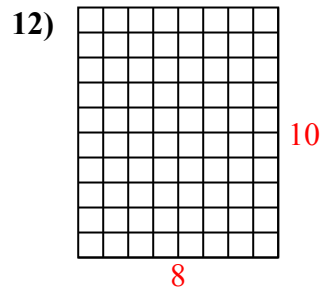
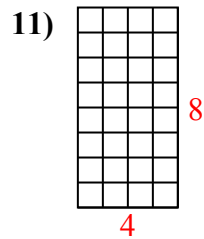
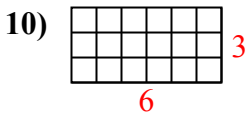
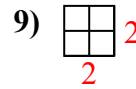
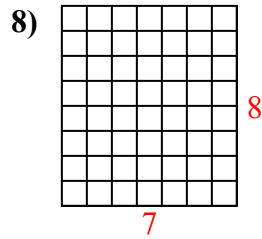
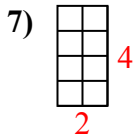
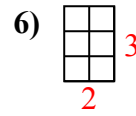
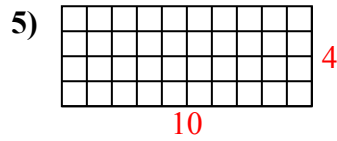
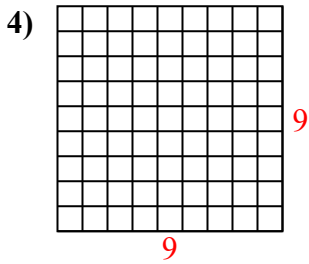
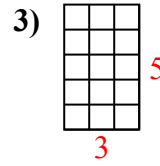
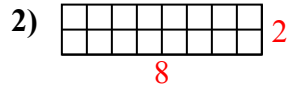
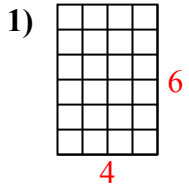
13. _____

14. _____

15. _____



Determine the area. Each $\square = 1$ square unit (u^2).



Answers

1. 24 u^2

2. 16 u^2

3. 15 u^2

4. 81 u^2

5. 40 u^2

6. 6 u^2

7. 8 u^2

8. 56 u^2

9. 4 u^2

10. 18 u^2

11. 32 u^2

12. 80 u^2

13. 54 u^2

14. 10 u^2

15. 72 u^2