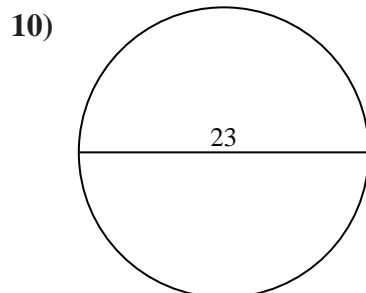
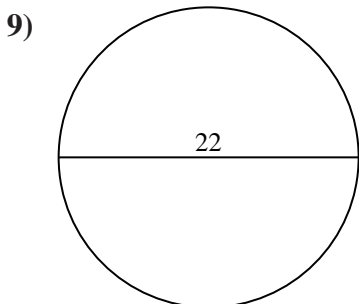
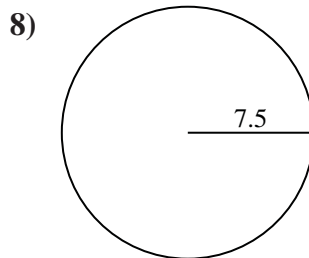
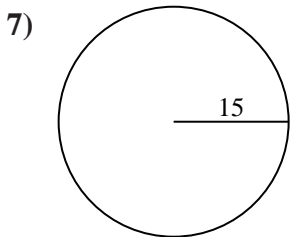
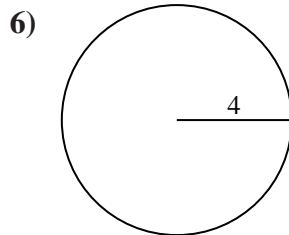
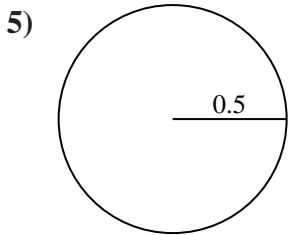
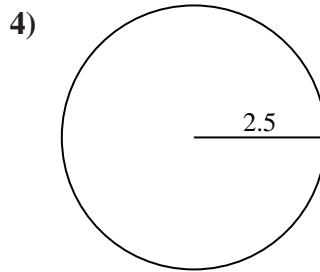
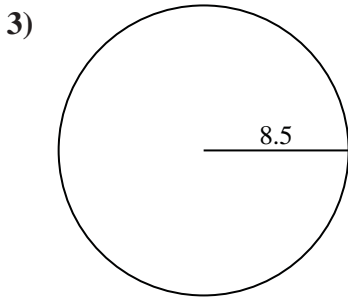
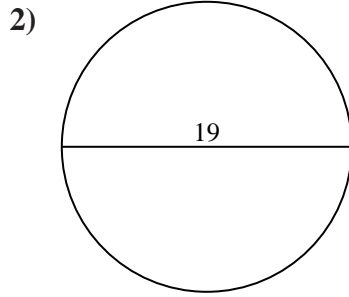
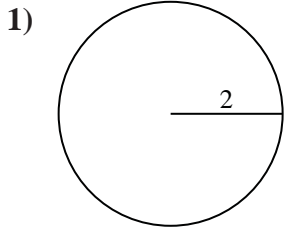




Find the circumference of each circle. Circles are not to scale.

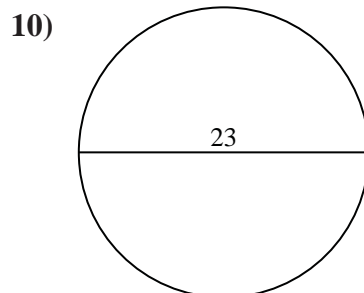
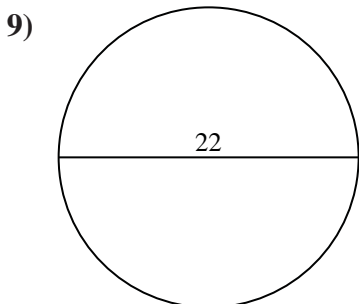
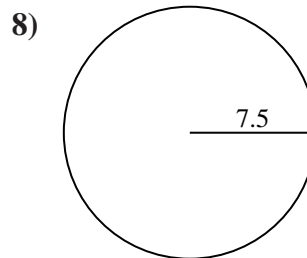
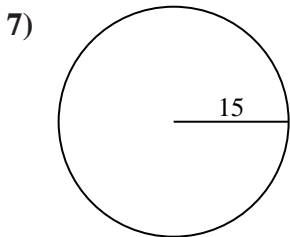
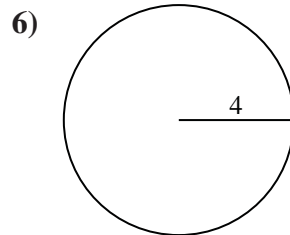
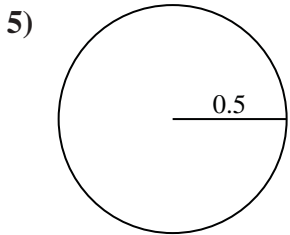
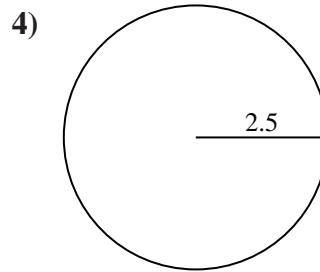
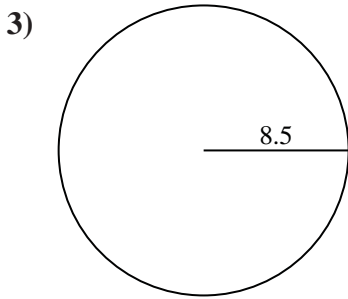
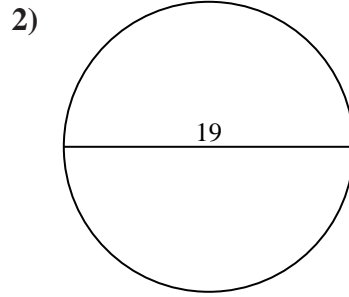
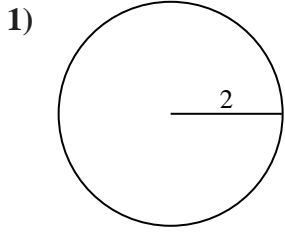


Answers

- 1. _____
- 2. _____
- 3. _____
- 4. _____
- 5. _____
- 6. _____
- 7. _____
- 8. _____
- 9. _____
- 10. _____



Find the circumference of each circle. Circles are not to scale.



Answers

- 1. 12.57
- 2. 59.69
- 3. 53.41
- 4. 15.71
- 5. 3.14
- 6. 25.13
- 7. 94.25
- 8. 47.12
- 9. 69.12
- 10. 72.26



Find the circumference of each circle. Circles are not to scale.

Answers

12.57

53.41

25.13

3.14

59.69

15.71

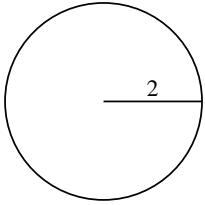
72.26

94.25

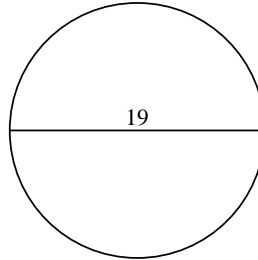
47.12

69.12

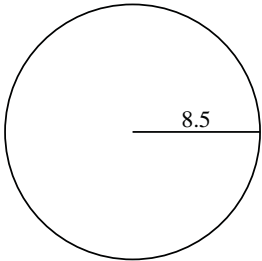
1)



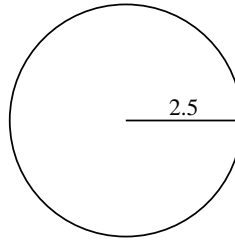
2)



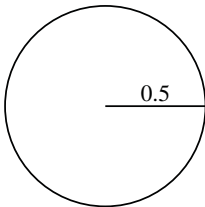
3)



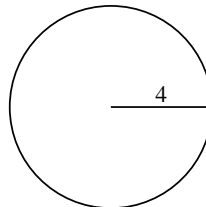
4)



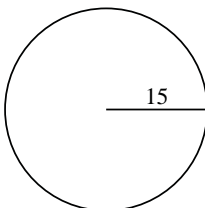
5)



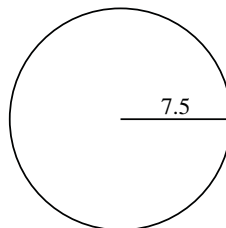
6)



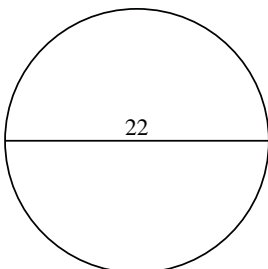
7)



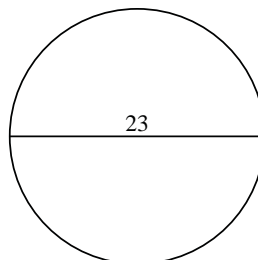
8)



9)



10)



1. _____

2. _____

3. _____

4. _____

5. _____

6. _____

7. _____

8. _____

9. _____

10. _____