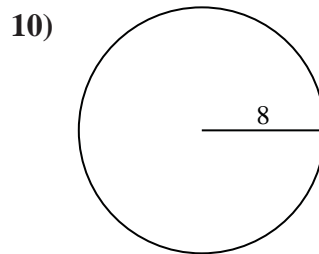
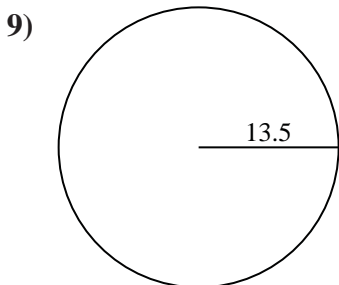
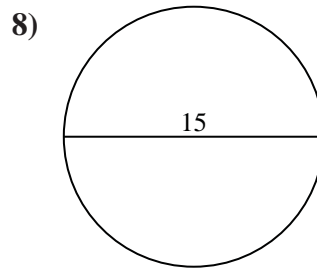
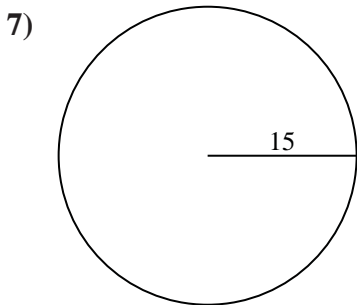
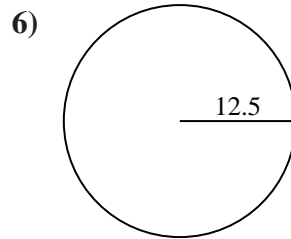
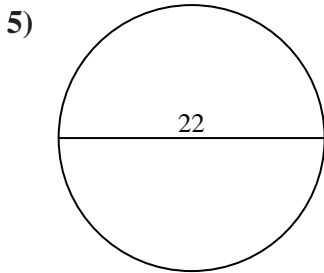
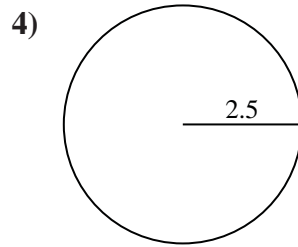
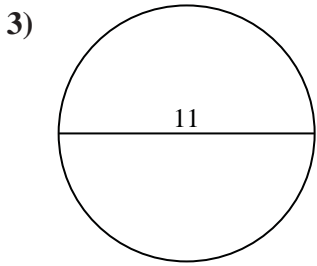
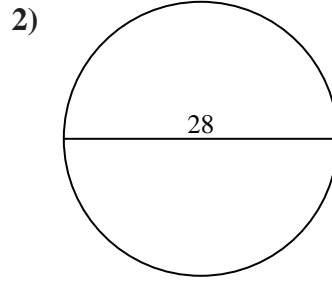
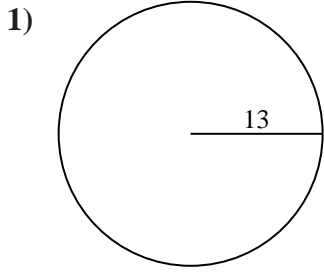




Find the circumference of each circle. Circles are not to scale.

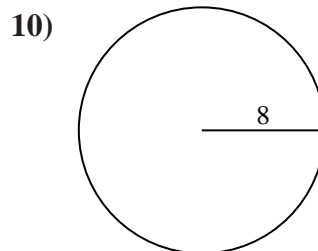
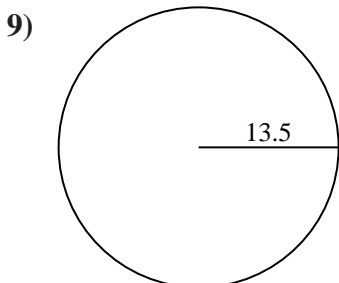
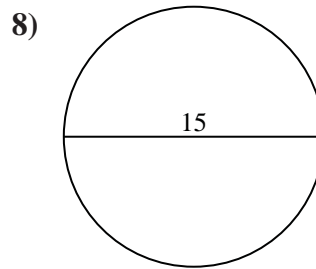
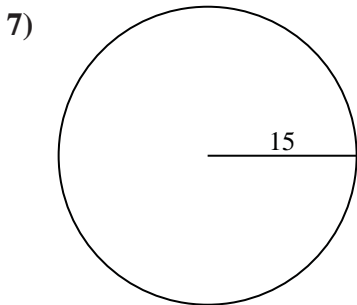
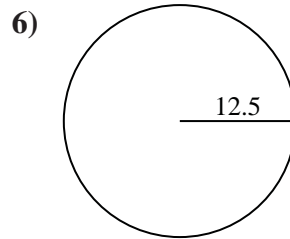
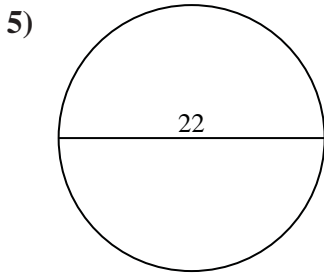
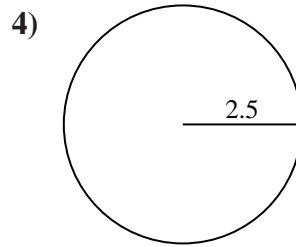
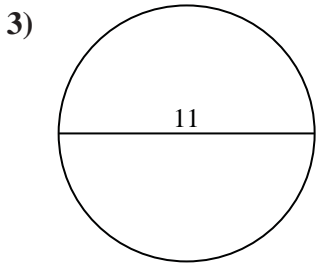
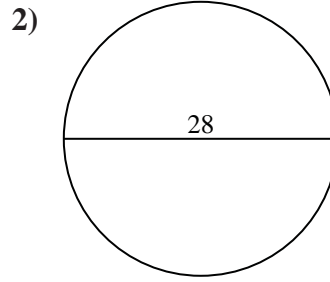
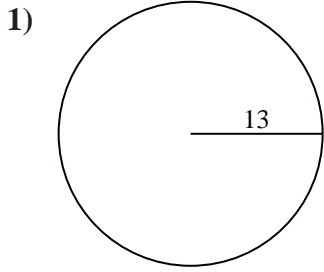


Answers

- 1. _____
- 2. _____
- 3. _____
- 4. _____
- 5. _____
- 6. _____
- 7. _____
- 8. _____
- 9. _____
- 10. _____



Find the circumference of each circle. Circles are not to scale.



Answers

- 1. 81.68
- 2. 87.96
- 3. 34.56
- 4. 15.71
- 5. 69.12
- 6. 78.54
- 7. 94.25
- 8. 47.12
- 9. 84.82
- 10. 50.27



Find the circumference of each circle. Circles are not to scale.

Answers

81.68

78.54

15.71

87.96

94.25

1. _____

34.56

69.12

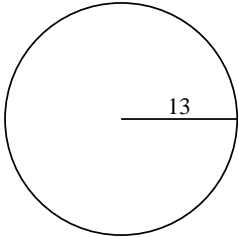
84.82

50.27

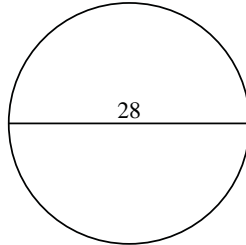
47.12

2. _____

1)

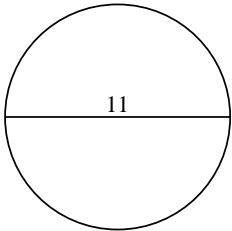


2)

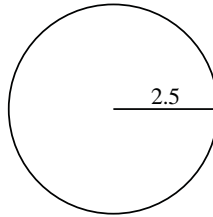


3. _____

3)



4)



4. _____

5. _____

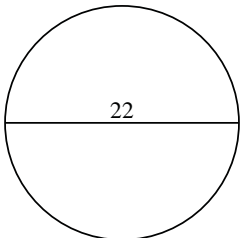
6. _____

7. _____

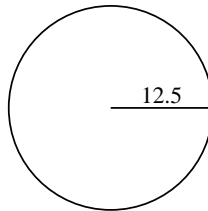
8. _____

9. _____

5)

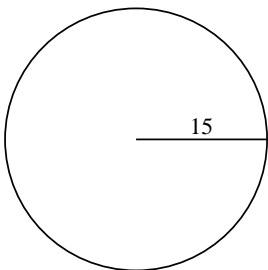


6)

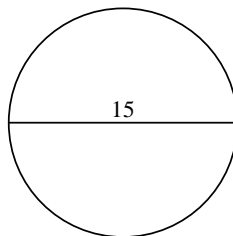


10. _____

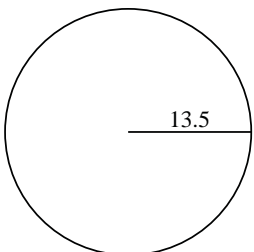
7)



8)



9)



10)

