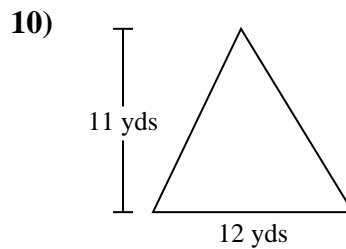
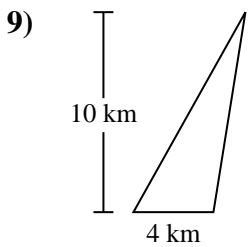
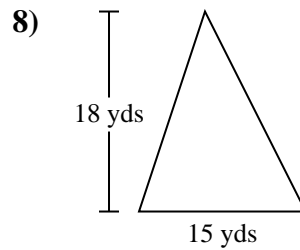
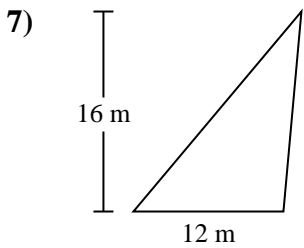
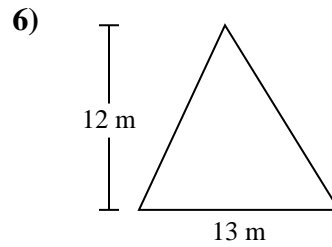
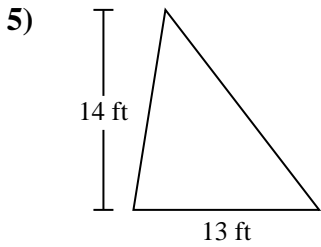
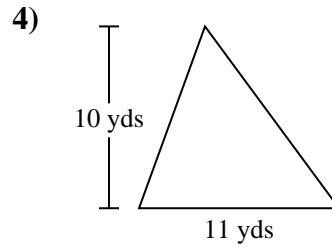
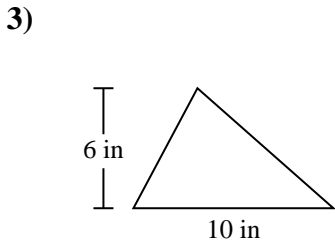
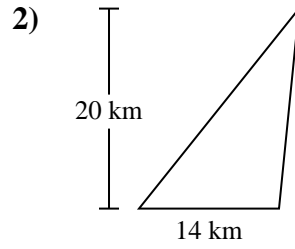
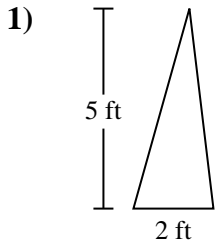




Find the area of each triangle. Units are not to scale.

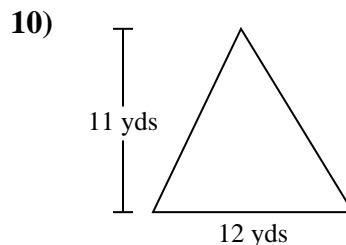
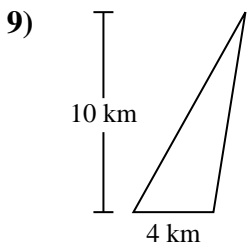
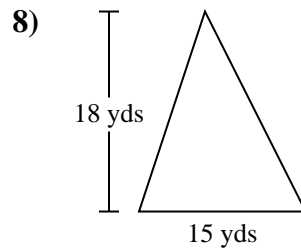
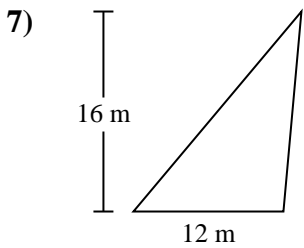
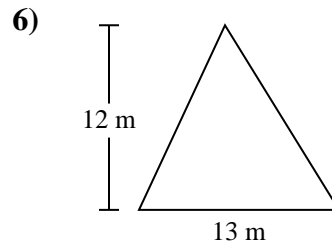
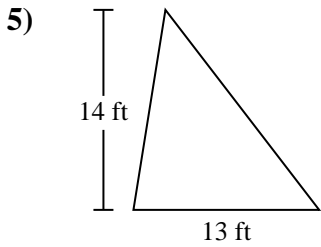
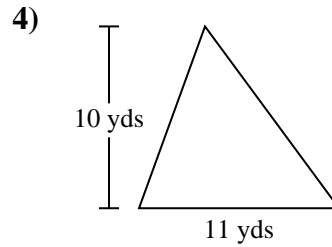
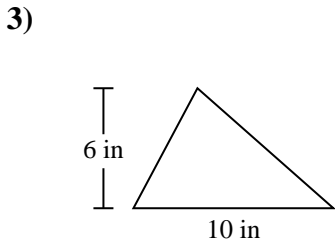
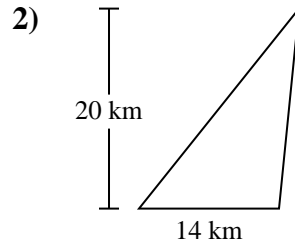
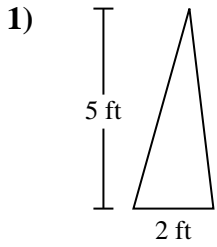


Answers

- 1. _____
- 2. _____
- 3. _____
- 4. _____
- 5. _____
- 6. _____
- 7. _____
- 8. _____
- 9. _____
- 10. _____



Find the area of each triangle. Units are not to scale.



Answers

1. 5 ft²

2. 140 km²

3. 30 in²

4. 55 yds²

5. 91 ft²

6. 78 m²

7. 96 m²

8. 135 yds²

9. 20 km²

10. 66 yds²



Find the area of each triangle. Units are not to scale.

Answers

96	55	140	66
5	135	78	30
91	20		

1. _____
2. _____
3. _____
4. _____
5. _____
6. _____
7. _____
8. _____
9. _____
10. _____

