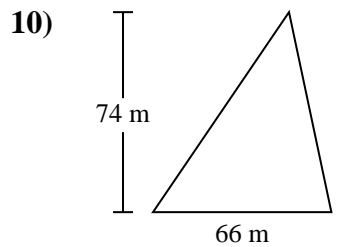
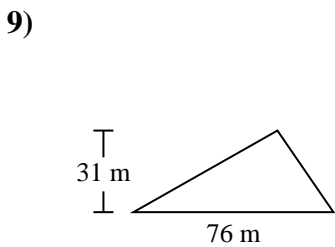
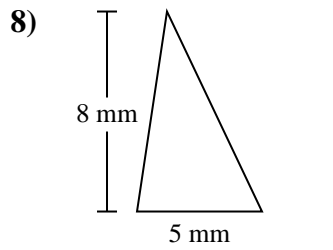
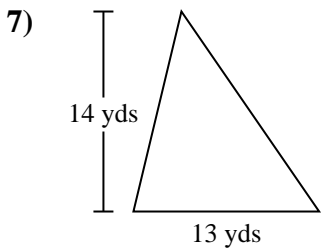
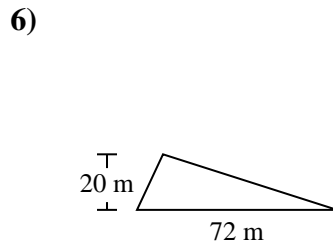
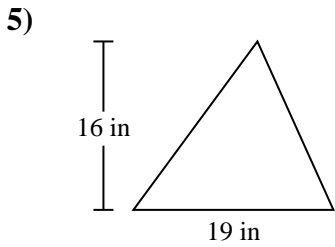
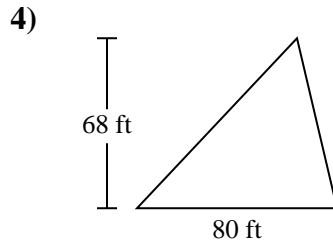
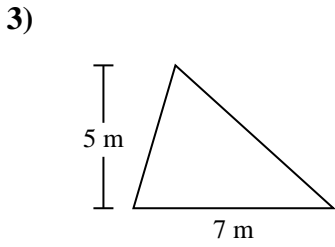
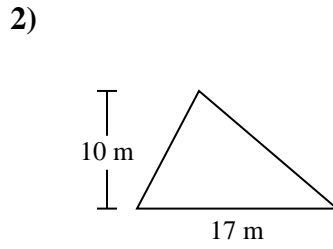
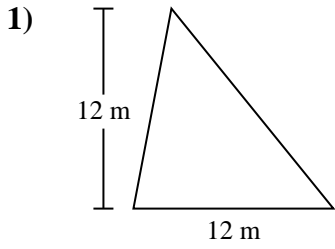




Find the area of each triangle. Units are not to scale.

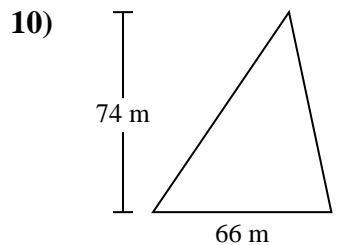
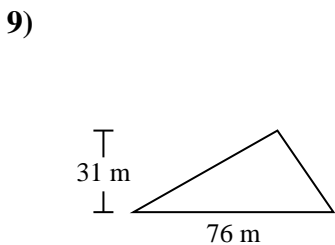
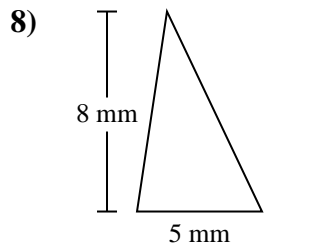
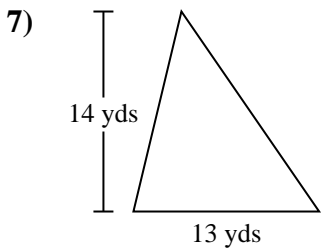
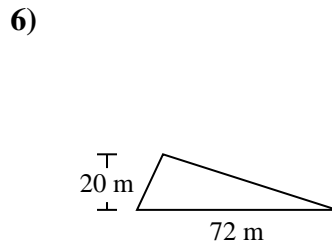
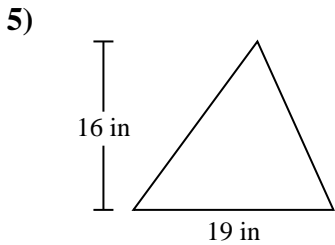
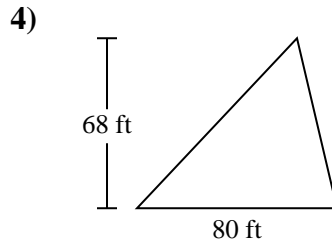
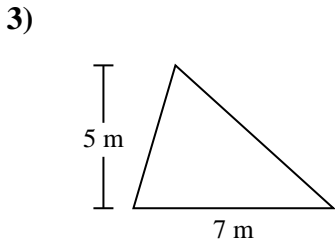
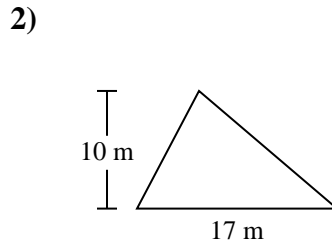
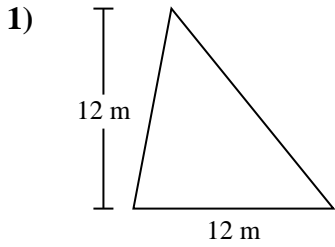


Answers

- 1. _____
- 2. _____
- 3. _____
- 4. _____
- 5. _____
- 6. _____
- 7. _____
- 8. _____
- 9. _____
- 10. _____



Find the area of each triangle. Units are not to scale.

**Answers**

1. 72 m²
2. 85 m²
3. 17.5 m²
4. 2,720 ft²
5. 152 in²
6. 720 m²
7. 91 yds²
8. 20 mm²
9. 1,178 m²
10. 2,442 m²



Find the area of each triangle. Units are not to scale.

Answers

152	91	2,720	72
85	720	2,442	17.5
1,178	20		

1. _____
2. _____
3. _____
4. _____
5. _____
6. _____
7. _____
8. _____
9. _____
10. _____

