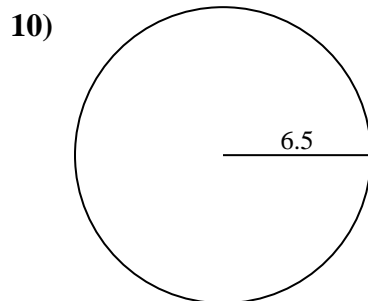
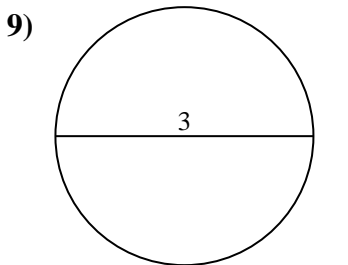
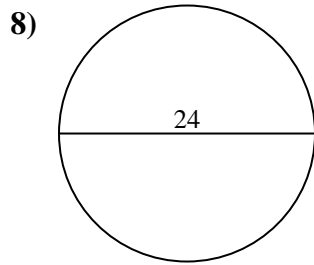
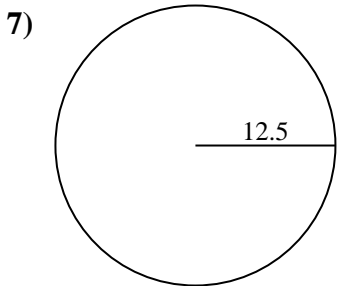
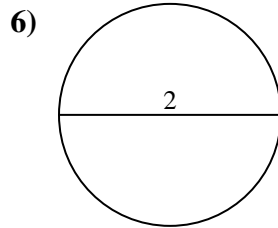
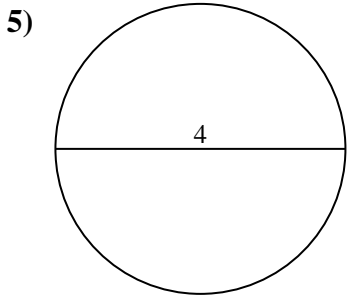
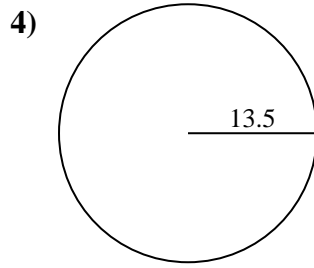
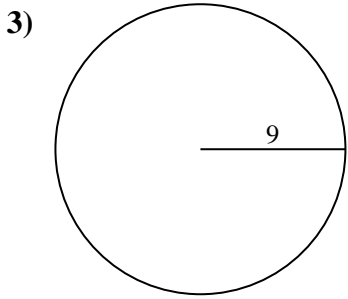
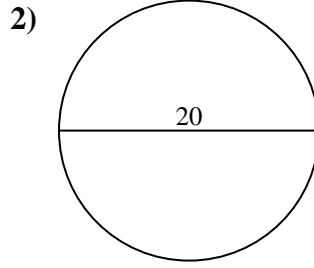
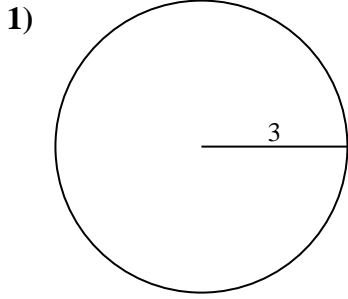




Find the area of each circle. Circles are not to scale.

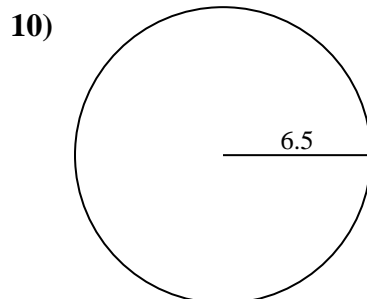
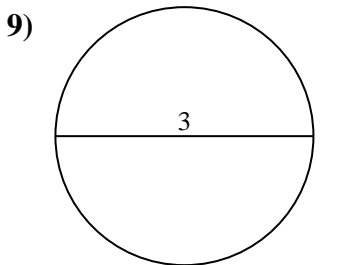
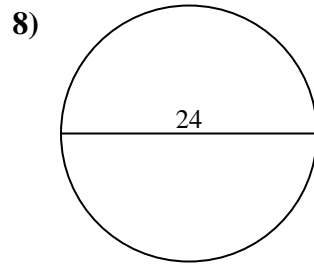
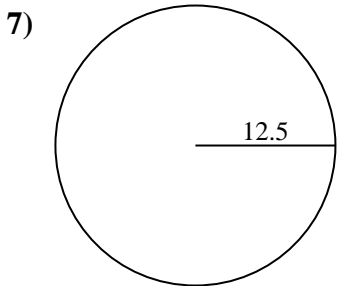
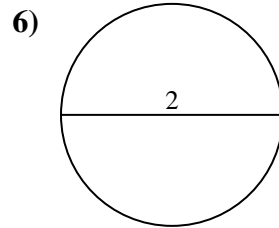
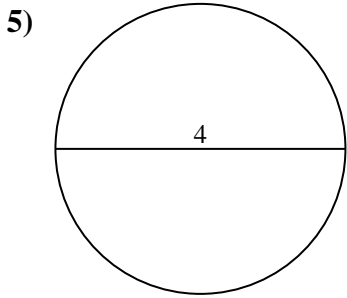
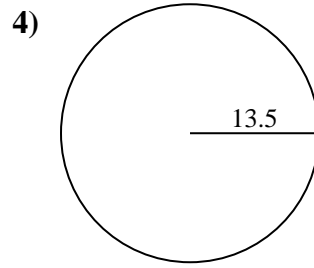
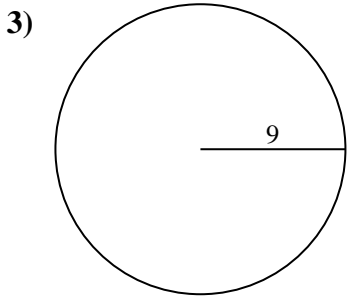
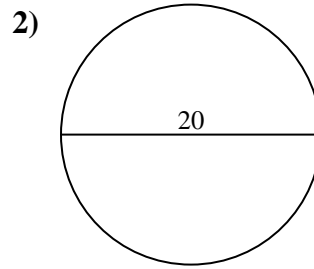
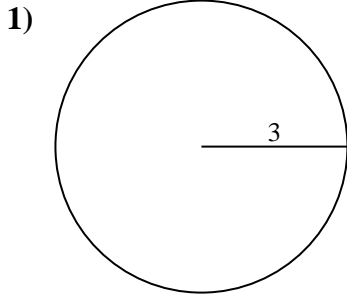


Answers

- 1. _____
- 2. _____
- 3. _____
- 4. _____
- 5. _____
- 6. _____
- 7. _____
- 8. _____
- 9. _____
- 10. _____



Find the area of each circle. Circles are not to scale.

**Answers**

1. 28.27 cm²
2. 314.16 cm²
3. 254.47 cm²
4. 572.56 cm²
5. 12.57 cm²
6. 3.14 cm²
7. 490.87 cm²
8. 452.39 cm²
9. 7.07 cm²
10. 132.73 cm²



Find the area of each circle. Circles are not to scale.

254.47 cm²

314.16 cm²

12.57 cm²

28.27 cm²

132.73 cm²

7.07 cm²

452.39 cm²

490.87 cm²

3.14 cm²

572.56 cm²

Answers

1. _____

2. _____

3. _____

4. _____

5. _____

6. _____

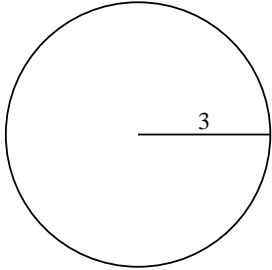
7. _____

8. _____

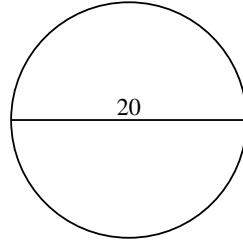
9. _____

10. _____

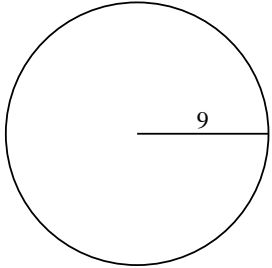
1)



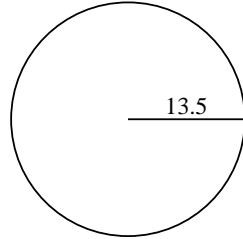
2)



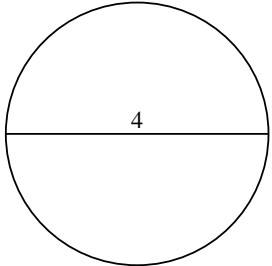
3)



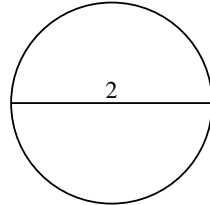
4)



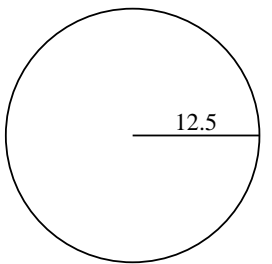
5)



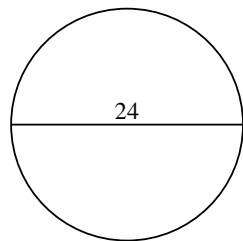
6)



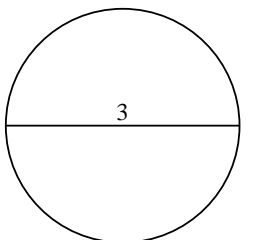
7)



8)



9)



10)

