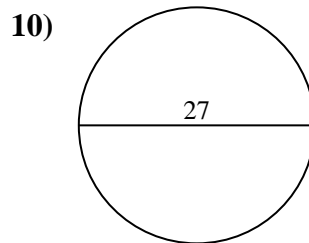
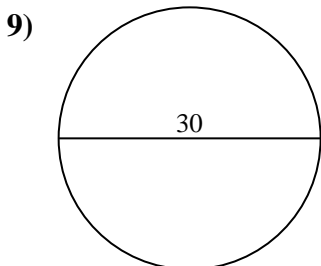
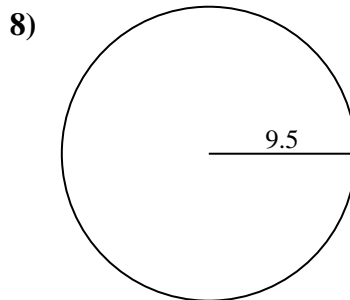
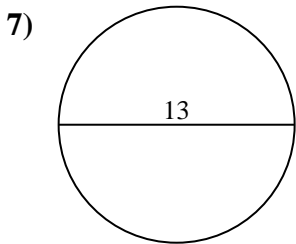
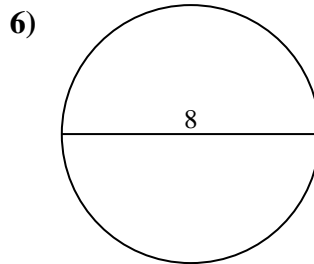
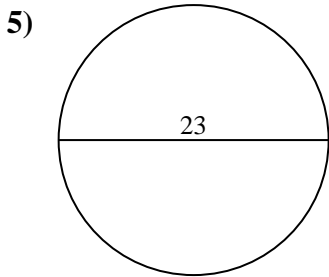
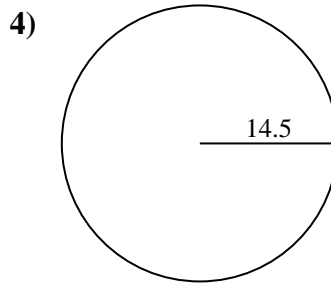
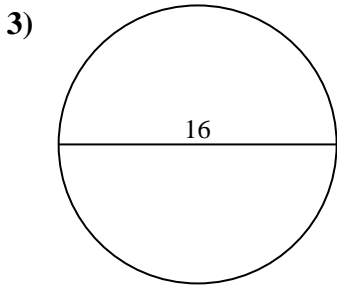
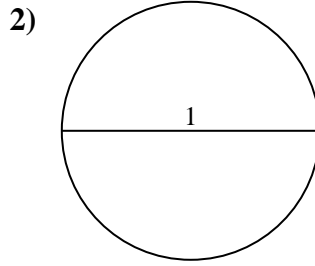
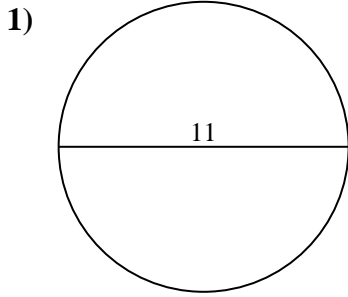




Find the area and circumference of each circle. Circles are not to scale.



Answers

1a. \_\_\_\_\_

1c. \_\_\_\_\_

2a. \_\_\_\_\_

2c. \_\_\_\_\_

3a. \_\_\_\_\_

3c. \_\_\_\_\_

4a. \_\_\_\_\_

4c. \_\_\_\_\_

5a. \_\_\_\_\_

5c. \_\_\_\_\_

6a. \_\_\_\_\_

6c. \_\_\_\_\_

7a. \_\_\_\_\_

7c. \_\_\_\_\_

8a. \_\_\_\_\_

8c. \_\_\_\_\_

9a. \_\_\_\_\_

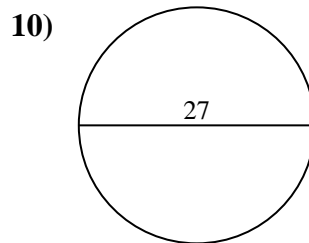
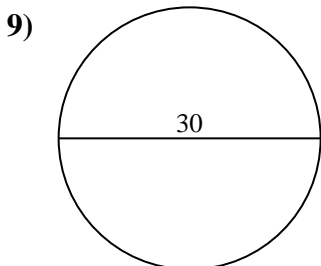
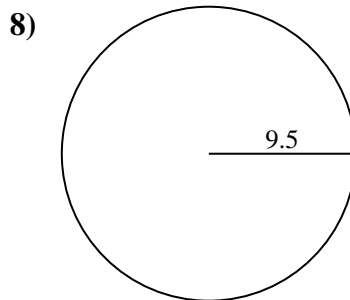
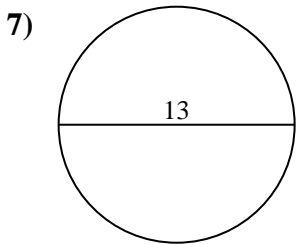
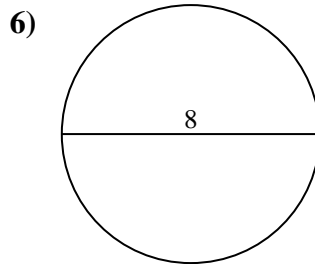
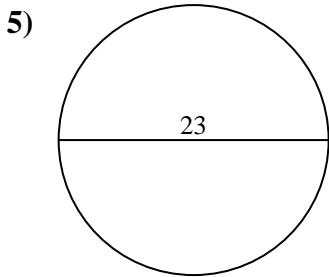
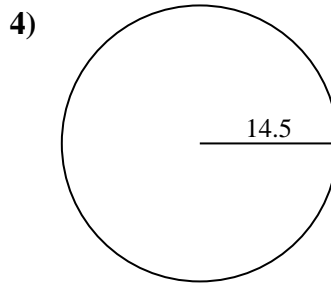
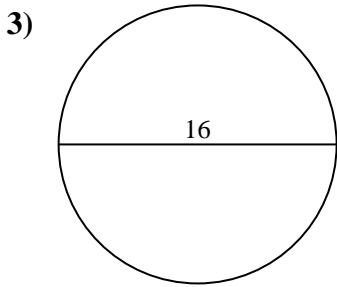
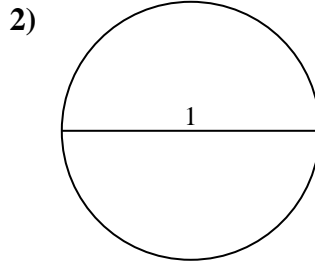
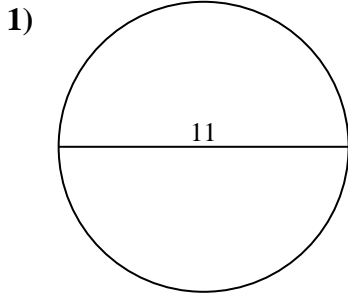
9c. \_\_\_\_\_

10a. \_\_\_\_\_

10c. \_\_\_\_\_



Find the area and circumference of each circle. Circles are not to scale.



**Answers**

1a. 95.03

1c. 34.56

2a. 0.79

2c. 3.14

3a. 201.06

3c. 50.27

4a. 660.52

4c. 91.11

5a. 415.48

5c. 72.26

6a. 50.27

6c. 25.13

7a. 132.73

7c. 40.84

8a. 283.53

8c. 59.69

9a. 706.86

9c. 94.25

10a. 572.56

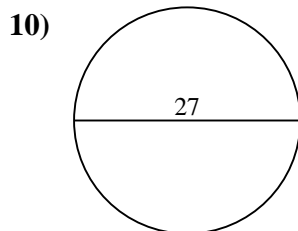
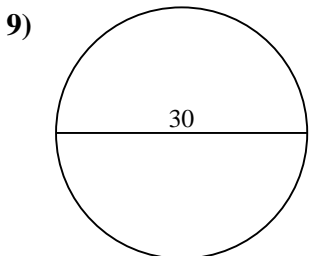
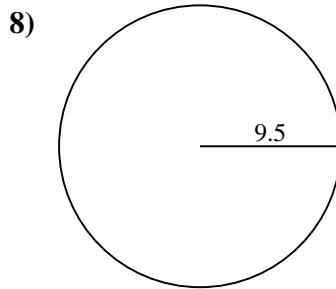
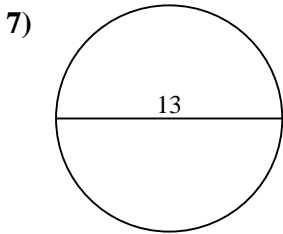
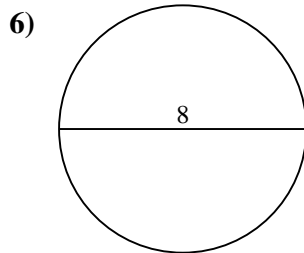
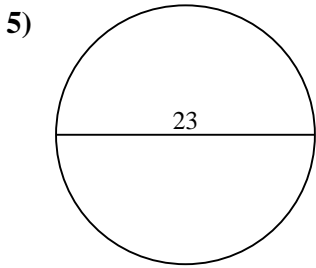
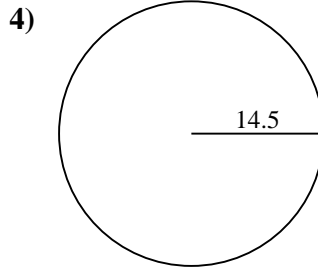
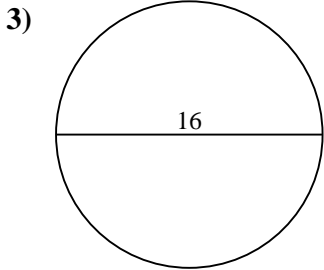
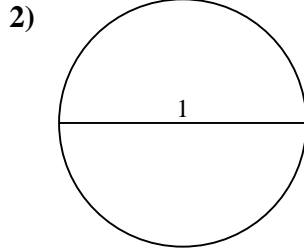
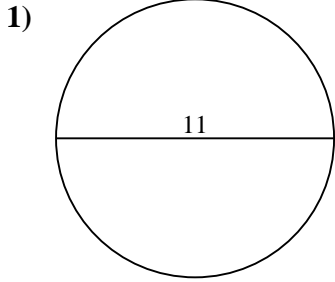
10c. 84.82



Find the area and circumference of each circle. Circles are not to scale.

**Answers**

660.52	59.69	132.73	0.79	84.82
40.84	201.06	3.14	706.86	94.25
34.56	50.27	72.26	25.13	50.27
91.11	572.56	415.48	95.03	283.53



1a. \_\_\_\_\_

1c. \_\_\_\_\_

2a. \_\_\_\_\_

2c. \_\_\_\_\_

3a. \_\_\_\_\_

3c. \_\_\_\_\_

4a. \_\_\_\_\_

4c. \_\_\_\_\_

5a. \_\_\_\_\_

5c. \_\_\_\_\_

6a. \_\_\_\_\_

6c. \_\_\_\_\_

7a. \_\_\_\_\_

7c. \_\_\_\_\_

8a. \_\_\_\_\_

8c. \_\_\_\_\_

9a. \_\_\_\_\_

9c. \_\_\_\_\_

10a. \_\_\_\_\_

10c. \_\_\_\_\_