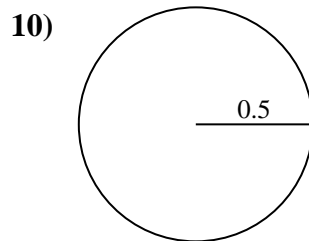
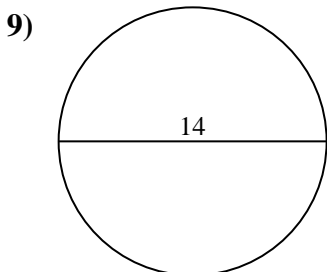
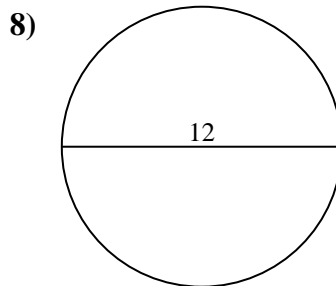
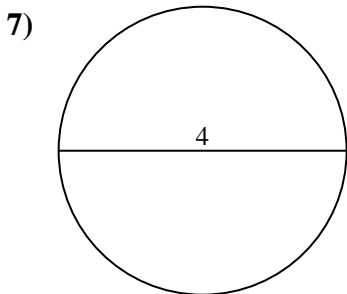
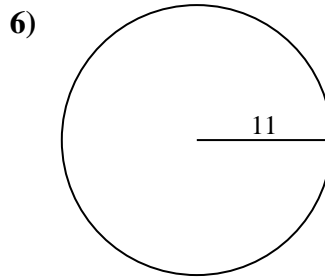
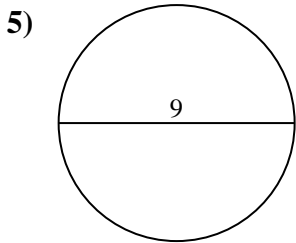
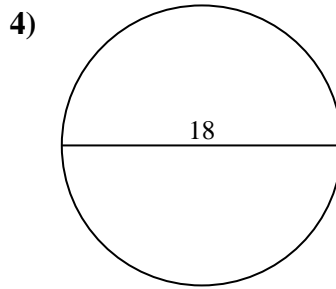
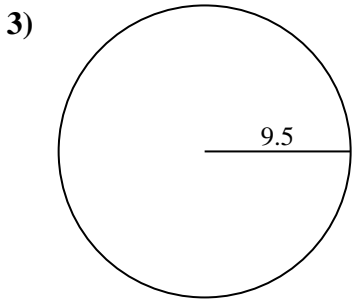
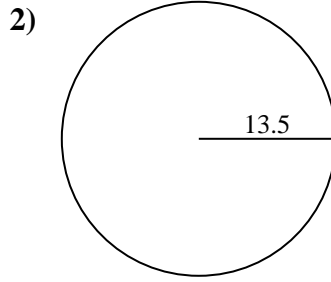
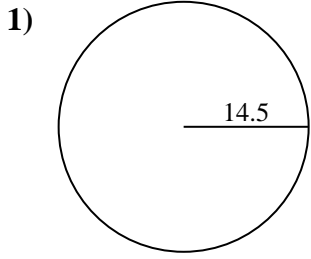




Find the area and circumference of each circle. Circles are not to scale.



Answers

1a. _____

1c. _____

2a. _____

2c. _____

3a. _____

3c. _____

4a. _____

4c. _____

5a. _____

5c. _____

6a. _____

6c. _____

7a. _____

7c. _____

8a. _____

8c. _____

9a. _____

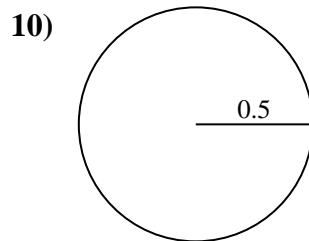
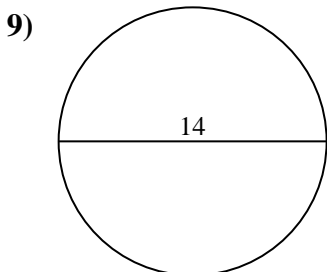
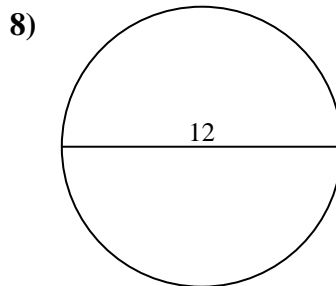
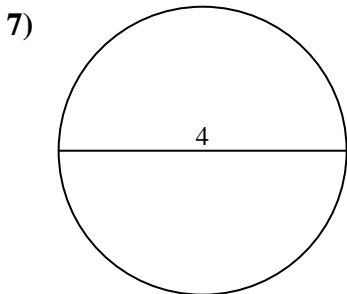
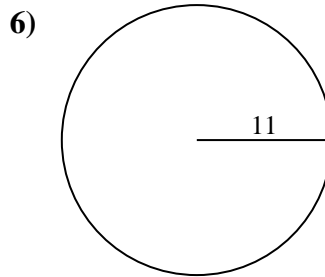
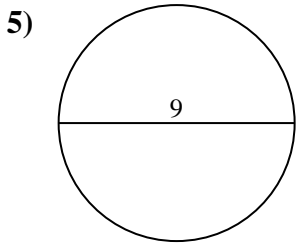
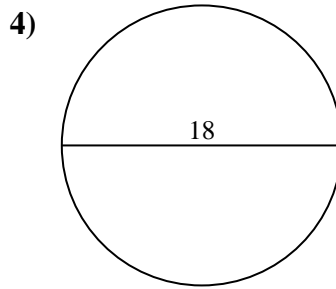
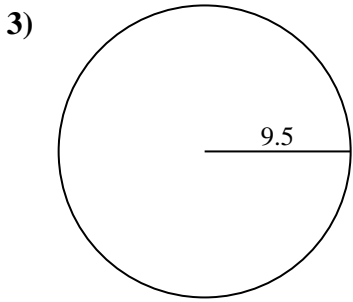
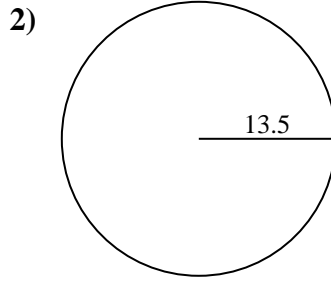
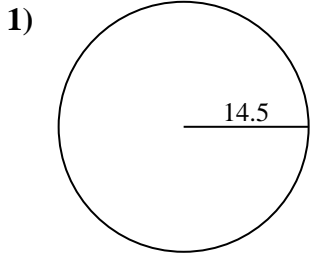
9c. _____

10a. _____

10c. _____



Find the area and circumference of each circle. Circles are not to scale.



Answers

1a. 660.52

1c. 91.11

2a. 572.56

2c. 84.82

3a. 283.53

3c. 59.69

4a. 254.47

4c. 56.55

5a. 63.62

5c. 28.27

6a. 380.13

6c. 69.12

7a. 12.57

7c. 12.57

8a. 113.1

8c. 37.7

9a. 153.94

9c. 43.98

10a. 0.79

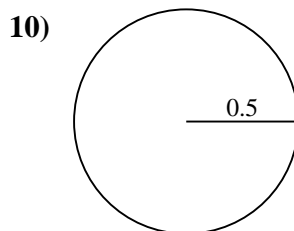
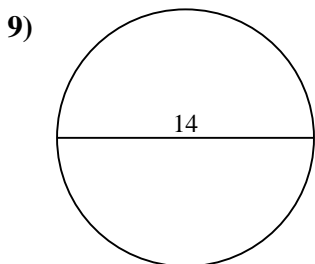
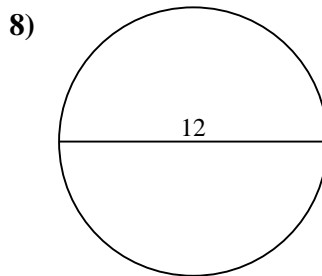
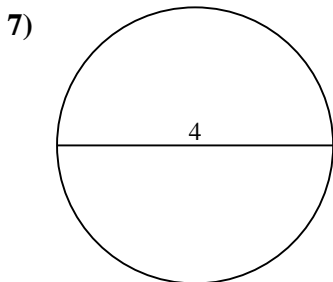
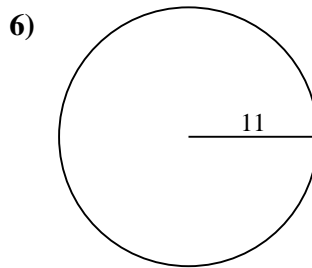
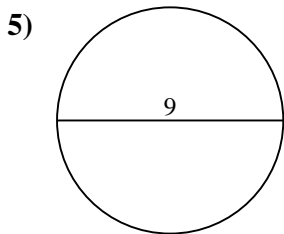
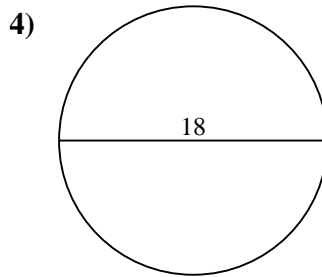
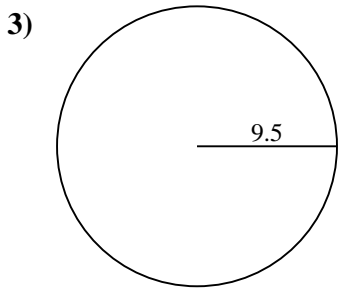
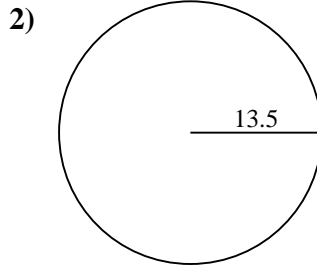
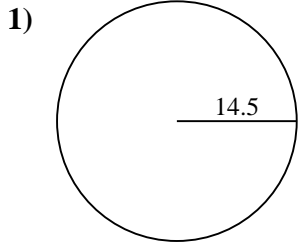
10c. 3.14



Find the area and circumference of each circle. Circles are not to scale.

Answers

56.55	380.13	37.7	3.14	113.1
63.62	28.27	254.47	59.69	12.57
43.98	91.11	153.94	0.79	283.53
660.52	572.56	84.82	69.12	12.57



1a. _____

1c. _____

2a. _____

2c. _____

3a. _____

3c. _____

4a. _____

4c. _____

5a. _____

5c. _____

6a. _____

6c. _____

7a. _____

7c. _____

8a. _____

8c. _____

9a. _____

9c. _____

10a. _____

10c. _____