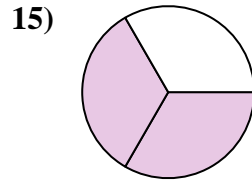
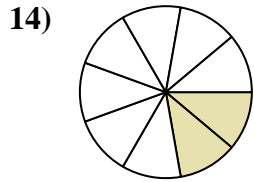
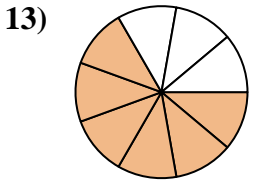
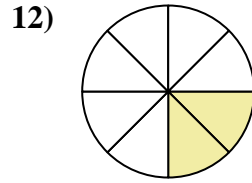
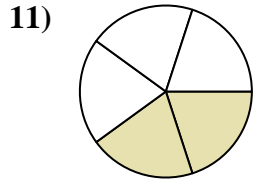
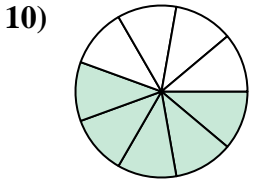
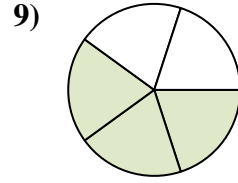
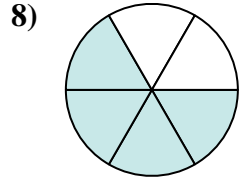
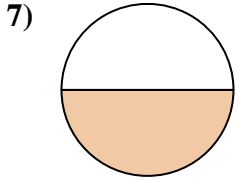
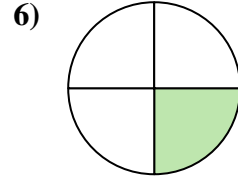
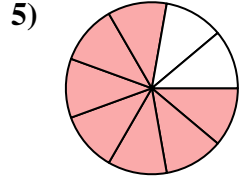
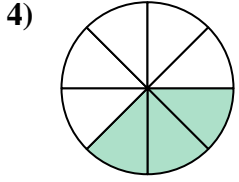
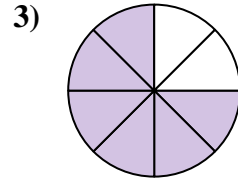
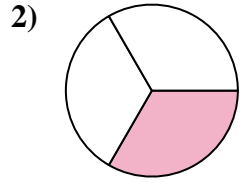
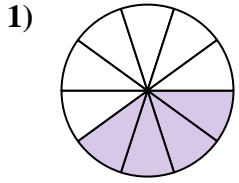




Find the angle (in degrees) of the shaded portion of the circle.



Answers

1. _____

2. _____

3. _____

4. _____

5. _____

6. _____

7. _____

8. _____

9. _____

10. _____

11. _____

12. _____

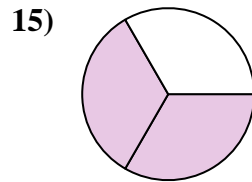
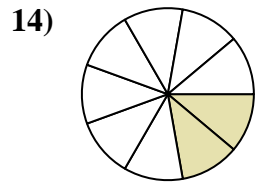
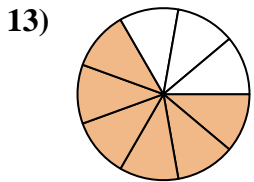
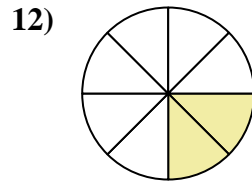
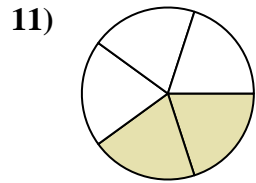
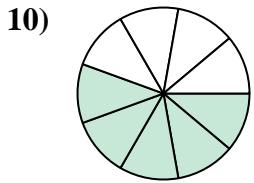
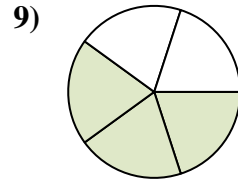
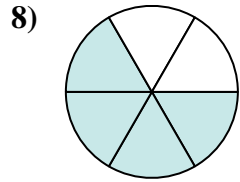
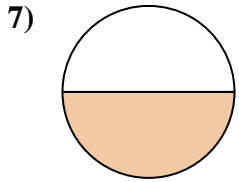
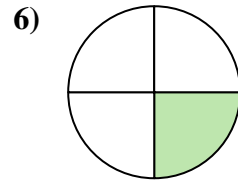
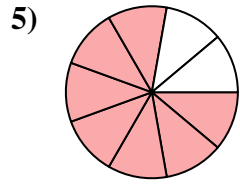
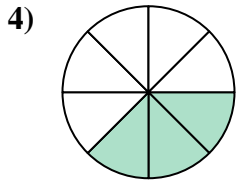
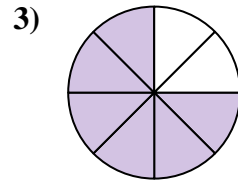
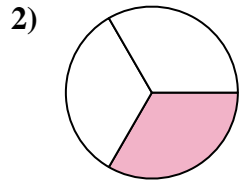
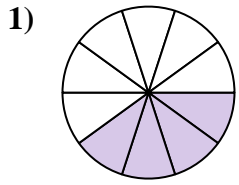
13. _____

14. _____

15. _____



Find the angle (in degrees) of the shaded portion of the circle.



Answers

1. 144°

2. 120°

3. 270°

4. 135°

5. 280°

6. 90°

7. 180°

8. 240°

9. 216°

10. 200°

11. 144°

12. 90°

13. 240°

14. 80°

15. 240°

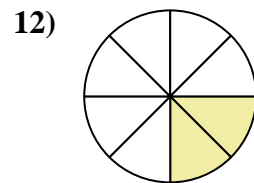
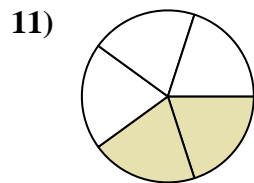
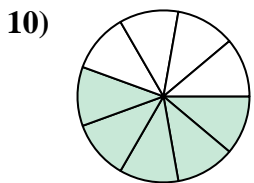
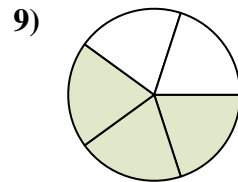
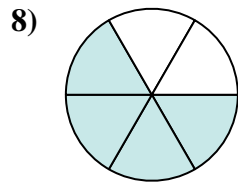
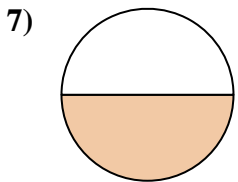
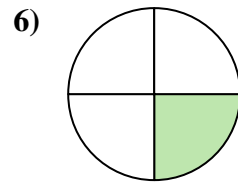
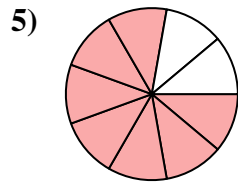
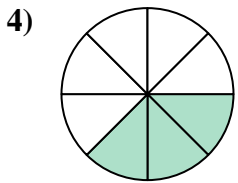
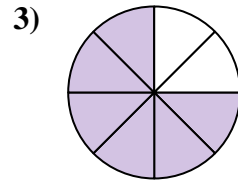
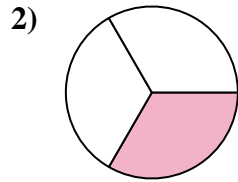
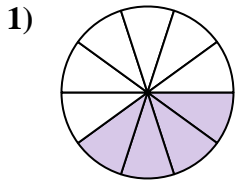


Find the angle (in degrees) of the shaded portion of the circle.

Answers

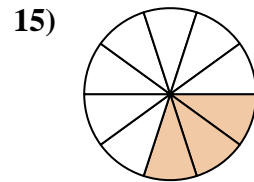
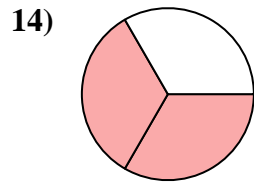
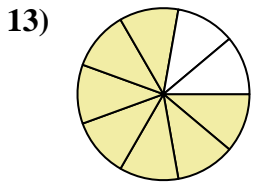
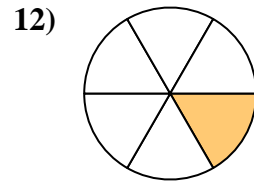
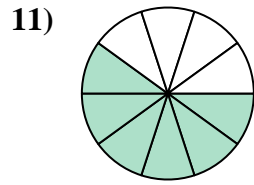
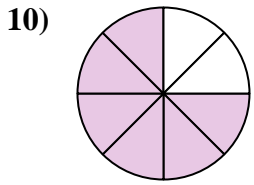
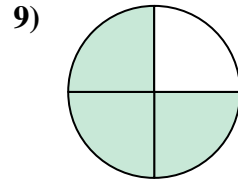
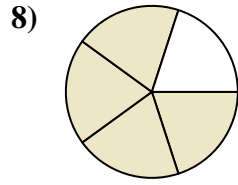
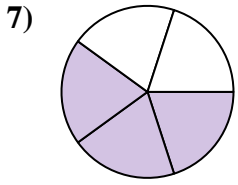
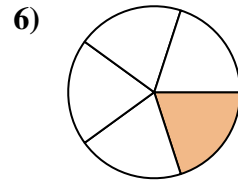
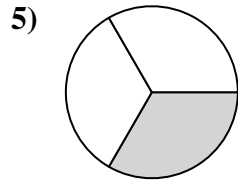
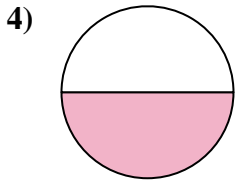
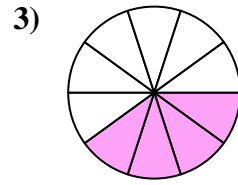
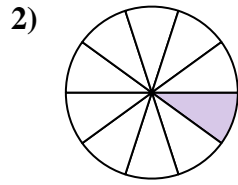
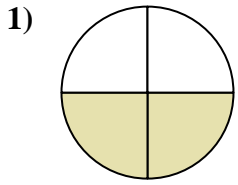
144°	280°	240°	135°
90°	270°	120°	144°
216°	200°	180°	90°

1. _____
2. _____
3. _____
4. _____
5. _____
6. _____
7. _____
8. _____
9. _____
10. _____
11. _____
12. _____





Find the angle (in degrees) of the shaded portion of the circle.



Answers

1. _____

2. _____

3. _____

4. _____

5. _____

6. _____

7. _____

8. _____

9. _____

10. _____

11. _____

12. _____

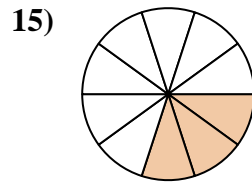
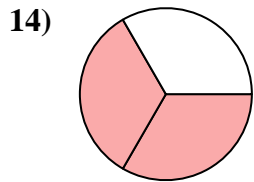
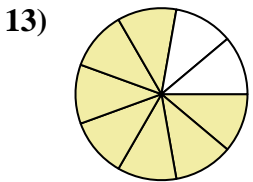
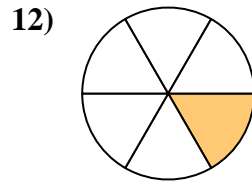
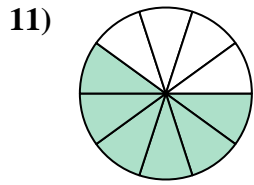
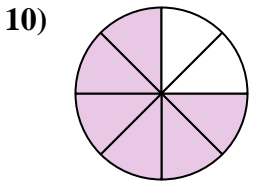
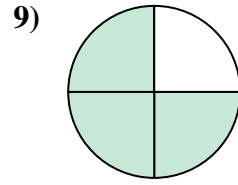
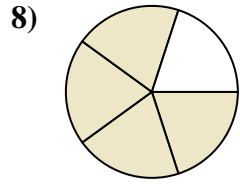
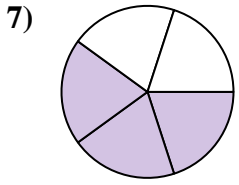
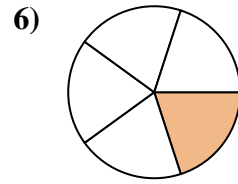
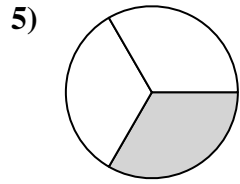
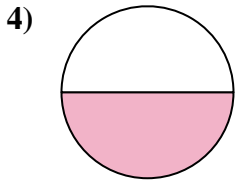
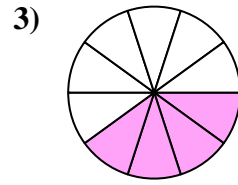
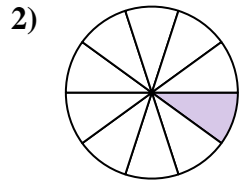
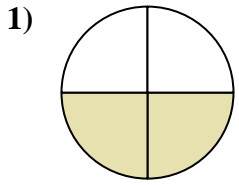
13. _____

14. _____

15. _____



Find the angle (in degrees) of the shaded portion of the circle.



Answers

1. 180°

2. 36°

3. 144°

4. 180°

5. 120°

6. 72°

7. 216°

8. 288°

9. 270°

10. 270°

11. 216°

12. 60°

13. 280°

14. 240°

15. 108°

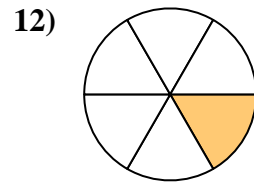
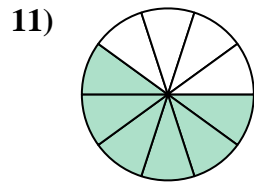
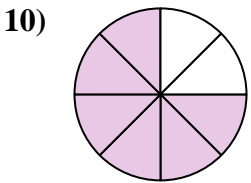
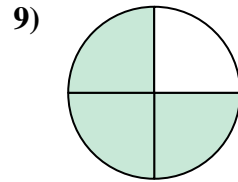
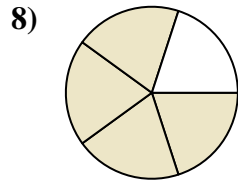
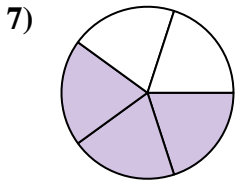
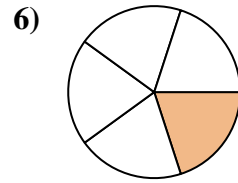
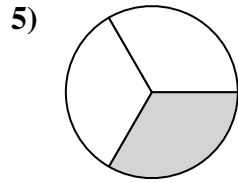
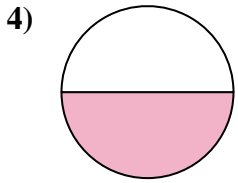
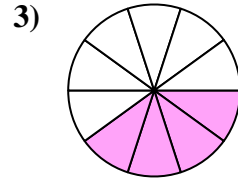
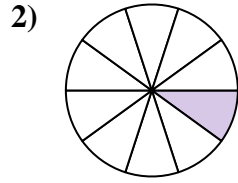
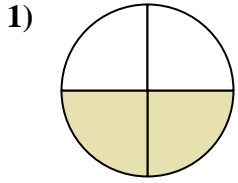


Find the angle (in degrees) of the shaded portion of the circle.

Answers

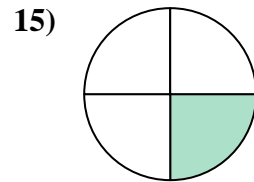
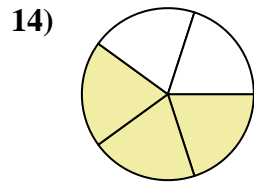
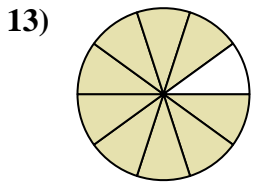
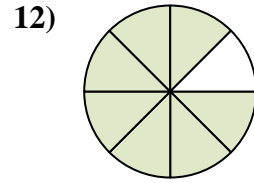
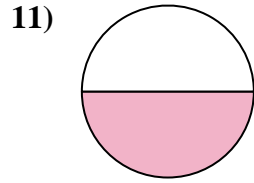
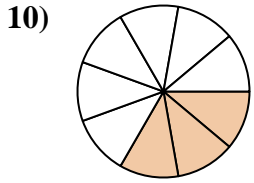
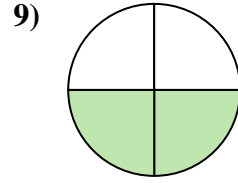
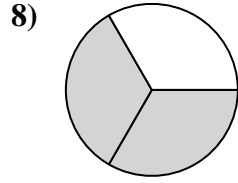
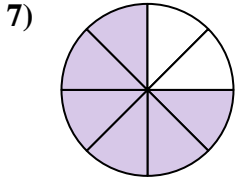
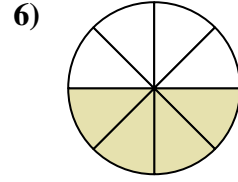
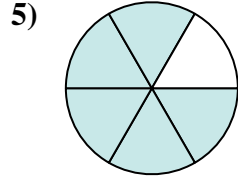
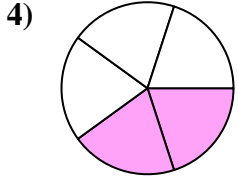
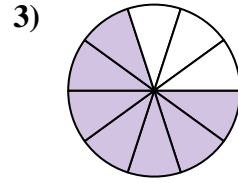
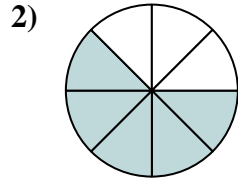
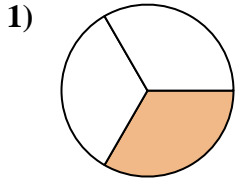
60°	180°	180°	72°
144°	216°	36°	270°
216°	120°	288°	270°

1. _____
2. _____
3. _____
4. _____
5. _____
6. _____
7. _____
8. _____
9. _____
10. _____
11. _____
12. _____





Find the angle (in degrees) of the shaded portion of the circle.



Answers

1. _____

2. _____

3. _____

4. _____

5. _____

6. _____

7. _____

8. _____

9. _____

10. _____

11. _____

12. _____

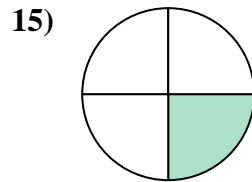
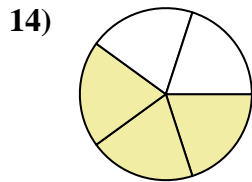
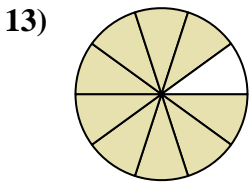
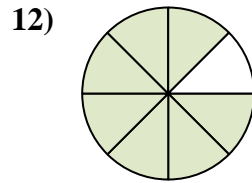
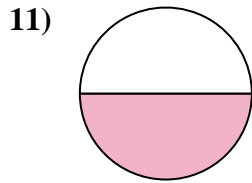
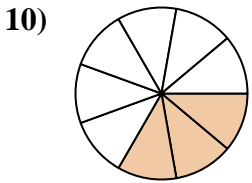
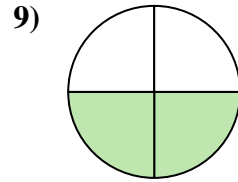
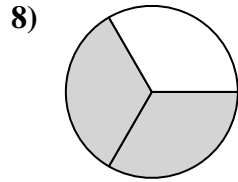
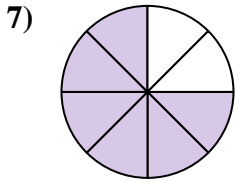
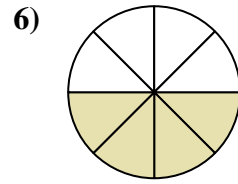
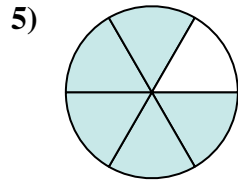
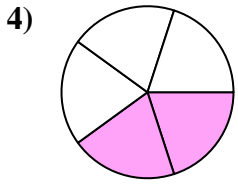
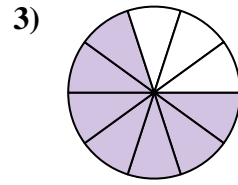
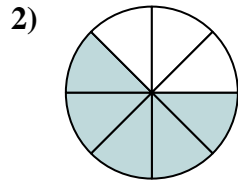
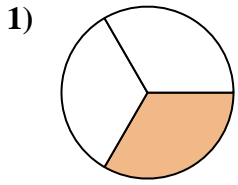
13. _____

14. _____

15. _____



Find the angle (in degrees) of the shaded portion of the circle.



Answers

1. 120°

2. 225°

3. 252°

4. 144°

5. 300°

6. 180°

7. 270°

8. 240°

9. 180°

10. 120°

11. 180°

12. 315°

13. 324°

14. 216°

15. 90°

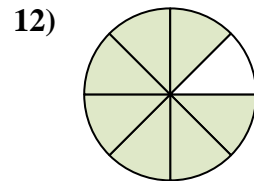
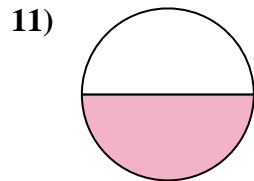
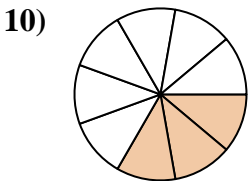
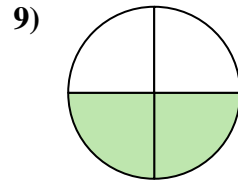
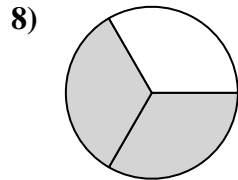
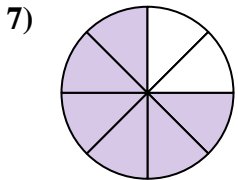
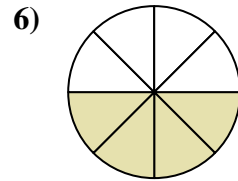
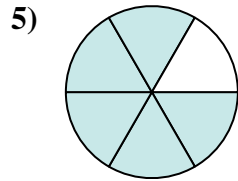
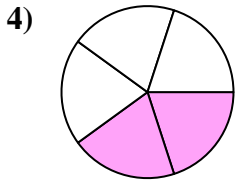
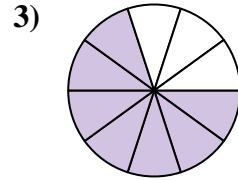
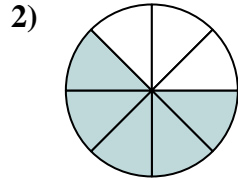
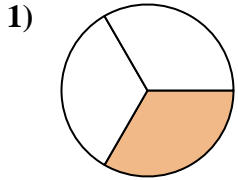


Find the angle (in degrees) of the shaded portion of the circle.

Answers

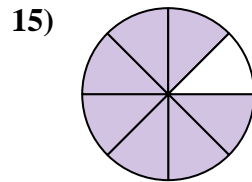
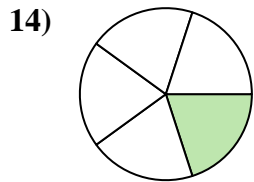
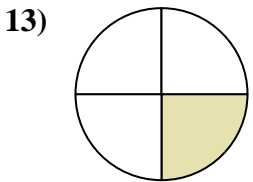
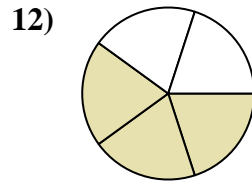
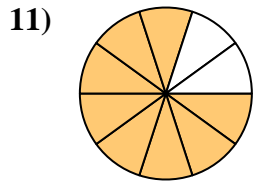
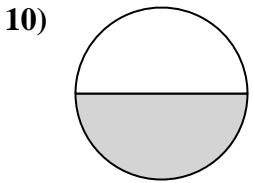
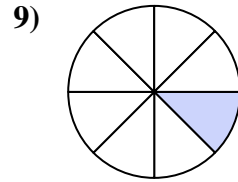
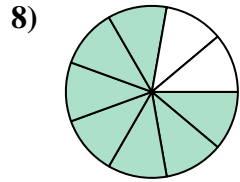
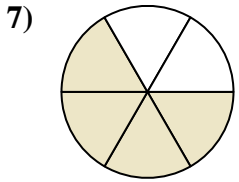
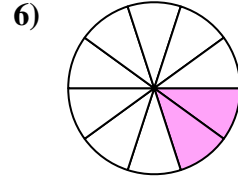
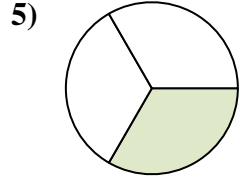
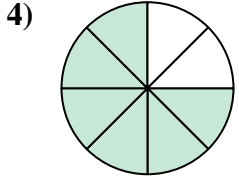
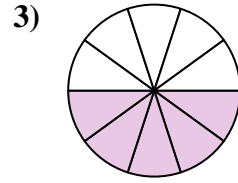
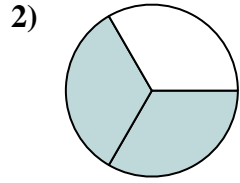
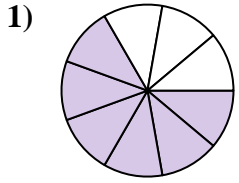
180°	240°	300°	270°
252°	180°	225°	120°
315°	180°	144°	120°

1. _____
2. _____
3. _____
4. _____
5. _____
6. _____
7. _____
8. _____
9. _____
10. _____
11. _____
12. _____





Find the angle (in degrees) of the shaded portion of the circle.



Answers

1. _____

2. _____

3. _____

4. _____

5. _____

6. _____

7. _____

8. _____

9. _____

10. _____

11. _____

12. _____

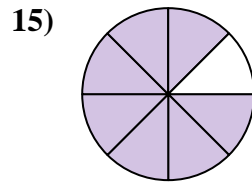
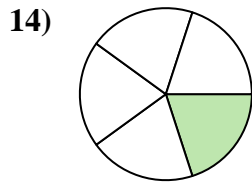
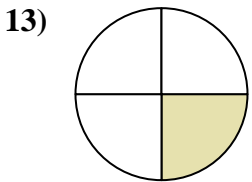
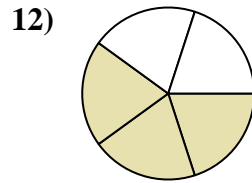
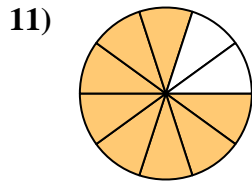
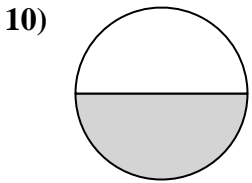
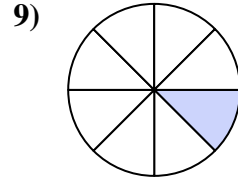
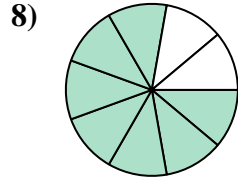
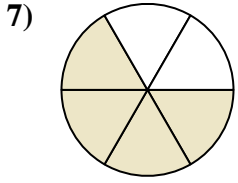
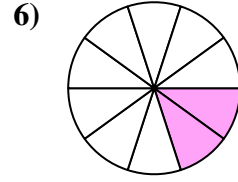
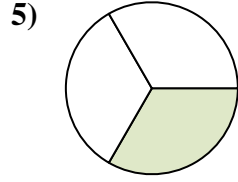
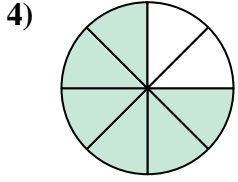
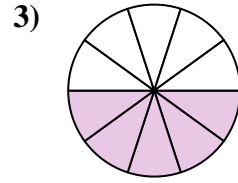
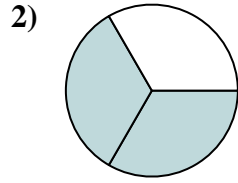
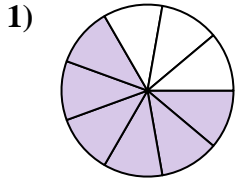
13. _____

14. _____

15. _____



Find the angle (in degrees) of the shaded portion of the circle.



Answers

1. 240°

2. 240°

3. 180°

4. 270°

5. 120°

6. 72°

7. 240°

8. 280°

9. 45°

10. 180°

11. 288°

12. 216°

13. 90°

14. 72°

15. 315°

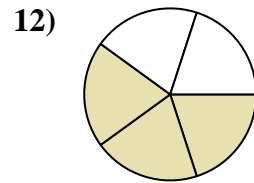
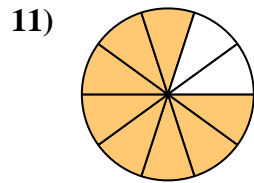
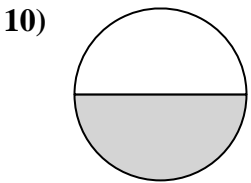
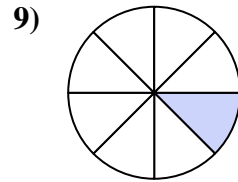
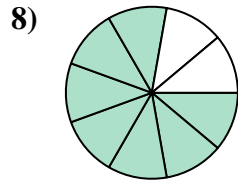
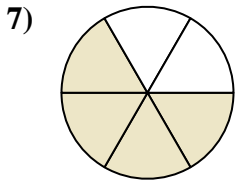
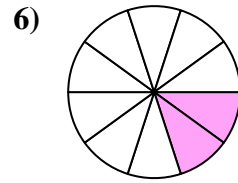
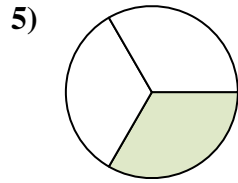
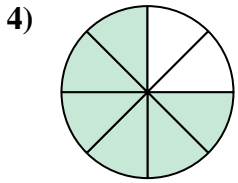
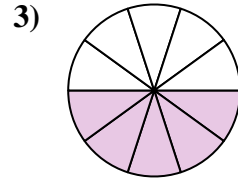
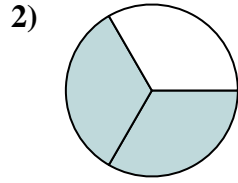
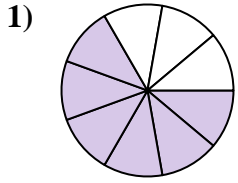


Find the angle (in degrees) of the shaded portion of the circle.

Answers

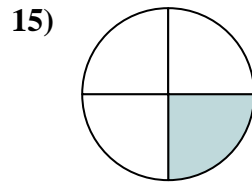
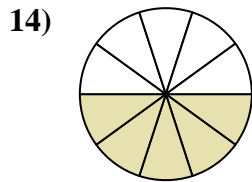
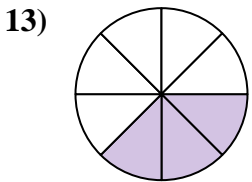
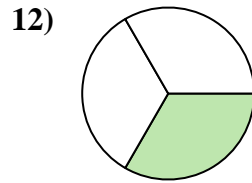
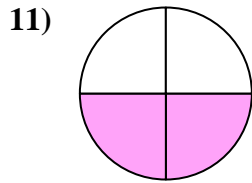
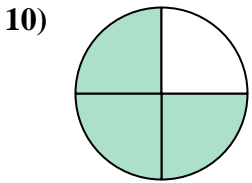
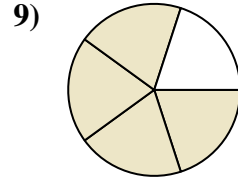
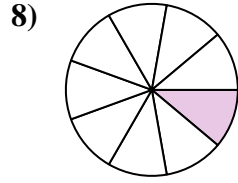
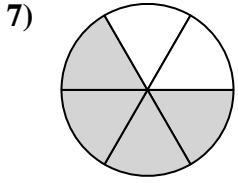
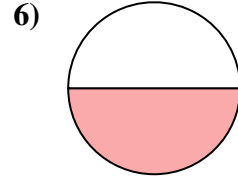
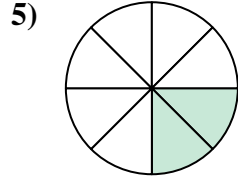
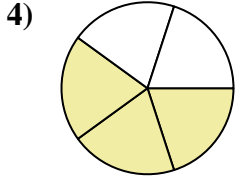
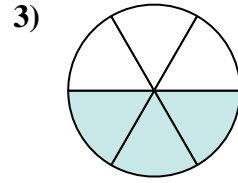
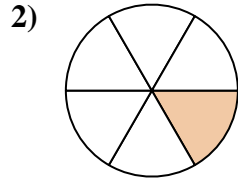
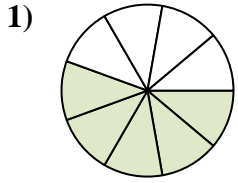
240°	180°	120°	216°
45°	280°	72°	288°
270°	240°	240°	180°

1. _____
2. _____
3. _____
4. _____
5. _____
6. _____
7. _____
8. _____
9. _____
10. _____
11. _____
12. _____





Find the angle (in degrees) of the shaded portion of the circle.

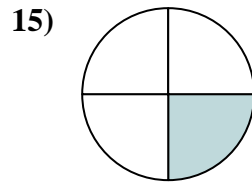
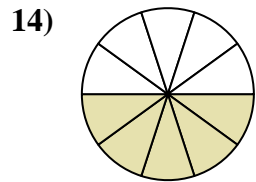
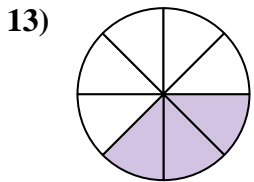
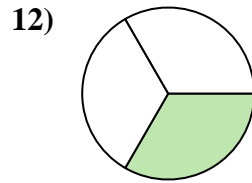
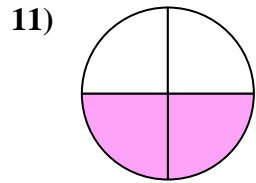
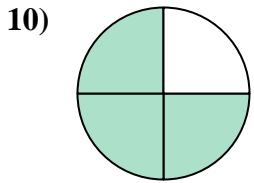
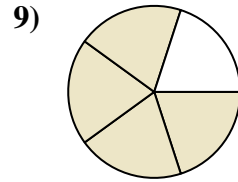
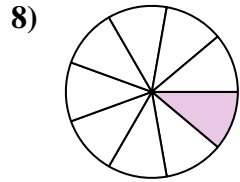
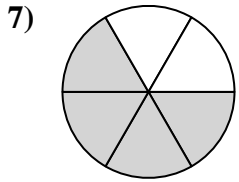
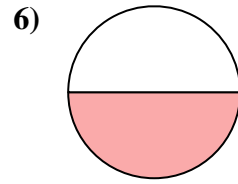
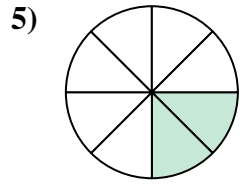
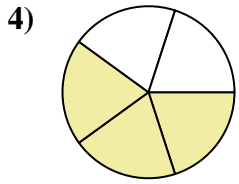
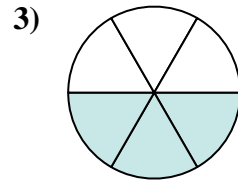
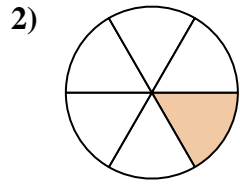
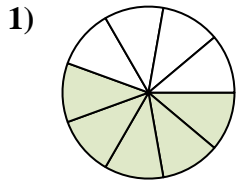


Answers

1. _____
2. _____
3. _____
4. _____
5. _____
6. _____
7. _____
8. _____
9. _____
10. _____
11. _____
12. _____
13. _____
14. _____
15. _____



Find the angle (in degrees) of the shaded portion of the circle.



Answers

1. 200°

2. 60°

3. 180°

4. 216°

5. 90°

6. 180°

7. 240°

8. 40°

9. 288°

10. 270°

11. 180°

12. 120°

13. 135°

14. 180°

15. 90°

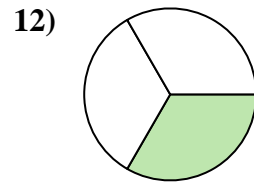
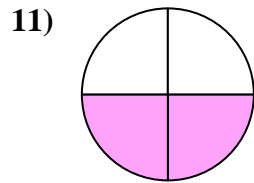
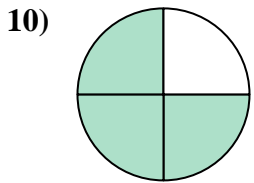
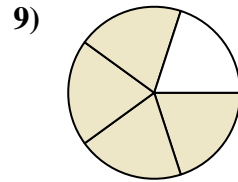
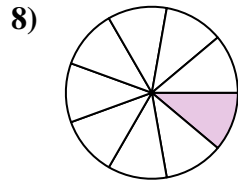
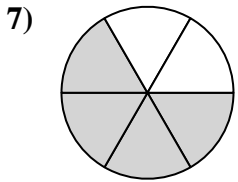
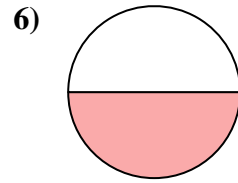
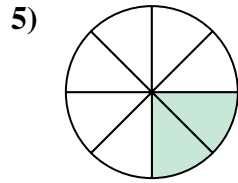
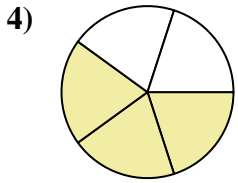
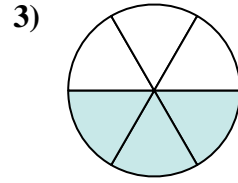
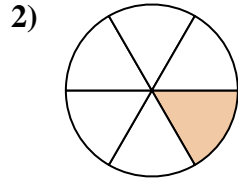
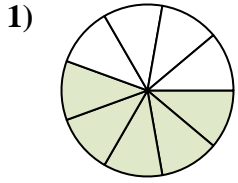


Find the angle (in degrees) of the shaded portion of the circle.

Answers

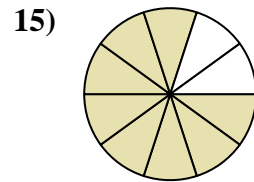
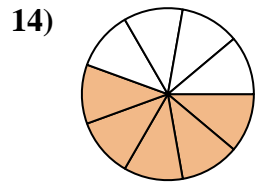
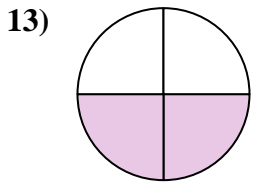
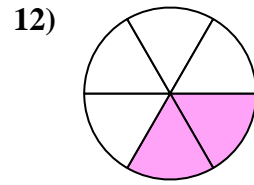
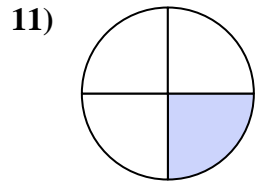
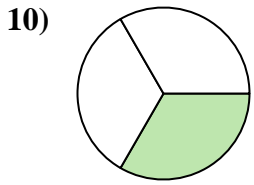
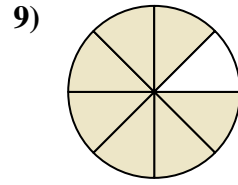
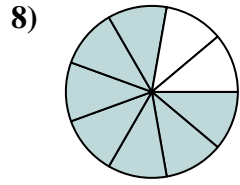
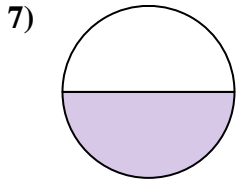
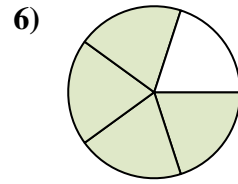
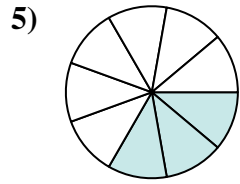
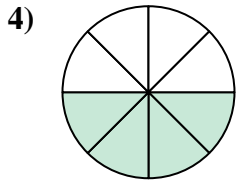
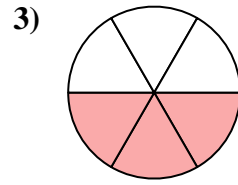
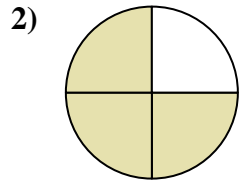
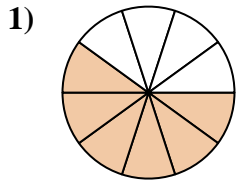
288°	180°	60°	216°
40°	180°	200°	180°
120°	90°	270°	240°

1. _____
2. _____
3. _____
4. _____
5. _____
6. _____
7. _____
8. _____
9. _____
10. _____
11. _____
12. _____





Find the angle (in degrees) of the shaded portion of the circle.

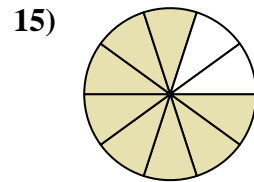
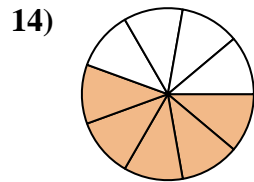
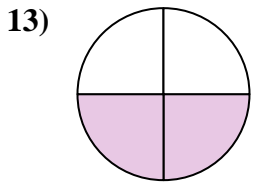
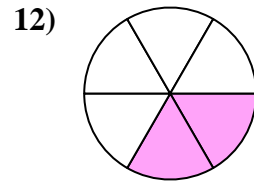
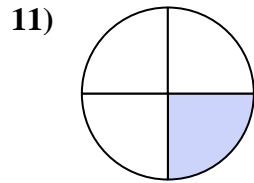
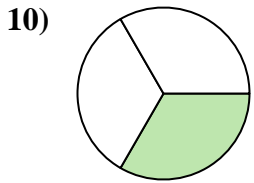
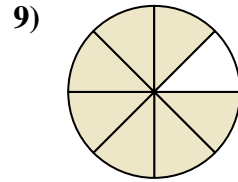
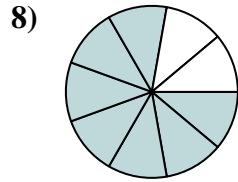
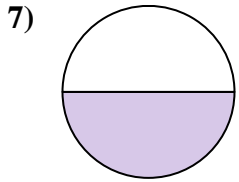
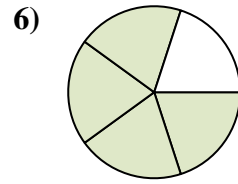
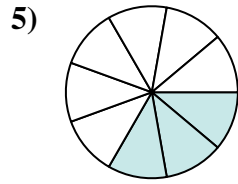
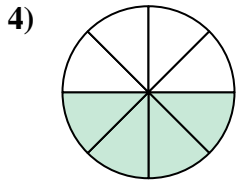
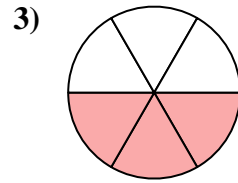
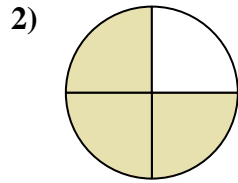
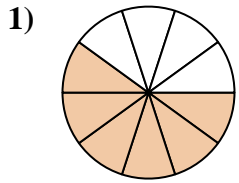


Answers

1. _____
2. _____
3. _____
4. _____
5. _____
6. _____
7. _____
8. _____
9. _____
10. _____
11. _____
12. _____
13. _____
14. _____
15. _____



Find the angle (in degrees) of the shaded portion of the circle.



Answers

1. 216°

2. 270°

3. 180°

4. 180°

5. 120°

6. 288°

7. 180°

8. 280°

9. 315°

10. 120°

11. 90°

12. 120°

13. 180°

14. 200°

15. 288°

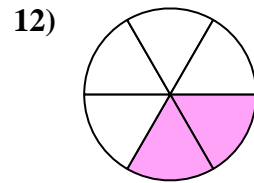
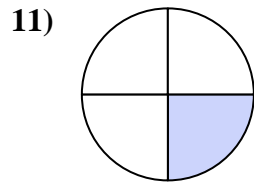
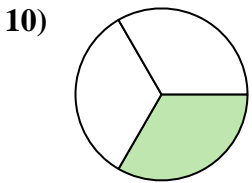
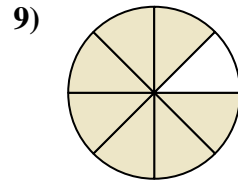
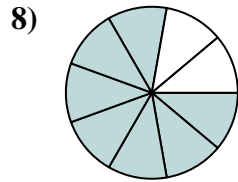
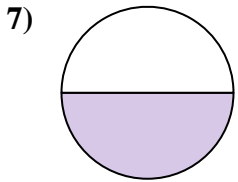
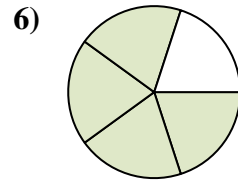
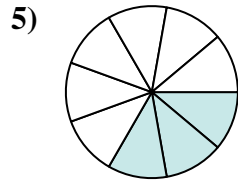
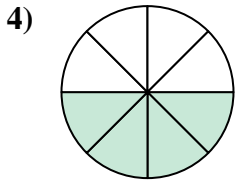
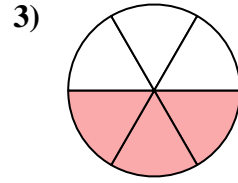
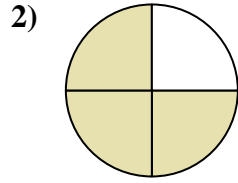
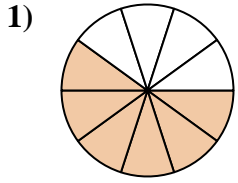


Find the angle (in degrees) of the shaded portion of the circle.

Answers

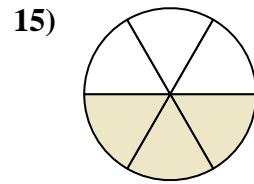
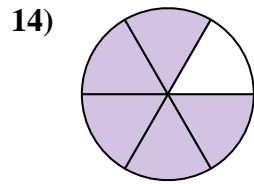
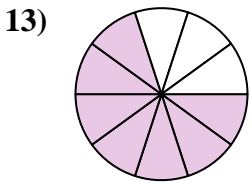
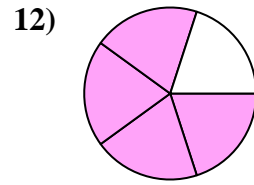
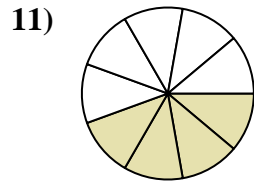
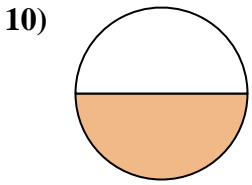
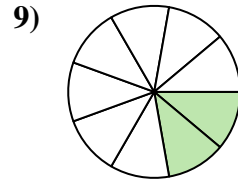
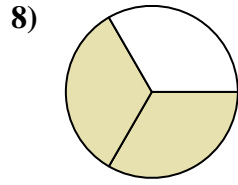
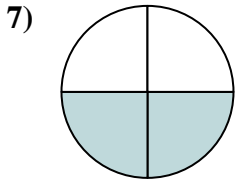
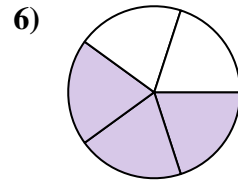
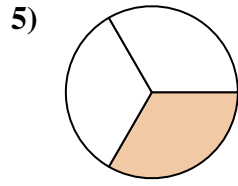
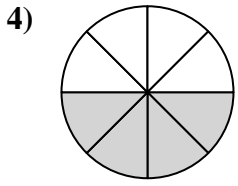
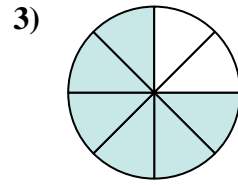
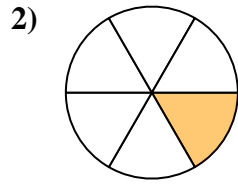
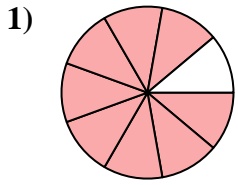
270°	315°	180°	280°
180°	90°	120°	216°
120°	120°	180°	288°

1. _____
2. _____
3. _____
4. _____
5. _____
6. _____
7. _____
8. _____
9. _____
10. _____
11. _____
12. _____





Find the angle (in degrees) of the shaded portion of the circle.



Answers

1. _____

2. _____

3. _____

4. _____

5. _____

6. _____

7. _____

8. _____

9. _____

10. _____

11. _____

12. _____

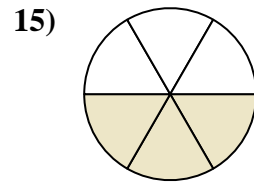
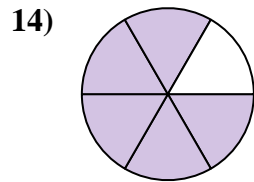
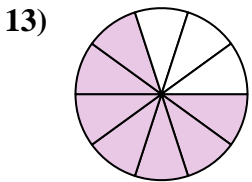
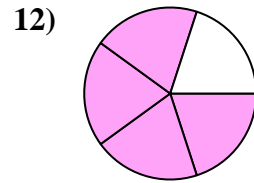
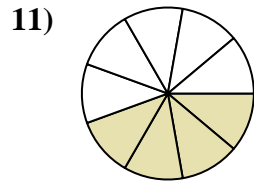
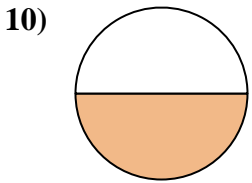
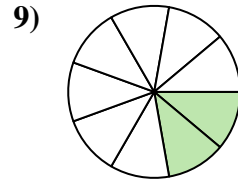
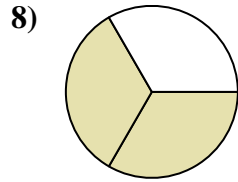
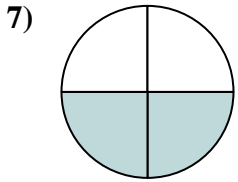
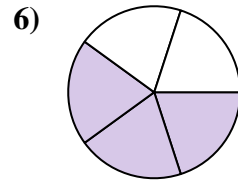
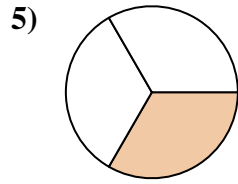
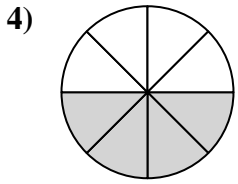
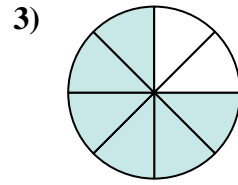
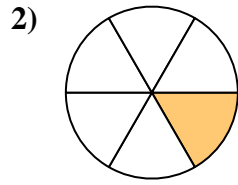
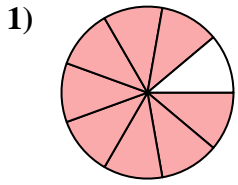
13. _____

14. _____

15. _____



Find the angle (in degrees) of the shaded portion of the circle.



Answers

1. 320°

2. 60°

3. 270°

4. 180°

5. 120°

6. 216°

7. 180°

8. 240°

9. 80°

10. 180°

11. 160°

12. 288°

13. 252°

14. 300°

15. 180°

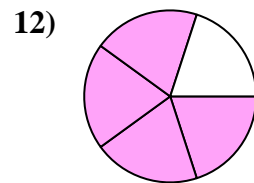
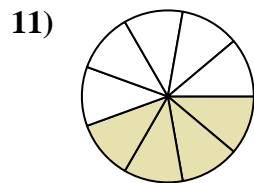
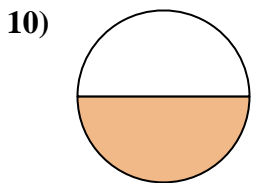
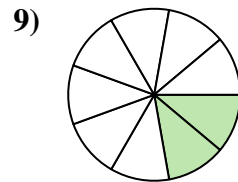
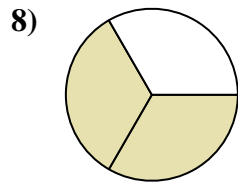
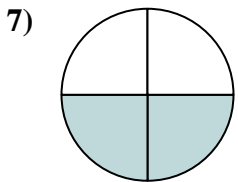
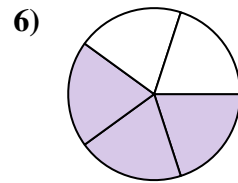
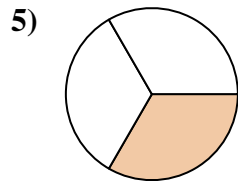
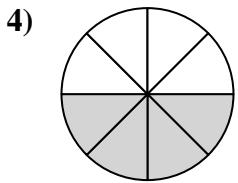
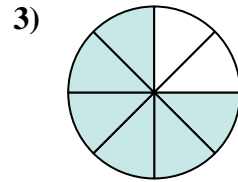
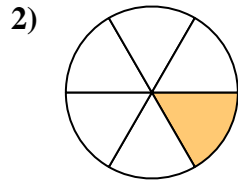
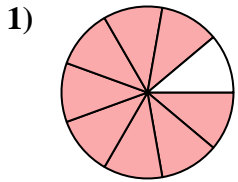


Find the angle (in degrees) of the shaded portion of the circle.

Answers

288°	320°	216°	240°
120°	270°	60°	160°
180°	80°	180°	180°

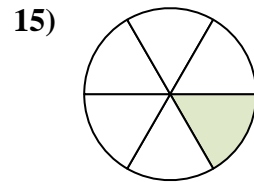
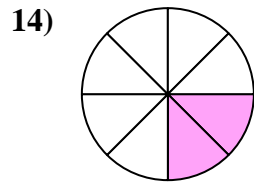
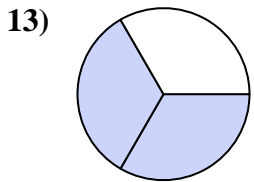
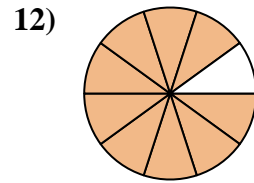
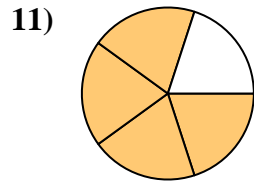
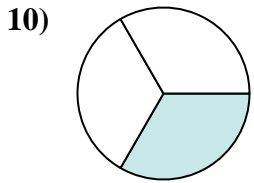
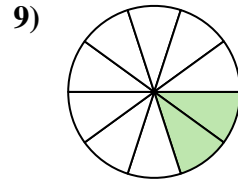
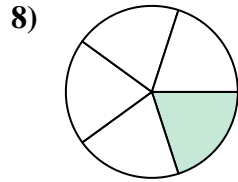
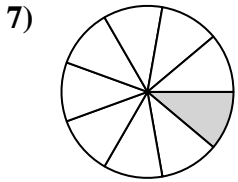
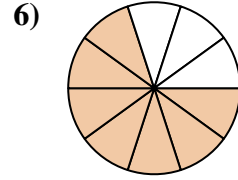
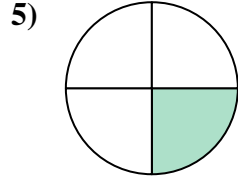
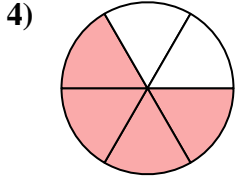
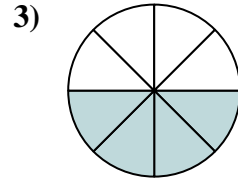
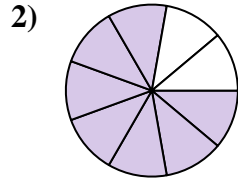
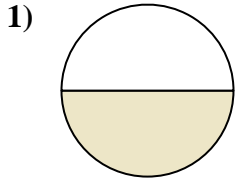
1. _____
2. _____
3. _____
4. _____
5. _____
6. _____
7. _____
8. _____
9. _____
10. _____
11. _____
12. _____





Find the angle (in degrees) of the shaded portion of the circle.

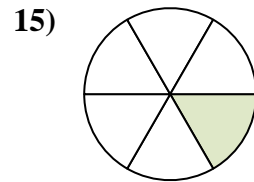
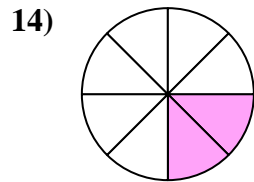
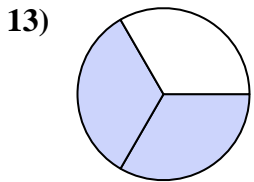
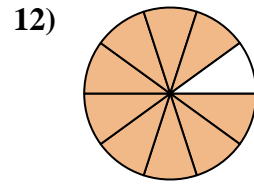
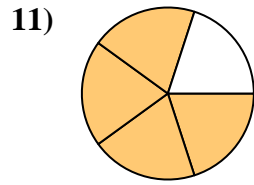
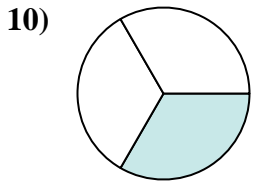
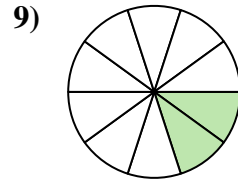
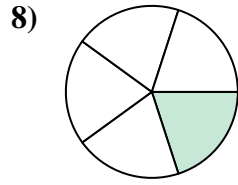
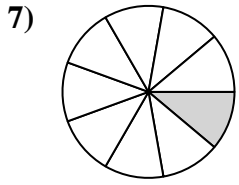
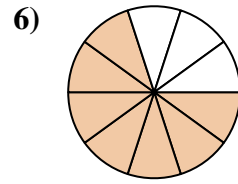
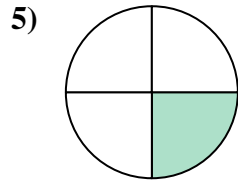
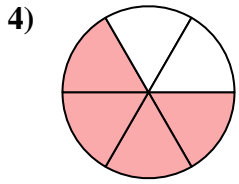
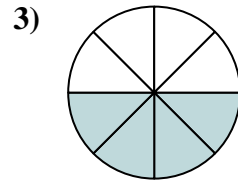
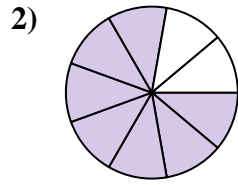
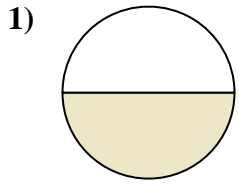
Answers



1. _____
2. _____
3. _____
4. _____
5. _____
6. _____
7. _____
8. _____
9. _____
10. _____
11. _____
12. _____
13. _____
14. _____
15. _____



Find the angle (in degrees) of the shaded portion of the circle.



Answers

1. 180°

2. 280°

3. 180°

4. 240°

5. 90°

6. 252°

7. 40°

8. 72°

9. 72°

10. 120°

11. 288°

12. 324°

13. 240°

14. 90°

15. 60°

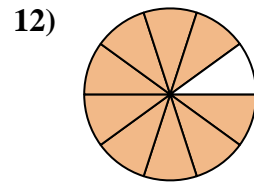
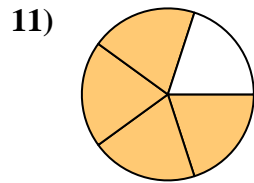
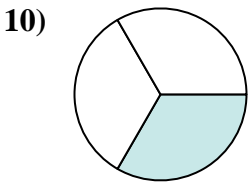
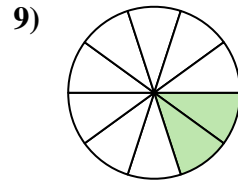
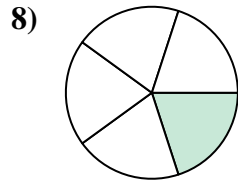
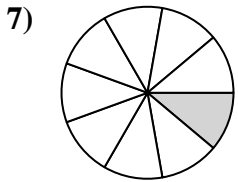
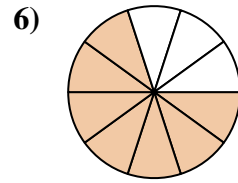
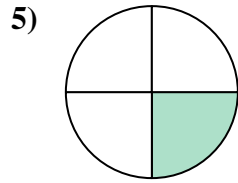
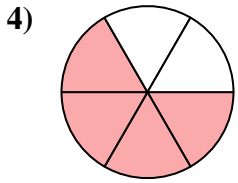
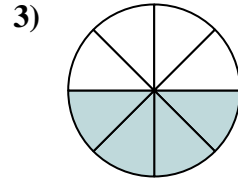
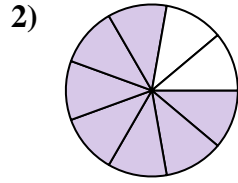
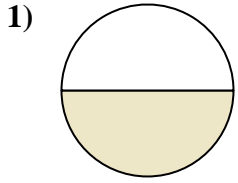


Find the angle (in degrees) of the shaded portion of the circle.

Answers

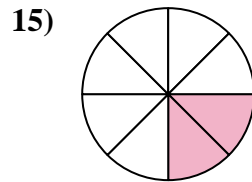
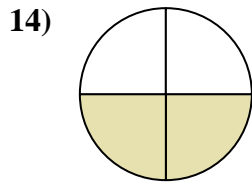
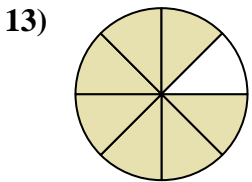
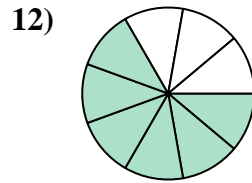
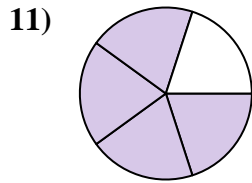
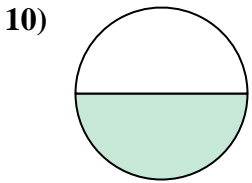
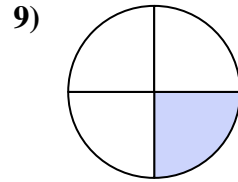
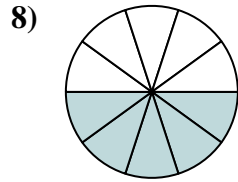
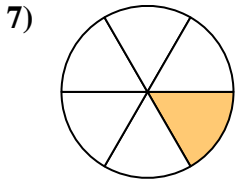
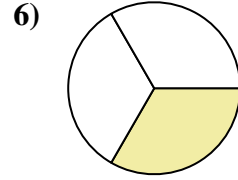
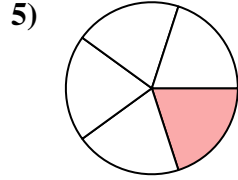
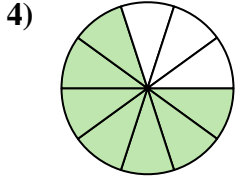
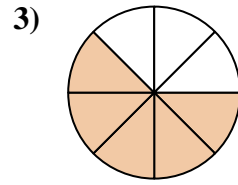
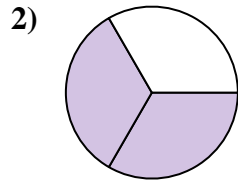
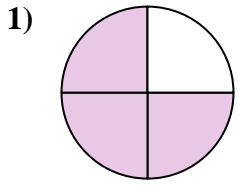
288°	90°	324°	120°
40°	252°	280°	72°
180°	240°	72°	180°

1. _____
2. _____
3. _____
4. _____
5. _____
6. _____
7. _____
8. _____
9. _____
10. _____
11. _____
12. _____





Find the angle (in degrees) of the shaded portion of the circle.



Answers

1. _____

2. _____

3. _____

4. _____

5. _____

6. _____

7. _____

8. _____

9. _____

10. _____

11. _____

12. _____

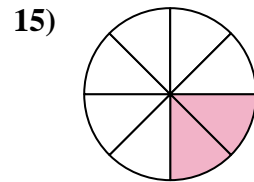
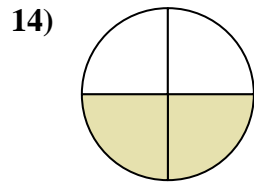
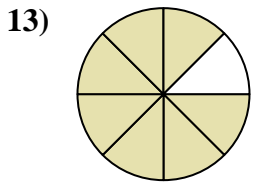
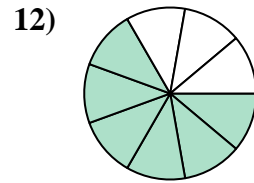
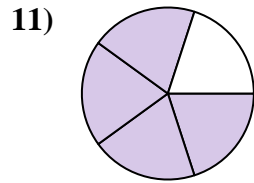
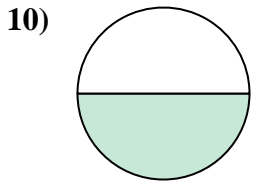
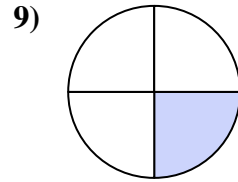
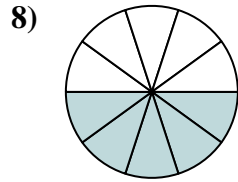
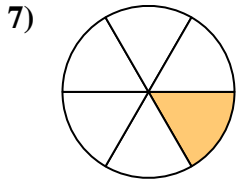
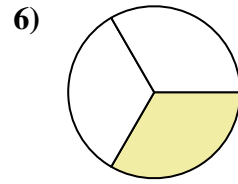
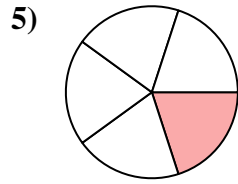
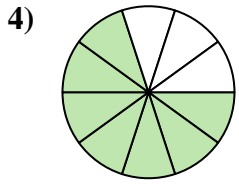
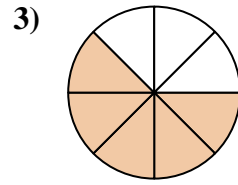
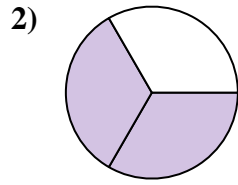
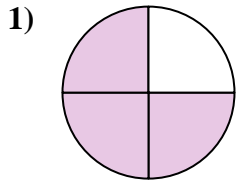
13. _____

14. _____

15. _____



Find the angle (in degrees) of the shaded portion of the circle.



Answers

1. 270°

2. 240°

3. 225°

4. 252°

5. 72°

6. 120°

7. 60°

8. 180°

9. 90°

10. 180°

11. 288°

12. 240°

13. 315°

14. 180°

15. 90°

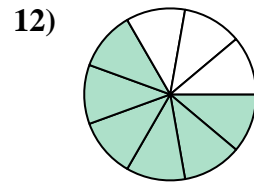
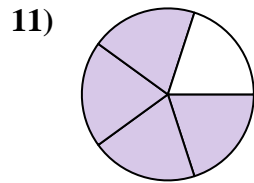
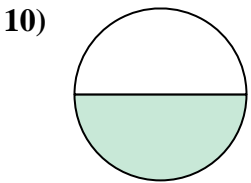
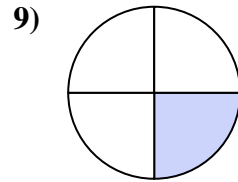
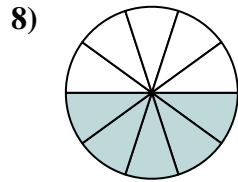
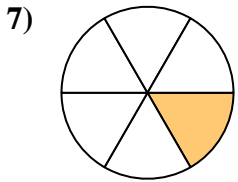
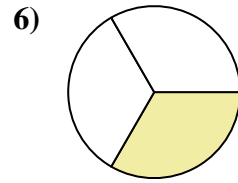
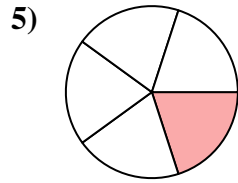
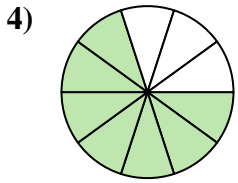
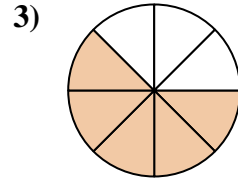
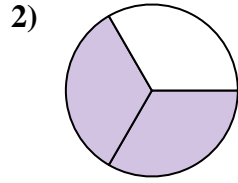
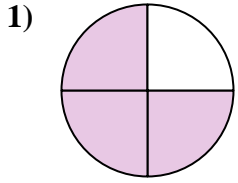


Find the angle (in degrees) of the shaded portion of the circle.

Answers

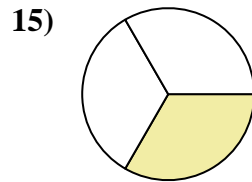
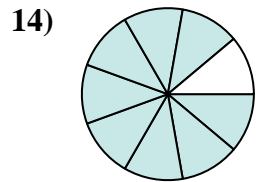
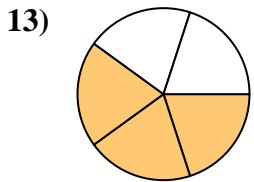
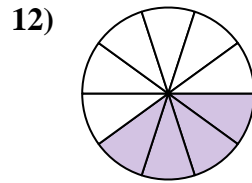
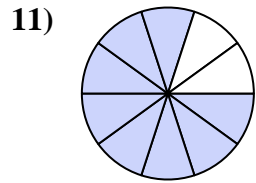
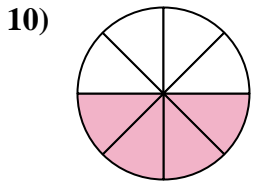
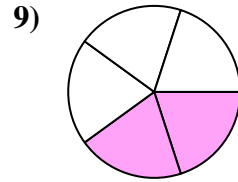
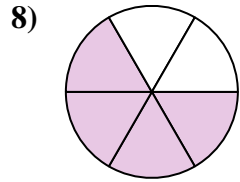
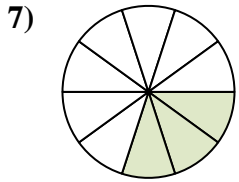
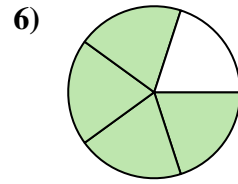
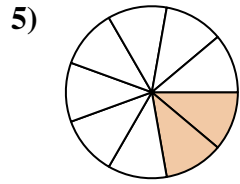
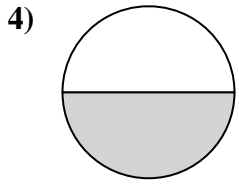
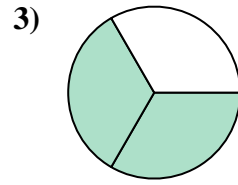
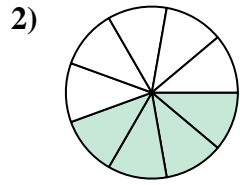
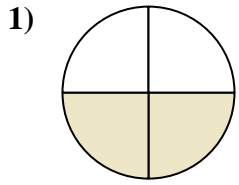
180°	252°	180°	288°
120°	240°	225°	60°
72°	90°	240°	270°

1. _____
2. _____
3. _____
4. _____
5. _____
6. _____
7. _____
8. _____
9. _____
10. _____
11. _____
12. _____





Find the angle (in degrees) of the shaded portion of the circle.

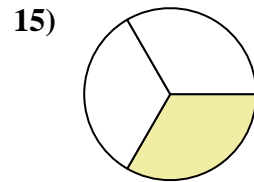
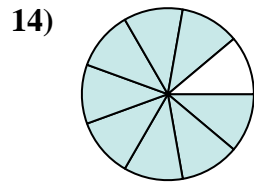
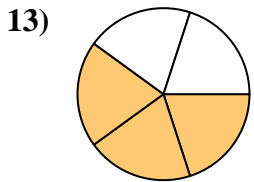
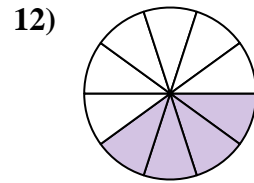
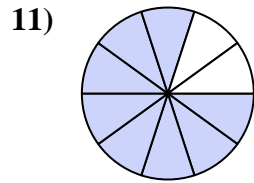
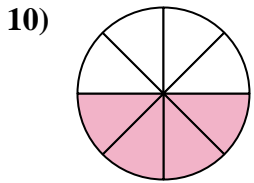
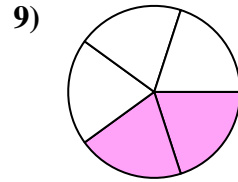
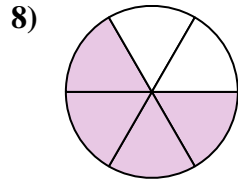
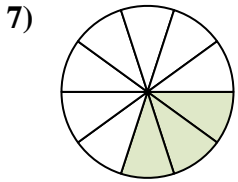
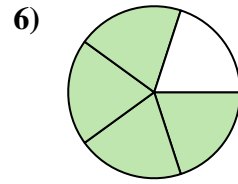
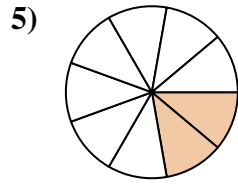
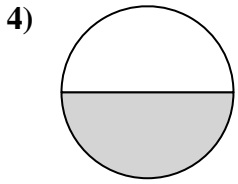
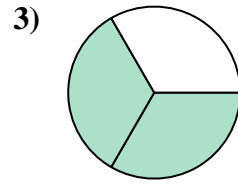
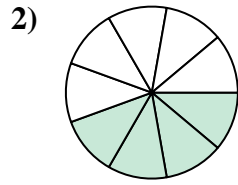
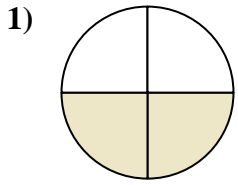


Answers

1. _____
2. _____
3. _____
4. _____
5. _____
6. _____
7. _____
8. _____
9. _____
10. _____
11. _____
12. _____
13. _____
14. _____
15. _____



Find the angle (in degrees) of the shaded portion of the circle.



Answers

1. 180°

2. 160°

3. 240°

4. 180°

5. 80°

6. 288°

7. 108°

8. 240°

9. 144°

10. 180°

11. 288°

12. 144°

13. 216°

14. 320°

15. 120°



Find the angle (in degrees) of the shaded portion of the circle.

Answers

288°	180°	180°	80°
180°	144°	240°	144°
160°	108°	240°	288°

1. _____
2. _____
3. _____
4. _____
5. _____
6. _____
7. _____
8. _____
9. _____
10. _____
11. _____
12. _____

