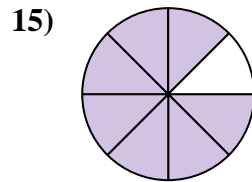
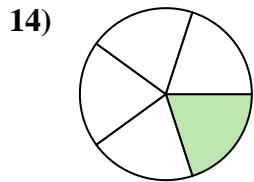
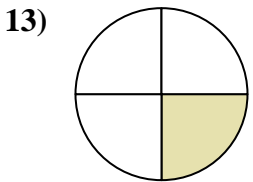
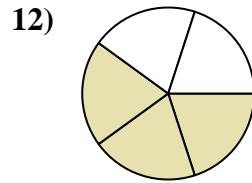
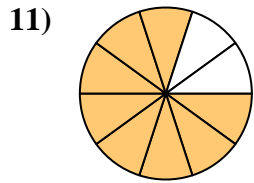
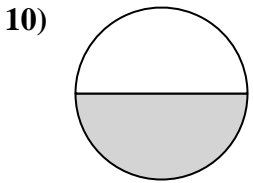
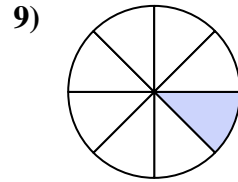
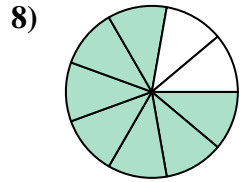
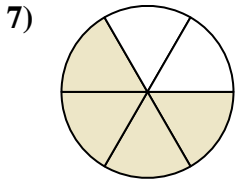
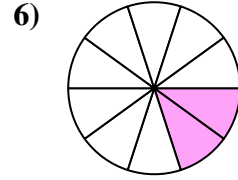
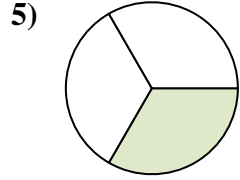
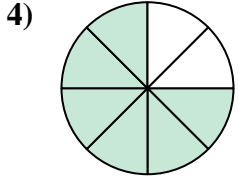
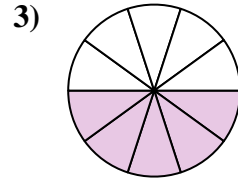
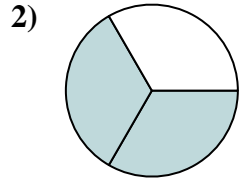
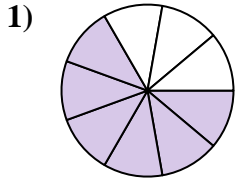




Find the angle (in degrees) of the shaded portion of the circle.



Answers

1. \_\_\_\_\_

2. \_\_\_\_\_

3. \_\_\_\_\_

4. \_\_\_\_\_

5. \_\_\_\_\_

6. \_\_\_\_\_

7. \_\_\_\_\_

8. \_\_\_\_\_

9. \_\_\_\_\_

10. \_\_\_\_\_

11. \_\_\_\_\_

12. \_\_\_\_\_

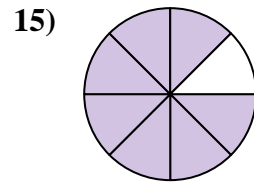
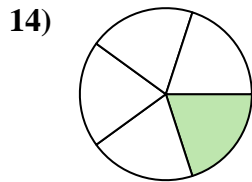
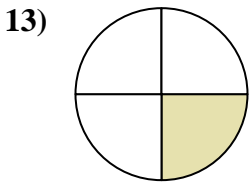
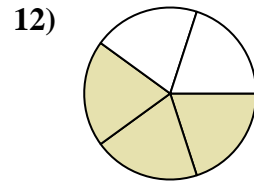
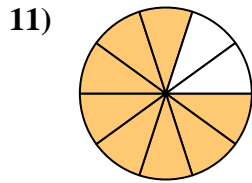
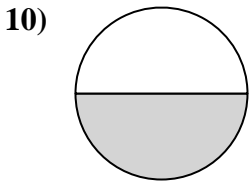
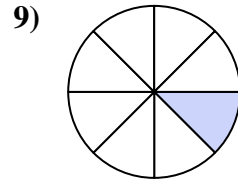
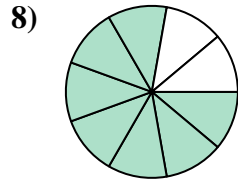
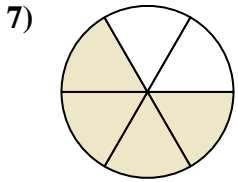
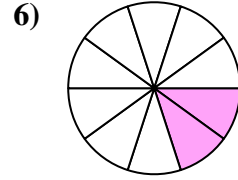
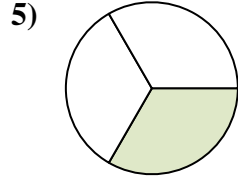
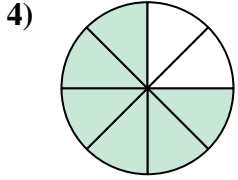
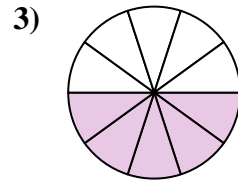
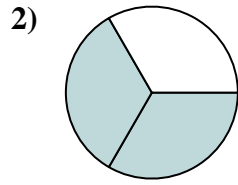
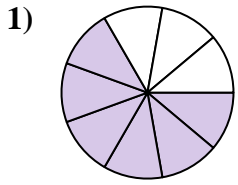
13. \_\_\_\_\_

14. \_\_\_\_\_

15. \_\_\_\_\_



Find the angle (in degrees) of the shaded portion of the circle.



Answers

1. 240°

2. 240°

3. 180°

4. 270°

5. 120°

6. 72°

7. 240°

8. 280°

9. 45°

10. 180°

11. 288°

12. 216°

13. 90°

14. 72°

15. 315°



Find the angle (in degrees) of the shaded portion of the circle.

Answers

240°	180°	120°	216°
45°	280°	72°	288°
270°	240°	240°	180°

1. \_\_\_\_\_
2. \_\_\_\_\_
3. \_\_\_\_\_
4. \_\_\_\_\_
5. \_\_\_\_\_
6. \_\_\_\_\_
7. \_\_\_\_\_
8. \_\_\_\_\_
9. \_\_\_\_\_
10. \_\_\_\_\_
11. \_\_\_\_\_
12. \_\_\_\_\_

