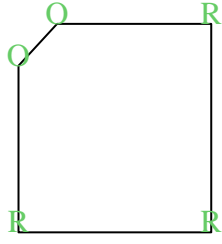


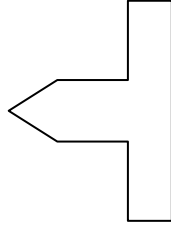


Count the number of Acute, Obtuse and Right and Reflex angles in each shape.

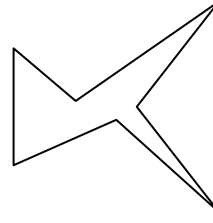
Ex)



1)



2)



Answers

A O R X

Ex. 0 2 3 0

1. _____

2. _____

3. _____

4. _____

5. _____

6. _____

7. _____

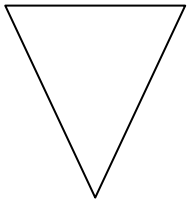
8. _____

9. _____

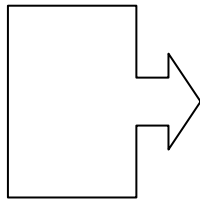
10. _____

11. _____

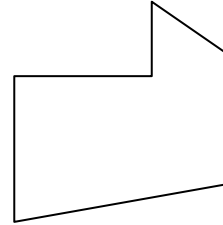
3)




4)



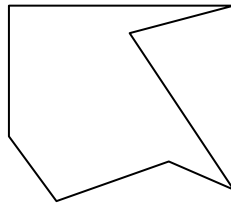
5)



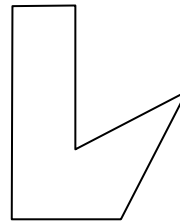
6)




7)




8)



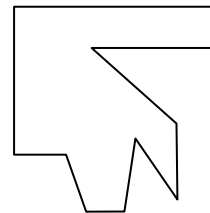
9)



10)



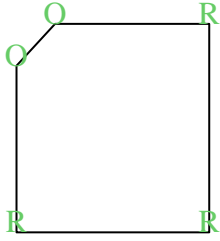
11)



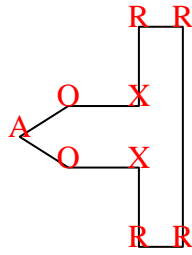


Count the number of Acute, Obtuse and Right and Reflex angles in each shape.

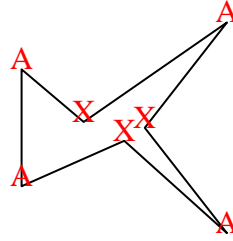
Ex)



1)



2)



Answers

A O R X

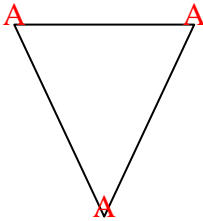
Ex. 0 2 3 0

1. 1 2 4 2

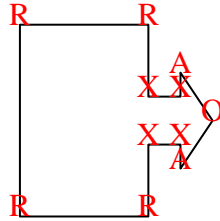
2. 4 0 0 3

3. 3 0 0 0

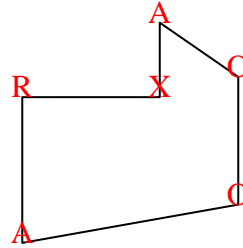
3)



4)



5)



4. 2 1 4 4

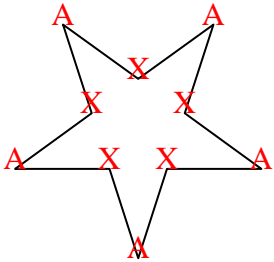
5. 2 2 1 1

6. 5 0 0 5

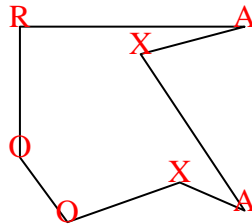
7. 2 2 1 2

8. 1 1 3 1

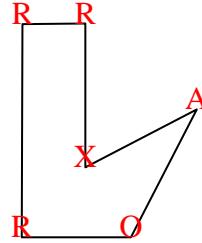
6)



7)



8)




9. 0 0 4 0

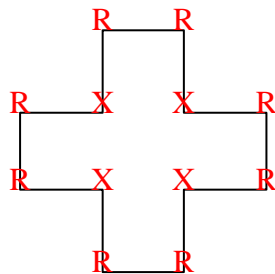
10. 0 0 8 4

11. 1 3 4 3

9)



10)



11)

