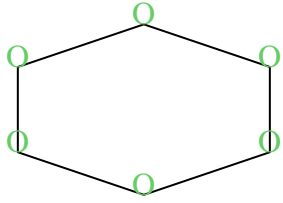




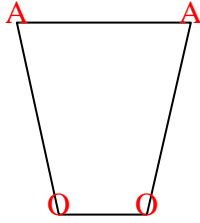


Count the number of Acute, Obtuse and Right and Reflex angles in each shape.

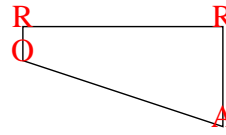
Ex)



1)



2)



Answers

A O R X

Ex. 0 6 0 0

1. 2 2 0 0

2. 1 1 2 0

3. 2 4 1 2

4. 4 0 0 3

5. 5 0 0 5

6. 4 2 0 4

7. 1 2 4 2

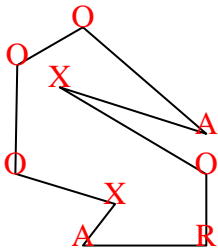
8. 3 0 0 0

9. 0 0 4 0

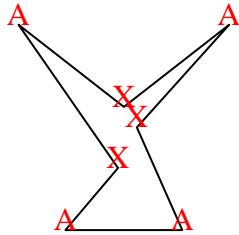
10. 1 3 4 3

11. 2 1 1 1

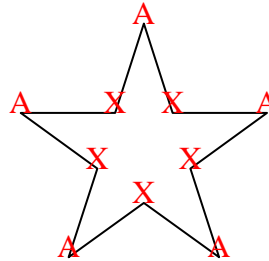
3)



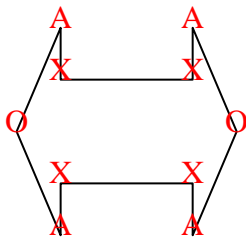
4)



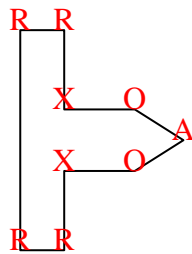
5)



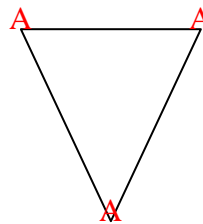
6)



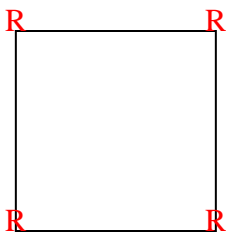
7)



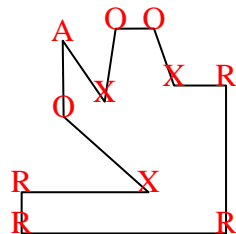
8)



9)



10)



11)

