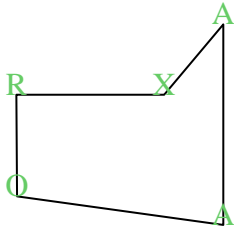




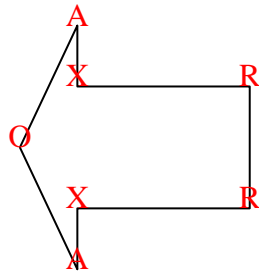


Count the number of Acute, Obtuse and Right and Reflex angles in each shape.

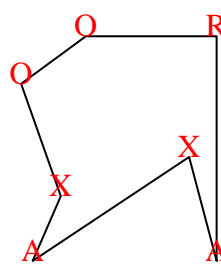
Ex)



1)



2)



Answers

A O R X

Ex. 2 1 1 1

1. 2 1 2 2

2. 2 2 1 2

3. 1 2 4 2

4. 0 0 8 4

5. 2 2 1 1

6. 1 1 3 1

7. 2 2 0 1

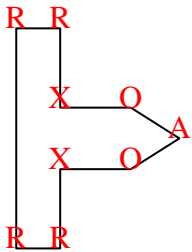
8. 0 3 2 0

9. 2 4 1 2

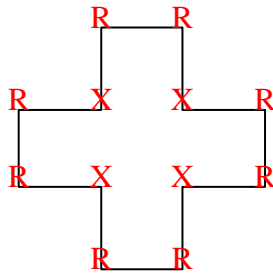
10. 4 0 0 3

11. 1 3 4 3

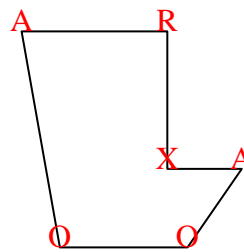
3)



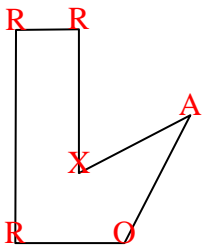
4)



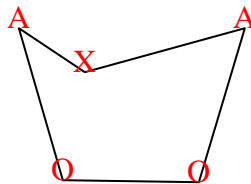
5)



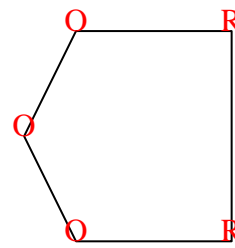
6)



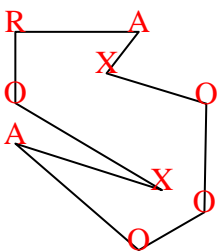
7)



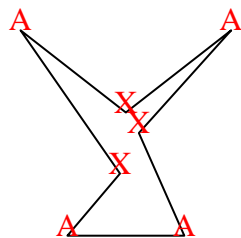
8)



9)



10)



11)

