




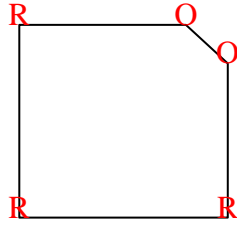


Count the number of Acute, Obtuse and Right and Reflex angles in each shape.

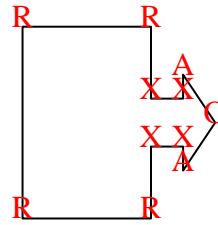
Ex)



1)



2)



Answers

A O R X

Ex. 0 0 4 0

1. 0 2 3 0

2. 2 1 4 4

3. 1 2 4 2

4. 3 0 0 0

5. 0 6 0 0

6. 2 2 0 0

7. 2 3 0 1

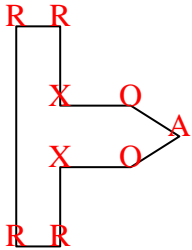
8. 2 0 1 0

9. 4 2 0 4

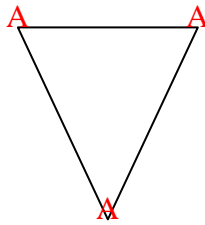
10. 2 2 0 0

11. 1 1 2 0

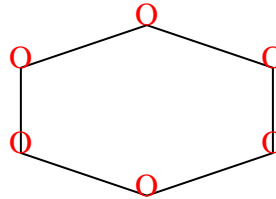
3)



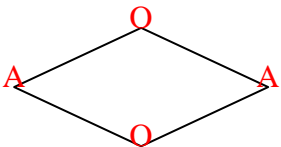
4)



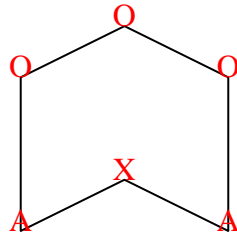
5)



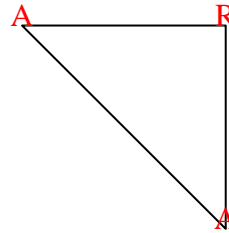
6)



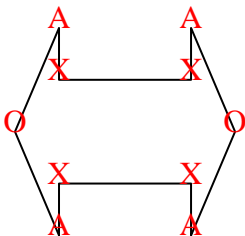
7)



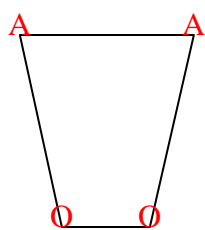
8)



9)



10)



11)

