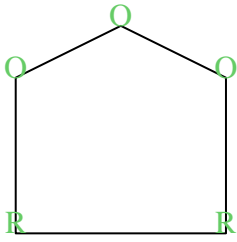


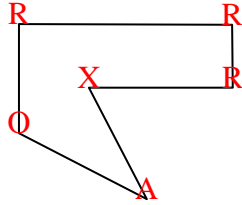


Count the number of Acute, Obtuse and Right and Reflex angles in each shape.

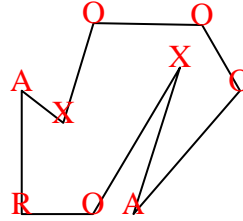
Ex)



1)



2)



Answers

A O R X

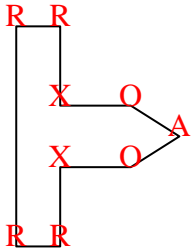
Ex. 0 3 2 0

1. 1 1 3 1

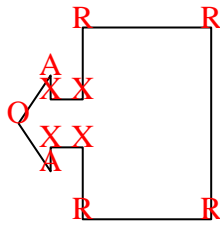
2. 2 4 1 2

3. 1 2 4 2

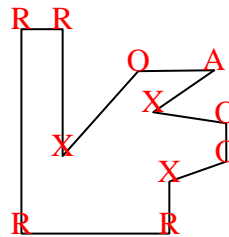
3)



4)



5)



4. 2 1 4 4

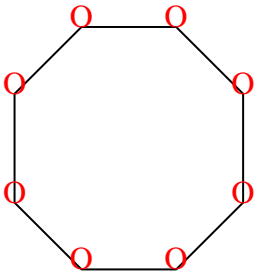
5. 1 3 4 3

6. 0 8 0 0

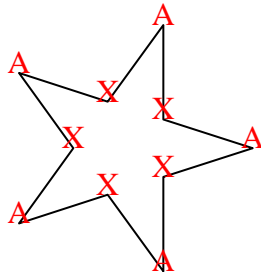
7. 5 0 0 5

8. 2 2 0 1

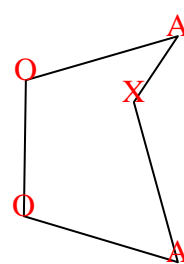
6)



7)



8)

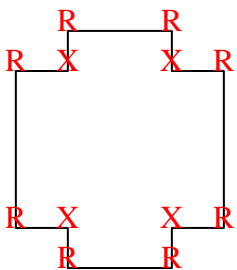


9. 0 0 8 4

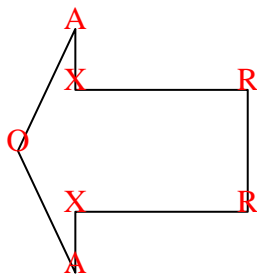
10. 2 1 2 2

11. 2 0 1 0

9)



10)



11)

