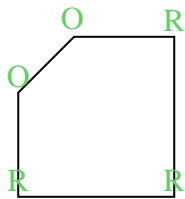


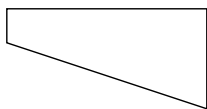


Count the number of Acute, Obtuse and Right angles inside each shape.

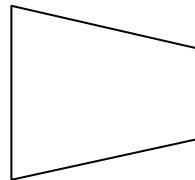
Ex)



1)



2)



Answers

A O R

Ex. 0 2 3

1. _____

2. _____

3. _____

4. _____

5. _____

6. _____

7. _____

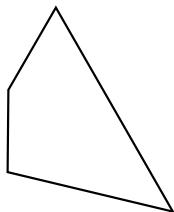
8. _____

9. _____

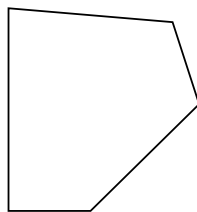
10. _____

11. _____

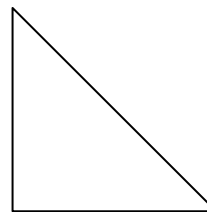
3)



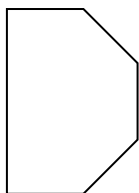
4)



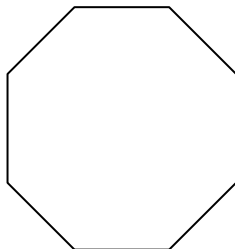
5)



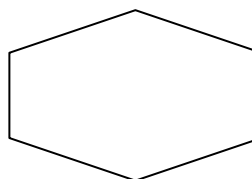
6)



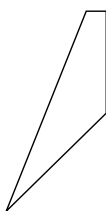
7)



8)



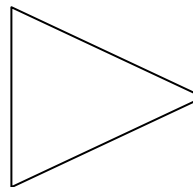
9)



10)



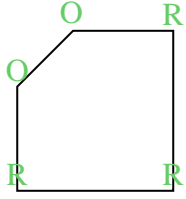
11)



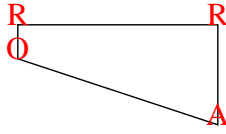


Count the number of Acute, Obtuse and Right angles inside each shape.

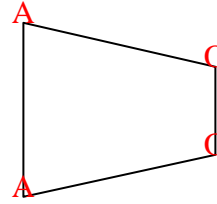
Ex)



1)



2)



Answers

A O R

Ex. 0 2 3

1. 1 1 2

2. 2 2 0

3. 2 2 0

4. 0 4 1

5. 2 0 1

6. 0 4 2

7. 0 8 0

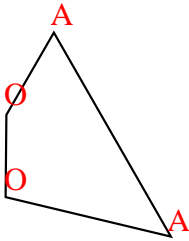
8. 0 6 0

9. 1 2 1

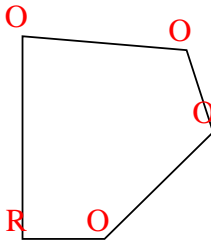
10. 0 0 4

11. 3 0 0

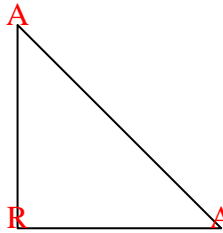
3)



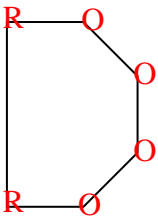
4)



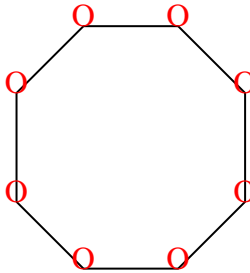
5)



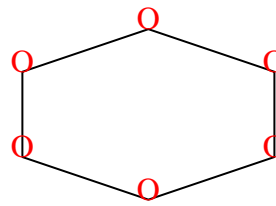
6)



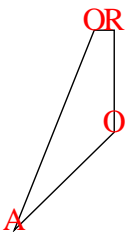
7)




8)



9)



10)



11)

