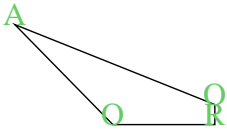


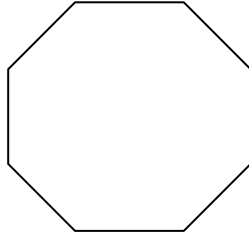


Count the number of Acute, Obtuse and Right angles inside each shape.

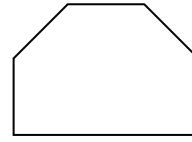
Ex)



1)



2)



Answers

A O R

Ex. 1 2 1

1. _____

2. _____

3. _____

4. _____

5. _____

6. _____

7. _____


8. _____

9. _____

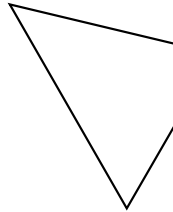
10. _____

11. _____


3)



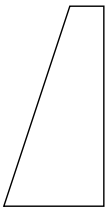
4)



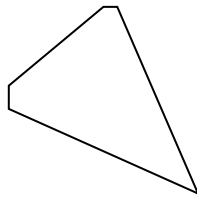
5)



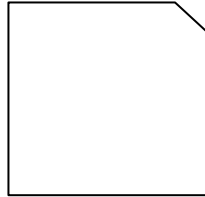
6)



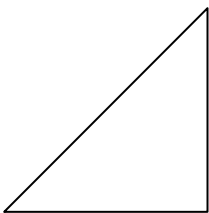
7)



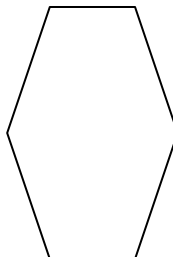
8)



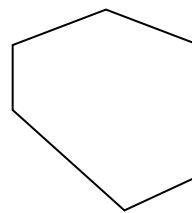
9)



10)



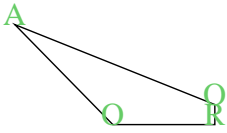
11)



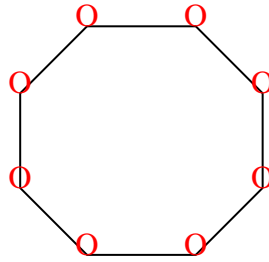


Count the number of Acute, Obtuse and Right angles inside each shape.

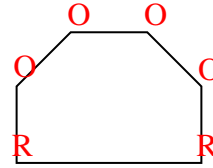
Ex)



1)



2)



Answers

A O R

Ex. 1 2 1

1. 0 8 0

2. 0 4 2

3. 0 0 4

4. 2 2 0

5. 0 0 4

6. 1 1 2

7. 1 4 0


8. 0 2 3

9. 2 0 1

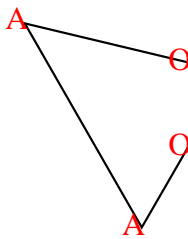
10. 0 6 0

11. 0 6 0

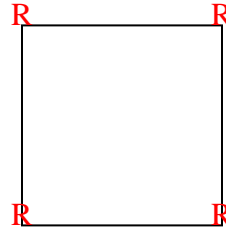
3)



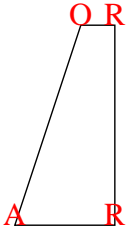
4)



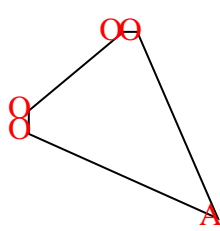
5)



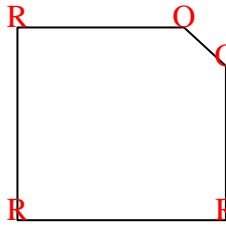
6)



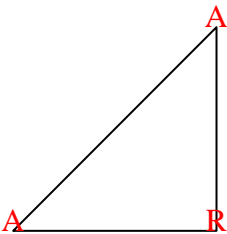
7)



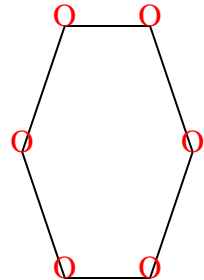
8)



9)



10)



11)

