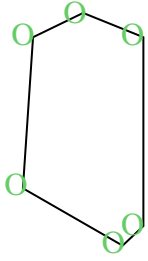




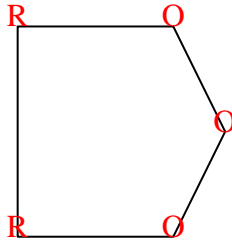


Count the number of Acute, Obtuse and Right angles inside each shape.

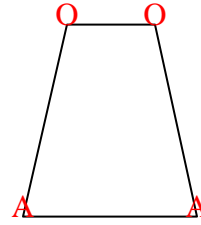
Ex)



1)



2)



Answers

A O R

Ex. 0 6 0

1. 0 3 2

2. 2 2 0

3. 0 2 3

4. 0 7 0

5. 0 8 0

6. 1 4 0

7. 3 0 0

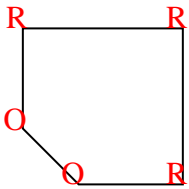
8. 2 2 0

9. 0 6 0

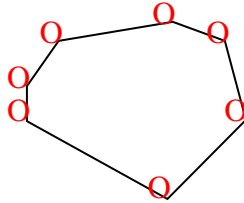
10. 0 4 2

11. 1 2 1

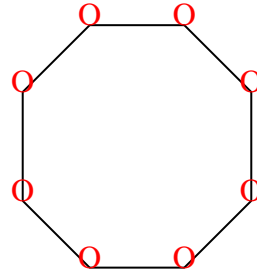
3)



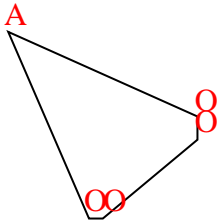
4)



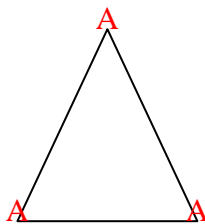
5)



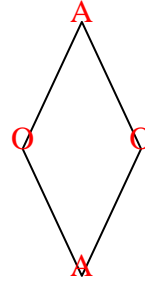
6)



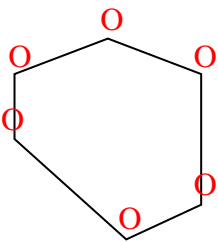
7)



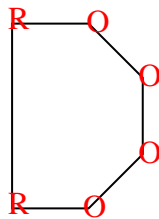
8)



9)



10)



11)

