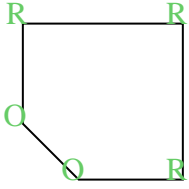


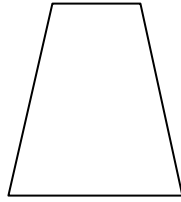


Count the number of Acute, Obtuse and Right angles inside each shape.

Ex)



1)



2)



**Answers**

A O R

Ex. 0 2 3

1. \_\_\_\_\_

2. \_\_\_\_\_

3. \_\_\_\_\_

4. \_\_\_\_\_

5. \_\_\_\_\_

6. \_\_\_\_\_

7. \_\_\_\_\_

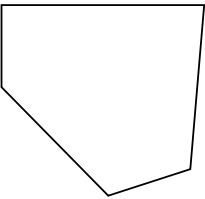
8. \_\_\_\_\_

9. \_\_\_\_\_

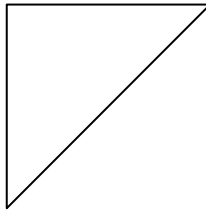
10. \_\_\_\_\_

11. \_\_\_\_\_

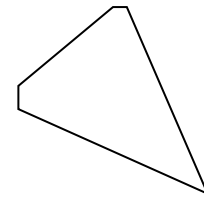
3)




4)



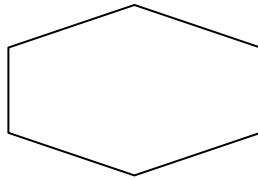
5)



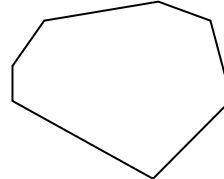
6)



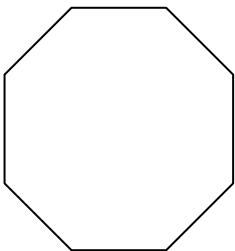
7)



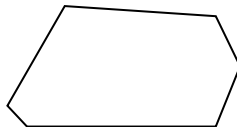
8)



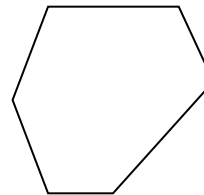
9)



10)



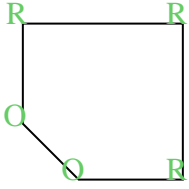
11)



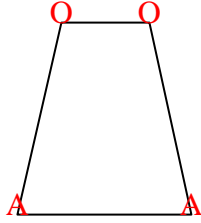


Count the number of Acute, Obtuse and Right angles inside each shape.


Ex)



1)



2)



**Answers**

A O R

Ex. 0 2 3

1. 2 2 0

2. 0 0 4

3. 0 4 1

4. 2 0 1

5. 1 4 0

6. 0 0 4

7. 0 6 0

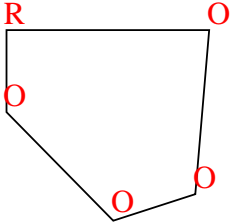
8. 0 7 0

9. 0 8 0

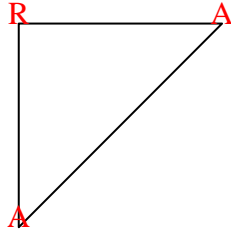
10. 0 6 0

11. 0 6 0

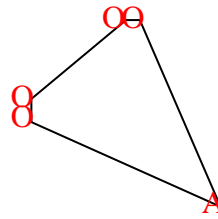
3)



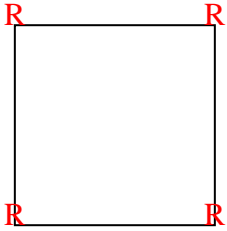
4)



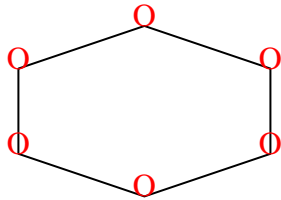
5)



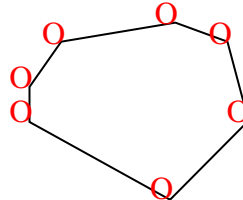
6)



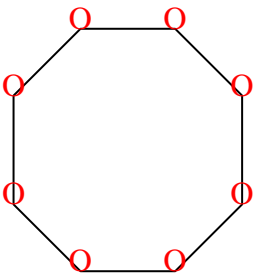
7)



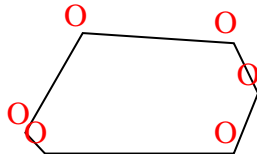
8)



9)



10)



11)

