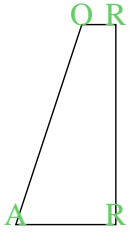


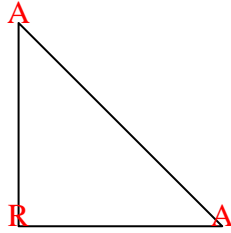


Count the number of Acute, Obtuse and Right angles inside each shape.

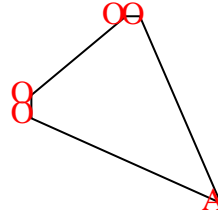
Ex)



1)



2)



Answers

A O R

Ex. 1 1 2

1. 2 0 1

2. 1 4 0

3. 0 7 0

4. 2 2 0

5. 0 8 0

6. 0 3 2

7. 0 0 4

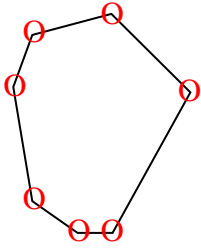
8. 0 6 0

9. 0 2 3

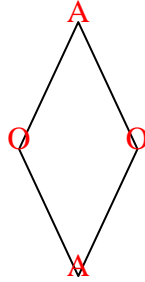
10. 3 0 0

11. 0 2 3

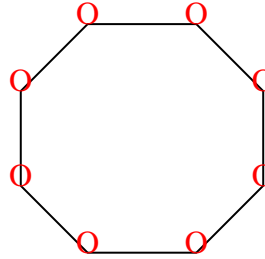
3)



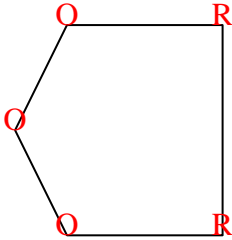
4)




5)



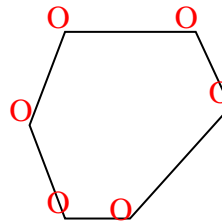
6)



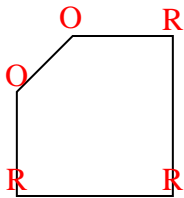
7)



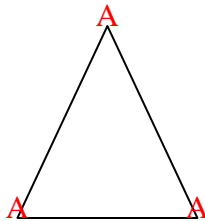
8)



9)



10)



11)

