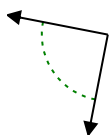


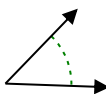


Determine if the angle shown is acute, obtuse, right or straight.

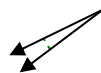
Ex)



1)



2)



Answers

Ex. right

1. _____

2. _____

3. _____

4. _____

5. _____

6. _____

7. _____

8. _____

9. _____

10. _____

11. _____

12. _____

13. _____

14. _____

15. _____

16. _____

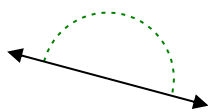
17. _____

18. _____

19. _____

20. _____

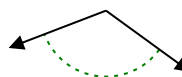
3)



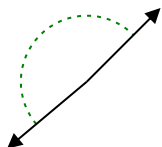
4)



5)



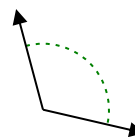
6)



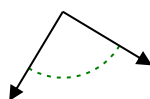
7)



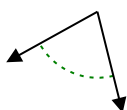
8)



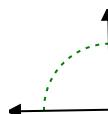
9)



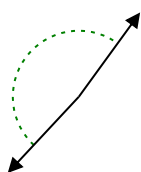
10)



11)



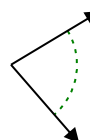
12)



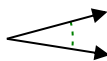
13)



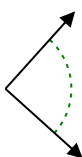
14)



15)



16)



17)



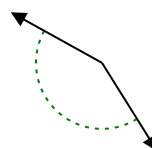
18)



19)



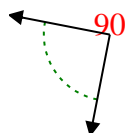
20)





Determine if the angle shown is acute, obtuse, right or straight.

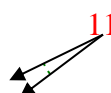
Ex)



1)



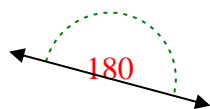
2)



Answers

Ex. right

3)



4)



5)



1. acute

2. acute

3. straight

4. obtuse

5. obtuse

6. obtuse

7. straight

8. obtuse

9. right

10. acute

11. right

12. obtuse

13. obtuse

14. acute

15. acute

16. right

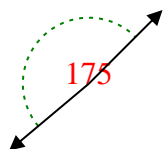
17. acute

18. acute

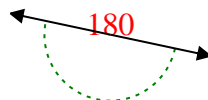
19. obtuse

20. obtuse

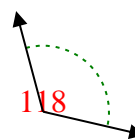
6)



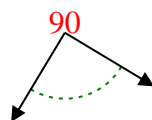
7)



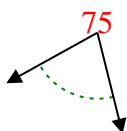
8)



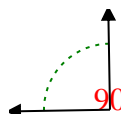
9)



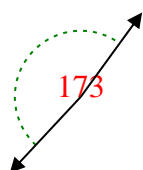
10)



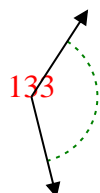
11)



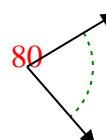
12)



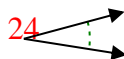
13)



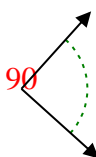
14)



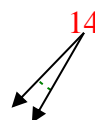
15)



16)



17)



18)



19)



20)

