

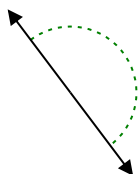


Determine if the angle shown is acute, obtuse, right or straight.

Ex)



1)



2)



Answers

Ex. acute

1. _____

2. _____

3. _____

4. _____

5. _____

6. _____

7. _____

8. _____

9. _____

10. _____

11. _____

12. _____

13. _____

14. _____

15. _____

16. _____

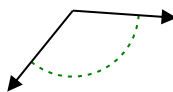
17. _____

18. _____

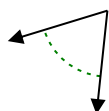
19. _____

20. _____

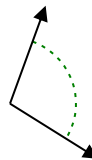
3)



4)



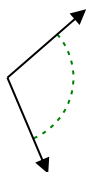
5)



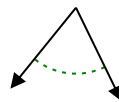
6)



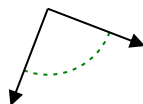
7)



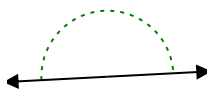
8)



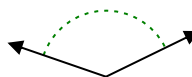
9)



10)



11)



12)



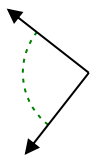
13)



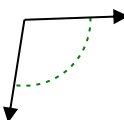
14)



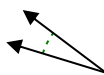
15)



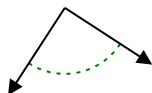
16)



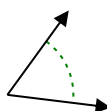
17)



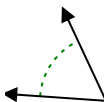
18)



19)



20)



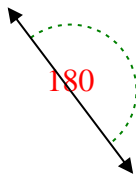


Determine if the angle shown is acute, obtuse, right or straight.

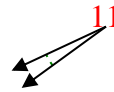
Ex)



1)



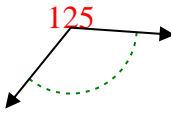
2)



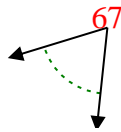
Answers

Ex. acute

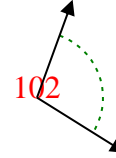
3)



4)

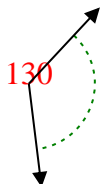


5)

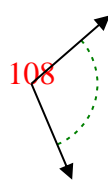


1. straight

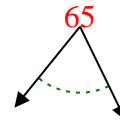
6)



7)

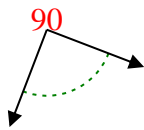


8)

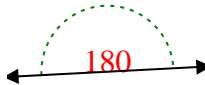


2. acute

9)



10)

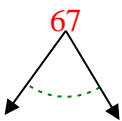


11)

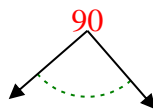


3. obtuse

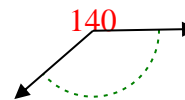
12)



13)

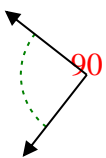


14)

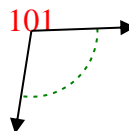


4. acute

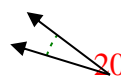
15)



16)

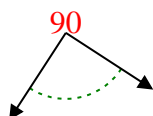


17)

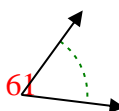


5. obtuse

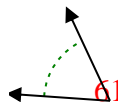
18)



19)



20)



6. obtuse

7. obtuse

8. acute

9. right

10. straight

11. obtuse

12. acute

13. right

14. obtuse

15. right

16. obtuse

17. acute

18. right

19. acute

20. acute