



Determine if the angle shown is 'less', 'more' or 'equal' to 90°.

Ex)



1)



2)



Answers

Ex. less

3)



4)



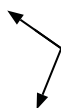
5)



1. _____

2. _____

6)



7)



8)



3. _____

4. _____

5. _____

6. _____

7. _____

9)



10)



11)



8. _____

9. _____

10. _____

12)



13)



14)



11. _____

12. _____

13. _____

15)



16)



17)



14. _____

15. _____

16. _____

18)



19)



20)



17. _____

18. _____

19. _____

20. _____



Determine if the angle shown is 'less', 'more' or 'equal' to 90° .

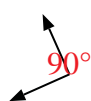
Ex)



1)



2)



Ex.

Answers

less

3)



4)



5)



1.

more

2.

equal

3.

more

4.

equal

5.

equal

6)



7)



8)



6.

more

7.

equal

9)



10)



11)



8.

equal

9.

less

10.

more

12)



13)



14)



11.

less

12.

less

13.

equal

15)



16)



17)



14.

more

15.

less

16.

equal

18)



19)



20)



17.

more

18.

less

19.

more

20.

less



Determine if the angle shown is 'less', 'more' or 'equal' to 90°.

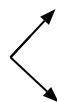
Ex)



1)



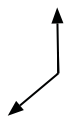
2)



Ex.

less

3)



4)



5)



6)



7)



8)



9)



10)



11)



12)



13)



14)



15)



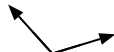
16)



17)



18)



19)



20)



- 1. _____
- 2. _____
- 3. _____
- 4. _____
- 5. _____
- 6. _____
- 7. _____
- 8. _____
- 9. _____
- 10. _____
- 11. _____
- 12. _____
- 13. _____
- 14. _____
- 15. _____
- 16. _____
- 17. _____
- 18. _____
- 19. _____
- 20. _____



Determine if the angle shown is 'less', 'more' or 'equal' to 90°.

Ex)



1)



2)



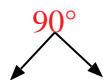
Ex.

less

3)



4)



5)



1.

more

2.

equal

3.

more

4.

equal

5.

equal

6)



7)



8)



6.

less

7.

equal

9)



10)



11)



8.

less

9.

less

10.

less

11.

equal

12)



13)



14)



12.

equal

13.

more

15)



16)



17)



14.

more

15.

less

16.

less

18)



19)



20)



17.

more

18.

more

19.

equal

20.

equal



Determine if the angle shown is 'less', 'more' or 'equal' to 90°.

Ex)



1)



2)



Ex.

less

3)



4)



5)



6)



7)



8)



9)



10)



11)



12)



13)



14)



15)



16)



17)



18)



19)



20)



- 1. _____
- 2. _____
- 3. _____
- 4. _____
- 5. _____
- 6. _____
- 7. _____
- 8. _____
- 9. _____
- 10. _____
- 11. _____
- 12. _____
- 13. _____
- 14. _____
- 15. _____
- 16. _____
- 17. _____
- 18. _____
- 19. _____
- 20. _____



Determine if the angle shown is 'less', 'more' or 'equal' to 90° .

Ex)



1)



2)



Ex.

less

3)



4)



5)



1.

equal

2.

less

3.

more

4.

more

5.

less

6)



7)



8)



6.

less


7.

less

9)



10)



11)



9.

equal

10.

equal

11.

equal

12)



13)



14)



12.

more

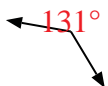
13.

more

15)



16)



17)



15.

less

16.

more

18)



19)



20)



18.

equal

19.

less

20.

equal



Determine if the angle shown is 'less', 'more' or 'equal' to 90°.

Ex)



1)



2)



Ex.

equal

3)



4)



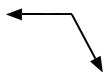
5)



6)



7)



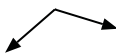
8)



9)



10)



11)



12)



13)



14)



15)



16)



17)



18)



19)



20)

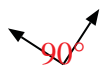


- 1. _____
- 2. _____
- 3. _____
- 4. _____
- 5. _____
- 6. _____
- 7. _____
- 8. _____
- 9. _____
- 10. _____
- 11. _____
- 12. _____
- 13. _____
- 14. _____
- 15. _____
- 16. _____
- 17. _____
- 18. _____
- 19. _____
- 20. _____



Determine if the angle shown is 'less', 'more' or 'equal' to 90°.

Ex)



1)



2)



Ex.

equal

3)



4)



5)



1.

more

2.

more

3.

equal

4.

equal

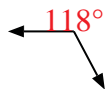
5.

more

6)



7)



8)



6.

equal

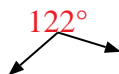
7.

more

9)



10)



11)



8.

less

9.

less

10.

more

12)



13)



14)



11.

less

12.

more

13.

less

15)



16)



17)



14.

equal

15.

less

16.

equal

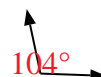
18)



19)



20)



17.

equal

18.

less

19.

less

20.

more



Determine if the angle shown is 'less', 'more' or 'equal' to 90°.


Ex)



1)



2)



Answers

Ex. less

3)



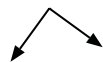
4)



5)



6)



7)



8)



9)



10)



11)



12)



13)



14)



15)



16)



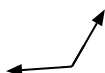
17)



18)



19)



20)



1. _____

2. _____

3. _____

4. _____

5. _____

6. _____

7. _____

8. _____

9. _____

10. _____

11. _____

12. _____

13. _____

14. _____

15. _____

16. _____

17. _____

18. _____

19. _____

20. _____



Determine if the angle shown is 'less', 'more' or 'equal' to 90° .

Ex)



1)



2)



Ex.

Answers

less

3)



4)



5)



1.

less

2.

more

3.

equal

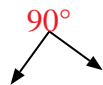
4.

equal

5.

less

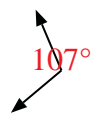
6)



7)



8)



6.

equal

7.

equal

9)



10)



11)



8.

more

9.

less

10.

equal

11.

more

12)



13)



14)



12.

more

13.

less

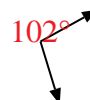
15)



16)



17)



14.

equal

15.

less

16.

equal

18)



19)



20)



17.

more

18.

equal

19.

more

20.

more



Determine if the angle shown is 'less', 'more' or 'equal' to 90°.

Ex)



1)



2)



Answers

Ex. more

3)



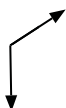
4)



5)



6)



7)



8)



9)



10)



11)



12)



13)



14)



15)



16)



17)



18)



19)



20)



1. _____

2. _____

3. _____

4. _____

5. _____

6. _____

7. _____

8. _____

9. _____

10. _____

11. _____

12. _____

13. _____

14. _____

15. _____

16. _____

17. _____

18. _____

19. _____

20. _____



Determine if the angle shown is 'less', 'more' or 'equal' to 90°.

Ex)



1)



2)



Answers

Ex. more

3)



4)



5)



1. equal

6)



7)



8)



2. less

9)



10)



11)



3. equal

12)



13)



14)



4. more

15)



16)



17)



5. equal

18)



19)



20)



6. more

7. less

8. equal

9. less

10. more

11. equal

12. equal

13. more

14. less

15. more

16. equal

17. less

18. more

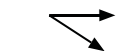
19. less

20. less

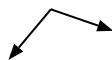


Determine if the angle shown is 'less', 'more' or 'equal' to 90°.

Ex)



1)



2)



Ex.

less

3)



4)



5)



6)



7)



8)



9)



10)



11)



12)



13)



14)



15)



16)



17)



18)



19)



20)



- 1. _____
- 2. _____
- 3. _____
- 4. _____
- 5. _____
- 6. _____
- 7. _____
- 8. _____
- 9. _____
- 10. _____
- 11. _____
- 12. _____
- 13. _____
- 14. _____
- 15. _____
- 16. _____
- 17. _____
- 18. _____
- 19. _____
- 20. _____

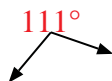


Determine if the angle shown is 'less', 'more' or 'equal' to 90°.


Ex)



1)



2)



Answers

Ex. less

3)



4)



5)



1. more

6)



7)



8)



2. more

3. equal

4. more

5. more

6. less

7. less

9)



10)



11)



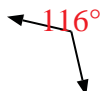
8. less

9. less

10. more

11. less

12)



13)



14)



12. more

13. less

14. equal

15)



16)



17)



15. equal

16. equal

17. equal

18)



19)



20)



18. equal

19. equal

20. equal

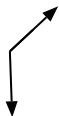


Determine if the angle shown is 'less', 'more' or 'equal' to 90°.

Ex)



1)



2)



Ex.

Answers

equal

1. _____

2. _____

3. _____

4. _____

5. _____

6. _____

7. _____

8. _____

9. _____

10. _____

11. _____

12. _____

13. _____

14. _____

15. _____

16. _____

17. _____

18. _____

19. _____

20. _____

3)



4)



5)



6)



7)



8)



9)



10)



11)



12)



13)



14)



15)



16)




17)



18)



19)



20)





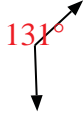
Determine if the angle shown is 'less', 'more' or 'equal' to 90°.

Answers

Ex)



1)



2)



Ex. equal

3)



4)



5)

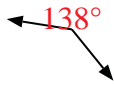


1. more


6)



7)

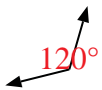


8)



2. less

9)



10)



11)



3. equal

12)



13)



14)



4. less

15)



16)



17)



5. less

18)



19)



20)



6. equal

7. more

8. more

9. more

10. equal

11. less

12. more

13. equal

14. equal

15. less

16. equal

17. more

18. equal

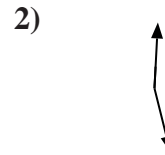
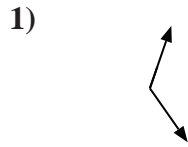
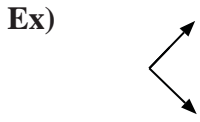
19. more

20. less



Determine if the angle shown is 'less', 'more' or 'equal' to 90°.

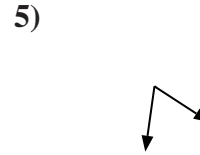
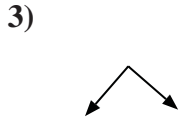
Answers



Ex. equal

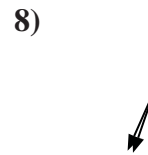
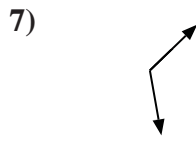
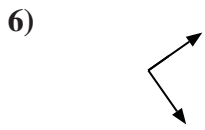
1. _____

2. _____



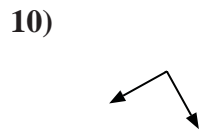
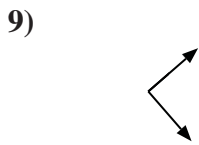
3. _____

4. _____



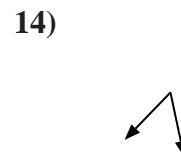
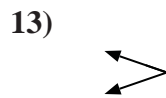
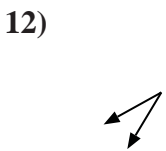
5. _____

6. _____



7. _____

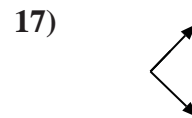
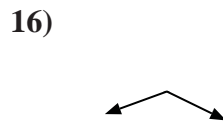
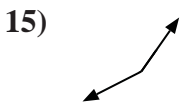
8. _____



9. _____

10. _____

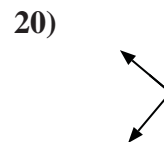
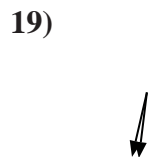
11. _____



12. _____

13. _____

14. _____



15. _____

16. _____

17. _____

18. _____

19. _____

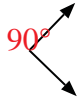
20. _____



Determine if the angle shown is 'less', 'more' or 'equal' to 90° .

Answers

Ex)



1)



2)



Ex. equal

1. more

3)



4)



5)



2. more

3. equal

4. less

6)



7)



8)



5. less

6. equal

7. more

9)



10)



11)



8. less

9. equal

10. equal

12)



13)



14)



11. less


12. less

13. less

15)



16)



17)



14. less

15. more

16. more

18)



19)



20)



17. equal

18. equal

19. less

20. equal



Determine if the angle shown is 'less', 'more' or 'equal' to 90°.

Ex)



1)



2)



Answers

Ex. less

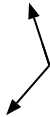
3)



4)



5)



1. _____

2. _____

3. _____

4. _____

5. _____

6)



7)



8)



6. _____

7. _____

8. _____

9. _____

10. _____

11. _____

12. _____

13. _____

14. _____

15. _____

16. _____

17. _____

18. _____

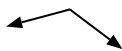
19. _____

20. _____

9)



10)



11)



12)



13)



14)



15)



16)



17)



18)



19)



20)





Determine if the angle shown is 'less', 'more' or 'equal' to 90°.

Ex)



1)



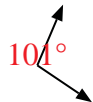
2)



Ex.

less

3)



4)



5)



1.

equal

2.

equal

3.

more

4.

equal

5.

more

6)



7)



8)



6.

equal

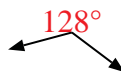
7.

equal

9)



10)



11)



8.

less

9.

equal

10.

more

12)



13)



14)



11.

more

12.

more

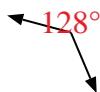
13.

less

15)



16)



17)



14.

equal

15.

less

16.

more

18)



19)



20)



17.

less

18.

equal

19.

less

20.

less

Answers