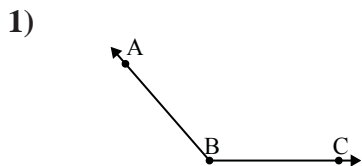


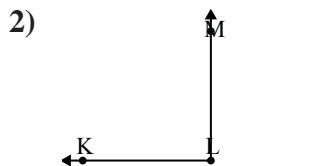


Solve each problem.



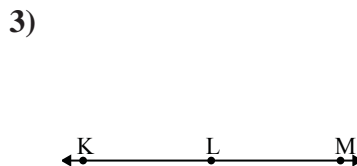
Which choice best represents  $\angle ABC$ ?

- A.  $29^\circ$
- B.  $101^\circ$
- C.  $68^\circ$
- D.  $131^\circ$



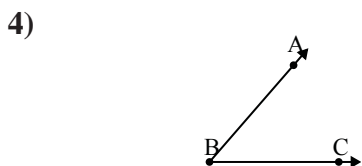
Which choice best represents  $\angle KLM$ ?

- A.  $90^\circ$
- B.  $147^\circ$
- C.  $15^\circ$
- D.  $175^\circ$



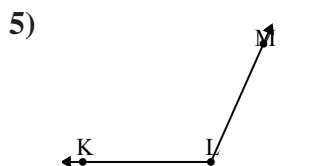
Which choice best represents  $\angle KLM$ ?

- A.  $90^\circ$
- B.  $33^\circ$
- C.  $128^\circ$
- D.  $180^\circ$



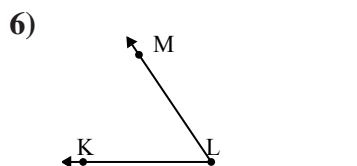
Which choice best represents  $\angle ABC$ ?

- A.  $90^\circ$
- B.  $176^\circ$
- C.  $49^\circ$
- D.  $152^\circ$



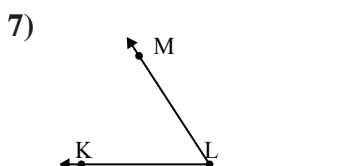
Which choice best represents  $\angle KLM$ ?

- A.  $26^\circ$
- B.  $114^\circ$
- C.  $71^\circ$
- D.  $177^\circ$



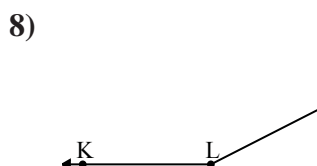
Which choice best represents  $\angle KLM$ ?

- A.  $127^\circ$
- B.  $149^\circ$
- C.  $103^\circ$
- D.  $56^\circ$



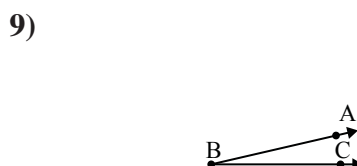
Which choice best represents  $\angle KLM$ ?

- A.  $57^\circ$
- B.  $168^\circ$
- C.  $4^\circ$
- D.  $95^\circ$



Which choice best represents  $\angle KLM$ ?

- A.  $102^\circ$
- B.  $8^\circ$
- C.  $31^\circ$
- D.  $153^\circ$



Which choice best represents  $\angle ABC$ ?

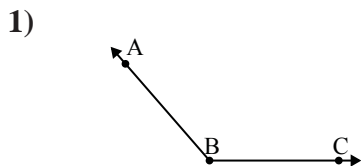
- A.  $13^\circ$
- B.  $152^\circ$
- C.  $49^\circ$
- D.  $109^\circ$

Answers

1. \_\_\_\_\_
2. \_\_\_\_\_
3. \_\_\_\_\_
4. \_\_\_\_\_
5. \_\_\_\_\_
6. \_\_\_\_\_
7. \_\_\_\_\_
8. \_\_\_\_\_
9. \_\_\_\_\_

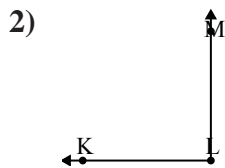


Solve each problem.



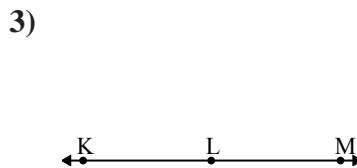
Which choice best represents  $\angle ABC$ ?

- A.  $29^\circ$
- B.  $101^\circ$
- C.  $68^\circ$
- D.  $131^\circ$



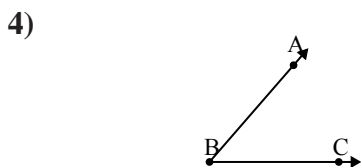
Which choice best represents  $\angle KLM$ ?

- A.  $90^\circ$
- B.  $147^\circ$
- C.  $15^\circ$
- D.  $175^\circ$



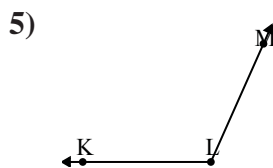
Which choice best represents  $\angle KLM$ ?

- A.  $90^\circ$
- B.  $33^\circ$
- C.  $128^\circ$
- D.  $180^\circ$



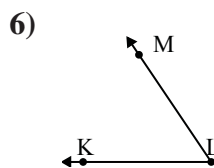
Which choice best represents  $\angle ABC$ ?

- A.  $90^\circ$
- B.  $176^\circ$
- C.  $49^\circ$
- D.  $152^\circ$



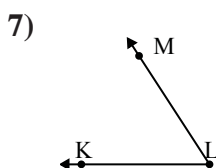
Which choice best represents  $\angle KLM$ ?

- A.  $26^\circ$
- B.  $114^\circ$
- C.  $71^\circ$
- D.  $177^\circ$



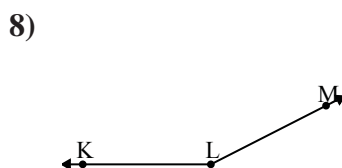
Which choice best represents  $\angle KLM$ ?

- A.  $127^\circ$
- B.  $149^\circ$
- C.  $103^\circ$
- D.  $56^\circ$



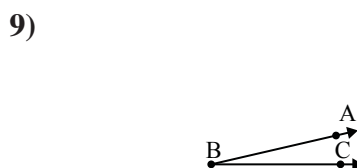
Which choice best represents  $\angle KLM$ ?

- A.  $57^\circ$
- B.  $168^\circ$
- C.  $4^\circ$
- D.  $95^\circ$



Which choice best represents  $\angle KLM$ ?

- A.  $102^\circ$
- B.  $8^\circ$
- C.  $31^\circ$
- D.  $153^\circ$



Which choice best represents  $\angle ABC$ ?

- A.  $13^\circ$
- B.  $152^\circ$
- C.  $49^\circ$
- D.  $109^\circ$

Answers

- 1.     **D**
- 2.     **A**
- 3.     **D**
- 4.     **C**
- 5.     **B**
- 6.     **D**
- 7.     **A**
- 8.     **D**
- 9.     **A**