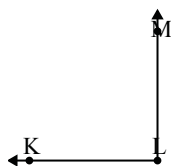




Solve each problem.

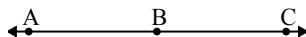
1)



Which choice best represents $\angle KLM$?

- A. 139°
- B. 7°
- C. 90°
- D. 44°

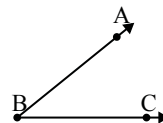
2)



Which choice best represents $\angle ABC$?

- A. 81°
- B. 16°
- C. 180°
- D. 150°

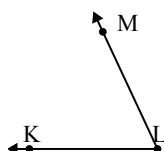
3)



Which choice best represents $\angle ABC$?

- A. 168°
- B. 88°
- C. 129°
- D. 39°

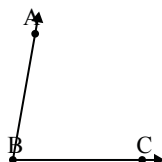
4)



Which choice best represents $\angle KLM$?

- A. 65°
- B. 8°
- C. 138°
- D. 97°

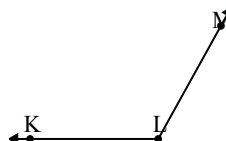
5)



Which choice best represents $\angle ABC$?

- A. 34°
- B. 80°
- C. 9°
- D. 57°

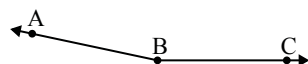
6)



Which choice best represents $\angle KLM$?

- A. 143°
- B. 119°
- C. 30°
- D. 97°

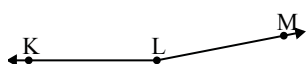
7)



Which choice best represents $\angle ABC$?

- A. 168°
- B. 115°
- C. 87°
- D. 22°

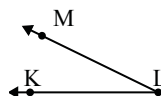
8)



Which choice best represents $\angle KLM$?

- A. 169°
- B. 68°
- C. 141°
- D. 47°

9)



Which choice best represents $\angle KLM$?

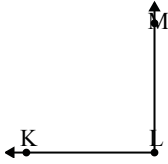
- A. 26°
- B. 117°
- C. 148°
- D. 82°

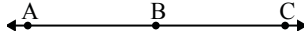
Answers

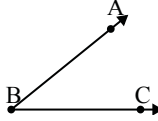
1. _____
2. _____
3. _____
4. _____
5. _____
6. _____
7. _____
8. _____
9. _____

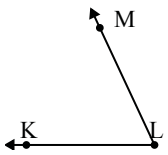


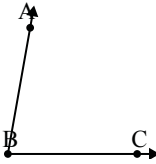
Solve each problem.

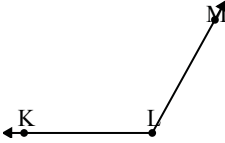
1) 
Which choice best represents $\angle KLM$?
A. 139°
B. 7°
C. 90°
D. 44°


2) 
Which choice best represents $\angle ABC$?
A. 81°
B. 16°
C. 180°
D. 150°

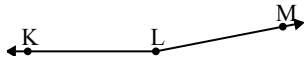
3) 
Which choice best represents $\angle ABC$?
A. 168°
B. 88°
C. 129°
D. 39°

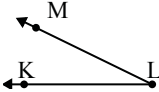
4) 
Which choice best represents $\angle KLM$?
A. 65°
B. 8°
C. 138°
D. 97°

5) 
Which choice best represents $\angle ABC$?
A. 34°
B. 80°
C. 9°
D. 57°

6) 
Which choice best represents $\angle KLM$?
A. 143°
B. 119°
C. 30°
D. 97°

7) 
Which choice best represents $\angle ABC$?
A. 168°
B. 115°
C. 87°
D. 22°

8) 
Which choice best represents $\angle KLM$?
A. 169°
B. 68°
C. 141°
D. 47°

9) 
Which choice best represents $\angle KLM$?
A. 26°
B. 117°
C. 148°
D. 82°

Answers

1. **C**
2. **C**
3. **D**
4. **A**
5. **B**
6. **B**
7. **A**
8. **A**
9. **A**