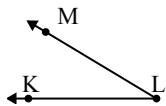




Solve each problem.

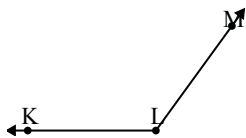
1)



Which choice best represents  $\angle KLM$ ?

- A.  $180^\circ$
- B.  $57^\circ$
- C.  $115^\circ$
- D.  $31^\circ$

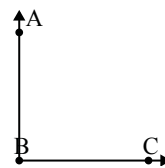
2)



Which choice best represents  $\angle KLM$ ?

- A.  $180^\circ$
- B.  $103^\circ$
- C.  $81^\circ$
- D.  $126^\circ$

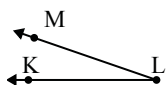
3)



Which choice best represents  $\angle ABC$ ?

- A.  $90^\circ$
- B.  $151^\circ$
- C.  $3^\circ$
- D.  $54^\circ$

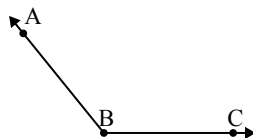
4)



Which choice best represents  $\angle KLM$ ?

- A.  $99^\circ$
- B.  $19^\circ$
- C.  $169^\circ$
- D.  $46^\circ$

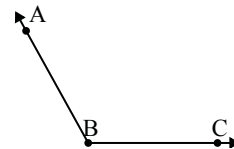
5)



Which choice best represents  $\angle ABC$ ?

- A.  $20^\circ$
- B.  $47^\circ$
- C.  $129^\circ$
- D.  $155^\circ$

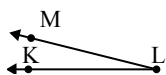
6)



Which choice best represents  $\angle ABC$ ?

- A.  $119^\circ$
- B.  $98^\circ$
- C.  $169^\circ$
- D.  $9^\circ$

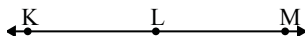
7)



Which choice best represents  $\angle KLM$ ?

- A.  $85^\circ$
- B.  $14^\circ$
- C.  $146^\circ$
- D.  $178^\circ$

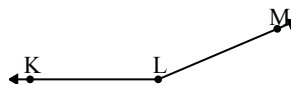
8)



Which choice best represents  $\angle KLM$ ?

- A.  $2^\circ$
- B.  $153^\circ$
- C.  $113^\circ$
- D.  $180^\circ$

9)



Which choice best represents  $\angle KLM$ ?

- A.  $2^\circ$
- B.  $112^\circ$
- C.  $157^\circ$
- D.  $70^\circ$

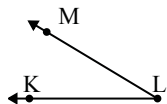
Answers

1. \_\_\_\_\_
2. \_\_\_\_\_
3. \_\_\_\_\_
4. \_\_\_\_\_
5. \_\_\_\_\_
6. \_\_\_\_\_
7. \_\_\_\_\_
8. \_\_\_\_\_
9. \_\_\_\_\_



Solve each problem.

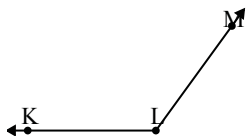
1)



Which choice best represents  $\angle KLM$ ?

- A.  $180^\circ$
- B.  $57^\circ$
- C.  $115^\circ$
- D.  $31^\circ$

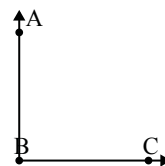
2)



Which choice best represents  $\angle KLM$ ?

- A.  $180^\circ$
- B.  $103^\circ$
- C.  $81^\circ$
- D.  $126^\circ$

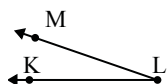
3)



Which choice best represents  $\angle ABC$ ?

- A.  $90^\circ$
- B.  $151^\circ$
- C.  $3^\circ$
- D.  $54^\circ$

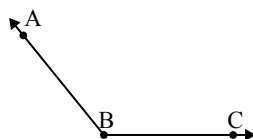
4)



Which choice best represents  $\angle KLM$ ?

- A.  $99^\circ$
- B.  $19^\circ$
- C.  $169^\circ$
- D.  $46^\circ$

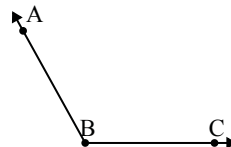
5)



Which choice best represents  $\angle ABC$ ?

- A.  $20^\circ$
- B.  $47^\circ$
- C.  $129^\circ$
- D.  $155^\circ$

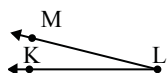
6)



Which choice best represents  $\angle ABC$ ?

- A.  $119^\circ$
- B.  $98^\circ$
- C.  $169^\circ$
- D.  $9^\circ$

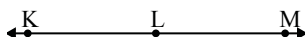
7)



Which choice best represents  $\angle KLM$ ?

- A.  $85^\circ$
- B.  $14^\circ$
- C.  $146^\circ$
- D.  $178^\circ$

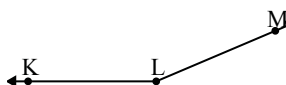
8)



Which choice best represents  $\angle KLM$ ?

- A.  $2^\circ$
- B.  $153^\circ$
- C.  $113^\circ$
- D.  $180^\circ$

9)



Which choice best represents  $\angle KLM$ ?

- A.  $2^\circ$
- B.  $112^\circ$
- C.  $157^\circ$
- D.  $70^\circ$

Answers

1. **D**
2. **D**
3. **A**
4. **B**
5. **C**
6. **A**
7. **B**
8. **D**
9. **C**