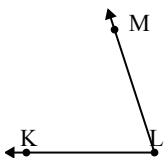


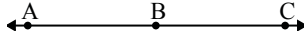


Solve each problem.

1) 

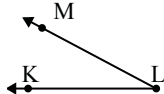
Which choice best represents  $\angle KLM$ ?

A.  $102^\circ$   
 B.  $72^\circ$   
 C.  $38^\circ$   
 D.  $136^\circ$

2) 

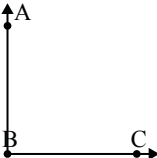
Which choice best represents  $\angle ABC$ ?

A.  $156^\circ$   
 B.  $24^\circ$   
 C.  $180^\circ$   
 D.  $60^\circ$

3) 

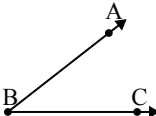
Which choice best represents  $\angle KLM$ ?

A.  $107^\circ$   
 B.  $145^\circ$   
 C.  $71^\circ$   
 D.  $28^\circ$

4) 

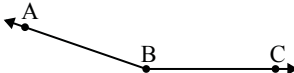
Which choice best represents  $\angle ABC$ ?

A.  $1^\circ$   
 B.  $46^\circ$   
 C.  $90^\circ$   
 D.  $174^\circ$

5) 

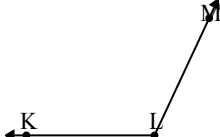
Which choice best represents  $\angle ABC$ ?

A.  $109^\circ$   
 B.  $12^\circ$   
 C.  $77^\circ$   
 D.  $38^\circ$

6) 

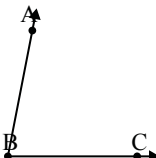
Which choice best represents  $\angle ABC$ ?

A.  $44^\circ$   
 B.  $95^\circ$   
 C.  $161^\circ$   
 D.  $130^\circ$

7) 

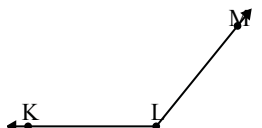
Which choice best represents  $\angle KLM$ ?

A.  $16^\circ$   
 B.  $50^\circ$   
 C.  $115^\circ$   
 D.  $137^\circ$

8) 

Which choice best represents  $\angle ABC$ ?

A.  $14^\circ$   
 B.  $163^\circ$   
 C.  $79^\circ$   
 D.  $58^\circ$

9) 

Which choice best represents  $\angle KLM$ ?

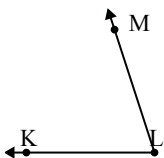
A.  $28^\circ$   
 B.  $76^\circ$   
 C.  $108^\circ$   
 D.  $129^\circ$

Answers

1. \_\_\_\_\_
2. \_\_\_\_\_
3. \_\_\_\_\_
4. \_\_\_\_\_
5. \_\_\_\_\_
6. \_\_\_\_\_
7. \_\_\_\_\_
8. \_\_\_\_\_
9. \_\_\_\_\_

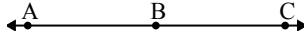


Solve each problem.

1) 

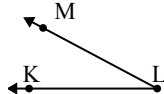
Which choice best represents  $\angle KLM$ ?

A.  $102^\circ$   
 B.  $72^\circ$   
 C.  $38^\circ$   
 D.  $136^\circ$

2) 

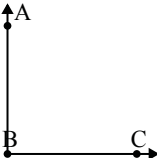
Which choice best represents  $\angle ABC$ ?

A.  $156^\circ$   
 B.  $24^\circ$   
 C.  $180^\circ$   
 D.  $60^\circ$

3) 

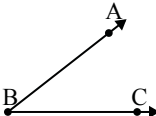
Which choice best represents  $\angle KLM$ ?

A.  $107^\circ$   
 B.  $145^\circ$   
 C.  $71^\circ$   
 D.  $28^\circ$

4) 

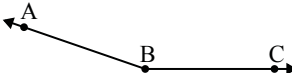
Which choice best represents  $\angle ABC$ ?

A.  $1^\circ$   
 B.  $46^\circ$   
 C.  $90^\circ$   
 D.  $174^\circ$

5) 

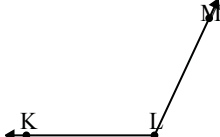
Which choice best represents  $\angle ABC$ ?

A.  $109^\circ$   
 B.  $12^\circ$   
 C.  $77^\circ$   
 D.  $38^\circ$

6) 

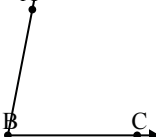
Which choice best represents  $\angle ABC$ ?

A.  $44^\circ$   
 B.  $95^\circ$   
 C.  $161^\circ$   
 D.  $130^\circ$

7) 

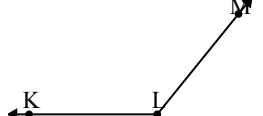
Which choice best represents  $\angle KLM$ ?

A.  $16^\circ$   
 B.  $50^\circ$   
 C.  $115^\circ$   
 D.  $137^\circ$

8) 

Which choice best represents  $\angle ABC$ ?

A.  $14^\circ$   
 B.  $163^\circ$   
 C.  $79^\circ$   
 D.  $58^\circ$

9) 

Which choice best represents  $\angle KLM$ ?

A.  $28^\circ$   
 B.  $76^\circ$   
 C.  $108^\circ$   
 D.  $129^\circ$

Answers

1. **B**
2. **C**
3. **D**
4. **C**
5. **D**
6. **C**
7. **C**
8. **C**
9. **D**