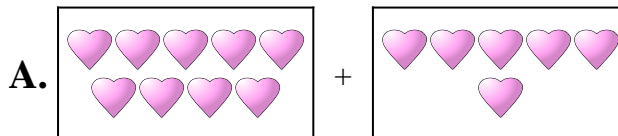


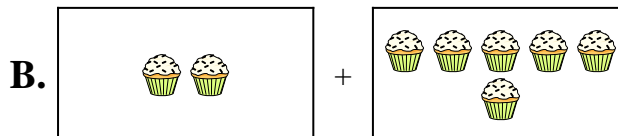


Match each addition equation to its visual equivalent.

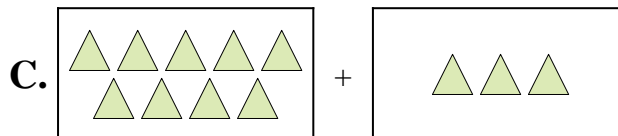
1) $8 + 5$



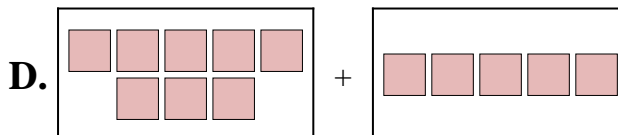
2) $4 + 8$



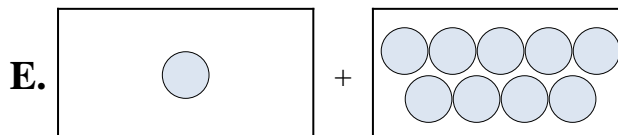
3) $9 + 6$



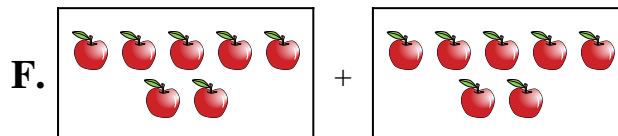
4) $6 + 10$



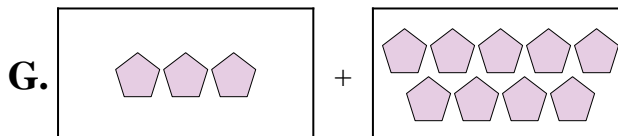
5) $7 + 7$



6) $1 + 9$



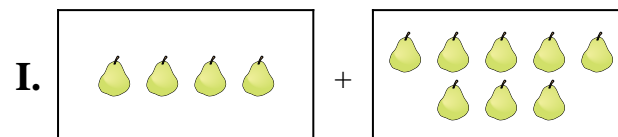
7) $2 + 6$



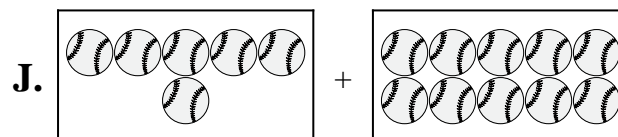
8) $6 + 9$



9) $9 + 3$



10) $3 + 9$



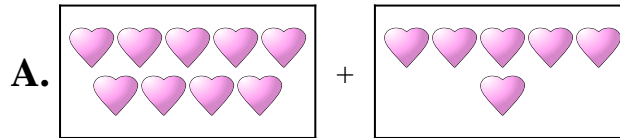
Answers

1. _____
2. _____
3. _____
4. _____
5. _____
6. _____
7. _____
8. _____
9. _____
10. _____

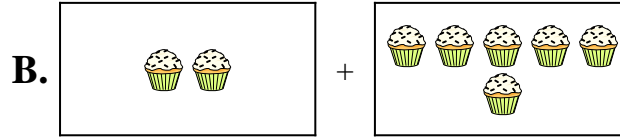


Match each addition equation to its visual equivalent.

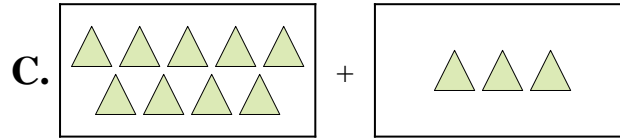
1) $8 + 5$



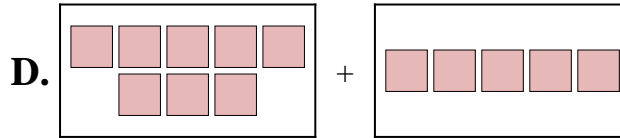
2) $4 + 8$



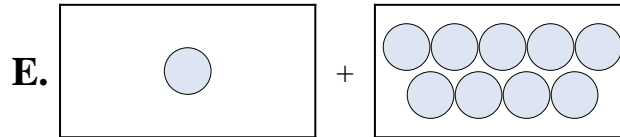
3) $9 + 6$



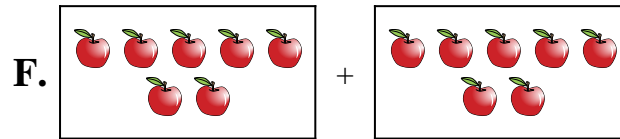
4) $6 + 10$



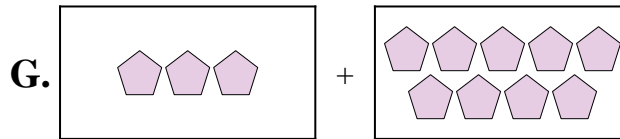
5) $7 + 7$



6) $1 + 9$



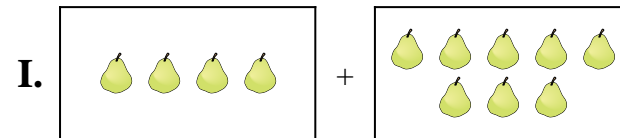
7) $2 + 6$



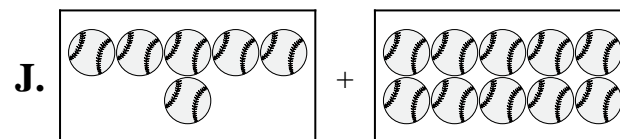
8) $6 + 9$



9) $9 + 3$



10) $3 + 9$



Answers

1. **D**

2. **I**

3. **A**

4. **J**

5. **F**

6. **E**

7. **B**

8. **H**

9. **C**

10. **G**